




Student: \_\_\_\_\_

Symphony EXTENSIONS


Date: \_\_\_\_\_

2 | More/Less/Same


1. Write the number that is **1 MORE** than...




\_\_\_\_\_



\_\_\_\_\_



\_\_\_\_\_



\_\_\_\_\_


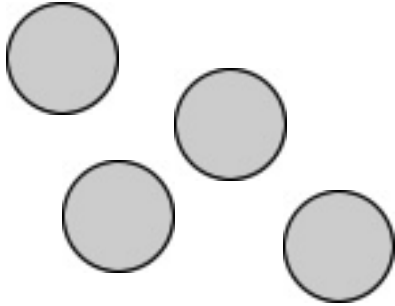
2. Write three numbers that are **LESS** than 7.

\_\_\_\_\_

\_\_\_\_\_

\_\_\_\_\_

3. Make a group that has the **SAME** as...



4. What number is **1 LESS** than...

8

\_\_\_\_\_

1

\_\_\_\_\_

4

\_\_\_\_\_

7

\_\_\_\_\_

5. Write the missing numbers.

3

=

\_\_\_\_\_

=

9

\_\_\_\_\_