




Student: _____

Symphony EXTENSIONS


Date: _____

2 | More/Less/Same


1. Write the number that is **1 MORE** than...




3



8



5



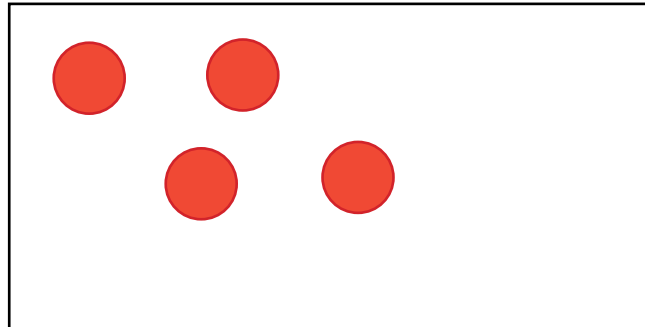
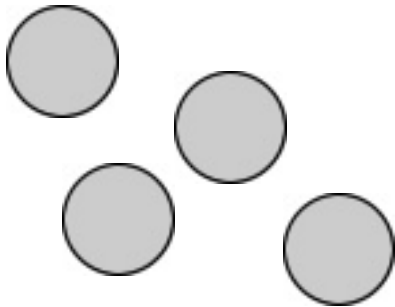
4

ANSWER KEY

2. Write three numbers that are **LESS** than 7.

any 3: 0, 1, 2, 3, 4, 5, 6

3. Make a group that has the **SAME** as...



(any group of four items)

ANSWER KEY

4. What number is **1 LESS** than...

$$8 \quad \underline{7}$$

$$1 \quad \underline{0}$$

$$4 \quad \underline{3}$$

$$7 \quad \underline{6}$$

5. Write the missing numbers.

$$3 = \underline{3}$$

$$\underline{9} = 9$$