




Student: \_\_\_\_\_

Symphony EXTENSIONS


Date: \_\_\_\_\_

7 | Tens



How many tens? \_\_\_\_\_

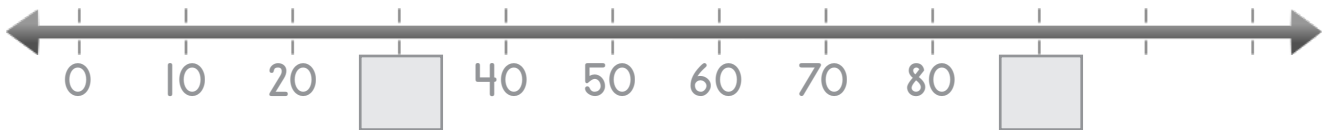
Write the number: \_\_\_\_\_



How many tens? \_\_\_\_\_

Write the number: \_\_\_\_\_

3. Fill in missing numbers on the number line below:



4. Fill in missing numbers below:

\_\_\_\_\_, 40, 30, \_\_\_\_\_, 10, 0

5. 10 less than 90 is \_\_\_\_\_

6. 70 is 10 more than \_\_\_\_\_

7. Solve:

$$30 + 50 = \underline{\quad}$$

$$\underline{\quad} + 70 = 80 + 10$$

$$40 = \underline{\quad} + 10$$

$$50 = 30 + \underline{\quad}$$

8. A box of markers comes with 10 in a pack. One student emptied 6 boxes of markers into a blue bin for all to use. The teacher emptied 8 boxes of markers into a red bin for all to use.

★How many markers are in the blue bin? \_\_\_\_\_

★How many markers are in the red bin? \_\_\_\_\_

★Which bin has more? \_\_\_\_\_

★How many more? \_\_\_\_\_