




Student: _____

Symphony EXTENSIONS

Date: _____


7 | Tens



How many tens? 3

Write the number: 30

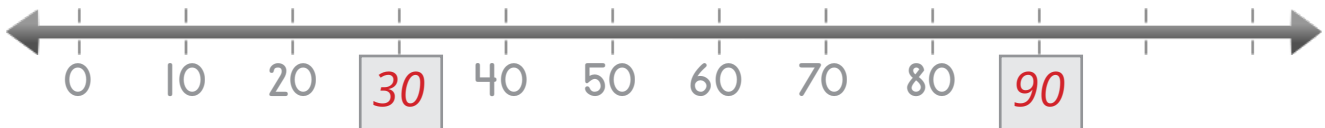
ANSWER KEY



How many tens? 6

Write the number: 60

3. Fill in missing numbers on the number line below:



4. Fill in missing numbers below:

50, 40, 30, 20, 10, 0

5. 10 less than 90 is 80

6. 70 is 10 more than 60

7. Solve:

$$30 + 50 = \underline{80}$$

$$\underline{20} + 70 = 80 + 10$$

$$40 = \underline{30} + 10$$

$$50 = 30 + \underline{20}$$

8. A box of markers comes with 10 in a pack. One student emptied 6 boxes of markers into a blue bin for all to use. The teacher emptied 8 boxes of markers into a red bin for all to use.

★How many markers are in the blue bin? 60

★How many markers are in the red bin? 80

★Which bin has more? the red bin

★How many more? 20 more