




Student: _____

Symphony EXTENSIONS

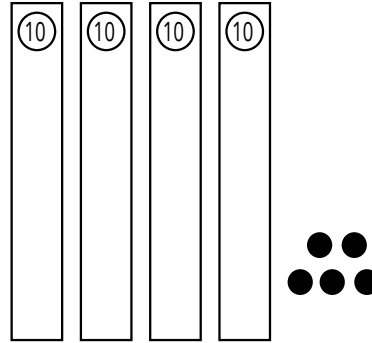
Date: _____

8 | Add & Subtract with 10s

What do you add to this...



...to get this?



ANSWER KEY

1a. Your answer: 5 or 

1a. Write a number sentence to show what you did:

$40 + 5 = 45$

1b. Use the same 3 numbers as above, and write a subtraction number sentence:

$45 - 5 = 40$ or $45 - 40 = 5$

2. Solve:

$45 + 20 = \underline{65}$ $65 - 45 = \underline{20}$ $65 - 20 = \underline{45}$

3. When you see **76** what number is 10 more? 86

4. When you see **49** what number is 10 less? 39

5. Circle all that are TRUE:

$$22 + 40 = 70 + 3$$

$$78 - 10 = 58 + 10$$

$$75 + 20 = 20 + 75$$


$$63 = 20 + 40 + 9$$

$$40 + 13 = 40 - 13$$

ANSWER KEY

4. Four kids are at the park. They want more friends to come and play soccer. They want to make 2 teams with 7 kids on each team. How many more friends do they need to make the teams? Use a model to help answer this question.

My Model: *Sample model showing two groups of 7.*



My Solution:

They need 10 more friends to make the teams.