
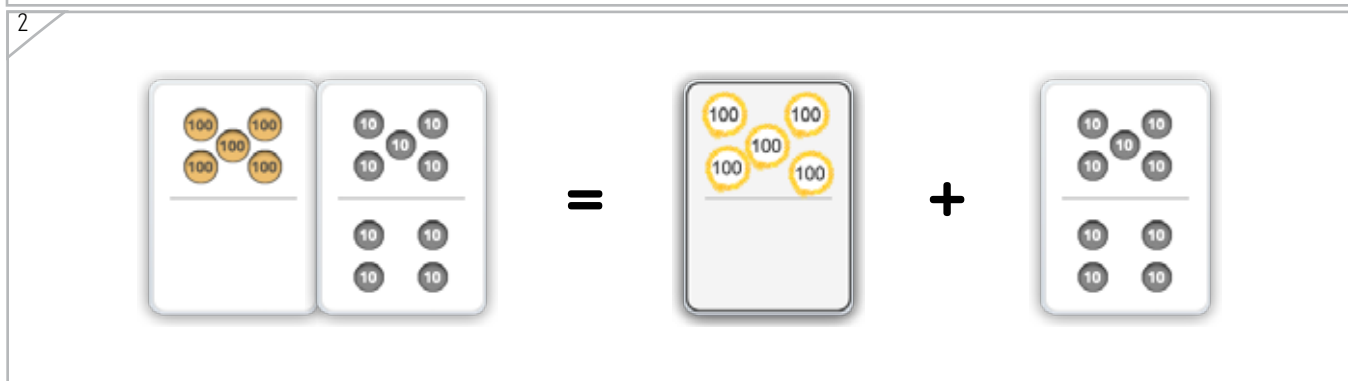
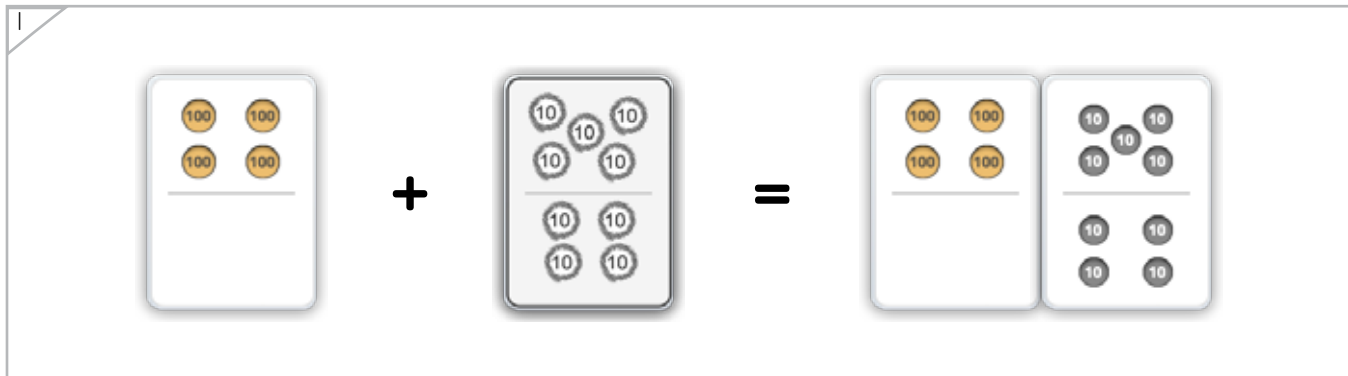
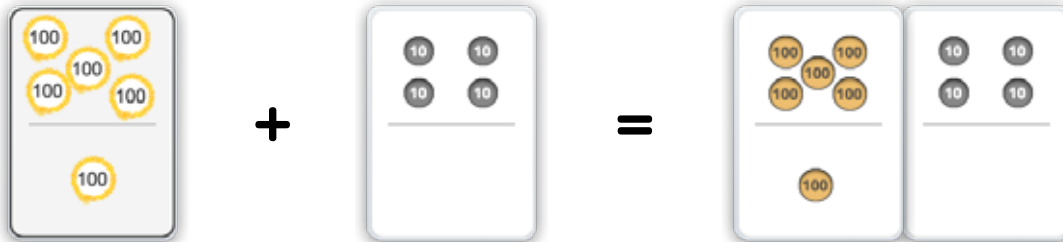


Name: _____ Date: _____



Draw a dot card that makes the dot cards the same when they are put together.

Example



ANSWER KEY

Copyright © 2014 Symphony Learning LLC. Permission is granted to reproduce this sheet for classroom use.



Name: _____

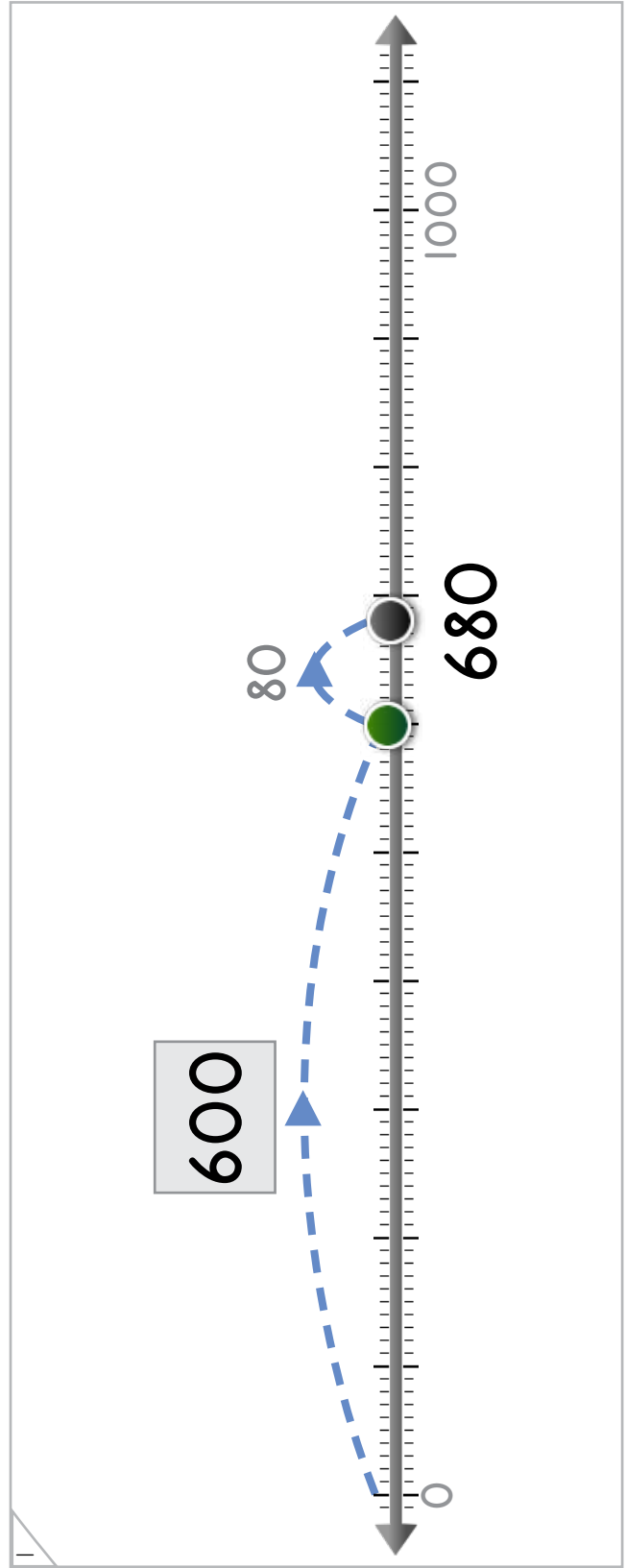
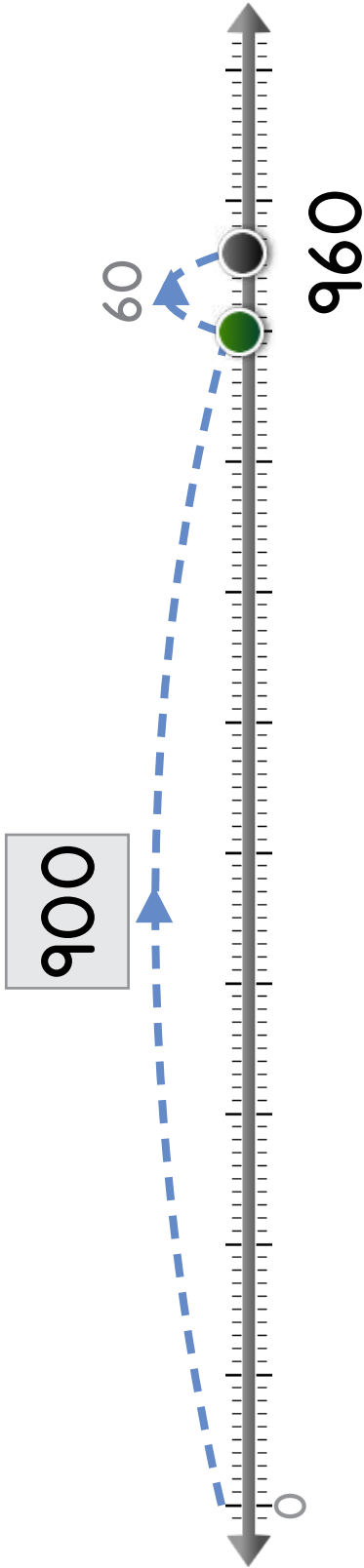
Date: _____



Manipulatives

How many spaces does the dot jump?


Example



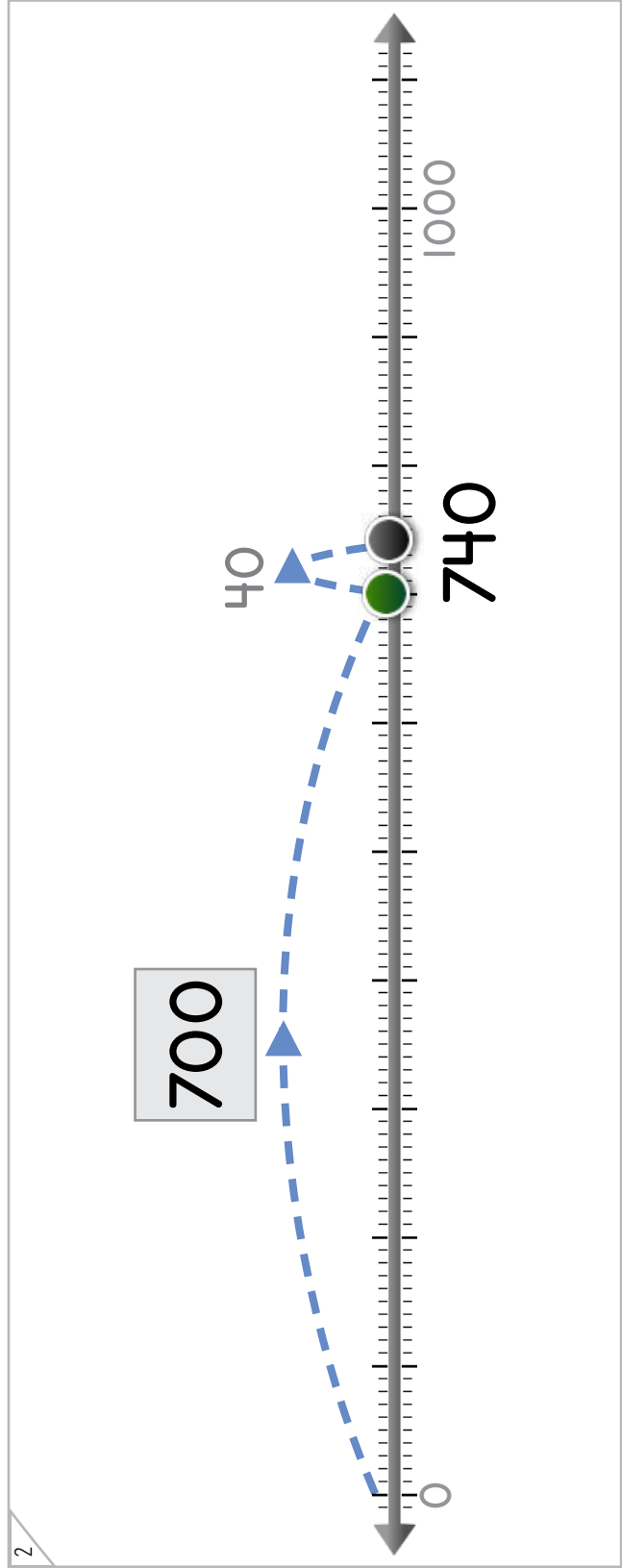

ANSWER KEY

Copyright © 2014 Symphony Learning LLC. Permission is granted to reproduce this sheet for classroom use.





How many spaces does the dot jump?



ANSWER KEY

Copyright © 2014 Symphony Learning LLC. Permission is granted to reproduce this sheet for classroom use.





Draw dot cards and numbers to match.

1

$$300 + 20 = 320$$

2

$$300 + 10 = 310$$

3

$$780 = 700 + 80$$

ANSWER KEY



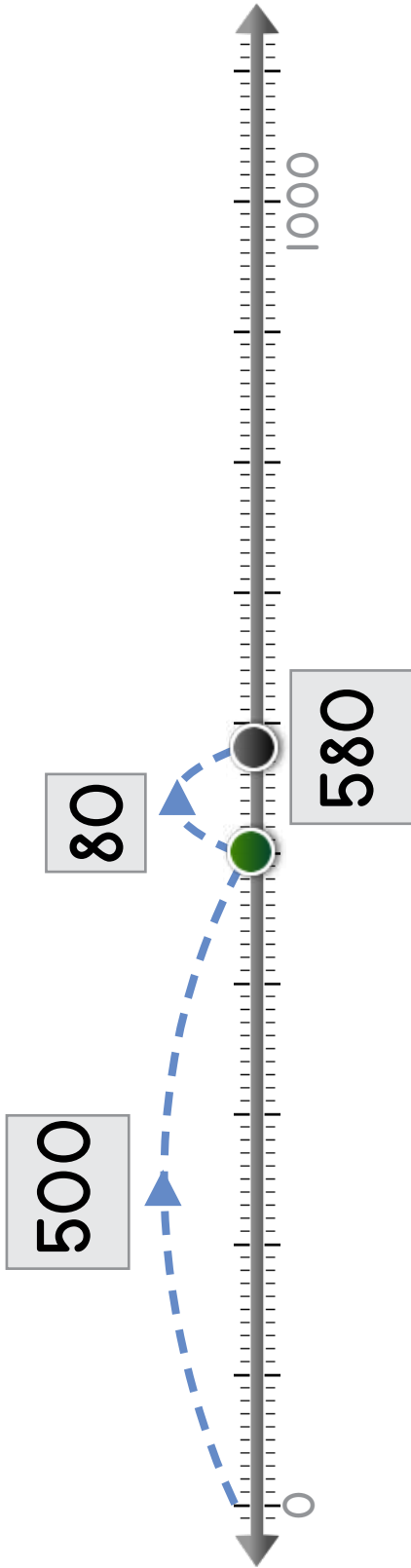
Name: _____

Date: _____

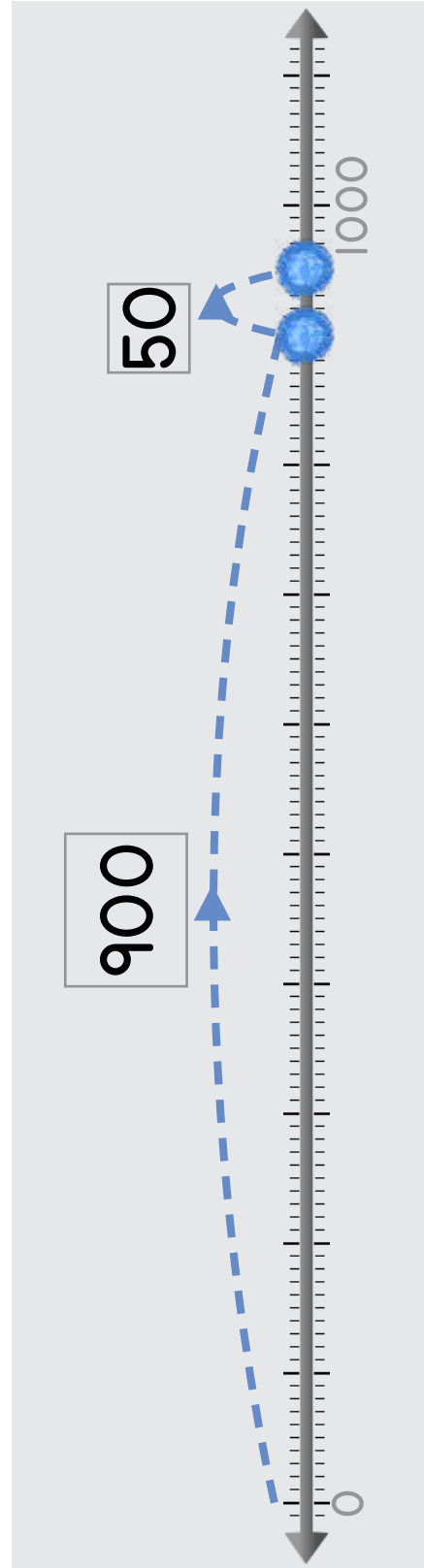


Manipulatives and Symbols

Draw jumping dots and numbers on the number line to match.



$$500 + 80 = 580$$



$$900 + 50 = 950$$

ANSWER KEY

Copyright © 2014 Symphony Learning LLC. Permission is granted to reproduce this sheet for classroom use.



Name: _____

Date: _____



Manipulatives and Symbols

Draw jumping dots and numbers to match.

1

1000

0

100

70

$100 + 70 = 170$

2

1000

0

800

80

880

80

$800 + 80 = 880$

ANSWER KEY

Copyright © 2014 Symphony Learning LLC. Permission is granted to reproduce this sheet for classroom use.



Name: _____ Date: _____



Symbols

Complete each number fact.

| |
|----------------------------------|
| $400 + \boxed{60} = 460$ |
| $\boxed{70} + 800 = 870$ |
| $950 = \boxed{900} + 50$ |
| $500 + \boxed{20} = 520$ |
| $610 = \boxed{600} + 10$ |
| $900 + \boxed{90} = 990$ |
| $\boxed{40} + 300 = 340$ |
| $720 = \boxed{20} + 700$ |
| $\boxed{200} + \boxed{30} = 230$ |

multiple correct
solutions are possible

ANSWER KEY

Copyright © 2014 Symphony Learning LLC. Permission is granted to reproduce this sheet for classroom use.



Name: _____ Date: _____



Symbols

Complete each number fact.

| |
|----------------------------------|
| $200 + \boxed{60} = 260$ |
| $\boxed{70} + 900 = 970$ |
| $850 = \boxed{800} + 50$ |
| $700 + \boxed{20} = 720$ |
| $310 = \boxed{300} + 10$ |
| $90 + \boxed{200} = 290$ |
| $\boxed{500} + 40 = 540$ |
| $440 = \boxed{400} + 40$ |
| $\boxed{100} + \boxed{30} = 130$ |

multiple correct
solutions are possible

ANSWER KEY

Copyright © 2014 Symphony Learning LLC. Permission is granted to reproduce this sheet for classroom use.



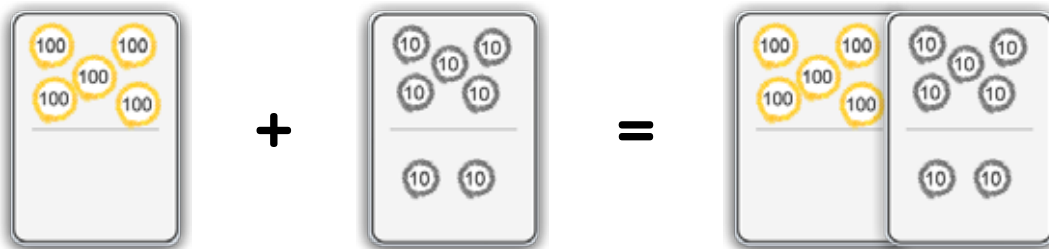


Read the story.

500 students were attending the school play. How many more students need to attend to make the total students attending equal 570?

ANSWER KEY

Draw dot cards to make a model for the story.

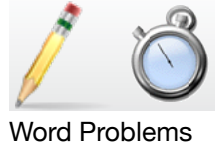


Write a number fact that matches your model.

$$\boxed{500} + \boxed{70} = \boxed{570}$$

Answer: 70 students

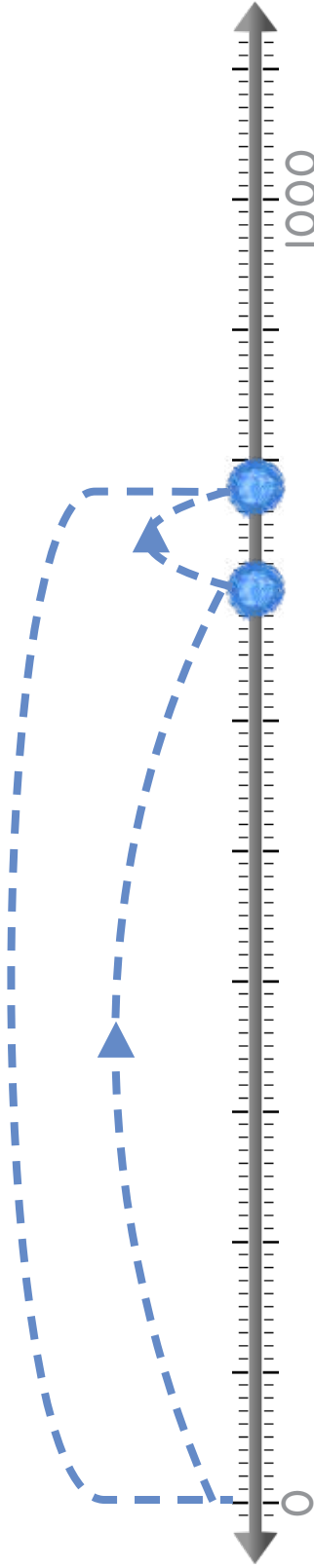




Read the story.

A baby elephant weighed 700 pounds. How many more pounds does it need to gain to weigh 780?

Draw dots to make a model for the story.



Write a number fact that matches your model.

$$700 + 80 = 780$$

Answer: 80 pounds

ANSWER KEY

