


Name: _____ Date: _____



Draw the missing dot card.

Example

1


2

3

ANSWER KEY

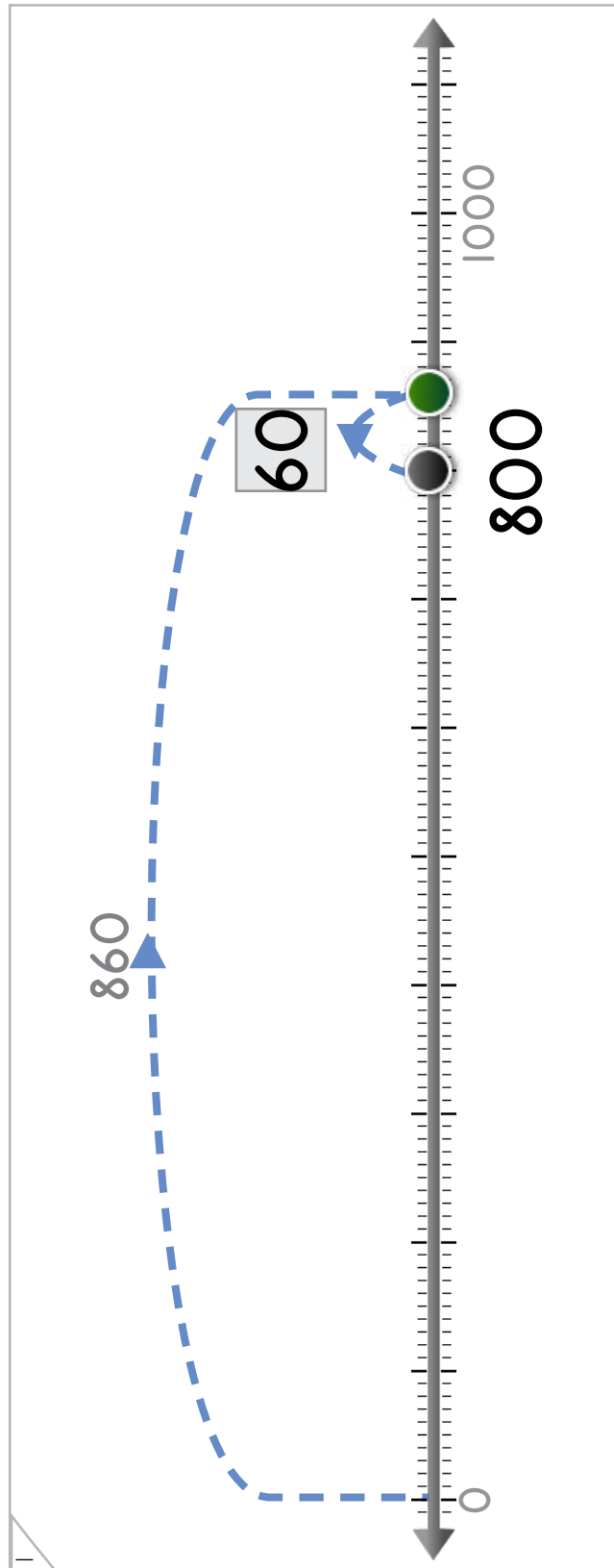
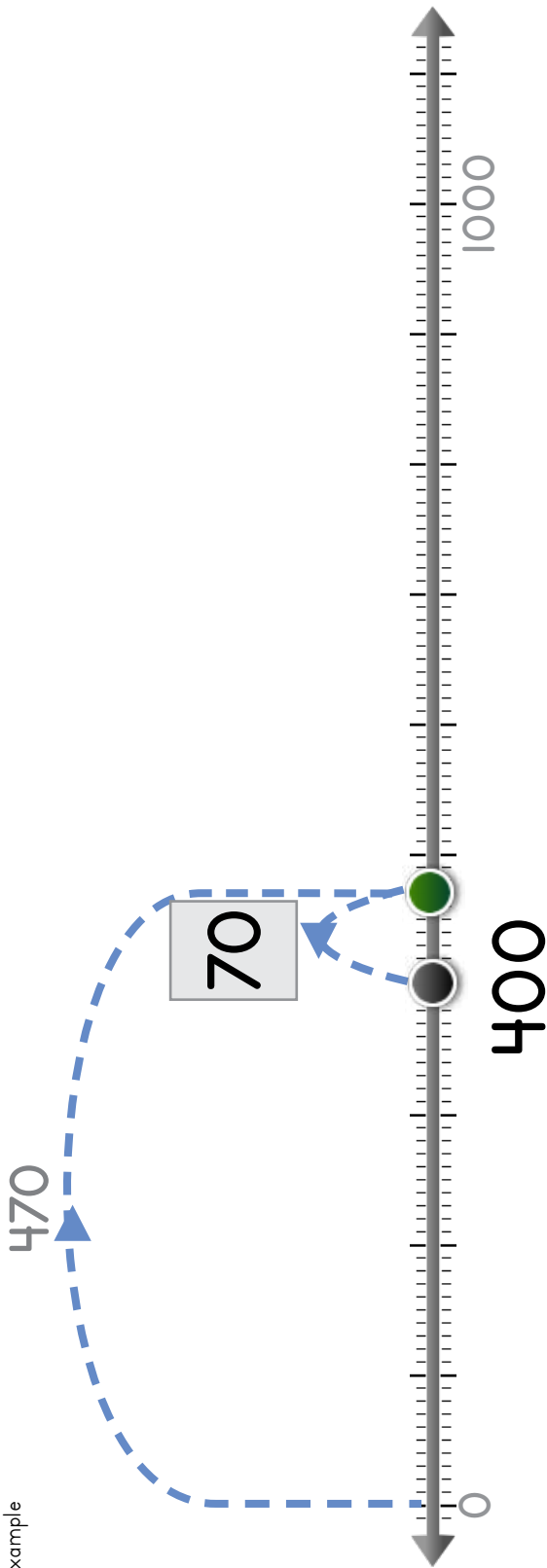
Copyright © 2014 Symphony Learning LLC. Permission is granted to reproduce this sheet for classroom use.





Write the number that the dot jumps back.

Example



ANSWER KEY

Copyright © 2014 Symphony Learning LLC. Permission is granted to reproduce this sheet for classroom use.

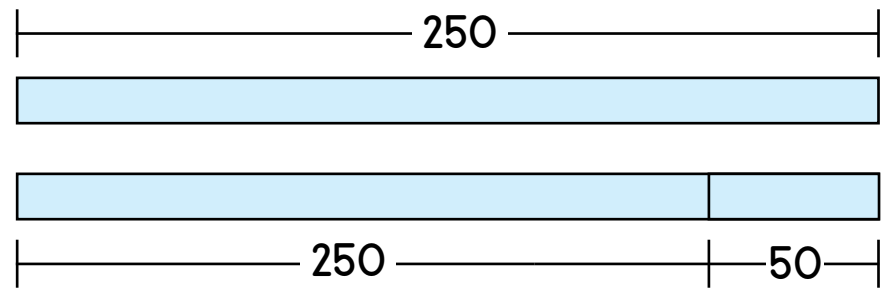


Name: _____ Date: _____



Complete each bar model.

Example



ANSWER KEY

Three sets of bar models for subtraction. Each set consists of a top line with a total value, a solid light blue bar, a divided light blue bar, and a number line with brackets for the total and the missing part.

- Set 1: Total 320, missing part 20. The number 300 is in a gray box.
- Set 2: Total 640, missing part 40. The number 600 is in a gray box.
- Set 3: Total 600, missing part 40. The number 560 is in a gray box.

Copyright © 2014 Symphony Learning LLC. Permission is granted to reproduce this sheet for classroom use.





Draw dot cards and numbers to match.

1

$$920 - 20 = 900$$

2

$$780 - 80 = 700$$

3


$$800 = 890 - 90$$

ANSWER KEY



Name: _____

Date: _____



Manipulatives and Symbols

The dot jumps two times. Write the numbers and dots to complete the number problem.

1

980

900 = 980 - 80

2

870

870 - 70 = 800

ANSWER KEY

Copyright © 2014 Symphony Learning LLC. Permission is granted to reproduce this sheet for classroom use.



Name: _____ Date: _____

Complete each bar model and number sentence.



Manipulatives and Symbols

1

100

20

120

$$\boxed{100} = 120 - \boxed{20}$$

ANSWER KEY

2

400

30

430

$$\boxed{400} = \boxed{430} - 30$$

Copyright © 2014 Symphony Learning LLC. Permission is granted to reproduce this sheet for classroom use.



Name: _____ Date: _____



Symbols

Complete each number fact.

360	-	60	=	300
500	=	520	-	20
820	-	20	=	800
600	=	640	-	40
790	-	90	=	700
200	=	250	-	50
400	=	470	-	70
900	+	90	=	990
100	=	120	-	20

ANSWER KEY

Copyright © 2014 Symphony Learning LLC. Permission is granted to reproduce this sheet for classroom use.



Name: _____ Date: _____



Symbols

Complete each number fact.

$$260 - 60 = 200$$

$$900 = 990 - 90$$

$$800 + 50 = 850$$

$$720 - 20 = 700$$

$$600 = 610 - 10$$

$$380 - 80 = 300$$

$$430 - 30 = 400$$

$$440 = 480 - 40$$

$$700 - 50 = 650$$

multiple correct
solutions are possible

ANSWER KEY

Copyright © 2014 Symphony Learning LLC. Permission is granted to reproduce this sheet for classroom use.



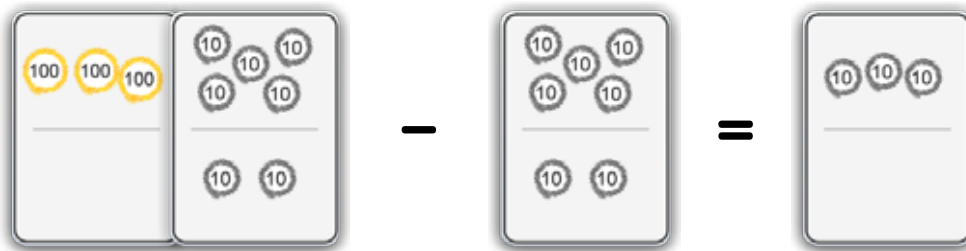


Read the story.

Joe drove for a total of 300 miles. If it takes 370 miles to reach his destination, how many more miles does Joe need to drive before he arrives?

ANSWER KEY

Draw dot cards to make a model for the story.




Write a number fact that matches your model.

$$\boxed{370} - \boxed{70} = \boxed{300}$$

Answer: 70 miles

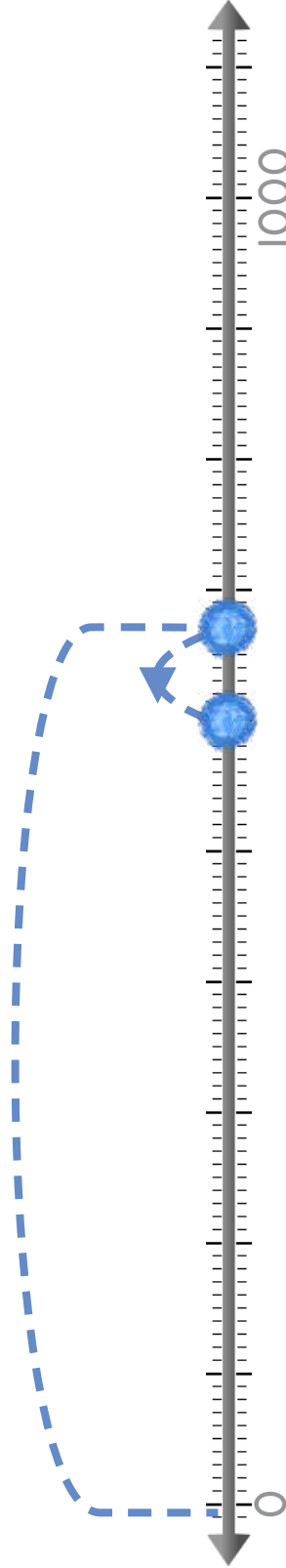




Read the story.

Marla bagged 600 leaves before it rained. How many more leaves does she need to put in the bag to make the total 670?

Draw dots to make a model for the story.



Write a number fact that matches your model.

$$670 - 70 = 600$$

Answer: 70 leaves

ANSWER KEY

