
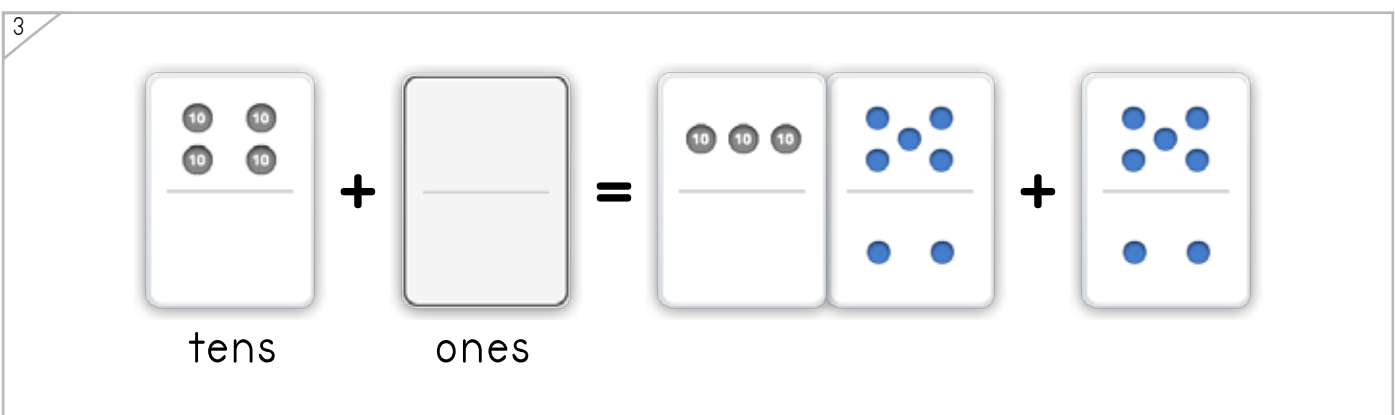
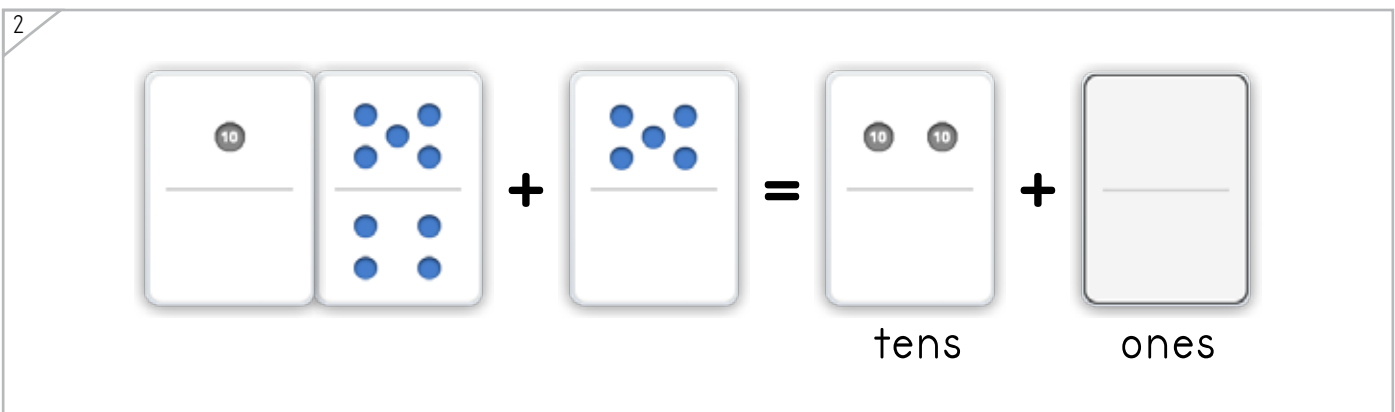
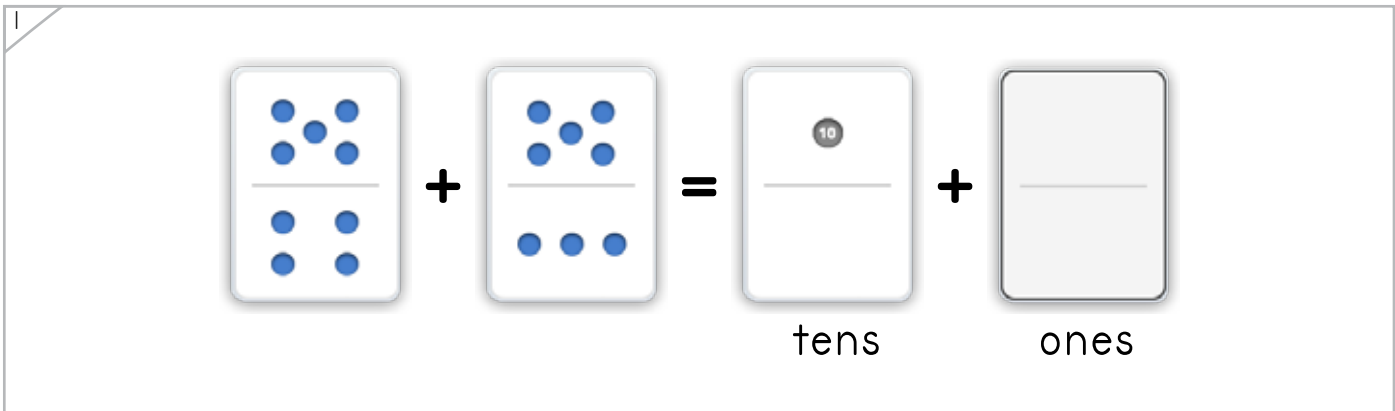
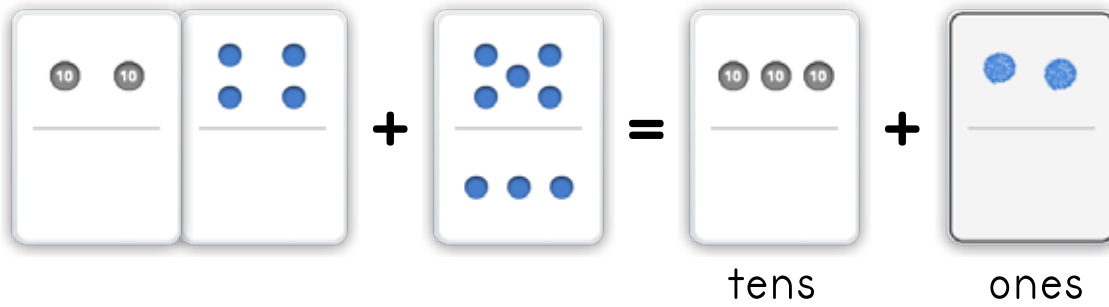


Name: _____ Date: _____

Draw a dot card to complete the number problem.




Example



Copyright © 2014 Symphony Learning LLC. Permission is granted to reproduce this sheet for classroom use.

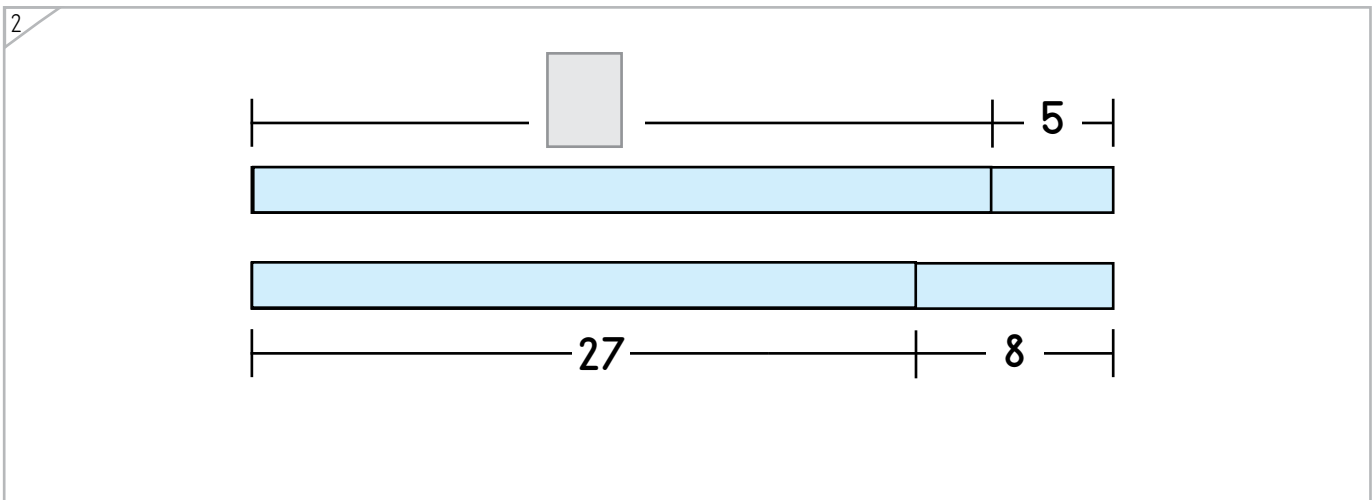
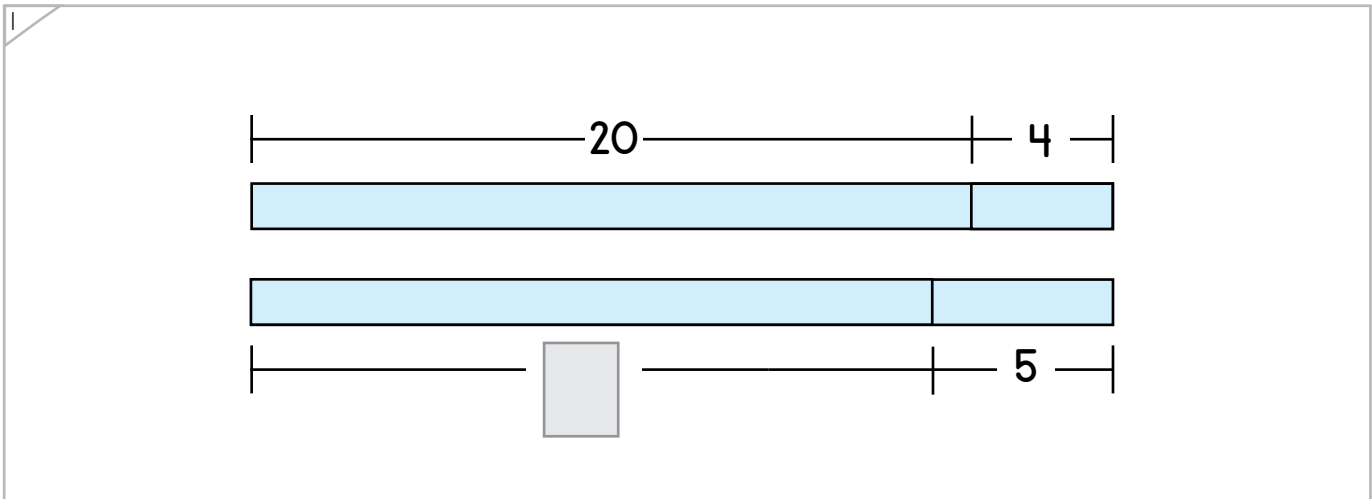
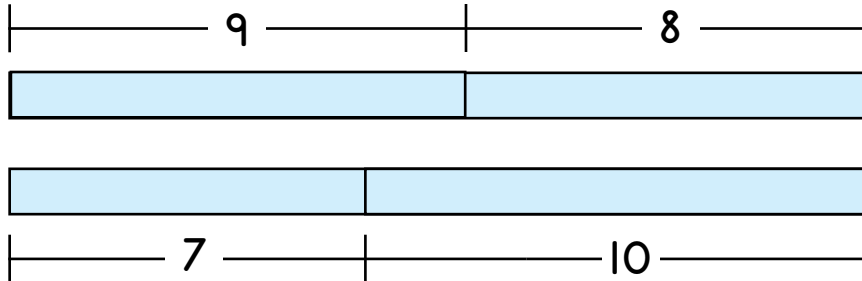


Name: _____ Date: _____



Complete each bar model.

Example



Copyright © 2014 Symphony Learning LLC. Permission is granted to reproduce this sheet for classroom use.





Draw dot cards and numbers to match.

Manipulatives and Symbols

1

tens ones

+ = 20 + 1

2

tens ones

18 + = + 4

3

tens ones

+ = 7 + 9



Name: _____ Date: _____



Manipulatives and Symbols

Complete each bar model and number sentence.

1

$\square + 7 = \square + 3$

2

$20 + \square = \square + 7$

Copyright © 2014 Symphony Learning LLC. Permission is granted to reproduce this sheet for classroom use.





Complete each number fact.

$$19 + 7 = \boxed{20} + \boxed{6}$$

tens ones

$$\boxed{} + \boxed{} = 9 + 13$$

$$25 + 8 = \boxed{} + \boxed{}$$

$$\boxed{} + \boxed{} = 12 + 8$$

$$34 + 8 = \boxed{} + \boxed{}$$

$$\boxed{} + \boxed{} = 17 + 7$$

$$28 + 3 = \boxed{} + \boxed{}$$



Name: _____ Date: _____



Read the story.

Dimitri has a dog that weighs 24 pounds. Lisa has a dog that weighs 8 pounds. How many pounds do the dogs weigh altogether?

Draw dot cards to make a model for the story.



Write a number fact that matches your model.

$$\square + \square = \square + \square$$

Answer: _____



Name: _____ Date: _____

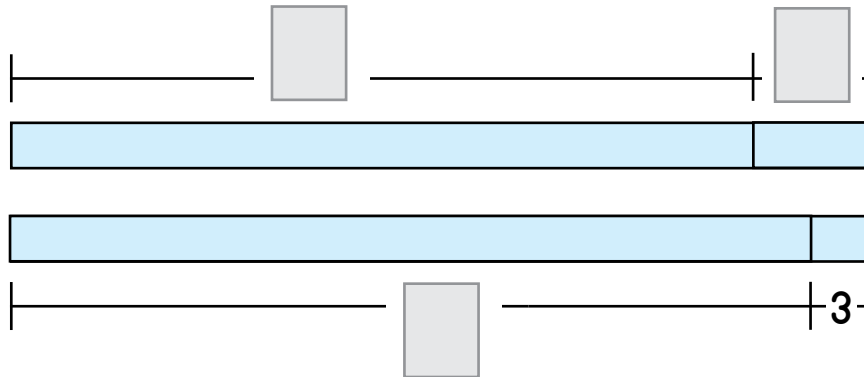


Word Problems

Read the story.

Sarah picked 37 strawberries. Terry picked 6 strawberries. How many strawberries did they pick altogether?

Complete the bar model to make a model for the story.



Write a number fact that matches your model.

$$\square + \square = \square + \square$$

Answer: _____

