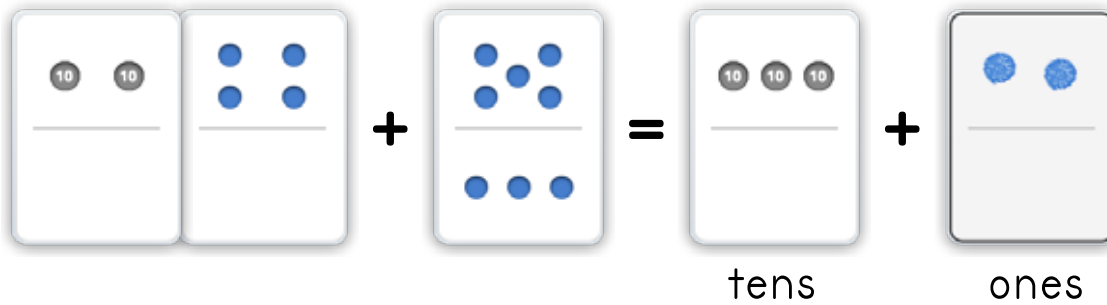


Name: \_\_\_\_\_ Date: \_\_\_\_\_

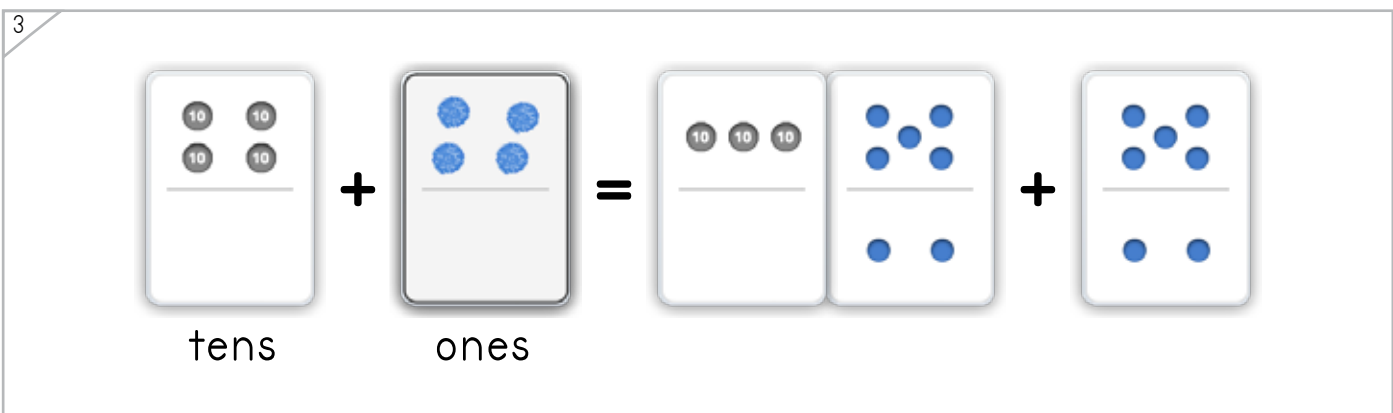
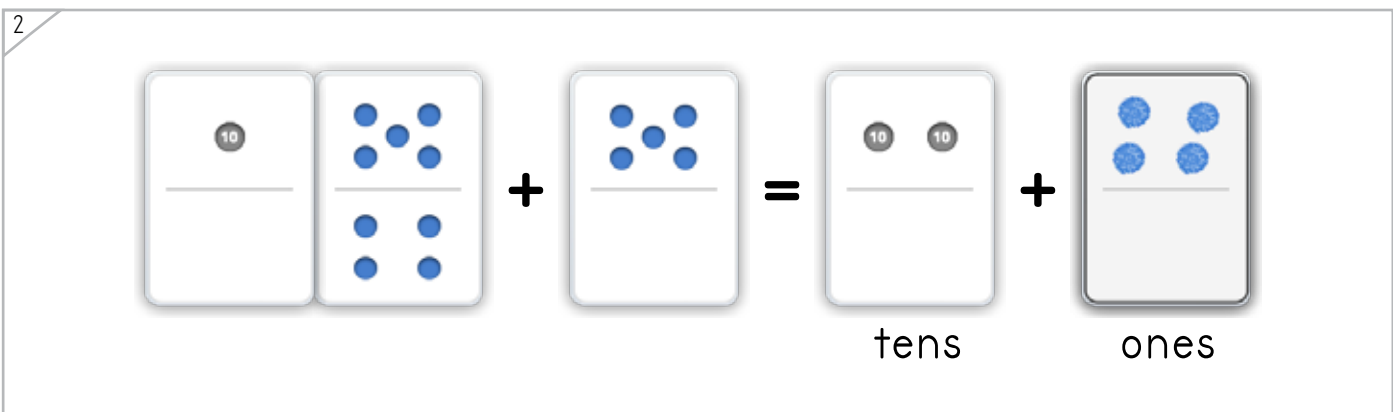
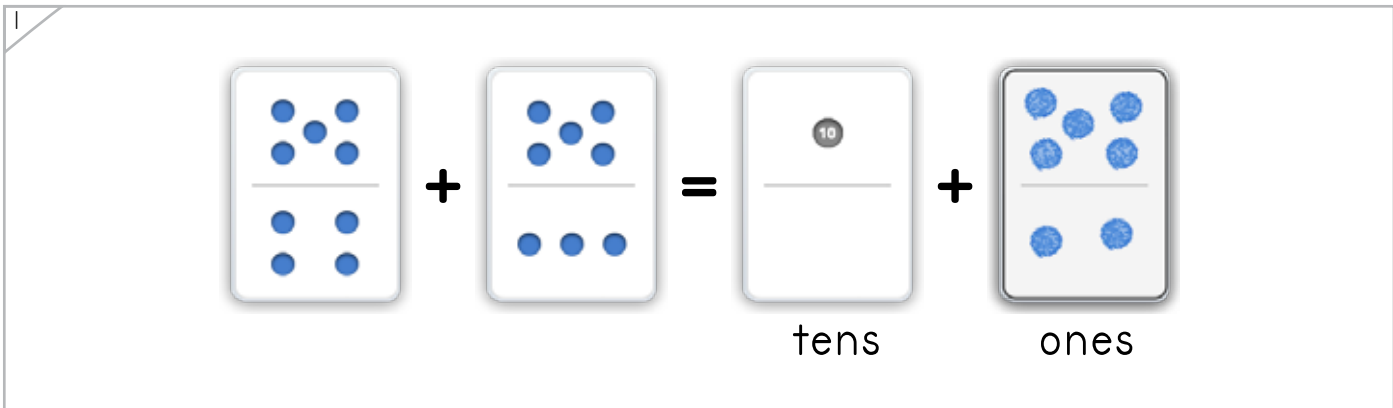
Draw a dot card to complete the number problem.



Example



ANSWER KEY



Copyright © 2014 Symphony Learning LLC. Permission is granted to reproduce this sheet for classroom use.



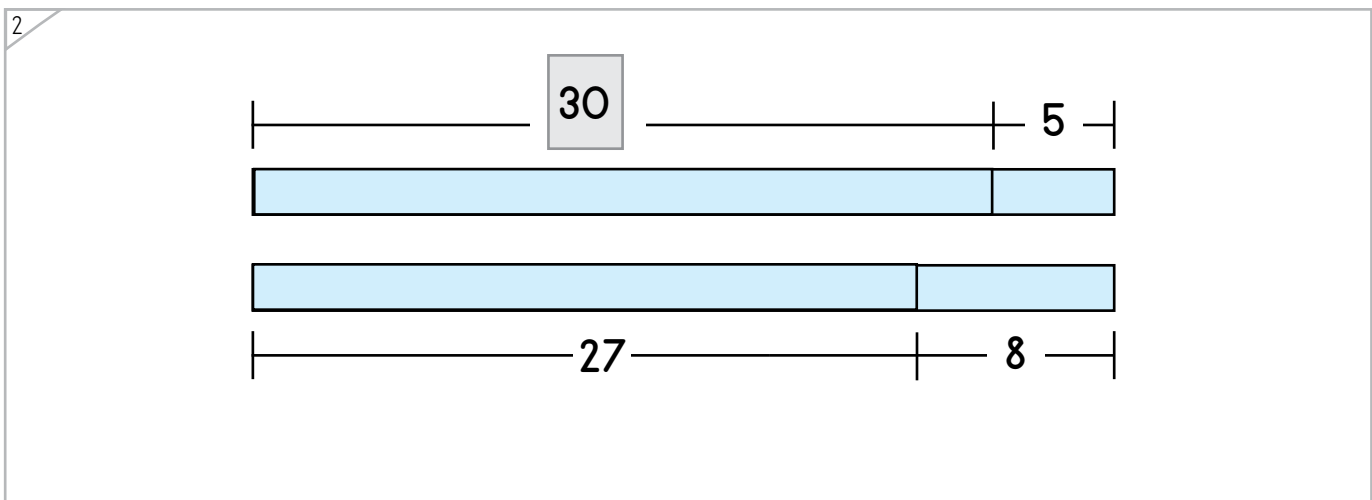
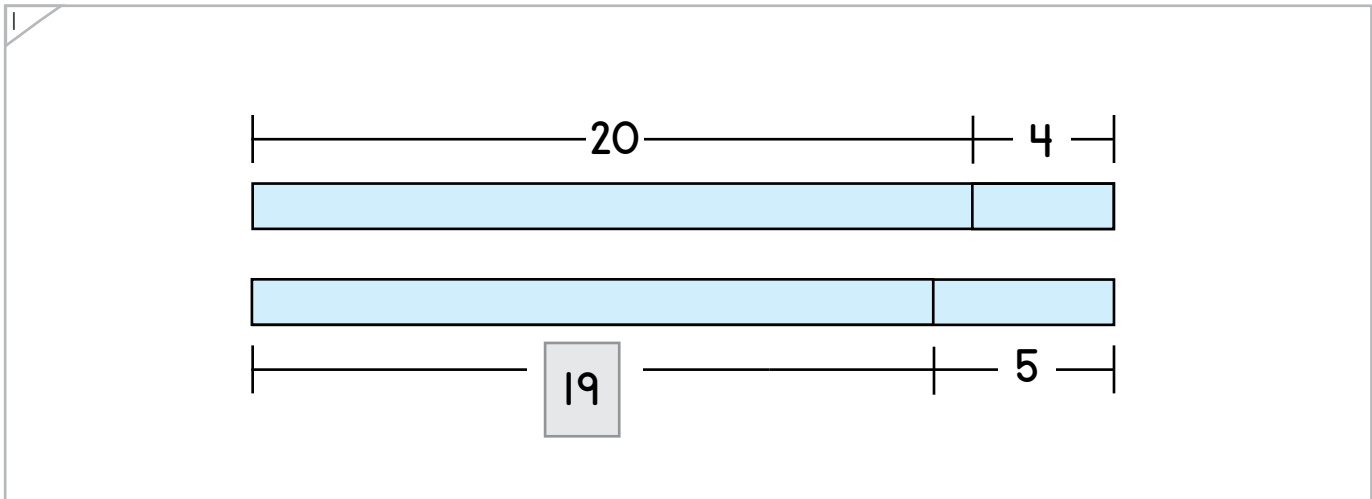
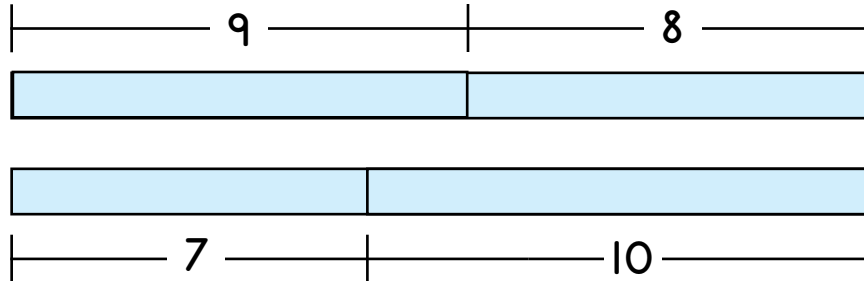
Name: \_\_\_\_\_ Date: \_\_\_\_\_



Manipulatives

Complete each bar model.

Example



ANSWER KEY

Copyright © 2014 Symphony Learning LLC. Permission is granted to reproduce this sheet for classroom use.





Draw dot cards and numbers to match.

1

+

=

+

tens      ones

**16** + **5** = **20** + **1**

ANSWER KEY

2

+

=

+

tens      ones

**18** + **6** = **20** + **4**

3

+

=

+

tens      ones

**10** + **6** = **7** + **9**



Name: \_\_\_\_\_ Date: \_\_\_\_\_

Complete each bar model and number sentence.



Manipulatives and Symbols

1

$26 + 7 = 30 + 3$

ANSWER KEY

2

$20 + 1 = 14 + 7$

Copyright © 2014 Symphony Learning LLC. Permission is granted to reproduce this sheet for classroom use.





Complete each number fact.

$$19 + 7 = \boxed{20} + \boxed{6}$$

tens                      ones

$$\boxed{20} + \boxed{2} = 9 + 13$$

$$25 + 8 = \boxed{30} + \boxed{3}$$

$$\boxed{20} + \boxed{0} = 12 + 8$$

$$34 + 8 = \boxed{40} + \boxed{2}$$

$$\boxed{20} + \boxed{4} = 17 + 7$$

$$28 + 3 = \boxed{30} + \boxed{1}$$



Name: \_\_\_\_\_ Date: \_\_\_\_\_

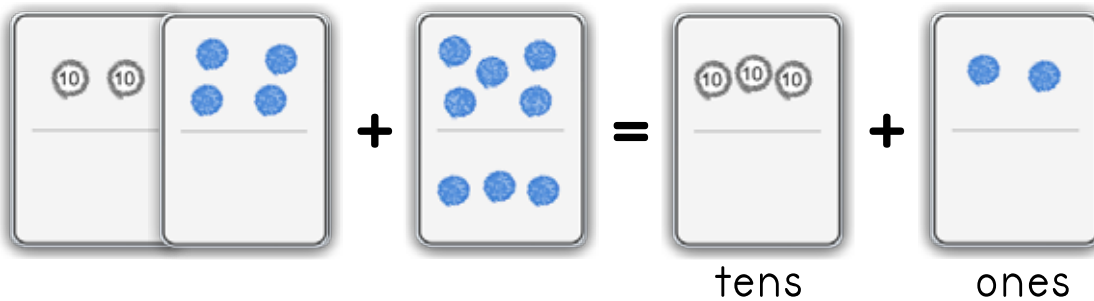


Read the story.

Dimitri has a dog that weighs 24 pounds. Lisa has a dog that weighs 8 pounds. How many pounds do the dogs weigh altogether?

ANSWER KEY

Draw dot cards to make a model for the story.



Write a number fact that matches your model.

$$\boxed{24} + \boxed{8} = \boxed{30} + \boxed{2}$$

Answer: 32 pounds

Copyright © 2014 Symphony Learning LLC. Permission is granted to reproduce this sheet for classroom use.



Name: \_\_\_\_\_ Date: \_\_\_\_\_



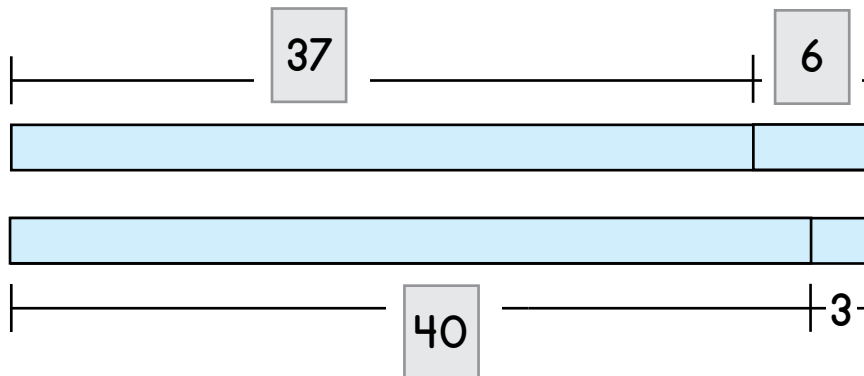
Word Problems

Read the story.

Sarah picked 37 strawberries. Terry picked 6 strawberries. How many strawberries did they pick altogether?

ANSWER KEY

Complete the bar model to make a model for the story.



Write a number fact that matches your model.

$$\boxed{37} + \boxed{6} = \boxed{40} + \boxed{3}$$

Answer: 43 strawberries

Copyright © 2014 Symphony Learning LLC. Permission is granted to reproduce this sheet for classroom use.

