
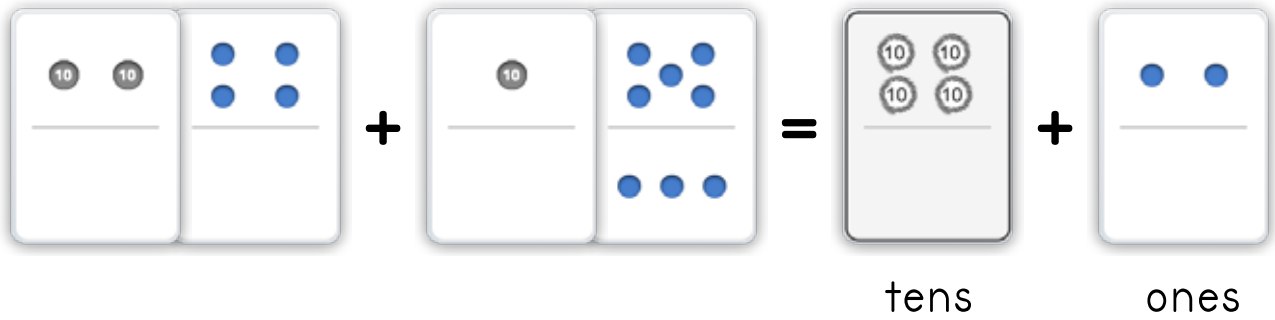


Name: \_\_\_\_\_ Date: \_\_\_\_\_

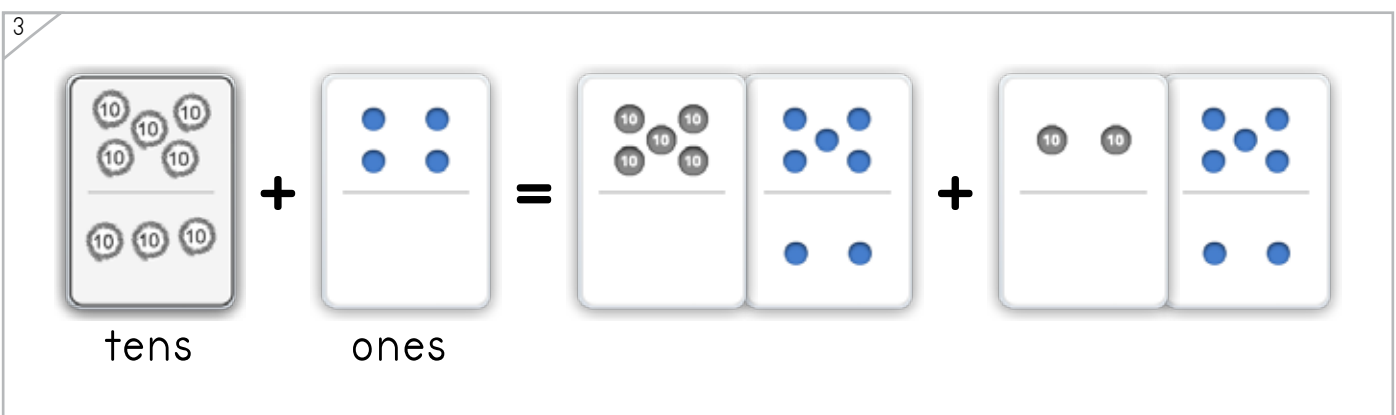
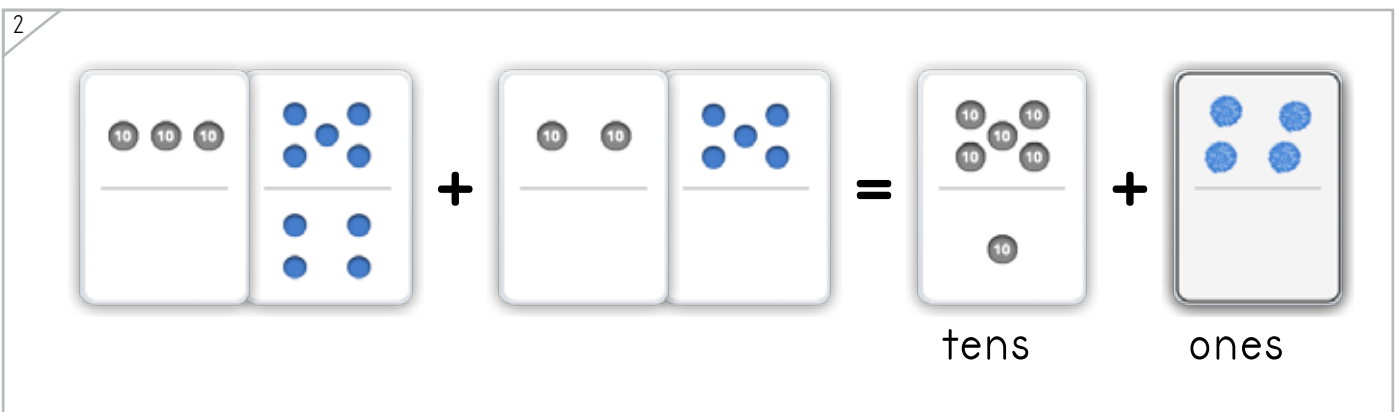
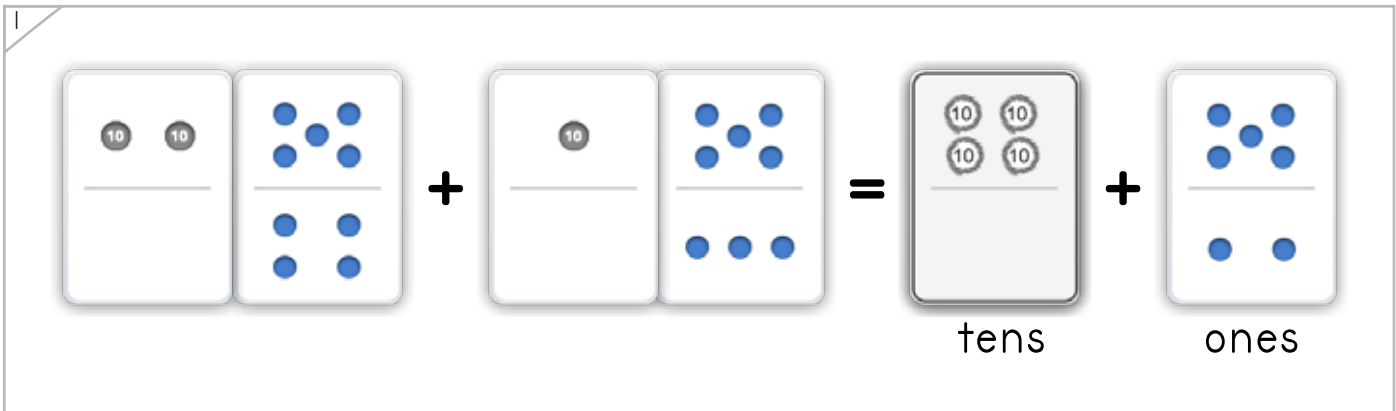
Draw a dot card to complete the number problem.



Example



ANSWER KEY



Copyright © 2014 Symphony Learning LLC. Permission is granted to reproduce this sheet for classroom use.

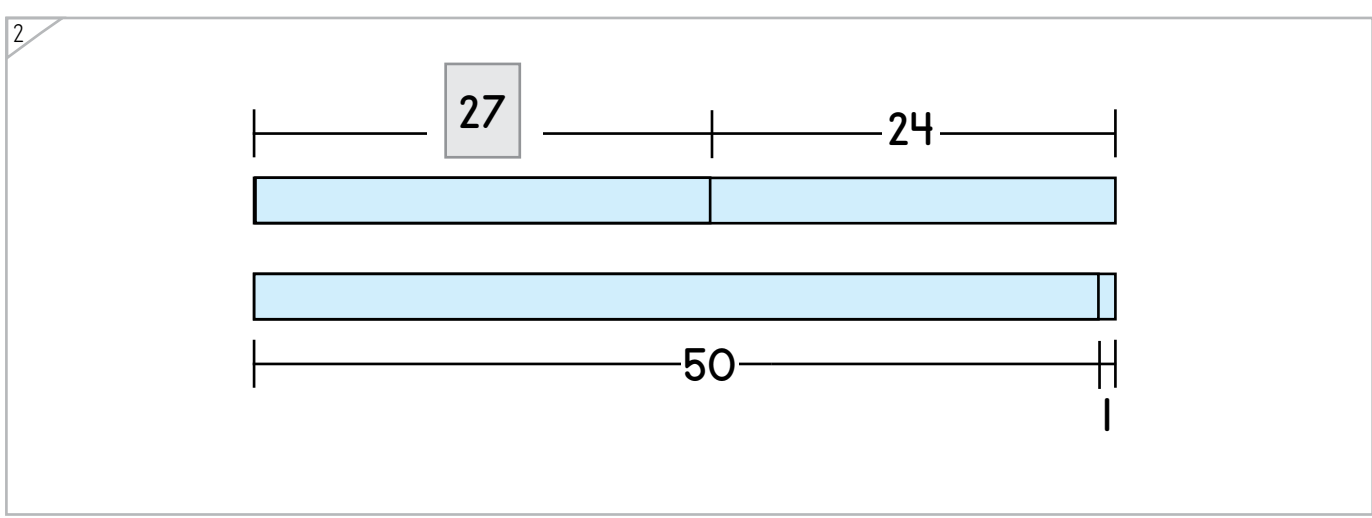
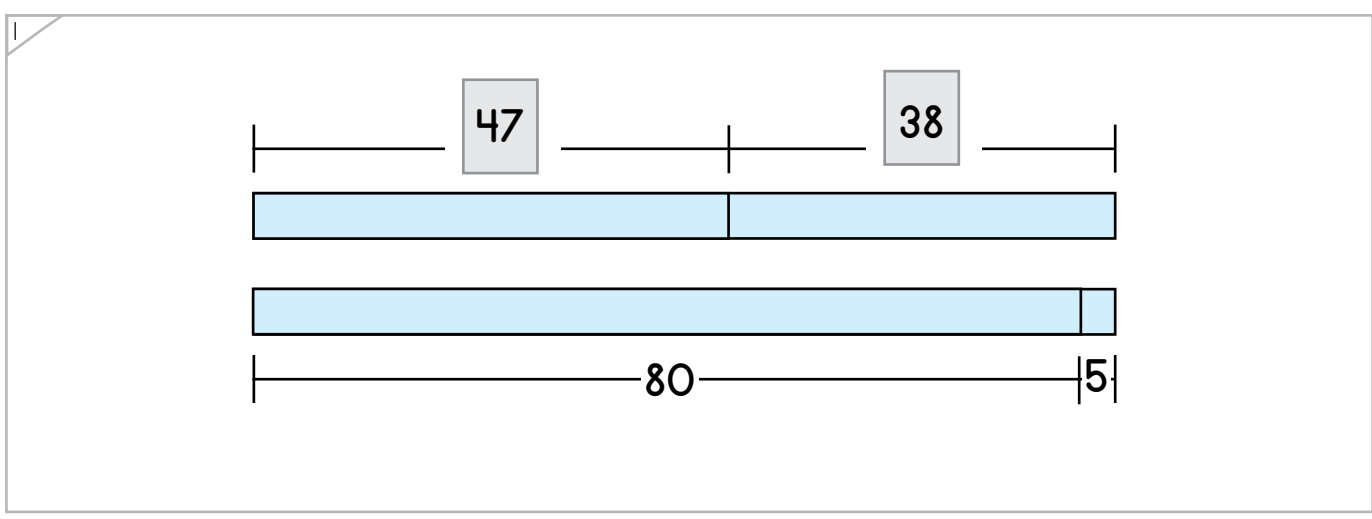
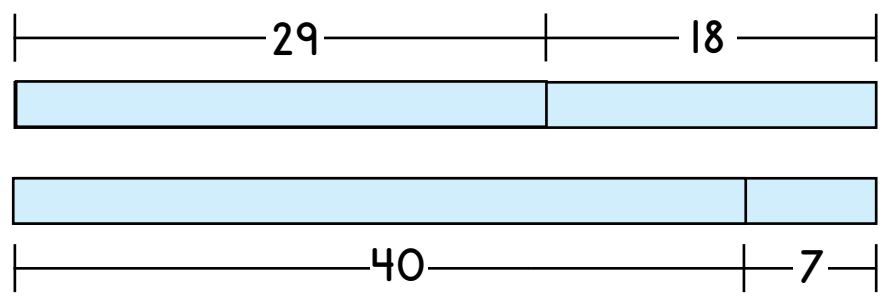


Name: \_\_\_\_\_ Date: \_\_\_\_\_



# Complete each bar model.

Example



ANSWER KEY

Copyright © 2014 Symphony Learning LLC. Permission is granted to reproduce this sheet for classroom use.





Draw dot cards and numbers to match.

1

tens                      ones

$$36 + 25 = 60 + 1$$

ANSWER KEY

2

tens                      ones

$$58 + 36 = 90 + 4$$

3

tens                      ones

$$80 + 6 = 17 + 69$$


Name: \_\_\_\_\_ Date: \_\_\_\_\_

Draw bars and numbers to complete each number fact.



Manipulatives and Symbols

1

$26 + 47 = 70 + 3$

ANSWER KEY

2

$90 + 1 = 14 + 77$

Copyright © 2014 Symphony Learning LLC. Permission is granted to reproduce this sheet for classroom use.





Complete each number fact.

$$28 + 17 = \boxed{40} + \boxed{5}$$

tens                      ones

$$\boxed{60} + \boxed{1} = 33 + 28$$

$$47 + 25 = \boxed{70} + \boxed{2}$$

$$\boxed{70} + \boxed{0} = 55 + 15$$

$$19 + 68 = \boxed{80} + \boxed{7}$$

$$\boxed{60} + \boxed{1} = 42 + 19$$

$$28 + 13 = \boxed{40} + \boxed{1}$$



Name: \_\_\_\_\_ Date: \_\_\_\_\_



Read the story.

Dimitri threw the baseball 58 feet. Sam caught it and threw it another 27 feet. How many feet all together did the ball get thrown?

ANSWER KEY

Draw dot cards to make a model for the story.



Write a number fact that matches your model.

$$\boxed{58} + \boxed{27} = \boxed{80} + \boxed{5}$$

Answer: 85 feet

Copyright © 2014 Symphony Learning LLC. Permission is granted to reproduce this sheet for classroom use.



Name: \_\_\_\_\_ Date: \_\_\_\_\_

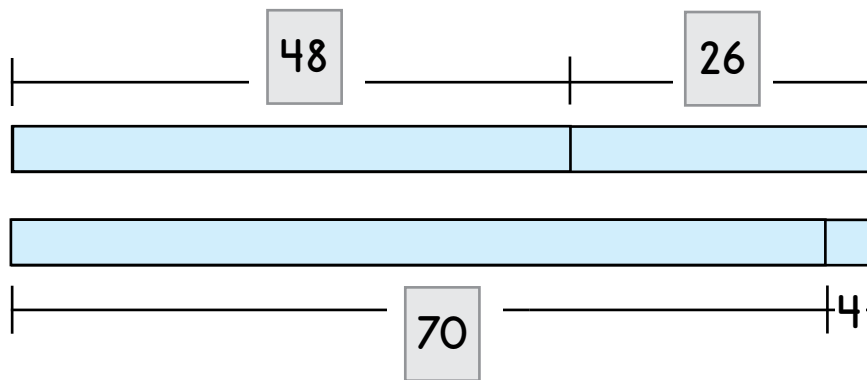


Read the story.

Sarah picked 48 fresh strawberries. Terry picked 26 strawberries. How many strawberries did Sarah and Terry pick altogether?

ANSWER KEY

Complete the bar model to make a model for the story.



Write a number fact that matches your model.

$$\boxed{48} + \boxed{26} = \boxed{70} + \boxed{4}$$

Answer: 74 strawberries

