


Name: _____ Date: _____

Draw a dot card to complete the number problem.



Example

$$\begin{array}{|c|c|} \hline \bullet\bullet\bullet \\ \hline \\ \hline \end{array} - \begin{array}{|c|} \hline \bullet\bullet\bullet \\ \hline \\ \hline \end{array} = \begin{array}{|c|} \hline \bullet\bullet \\ \hline \\ \hline \end{array} + \begin{array}{|c|c|} \hline \bullet\bullet\bullet \\ \hline \\ \hline \end{array}$$

tens ones

1

$$\begin{array}{|c|c|} \hline \bullet\bullet \\ \hline \\ \hline \end{array} - \begin{array}{|c|} \hline \bullet\bullet\bullet \\ \hline \\ \hline \end{array} = \begin{array}{|c|} \hline \bullet \\ \hline \\ \hline \end{array} + \begin{array}{|c|c|} \hline \bullet\bullet\bullet \\ \hline \\ \hline \end{array}$$

tens ones

2

$$\begin{array}{|c|c|} \hline \bullet\bullet \\ \hline \bullet\bullet \\ \hline \\ \hline \end{array} - \begin{array}{|c|} \hline \bullet\bullet\bullet \\ \hline \\ \hline \end{array} = \begin{array}{|c|c|} \hline \bullet\bullet\bullet \\ \hline \\ \hline \end{array} + \begin{array}{|c|c|} \hline \bullet\bullet\bullet \\ \hline \\ \hline \end{array}$$

tens ones

3

$$\begin{array}{|c|c|} \hline \bullet\bullet \\ \hline \bullet\bullet \\ \hline \\ \hline \end{array} + \begin{array}{|c|c|} \hline \bullet\bullet \\ \hline \\ \hline \\ \hline \end{array} = \begin{array}{|c|c|} \hline \bullet\bullet\bullet \\ \hline \\ \hline \\ \hline \end{array} - \begin{array}{|c|} \hline \bullet \\ \hline \\ \hline \\ \hline \end{array} - \begin{array}{|c|} \hline \bullet\bullet\bullet \\ \hline \\ \hline \\ \hline \end{array}$$

tens ones

ANSWER KEY

Copyright © 2014 Symphony Learning LLC. Permission is granted to reproduce this sheet for classroom use.

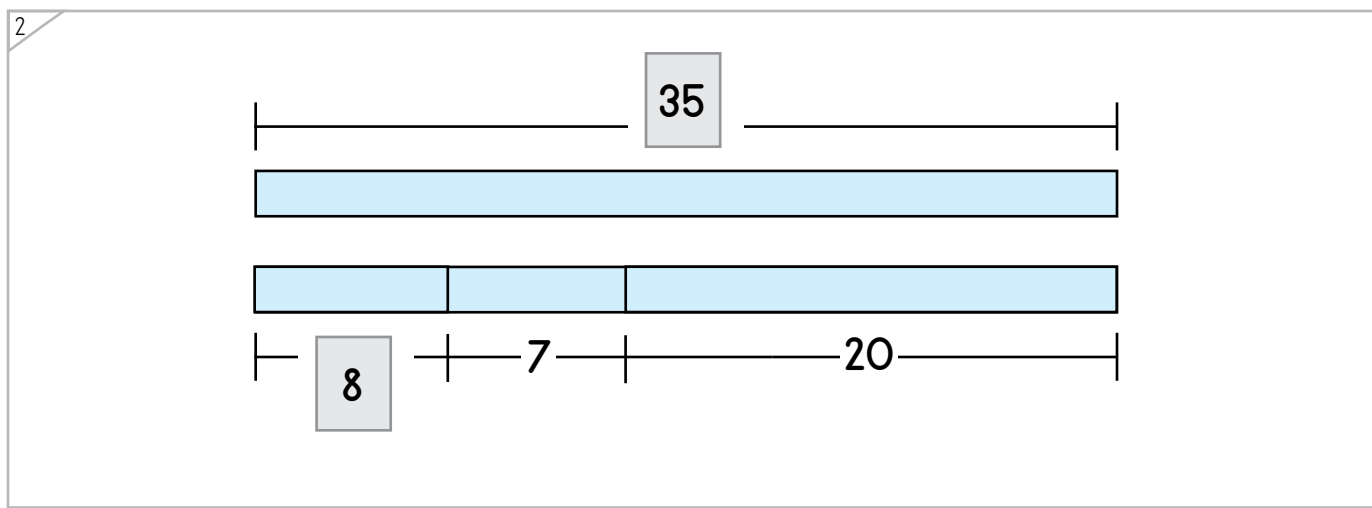
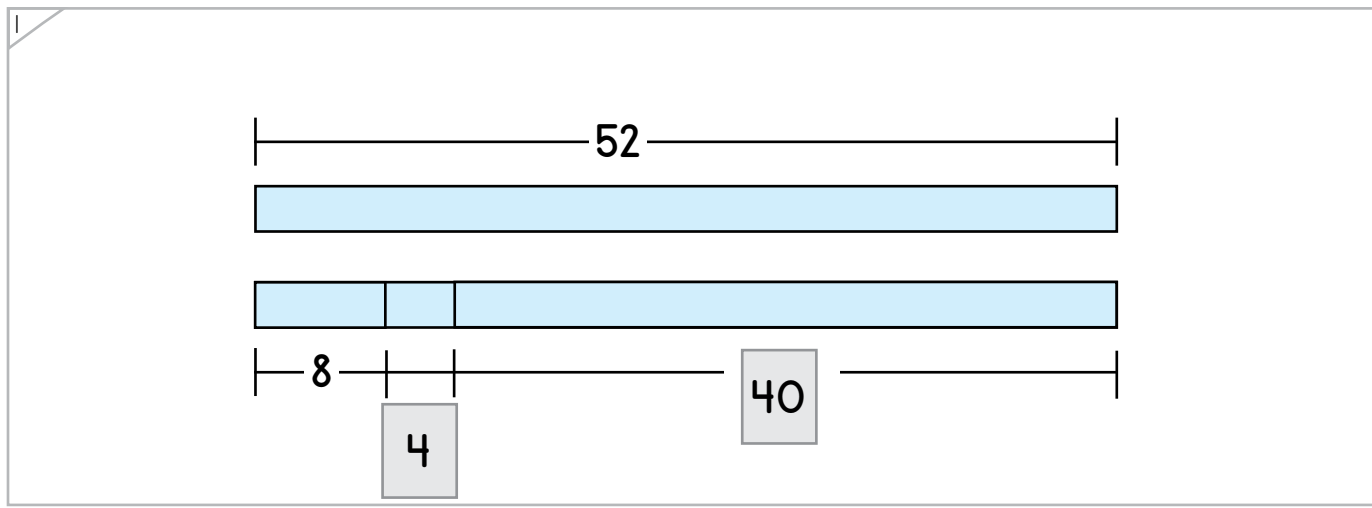
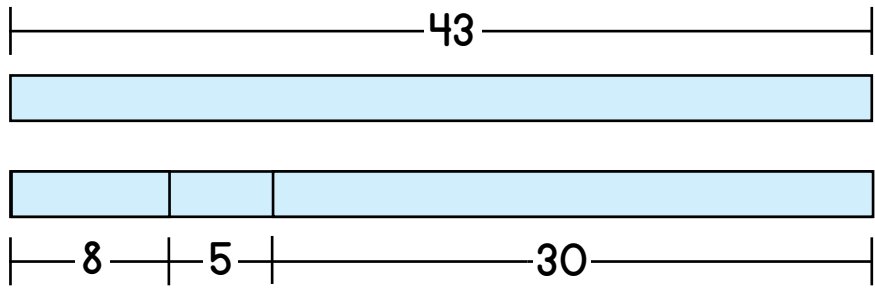


Name: _____ Date: _____



Complete each bar model.

Example



ANSWER KEY

Copyright © 2014 Symphony Learning LLC. Permission is granted to reproduce this sheet for classroom use.





Draw dot cards and numbers to match.

1

tens ones

$$35 - 6 = 20 + 9$$

ANSWER KEY

2

tens ones

$$73 - 9 = 60 + 4$$

3

tens ones

$$0 + 8 = 17 - 9$$


Name: _____ Date: _____

Complete each bar model and number sentence.



Manipulatives and Symbols

1

$66 - 7 = 50 + 9$

2

$74 - 7 = 60 + 7$

ANSWER KEY

Copyright © 2014 Symphony Learning LLC. Permission is granted to reproduce this sheet for classroom use.



Name: _____ Date: _____



Symbols

Complete each number fact.

$$52 - 7 = 40 + 5$$

$$30 + 3 = 41 - 8$$

$$25 - 8 = 10 + 7$$

$$0 + 4 = 12 - 8$$

$$84 - 6 = 70 + 8$$

$$50 + 8 = 60 - 2$$

$$43 - 5 = 30 + 8$$

ANSWER KEY

Copyright © 2014 Symphony Learning LLC. Permission is granted to reproduce this sheet for classroom use.



Name: _____ Date: _____

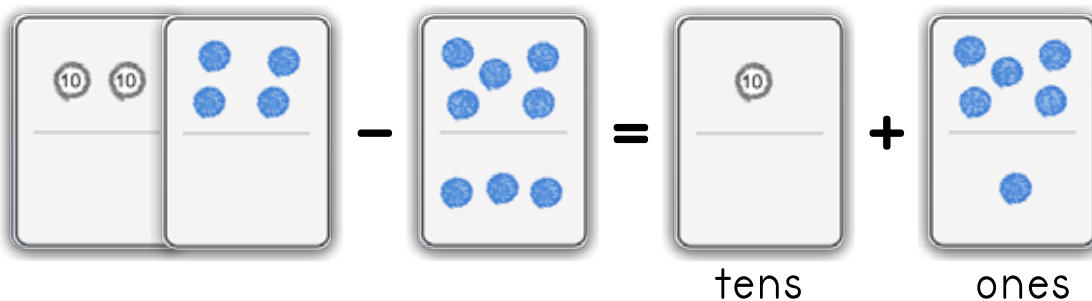


Read the story.

Dimitri has a turtle that weighs 24 pounds. Lisa has a turtle that weighs 8 pounds. What is the difference between what the turtles weigh?

ANSWER KEY

Draw dot cards to make a model for the story.



Write a number fact that matches your model.

$$\boxed{24} - \boxed{8} = \boxed{10} + \boxed{6}$$

Answer: 16 pounds

Copyright © 2014 Symphony Learning LLC. Permission is granted to reproduce this sheet for classroom use.



Name: _____ Date: _____



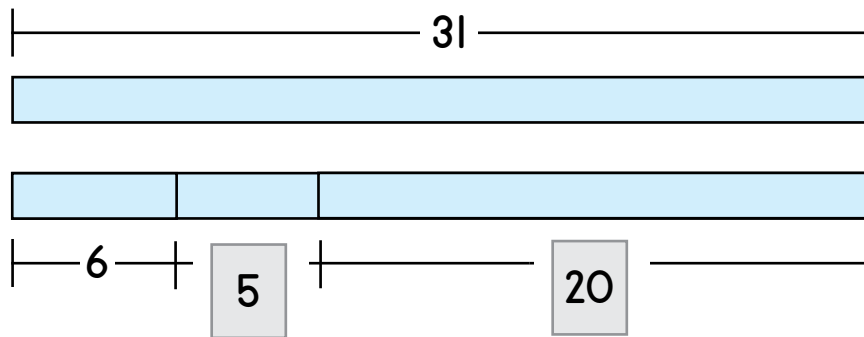
Word Problems

Read the story.

Sarah picked 31 strawberries. Terry picked 6 strawberries. What is the difference between the number of strawberries they each picked?

ANSWER KEY

Complete the bar model to make a model for the story.



Write a number fact that matches your model.

$$\boxed{31} - \boxed{6} = \boxed{20} + \boxed{5}$$

Answer: 25 strawberries

Copyright © 2014 Symphony Learning LLC. Permission is granted to reproduce this sheet for classroom use.

