

Name: _____ Date: _____

Draw dot cards to complete the number problem.



Example

tens ones

ANSWER KEY

1

tens ones

2

tens ones

3

tens ones

Copyright © 2014 Symphony Learning LLC. Permission is granted to reproduce this sheet for classroom use.

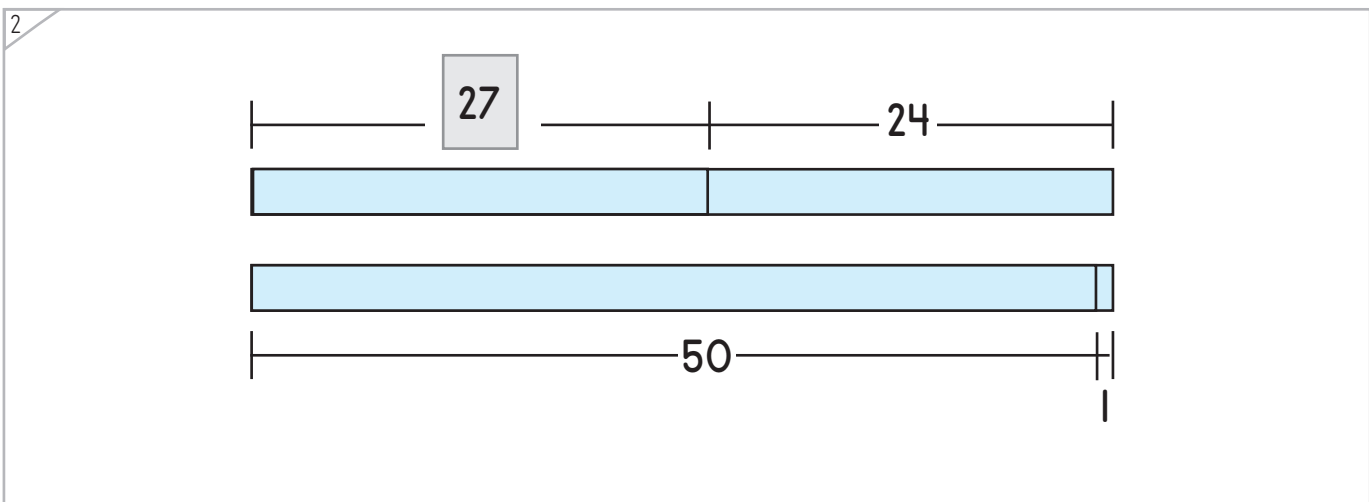
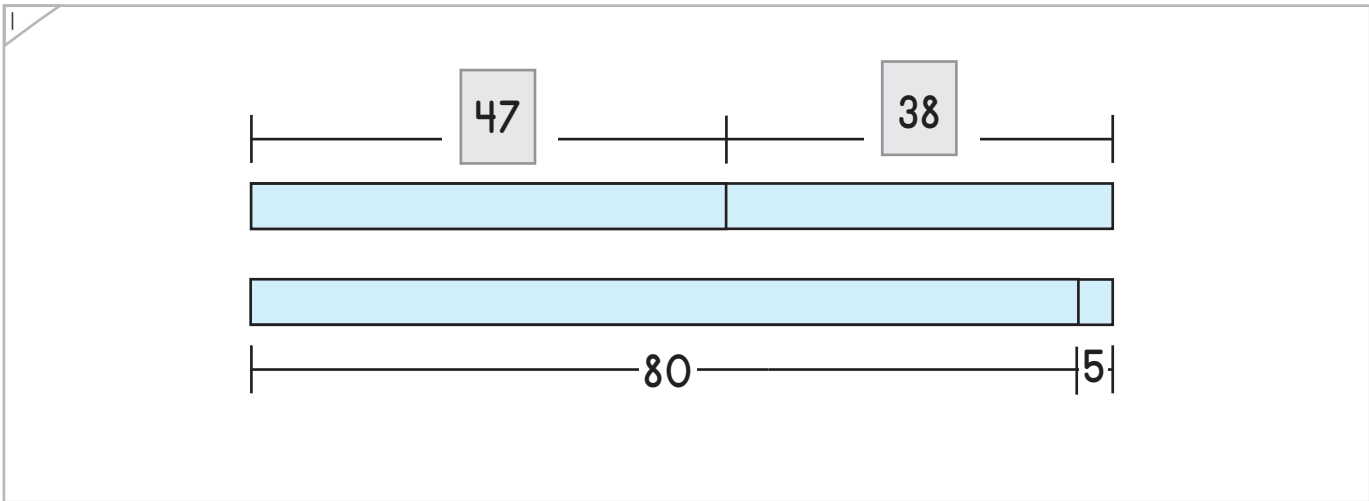
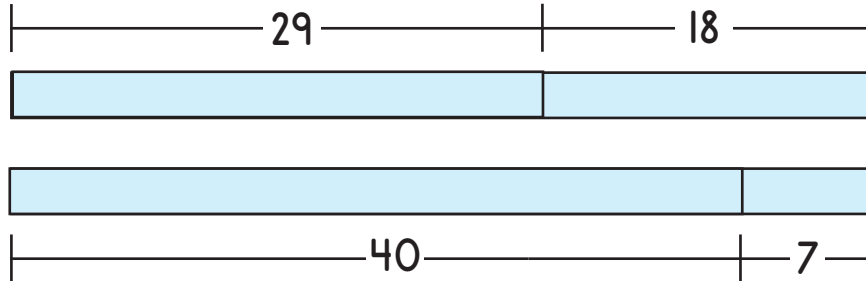


Name: _____ Date: _____



Complete each bar model.

Example



ANSWER KEY

Copyright © 2014 Symphony Learning LLC. Permission is granted to reproduce this sheet for classroom use.





Draw dot cards and numbers to match.

1

tens ones

$$36 + 25 = 60 + 1$$

ANSWER KEY

2

tens ones

$$58 + 36 = 90 + 4$$

3

tens ones

$$80 + 6 = 17 + 69$$


Name: _____ Date: _____

Complete each bar model and number sentence.



Manipulatives and Symbols

1

$26 + 16 = 40 + 2$

2

$70 + 7 = 18 + 59$

ANSWER KEY

Copyright © 2014 Symphony Learning LLC. Permission is granted to reproduce this sheet for classroom use.



Name: _____ Date: _____



Symbols

Complete each number fact.

$$28 + \boxed{17} = 40 + 5$$

$$60 + 1 = \boxed{33} + 28$$

$$47 + \boxed{25} = 70 + 2$$

$$\boxed{70} + \boxed{2} = 55 + 17$$

$$19 + \boxed{68} = 80 + 7$$

$$60 + 1 = \boxed{42} + 19$$


$$28 + 13 = \boxed{40} + \boxed{1}$$

ANSWER KEY

Copyright © 2014 Symphony Learning LLC. Permission is granted to reproduce this sheet for classroom use.



Name: _____ Date: _____




Read the story.

Dimitri threw the baseball 58 feet. Sam caught it and threw it to Pablo. If the ball traveled a total of 85 feet, how many feet did Sam throw the ball?

ANSWER KEY

Draw dot cards to make a model for the story.



Write a number fact that matches your model.

$$\boxed{58} + \boxed{27} = \boxed{80} + \boxed{5}$$

Answer: 27 feet

Copyright © 2014 Symphony Learning LLC. Permission is granted to reproduce this sheet for classroom use.



Name: _____ Date: _____



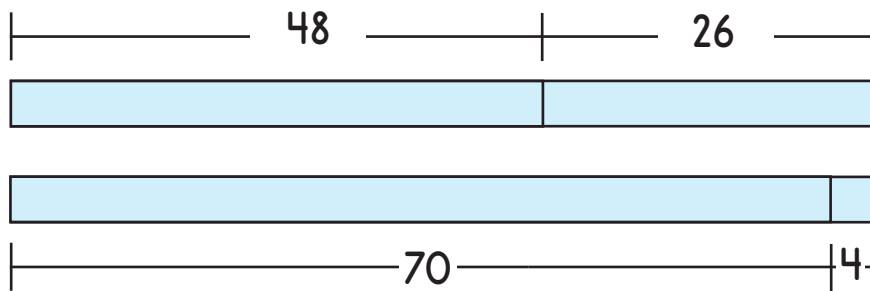
Word Problems

Read the story.

Sarah picked 48 fresh strawberries. If Terry picked some strawberries to add to Sarah's and there was a total of 74 altogether, how many strawberries did Terry pick?

ANSWER KEY

Draw a bar model to make a model for the story.



Write a number fact that matches your model.

$$\boxed{48} + \boxed{26} = \boxed{70} + \boxed{4}$$

Answer: 26 strawberries

Copyright © 2014 Symphony Learning LLC. Permission is granted to reproduce this sheet for classroom use.

