

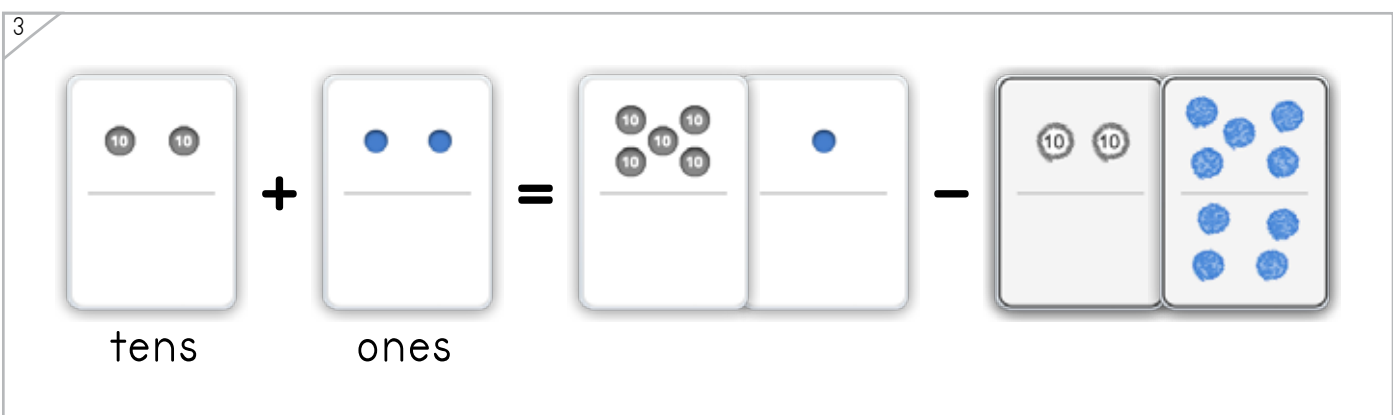
Name: \_\_\_\_\_ Date: \_\_\_\_\_

Draw a dot card to complete the number problem.

Example



ANSWER KEY



Copyright © 2014 Symphony Learning LLC. Permission is granted to reproduce this sheet for classroom use.



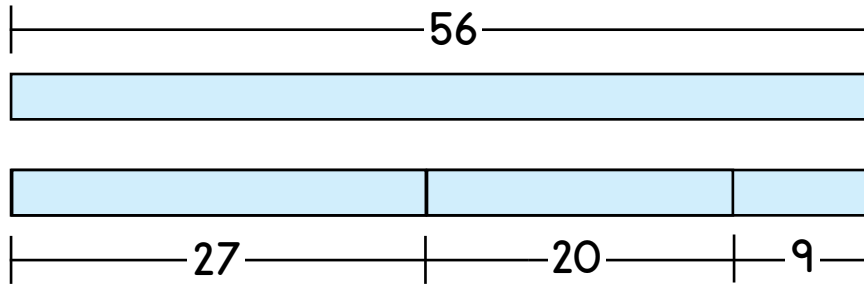
Name: \_\_\_\_\_ Date: \_\_\_\_\_



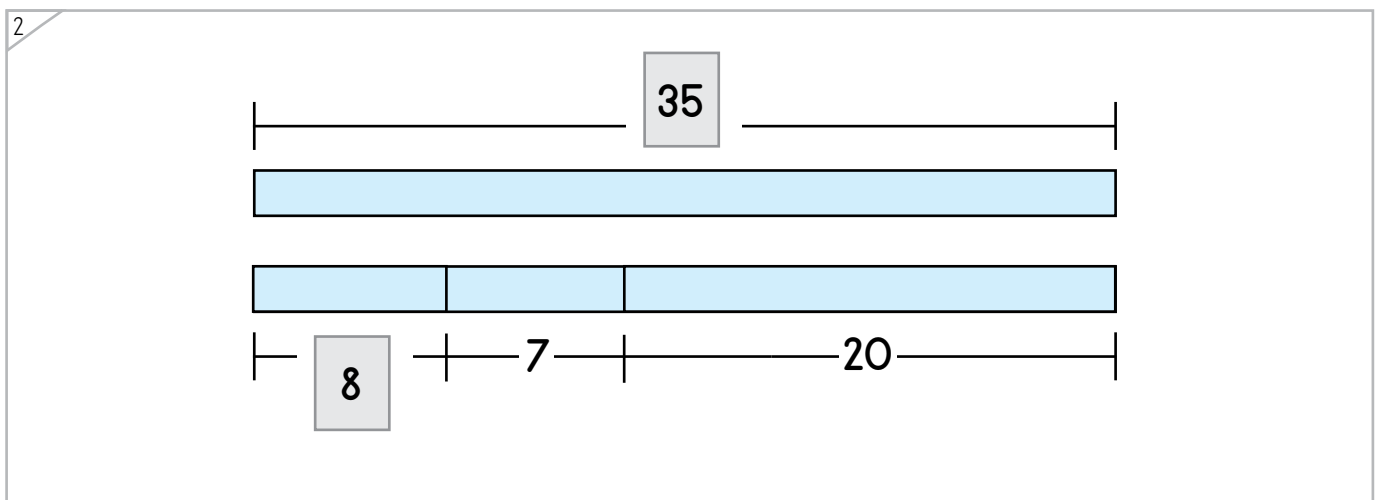
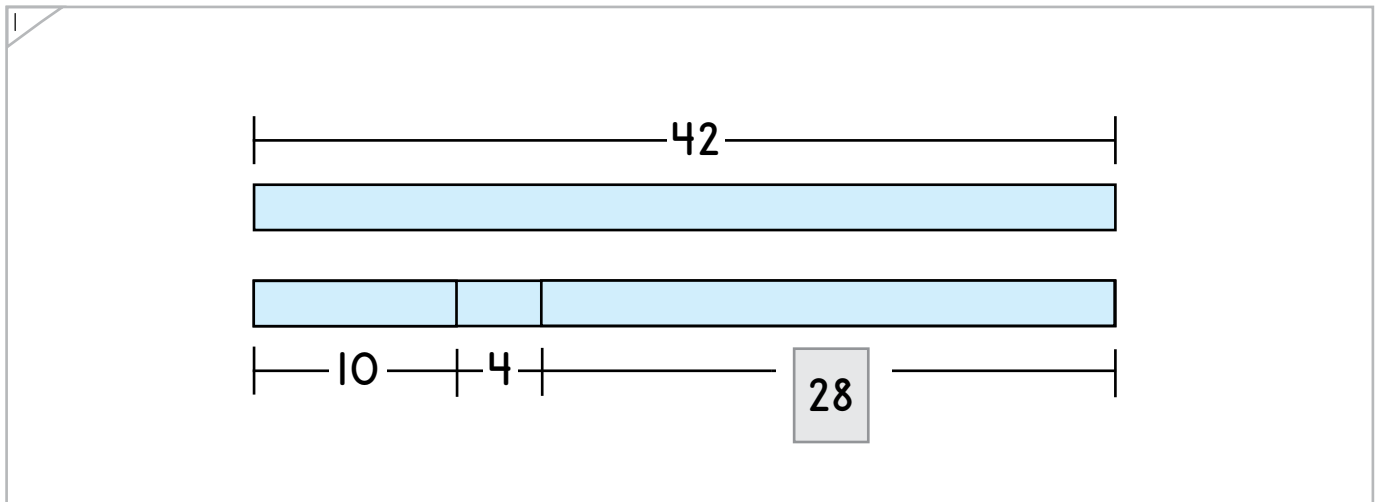
Manipulatives

Complete each bar model.

Example



ANSWER KEY



Copyright © 2014 Symphony Learning LLC. Permission is granted to reproduce this sheet for classroom use.





Draw dot cards and numbers to match.

1

tens      ones

$$\boxed{93} - \boxed{47} = 40 + 6$$

ANSWER KEY

2

tens      ones

$$81 - \boxed{64} = \boxed{10} + \boxed{7}$$

3

tens      ones

$$\boxed{10} + \boxed{6} = \boxed{74} - \boxed{58}$$

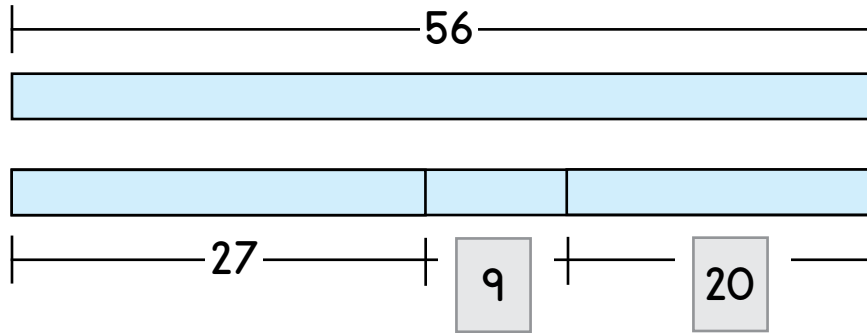

Name: \_\_\_\_\_ Date: \_\_\_\_\_



Manipulatives and Symbols

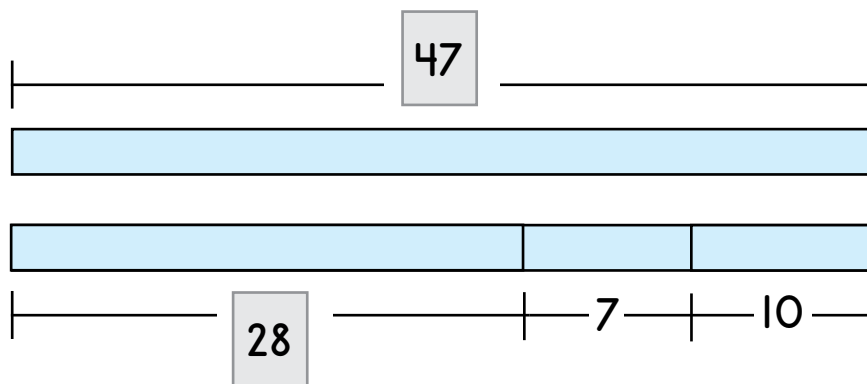
Complete each bar model and number sentence.

1



$$\boxed{56} - \boxed{27} = \boxed{20} + \boxed{9}$$

2



$$\boxed{47} - \boxed{28} = \boxed{10} + \boxed{7}$$

ANSWER KEY

Copyright © 2014 Symphony Learning LLC. Permission is granted to reproduce this sheet for classroom use.



Name: \_\_\_\_\_ Date: \_\_\_\_\_



Symbols

Complete each number fact.

$$73 - 17 = 50 + 6$$

$$20 + 3 = 41 - 18$$

$$85 - 68 = 10 + 7$$

$$20 + 9 = 88 - 59$$

$$76 - 38 = 30 + 8$$


$$10 + 8 = 37 - 19$$

$$91 - 45 = 40 + 6$$

ANSWER KEY

Copyright © 2014 Symphony Learning LLC. Permission is granted to reproduce this sheet for classroom use.





Read the story.

ANSWER KEY

Dimitri has a dog that weighs 72 pounds. Lisa has a dog too but her dog weighs less than Dimitri's dog. The difference between the dogs is 26 pounds. How much does Lisa's dog weigh?

Draw dot cards to make a model for the story.



Write a number fact that matches your model.

$$\boxed{72} - \boxed{46} = \boxed{20} + \boxed{6}$$

Answer: 46 pounds



Name: \_\_\_\_\_ Date: \_\_\_\_\_



Word Problems

Read the story.

Ella earned \$81 mowing lawns. Frank also mowed lawns but earned less than Ella. If the difference between what Ella and Frank earned was \$22, how much did Frank earn?

ANSWER KEY

Draw a bar model to make a model for the story.

Write a number fact that matches your model.

$$\boxed{81} - \boxed{59} = \boxed{20} + \boxed{2}$$

Answer: 59 strawberries

Copyright © 2014 Symphony Learning LLC. Permission is granted to reproduce this sheet for classroom use.

