

Name: _____

Date: _____



Draw the missing dot card to make both equal.

Example

2 groups of 3 and 4 groups of 3 make 18

	\times		$=$		\times		$=$	
	\times		$=$		\times		$=$	

2 groups of 3 and how many more groups of 3 make 15?

	\times		$=$		\times		$=$	
	\times		$=$		\times		$=$	

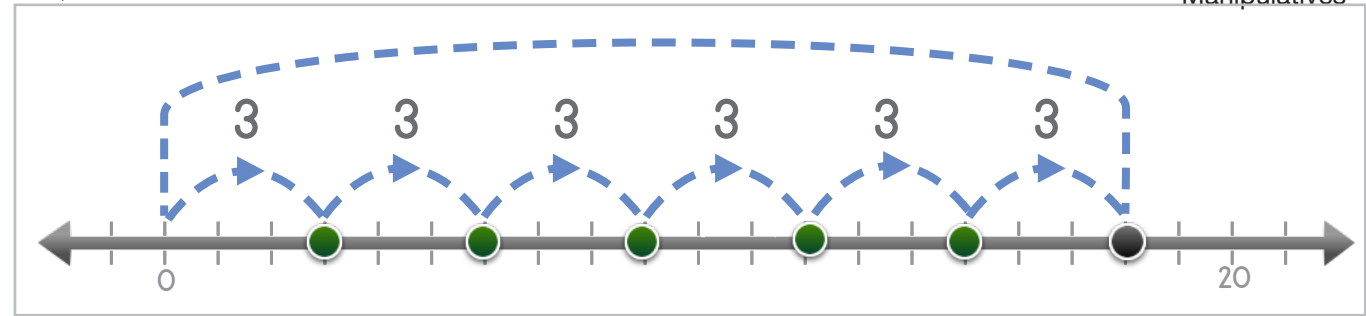


Name: _____ Date: _____

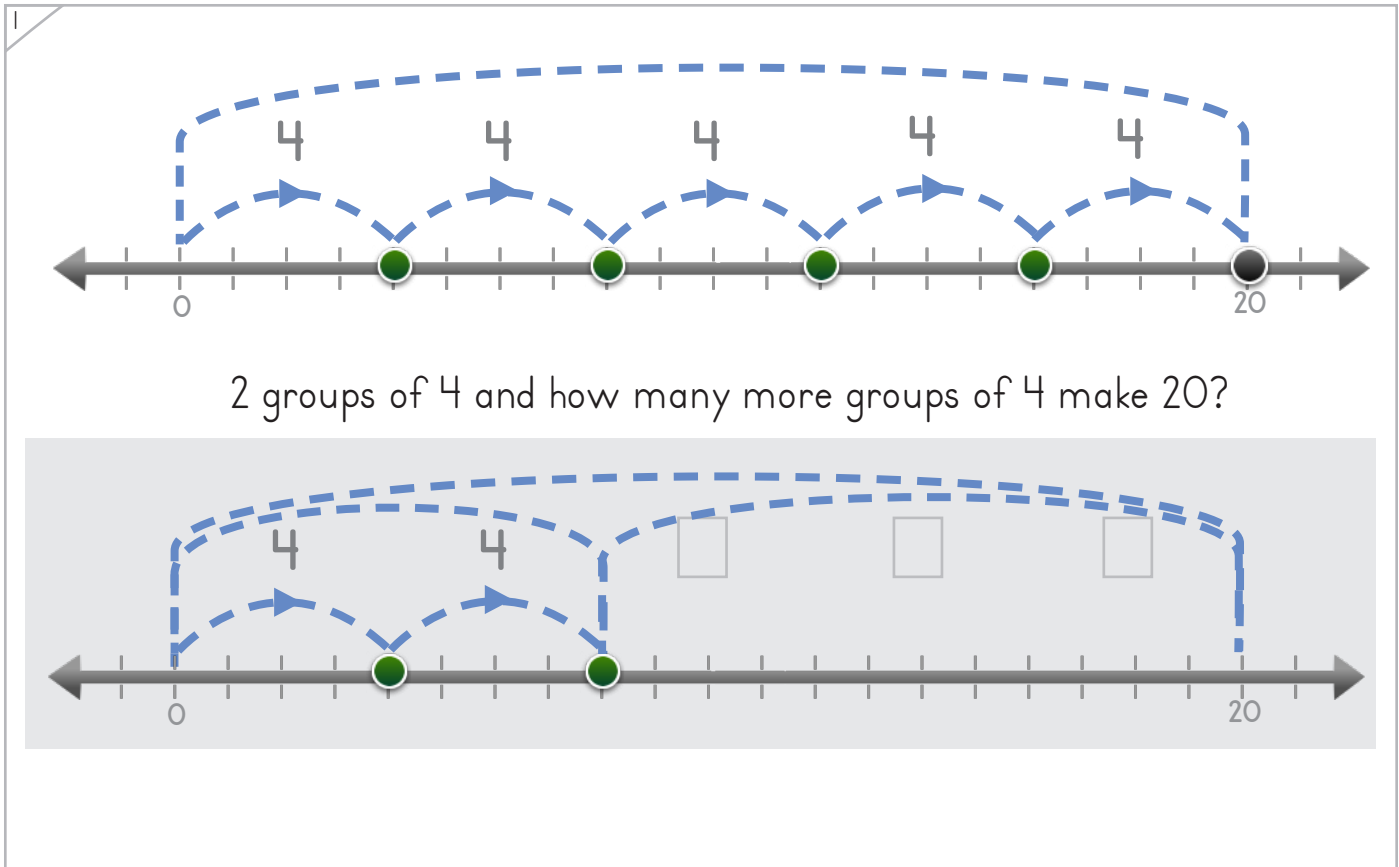
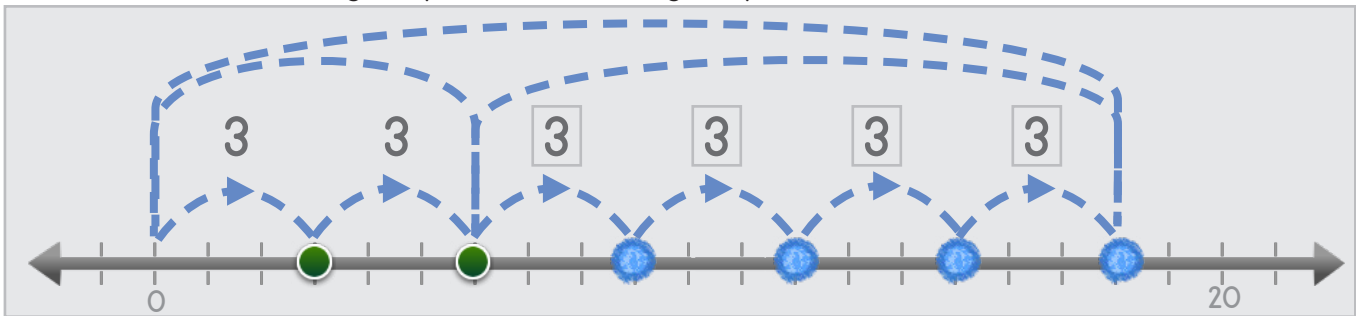
Draw the jumping dots and numbers to make the totals match.



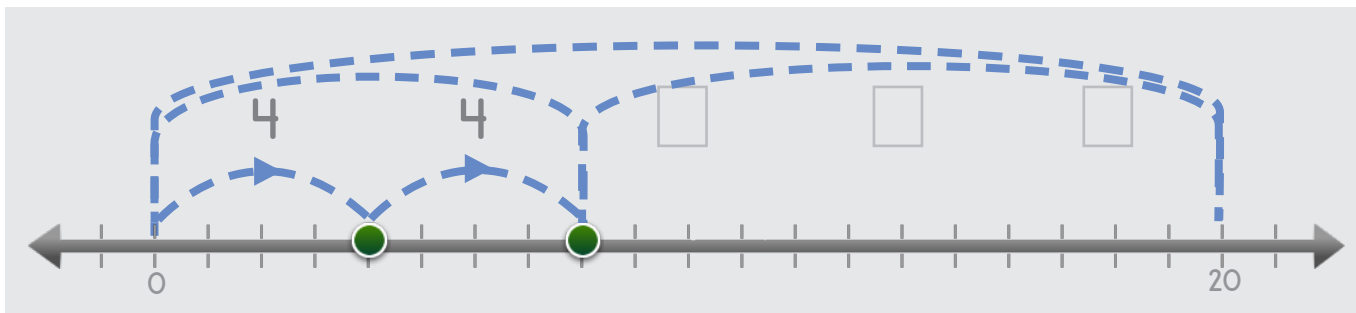
Manipulatives



2 groups of 3 and 4 groups of 3 make 18.



2 groups of 4 and how many more groups of 4 make 20?



Copyright © 2014 Symphony Learning LLC. Permission is granted to reproduce this sheet for classroom use.





Manipulatives

Draw the missing bar to make the totals match.

Example

3 groups of 4 and 2 groups of 4 make 20.

3 groups of 4 and 2 groups of 4 make 20.

3 groups of 2 and how many more groups of 2 make 12?

3 groups of 2 and how many more groups of 2 make 12?





Draw the missing dot card and number.

1

	\times		$=$		$=$	
	\times		$+$		\times	
2×3	$+$		\times	3	$=$	15

2

2

	\times		$=$	
	$+$		\times	
3×4	$+$		\times	4
3×4	$=$	20		



Name: _____ Date: _____

Draw the jumping dots and numbers to make the totals match.



Manipulatives and Symbols

1

$$2 \times 4 + \square \times 4 = 20$$

2

$$2 \times 3 + \square \times 3 = 18$$

Copyright © 2014 Symphony Learning LLC. Permission is granted to reproduce this sheet for classroom use.





Draw the missing bar and numbers to make the totals match.

1

=

x

+

+

3 x 2 = 12

□ x 2 = 12

2

=

x

+

3 x 4 = 20

□ x 4 = 20



Name: _____ Date: _____



Symbols

Fill in the boxes for each number fact.

$$3 \times 2 + \square \times 2 = 10$$

$$2 \times 1 + \square \times 1 = 5$$

$$4 \times 2 + \square \times 2 = 14$$

$$5 \times 3 + \square \times 3 = 18$$

$$2 \times 4 + \square \times 4 = 20$$

$$3 \times 4 + \square \times 4 = 20$$

$$1 \times 4 + \square \times 4 = 16$$

