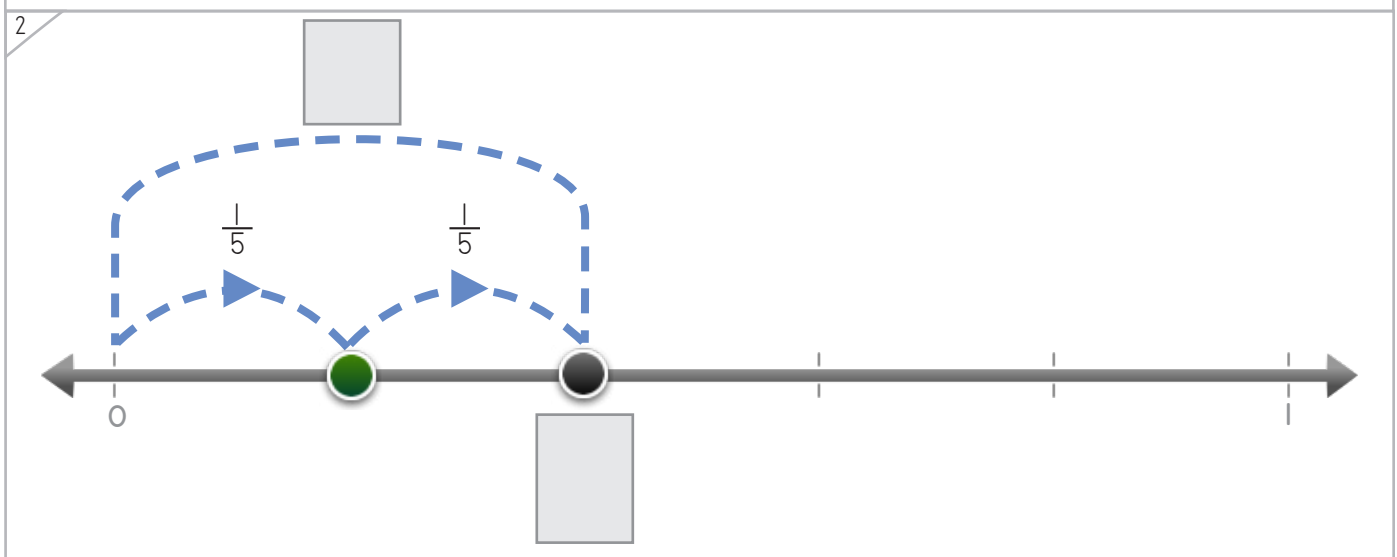
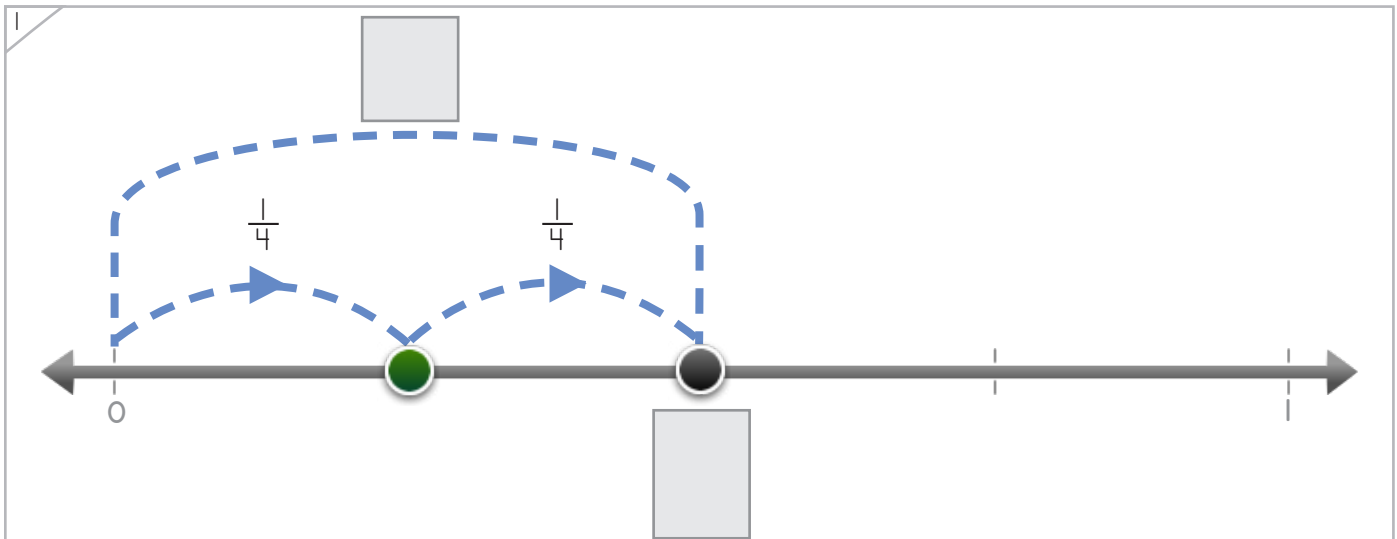
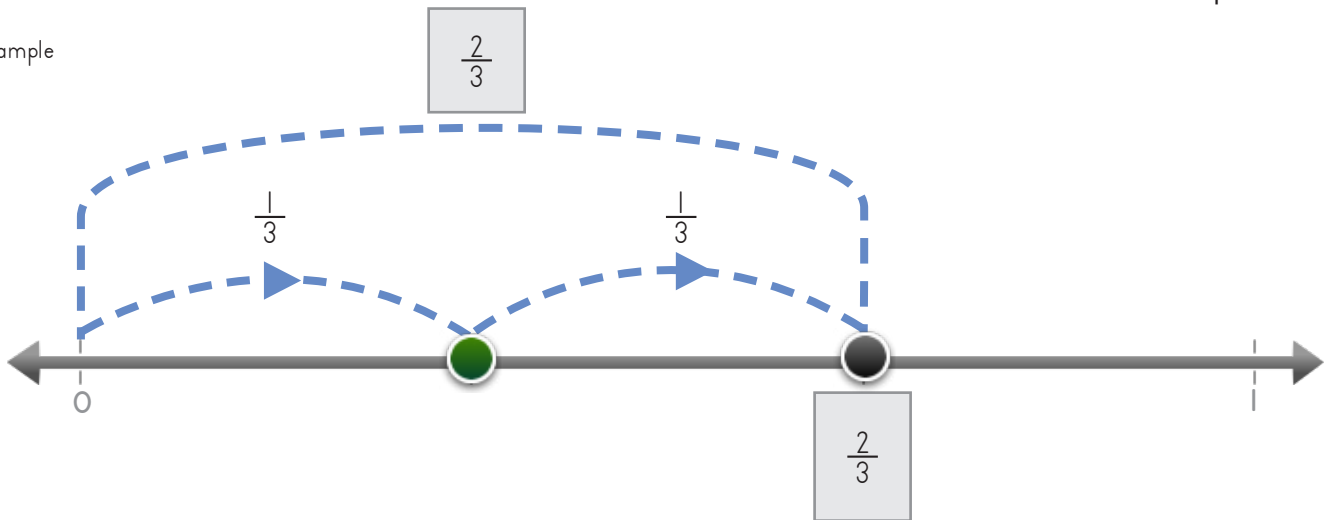


Name: _____ Date: _____



Write the fraction where the dot lands.

Example



Copyright © 2014 Symphony Learning LLC. Permission is granted to reproduce this sheet for classroom use.



Name: _____ Date: _____



Write the fraction where the dot lands.

1

2

3

Copyright © 2014 Symphony Learning LLC. Permission is granted to reproduce this sheet for classroom use.




Name: _____ Date: _____



Create a box that is the same as the boxes put together.

Example



This box and this box put together equal this box.

1

2

Copyright © 2014 Symphony Learning LLC. Permission is granted to reproduce this sheet for classroom use.



Name: _____ Date: _____



Create a box that is the same as the boxes put together.

1

$\left[\begin{array}{|c|c|c|c|c|} \hline \text{shaded} & & & & \\ \hline \end{array} \right] + \left[\begin{array}{|c|c|c|c|c|} \hline \text{shaded} & & & & \\ \hline \end{array} \right] = \left[\phantom{\begin{array}{|c|c|c|c|c|} \hline \\ \hline \end{array}} \right]$

2

$\left[\phantom{\begin{array}{|c|c|c|c|c|} \hline \\ \hline \end{array}} \right] = \left[\begin{array}{|c|c|c|} \hline \text{shaded} & & \\ \hline \end{array} \right] + \left[\begin{array}{|c|c|c|} \hline \text{shaded} & & \\ \hline \end{array} \right] = \left[\phantom{\begin{array}{|c|c|c|c|c|} \hline \\ \hline \end{array}} \right]$

3

$\left[\begin{array}{|c|c|c|c|c|c|} \hline \text{shaded} & & & & & \\ \hline \end{array} \right] + \left[\begin{array}{|c|c|c|c|c|c|} \hline \text{shaded} & & & & & \\ \hline \end{array} \right] = \left[\phantom{\begin{array}{|c|c|c|c|c|c|} \hline \\ \hline \end{array}} \right]$

Copyright © 2014 Symphony Learning LLC. Permission is granted to reproduce this sheet for classroom use.



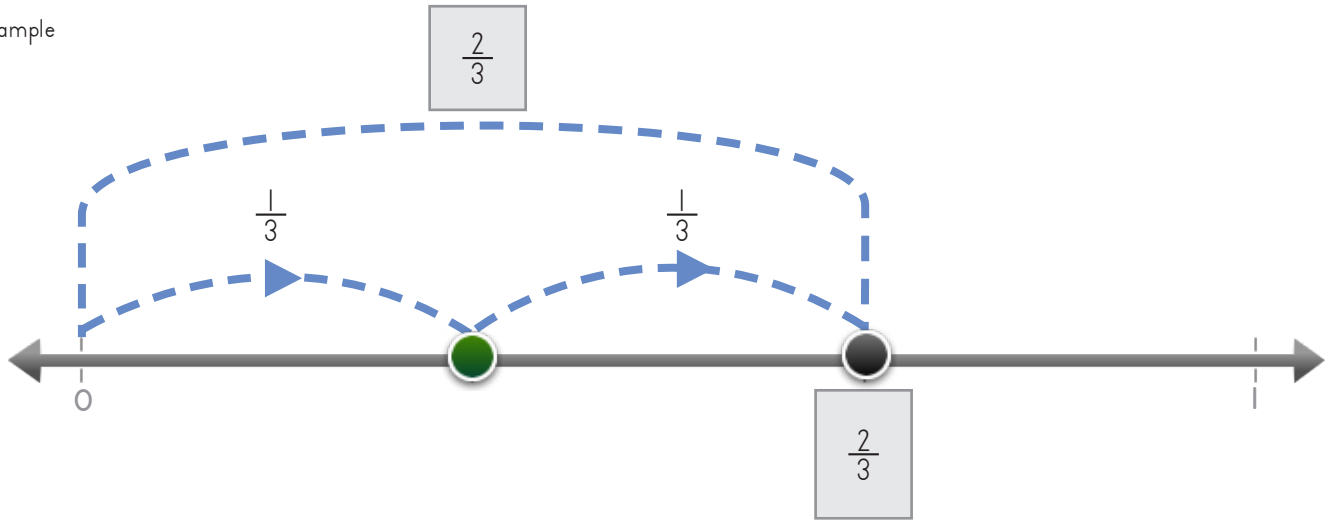
Name: _____ Date: _____

Write fractions to make the number line and the number sentence match.



Manipulatives and Symbols

Example



$$\frac{1}{3} + \frac{1}{3} = \frac{2}{3}$$

$$\frac{1}{4} + \frac{1}{4} = \square$$

Copyright © 2014 Symphony Learning LLC. Permission is granted to reproduce this sheet for classroom use.



Name: _____ Date: _____

Write fractions to make the number line and the number sentence match.



1

$\frac{1}{5} + \frac{1}{5} = \square$

2

$\frac{1}{8} + \frac{1}{8} = \square$

Copyright © 2014 Symphony Learning LLC. Permission is granted to reproduce this sheet for classroom use.



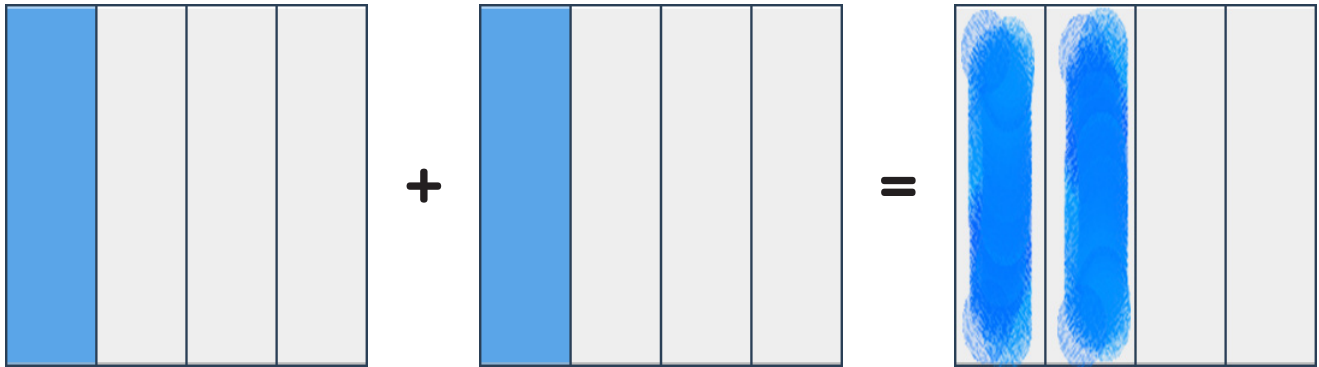
Name: _____ Date: _____

Draw bars and fractions to complete each number sentence.



Manipulatives and Symbols

Example



$$\frac{1}{4} + \frac{1}{4} = \frac{2}{4}$$

1

$$\frac{1}{3} + \frac{1}{3} = \square$$

Copyright © 2014 Symphony Learning LLC. Permission is granted to reproduce this sheet for classroom use.



Name: _____ Date: _____



Manipulatives and Symbols

Draw bars and fractions to complete each number sentence.

1

$\square = \square + \square$

$\square = \frac{1}{6} + \frac{1}{6}$

2

$\square + \square = \square$

$\frac{1}{5} + \frac{1}{5} = \square$

Copyright © 2014 Symphony Learning LLC. Permission is granted to reproduce this sheet for classroom use.



Name: _____ Date: _____



Symbols

Write the missing fraction.

$$\frac{1}{3} + \frac{1}{3} = \square$$

$$\frac{1}{5} + \frac{1}{5} = \square$$

$$\frac{1}{4} + \frac{1}{4} = \square$$

$$\frac{1}{2} + \frac{1}{2} = \square$$

Copyright © 2014 Symphony Learning LLC. Permission is granted to reproduce this sheet for classroom use.

