

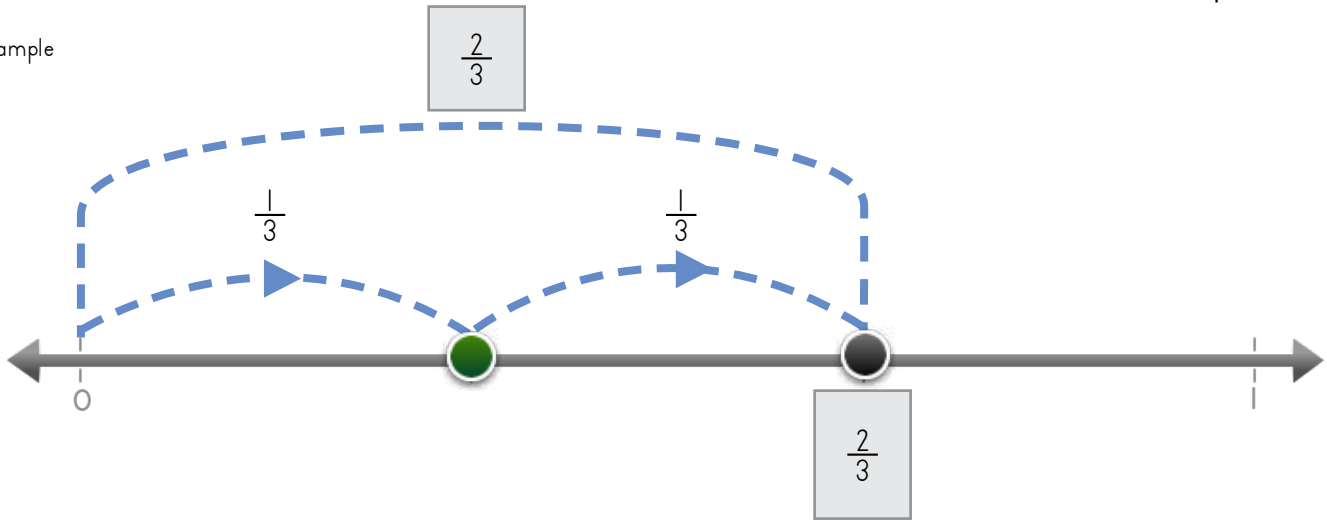
Name: _____ Date: _____



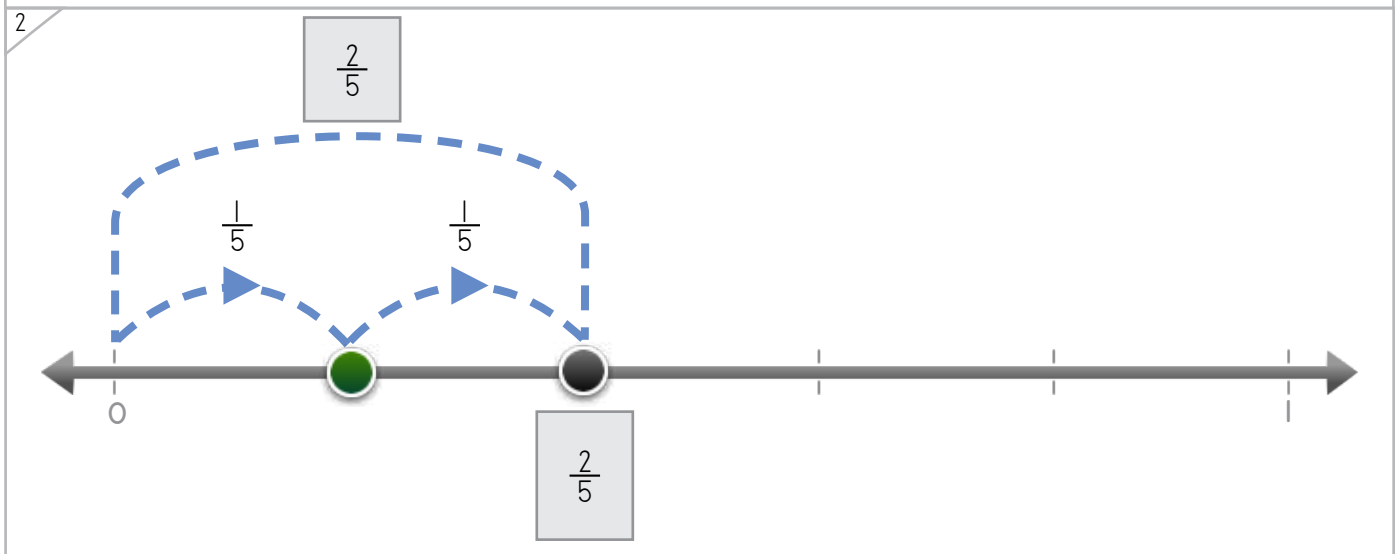
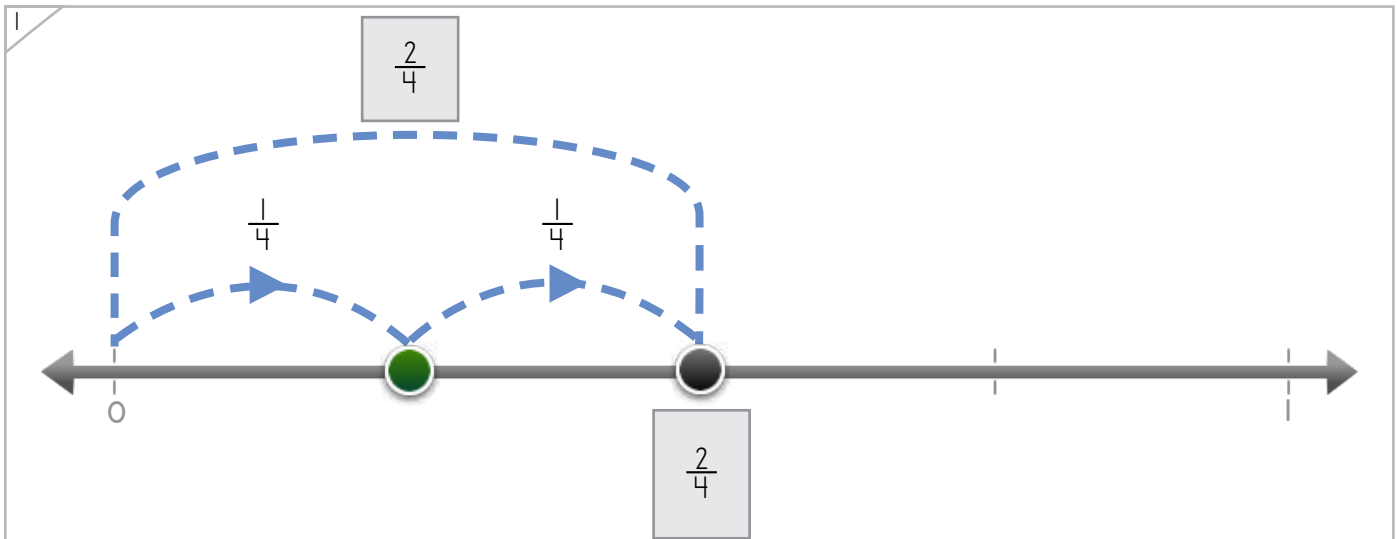
Manipulatives

Write the fraction where the dot lands.

Example



ANSWER KEY



Copyright © 2014 Symphony Learning LLC. Permission is granted to reproduce this sheet for classroom use.

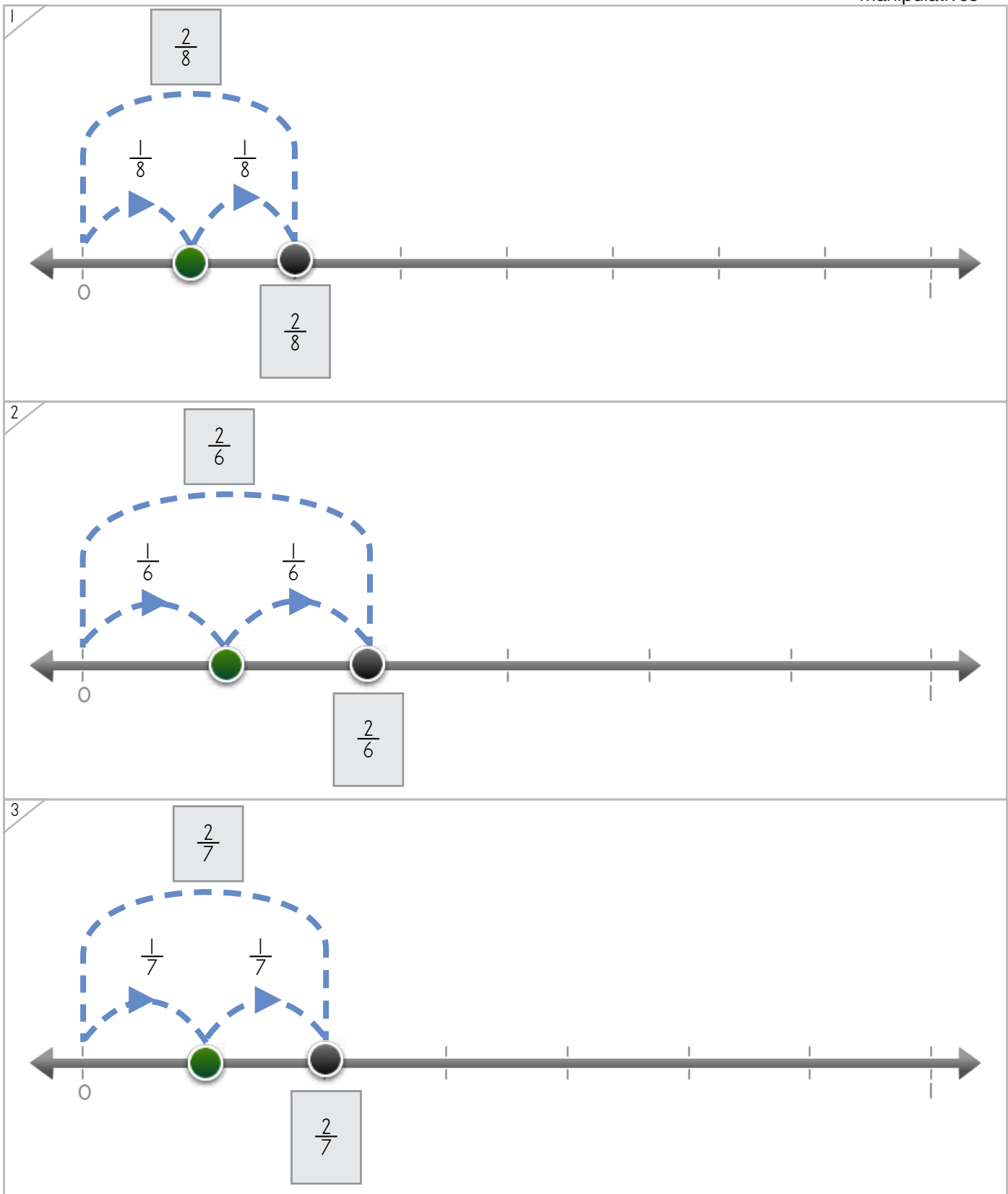


Name: _____ Date: _____



Manipulatives

Write the fraction where the dot lands.



ANSWER KEY

Copyright © 2014 Symphony Learning LLC. Permission is granted to reproduce this sheet for classroom use.

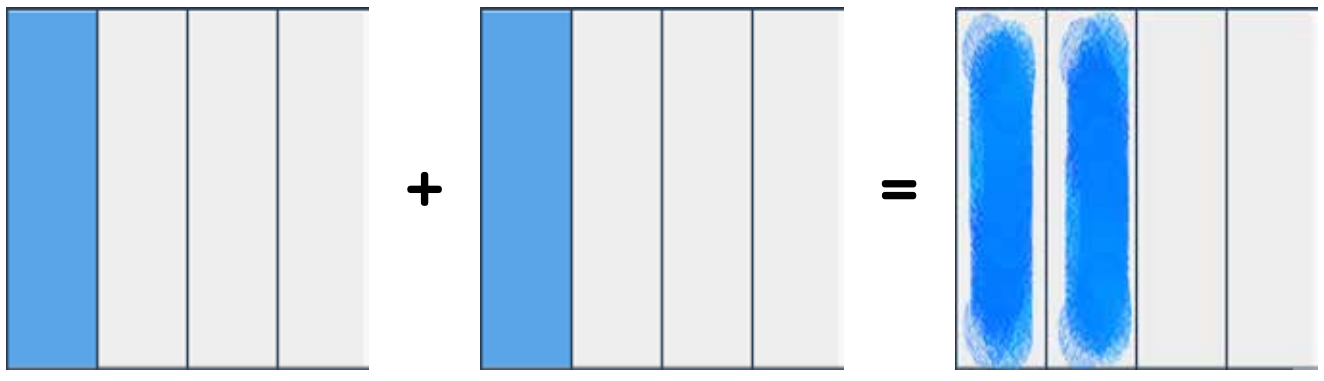


Name: _____ Date: _____



Create a box that is the same as the boxes put together.

Example



This box and this box put together equal this box.

ANSWER KEY

1

+

=

2


=

+

Copyright © 2014 Symphony Learning LLC. Permission is granted to reproduce this sheet for classroom use.



Name: _____ Date: _____



Create a box that is the same as the boxes put together.

1

$\frac{1}{5} + \frac{1}{5} = \frac{2}{5}$

ANSWER KEY

2

$\frac{2}{5} = \frac{1}{5} + \frac{1}{5}$

3

$\frac{1}{5} + \frac{1}{5} = \frac{2}{5}$

Copyright © 2014 Symphony Learning LLC. Permission is granted to reproduce this sheet for classroom use.



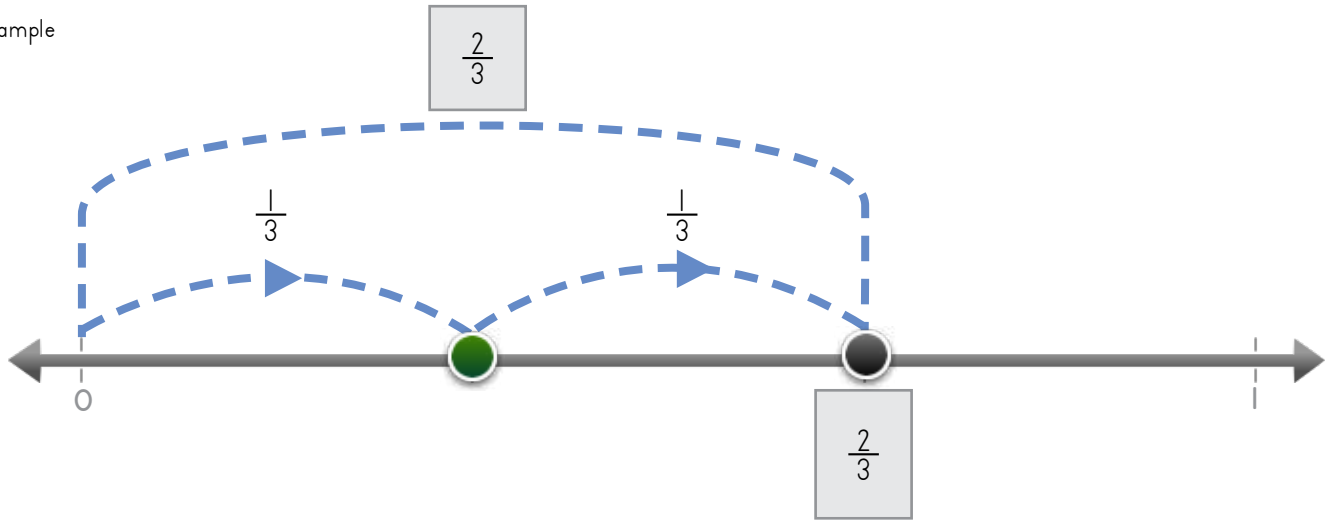
Name: _____ Date: _____

Write fractions to make the number line and the number sentence match.



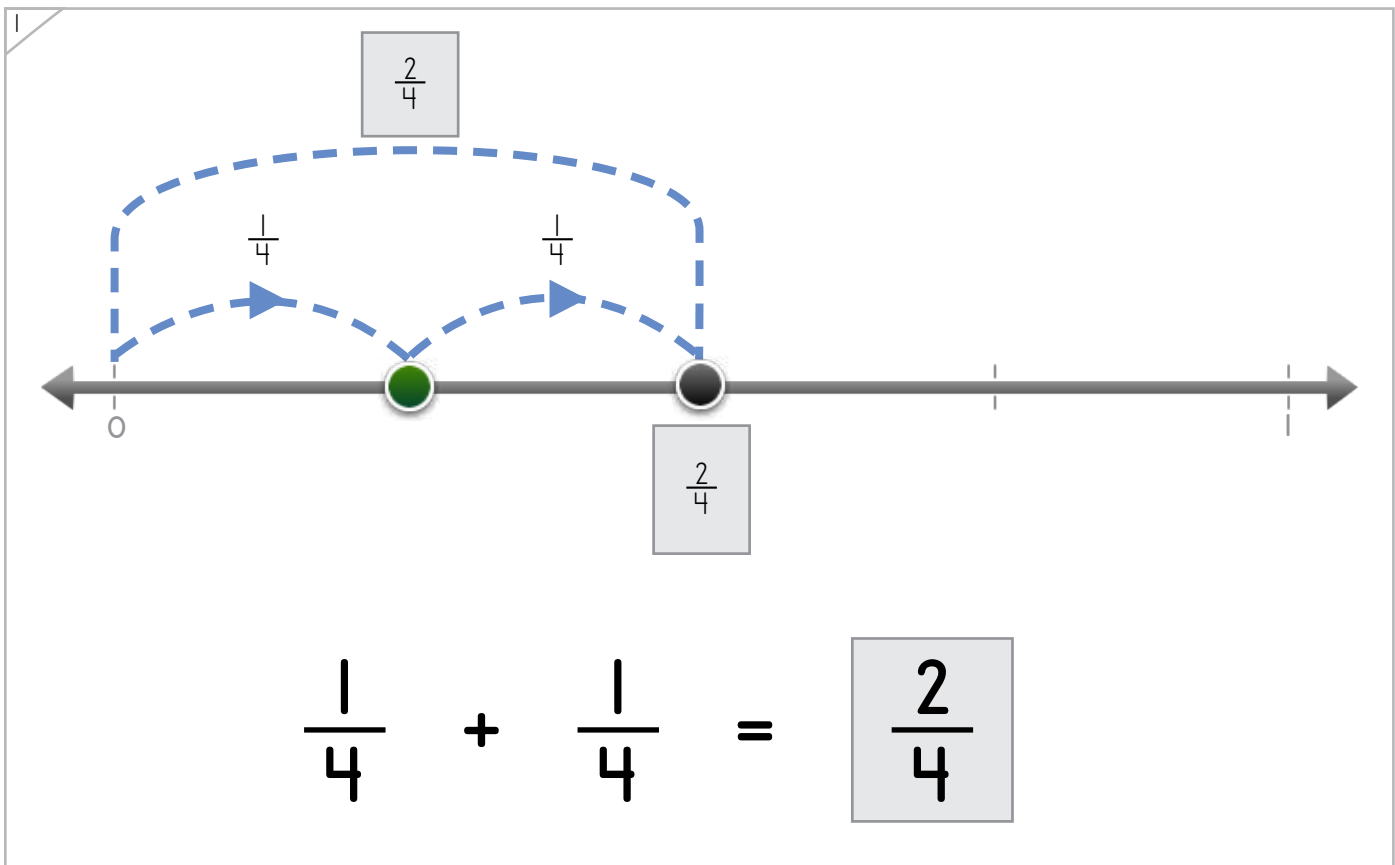
Manipulatives and Symbols

Example



$$\frac{1}{3} + \frac{1}{3} = \frac{2}{3}$$

ANSWER KEY



$$\frac{1}{4} + \frac{1}{4} = \frac{2}{4}$$

Copyright © 2014 Symphony Learning LLC. Permission is granted to reproduce this sheet for classroom use.



Name: _____ Date: _____

Write fractions to make the number line and the number sentence match.



Manipulatives and Symbols

1

$\frac{1}{5} + \frac{1}{5} = \frac{2}{5}$

ANSWER KEY

2

$\frac{1}{8} + \frac{1}{8} = \frac{2}{8}$

Copyright © 2014 Symphony Learning LLC. Permission is granted to reproduce this sheet for classroom use.



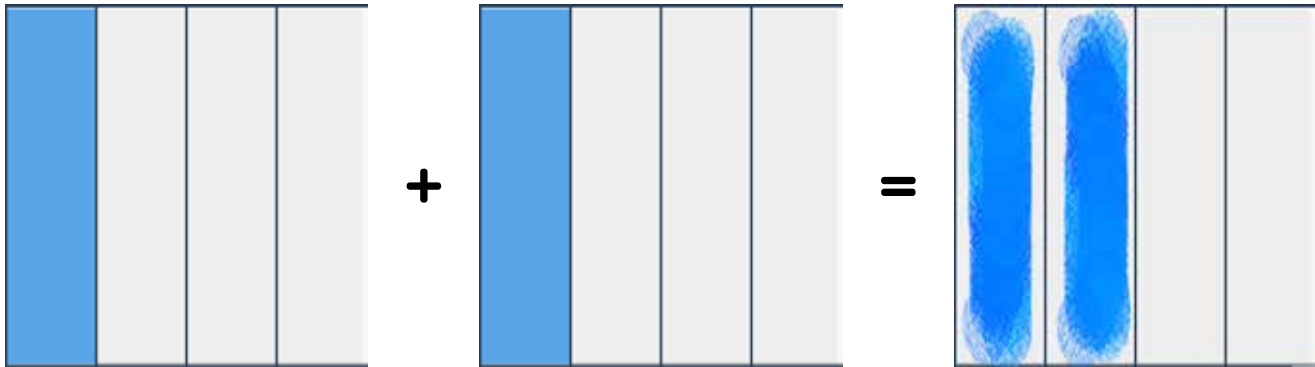
Name: _____ Date: _____

Draw bars and fractions to complete each number sentence.



Manipulatives and Symbols

Example



$$\frac{1}{4} + \frac{1}{4} = \frac{2}{4}$$

ANSWER KEY

1

$$\frac{1}{3} + \frac{1}{3} = \frac{2}{3}$$

Copyright © 2014 Symphony Learning LLC. Permission is granted to reproduce this sheet for classroom use.



Name: _____ Date: _____

Draw bars and fractions to complete each number sentence.



Manipulatives and Symbols

1

$$\frac{2}{6} = \frac{1}{6} + \frac{1}{6}$$

ANSWER KEY

2

$$\frac{1}{5} + \frac{1}{5} = \frac{2}{5}$$

Copyright © 2014 Symphony Learning LLC. Permission is granted to reproduce this sheet for classroom use.



Name: _____ Date: _____



Symbols

Write the missing fraction.

$$\frac{1}{3} + \frac{1}{3} = \boxed{\frac{2}{3}}$$

ANSWER KEY

$$\frac{1}{5} + \frac{1}{5} = \boxed{\frac{2}{5}}$$

$$\frac{1}{4} + \frac{1}{4} = \boxed{\frac{2}{4}}$$

$$\frac{1}{2} + \frac{1}{2} = \boxed{\frac{2}{2}}$$

Copyright © 2014 Symphony Learning LLC. Permission is granted to reproduce this sheet for classroom use.

