


Name: _____ Date: _____



Draw boxes to match each fraction.

Example



This box, this box and this box,

put together are

$$\frac{3}{1}$$

| | |
|---|---------------|
| 1 | $\frac{4}{1}$ |
| 2 | $\frac{2}{1}$ |

Copyright © 2014 Symphony Learning LLC. Permission is granted to reproduce this sheet for classroom use.



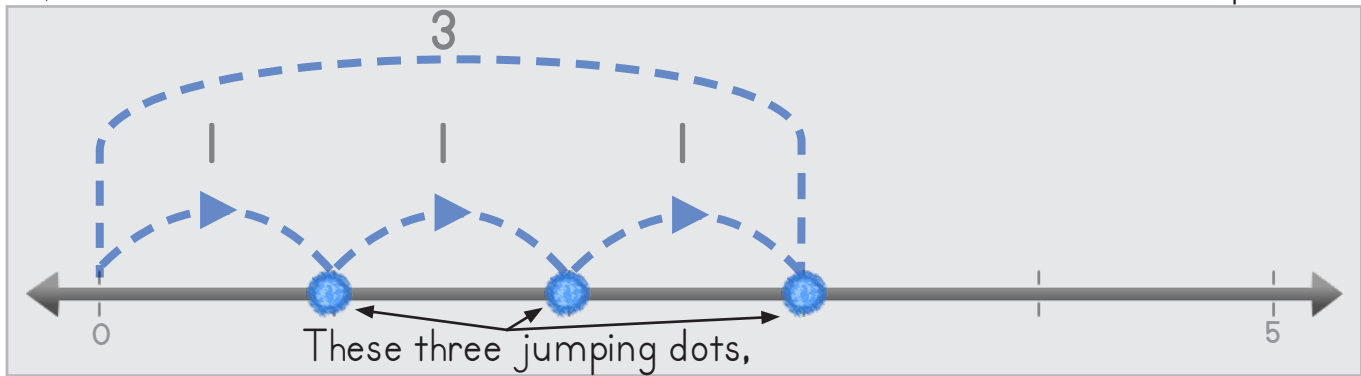
Name: _____ Date: _____

Draw jumping dots to match each fraction.




Manipulatives

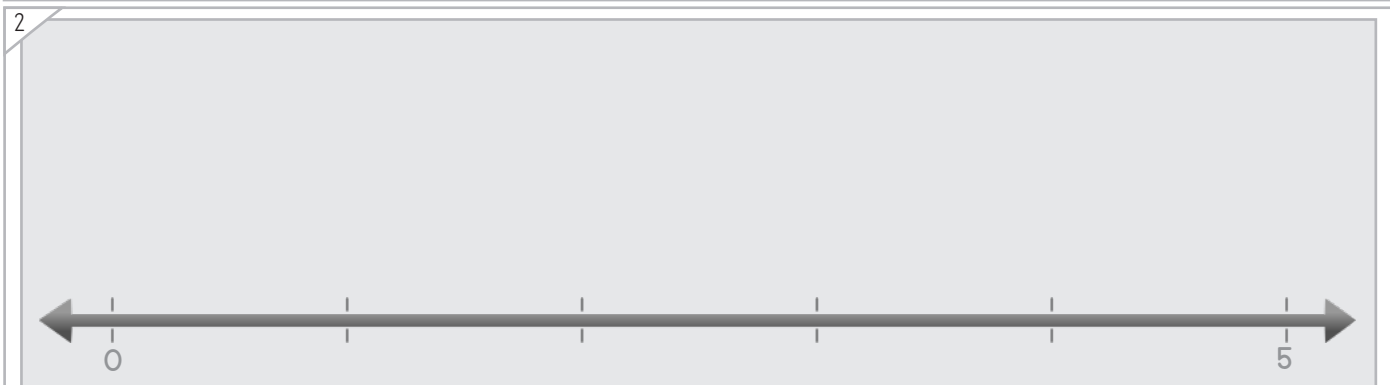
Example



put together are $\frac{3}{1}$



$\frac{4}{1}$



$\frac{5}{1}$

Copyright © 2014 Symphony Learning LLC. Permission is granted to reproduce this sheet for classroom use.





Name: _____ Date: _____



Manipulatives and Symbols

Draw boxes and fractions to match.

Example



$$\frac{1}{2} + \frac{1}{2} + \frac{1}{2} = \frac{3}{2}$$

1

$$\square + \square + \square + \square = \frac{4}{1}$$

2

$$\square + \square = \frac{2}{1}$$

Copyright © 2014 Symphony Learning LLC. Permission is granted to reproduce this sheet for classroom use.



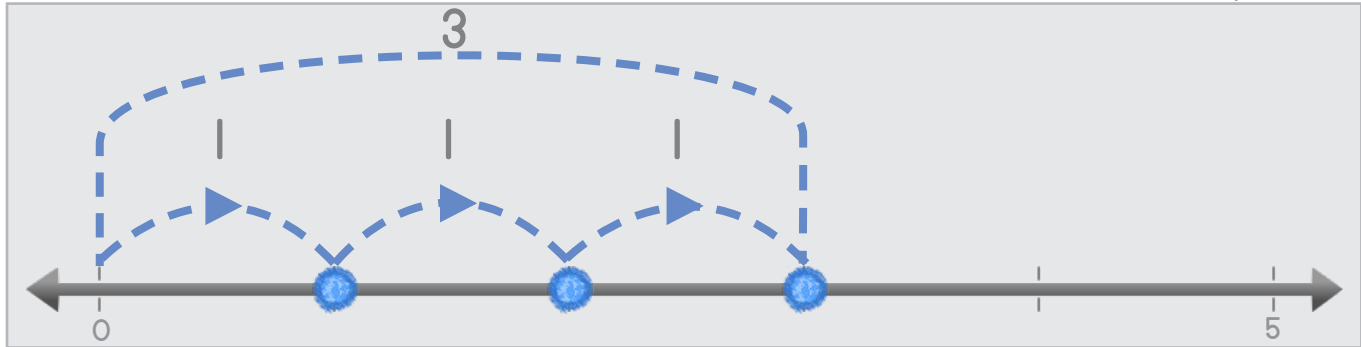
Name: _____ Date: _____

Draw jumping dots and fractions to match.

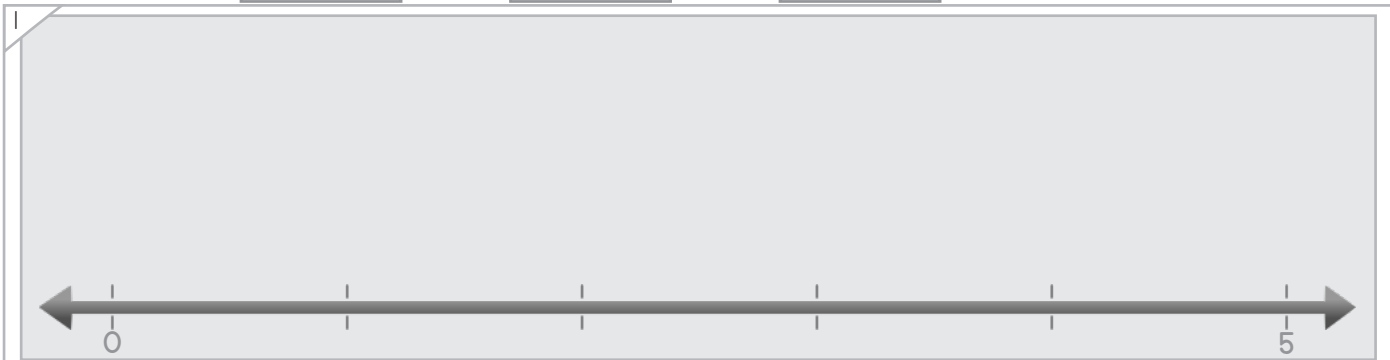


Manipulatives and Symbols


Example



$$\frac{1}{1} + \frac{1}{1} + \frac{1}{1} = \frac{3}{1}$$



$$\square + \square + \square + \square = \frac{4}{1}$$



$$\square + \square + \square + \square + \square = \frac{5}{1}$$

Copyright © 2014 Symphony Learning LLC. Permission is granted to reproduce this sheet for classroom use.



Name: _____ Date: _____

Write the missing fraction.



Symbols

$$\frac{|}{|} + \frac{|}{|} = \square$$

$$\frac{|}{|} + \frac{|}{|} + \frac{|}{|} + \frac{|}{|} = \square$$

$$\frac{|}{|} + \frac{|}{|} + \frac{|}{|} + \frac{|}{|} + \frac{|}{|} = \square$$

$$\frac{|}{|} + \frac{|}{|} + \frac{|}{|} = \square$$

Copyright © 2014 Symphony Learning LLC. Permission is granted to reproduce this sheet for classroom use.

