

Name: _____ Date: _____

Draw dot cards that are the same as the cards put together.



Example



How many groups of 8 make 24?

ANSWER KEY

1

How many groups of 7 make 28?

2

How many groups of 6 make 30?

3

How many groups of 9 make 36?

Copyright © 2014 Symphony Learning LLC. Permission is granted to reproduce this sheet for classroom use.

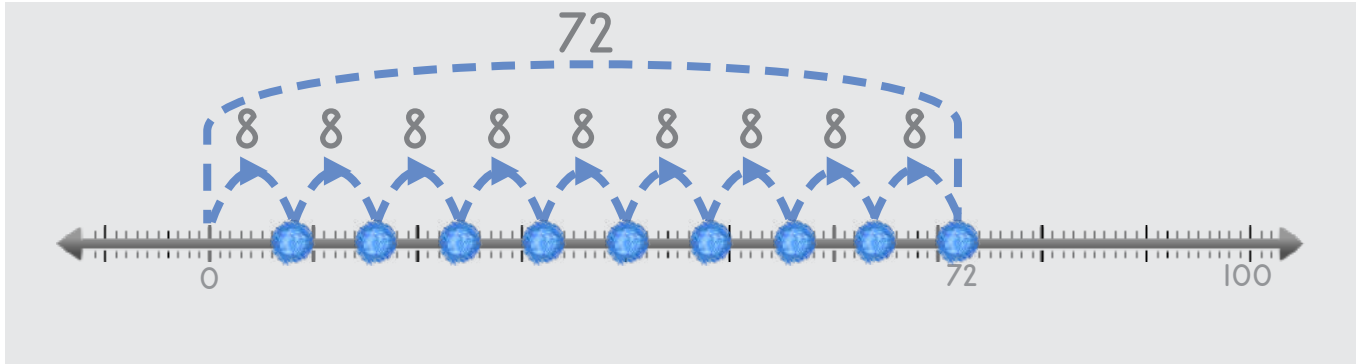


Name: _____ Date: _____

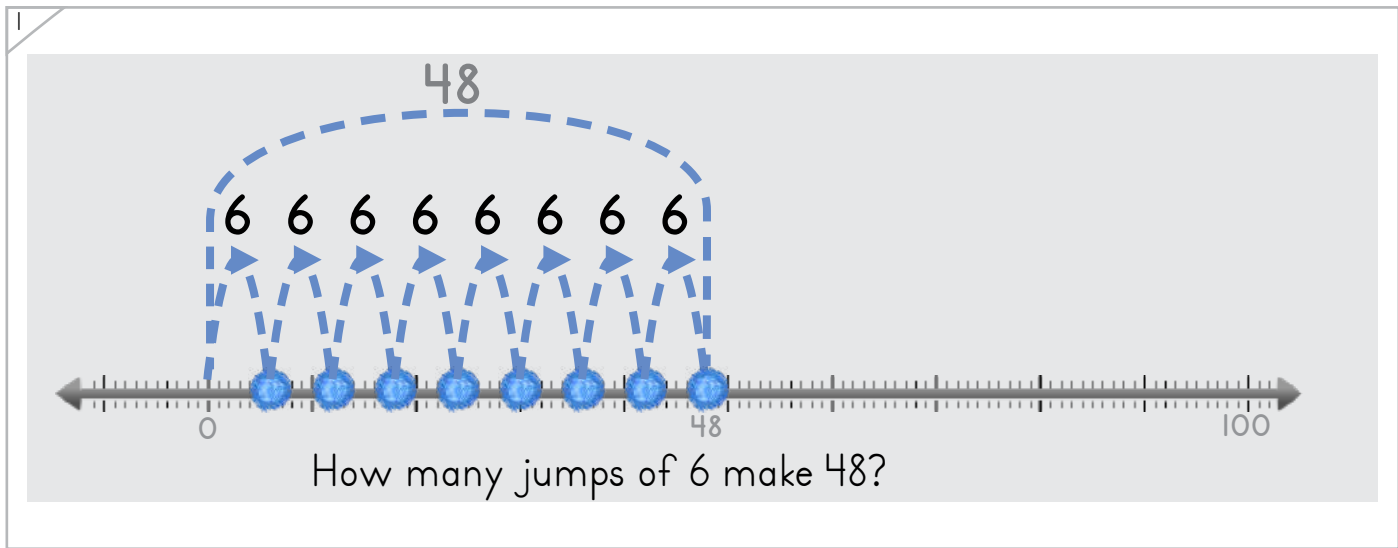
Draw jumping dots that are the same when put together.



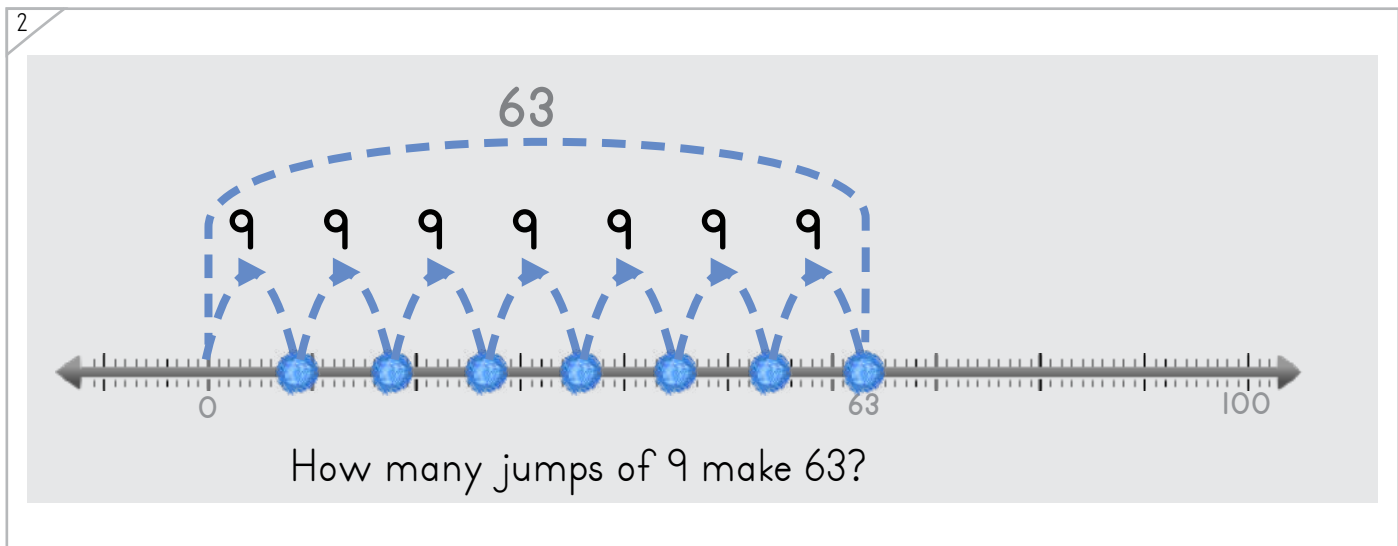
Example



How many jumps of 8 make 72?



How many jumps of 6 make 48?



How many jumps of 9 make 63?

ANSWER KEY

Copyright © 2014 Symphony Learning LLC. Permission is granted to reproduce this sheet for classroom use.



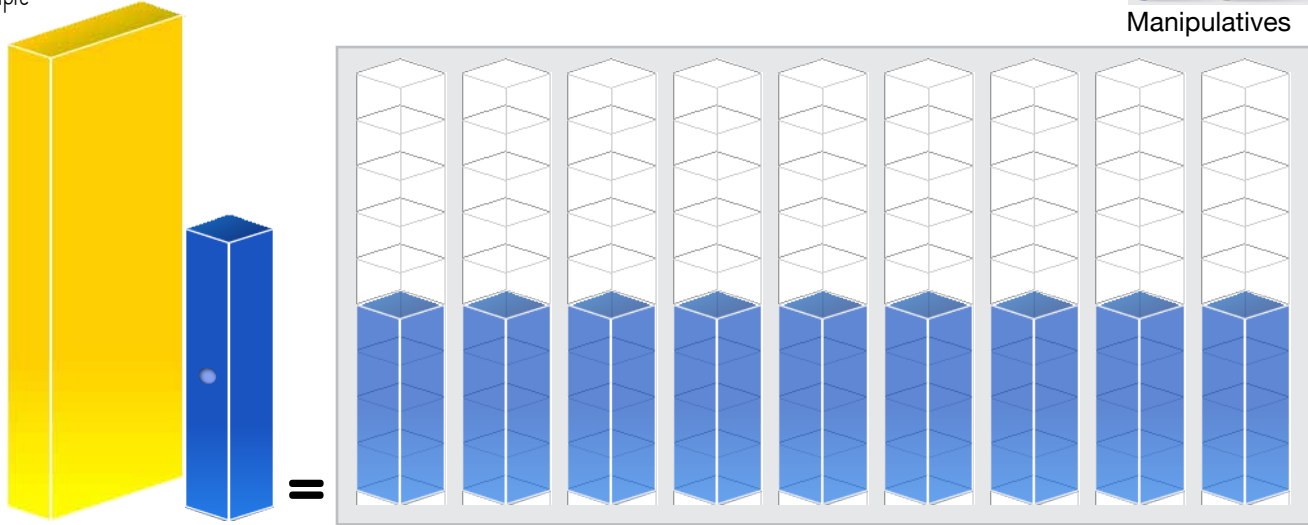
Name: _____ Date: _____

Draw bars that are the same as the bars put together.

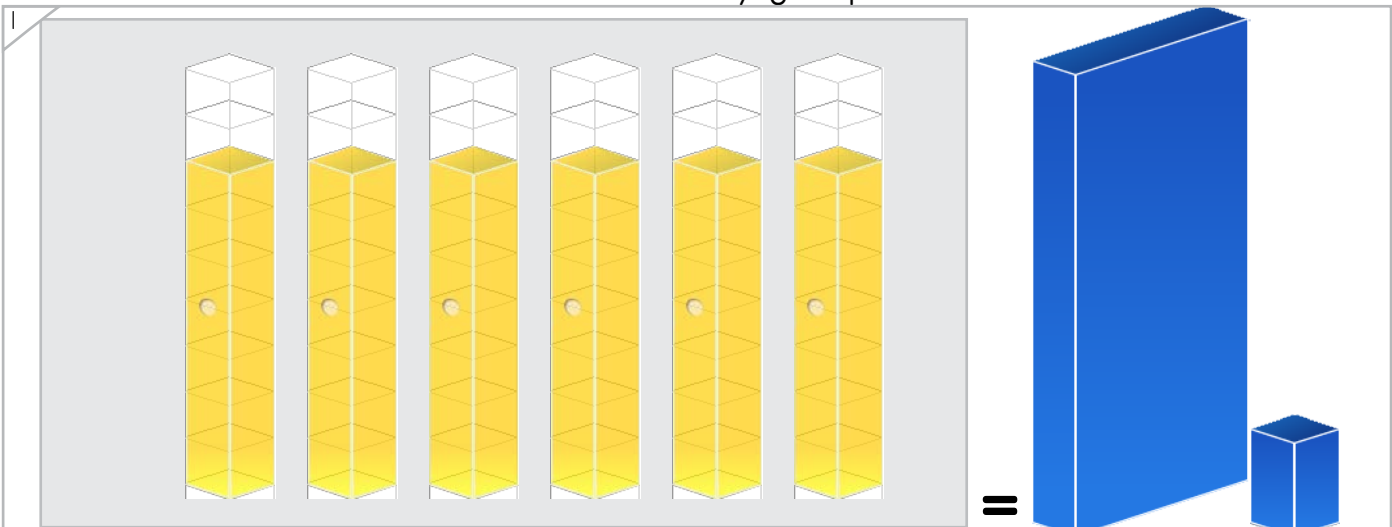
Example




Manipulatives



How many groups of 4 make 36?



How many groups of 7 make 42?



How many groups of 9 make 45?

ANSWER KEY

Copyright © 2014 Symphony Learning LLC. Permission is granted to reproduce this sheet for classroom use.



Name: _____ Date: _____

Draw groups of dot cards and numbers to complete the number problem.



Manipulatives and Symbols

1

$5 \times 7 = 35$

ANSWER KEY

2

$45 = 5 \times 9$

3

$3 \times 9 = 27$

Copyright © 2014 Symphony Learning LLC. Permission is granted to reproduce this sheet for classroom use.



Name: _____ Date: _____



Manipulatives and Symbols

Draw groups of jumping dots and numbers to complete the number fact.

1

$9 \times 9 = 81$

2

$72 = 9 \times 8$

3

$8 \times 8 = 64$

ANSWER KEY

Copyright © 2014 Symphony Learning LLC. Permission is granted to reproduce this sheet for classroom use.



Name: _____ Date: _____

Draw groups of bars and numbers to complete the number problem.



Manipulatives and Symbols

1

$9 \times 6 = 54$

ANSWER KEY

2

$60 = 5 \times 12$

Copyright © 2014 Symphony Learning LLC. Permission is granted to reproduce this sheet for classroom use.



Name: _____ Date: _____



Symbols

Complete each number fact.

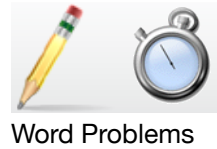
$\boxed{7} \times 8 = 56$	$90 = \boxed{10} \times 9$
$\boxed{9} \times 4 = 36$	$24 = \boxed{8} \times 3$
$\boxed{8} \times 8 = 64$	$35 = \boxed{7} \times 5$
$\boxed{7} \times 7 = 49$	$32 = \boxed{8} \times 4$
$\boxed{8} \times 6 = 48$	$36 = \boxed{9} \times 6$
$\boxed{9} \times 5 = 45$	$30 = \boxed{6} \times 5$
$\boxed{7} \times 9 = 63$	$24 = \boxed{6} \times 4$
$\boxed{8} \times 5 = 40$	$81 = \boxed{9} \times 9$

ANSWER KEY

Copyright © 2014 Symphony Learning LLC. Permission is granted to reproduce this sheet for classroom use.



Name: _____ Date: _____




Read the story.

Robert helps clean his house by washing the windows. His house has 36 windows. He cleans 9 windows each day until all the windows are cleaned. How many days does it take Robert to clean all the windows?

ANSWER KEY

Draw dot cards to make a model for the story.



Write a number fact that matches your model.

$$\boxed{4} \times \boxed{9} = \boxed{36}$$

Answer: 4 days

Copyright © 2014 Symphony Learning LLC. Permission is granted to reproduce this sheet for classroom use.



Name: _____ Date: _____



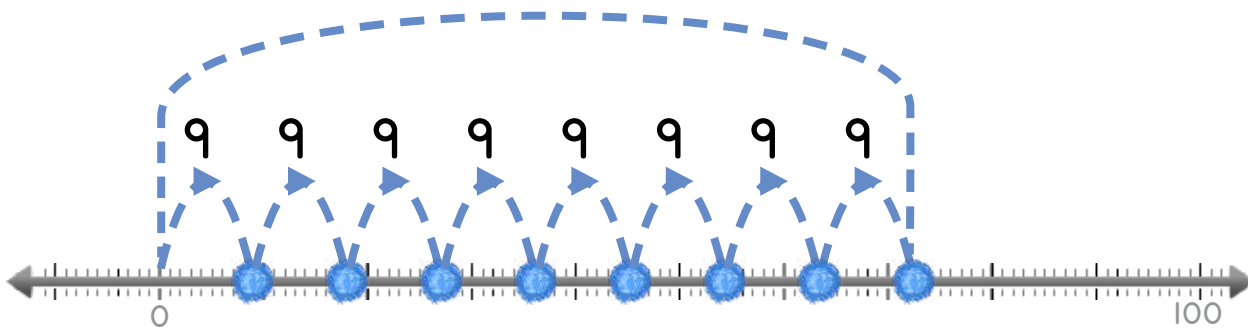
Word Problems

Read the story.

Sofia collects \$72 from some friends to buy a gift for their teacher. If each friend gave Sofia \$9, how many friends gave money to Sofia for the gift?

ANSWER KEY

Draw dots to make a model for the story.



Write a number fact that matches your model.

$$\boxed{8} \quad \boxed{\times} \quad \boxed{9} \quad \boxed{=} \quad \boxed{72}$$

Answer: 8 friends gave money

Copyright © 2014 Symphony Learning LLC. Permission is granted to reproduce this sheet for classroom use.

