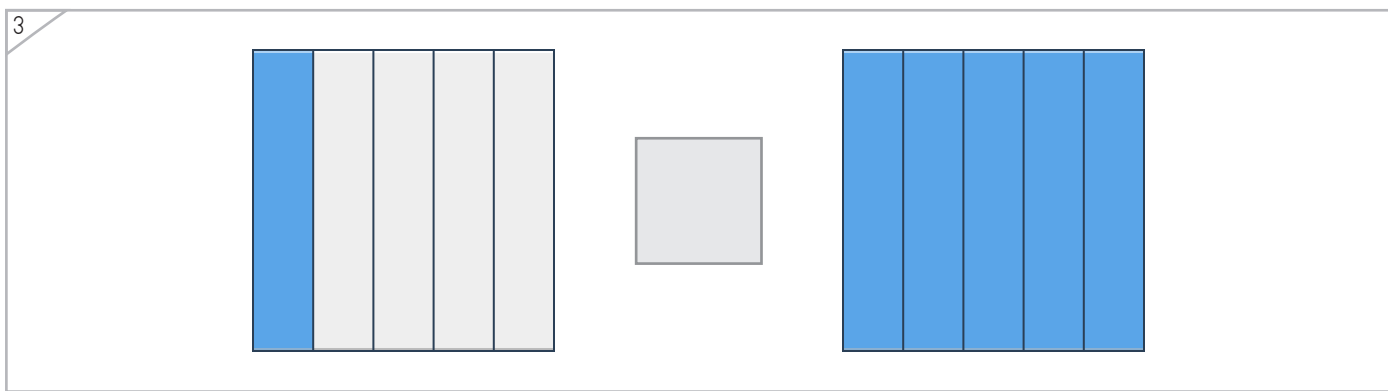
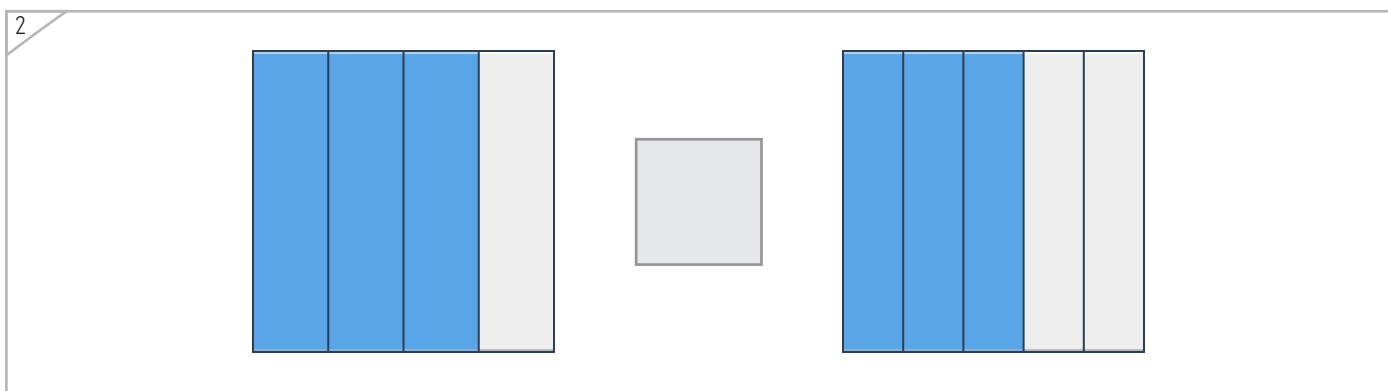
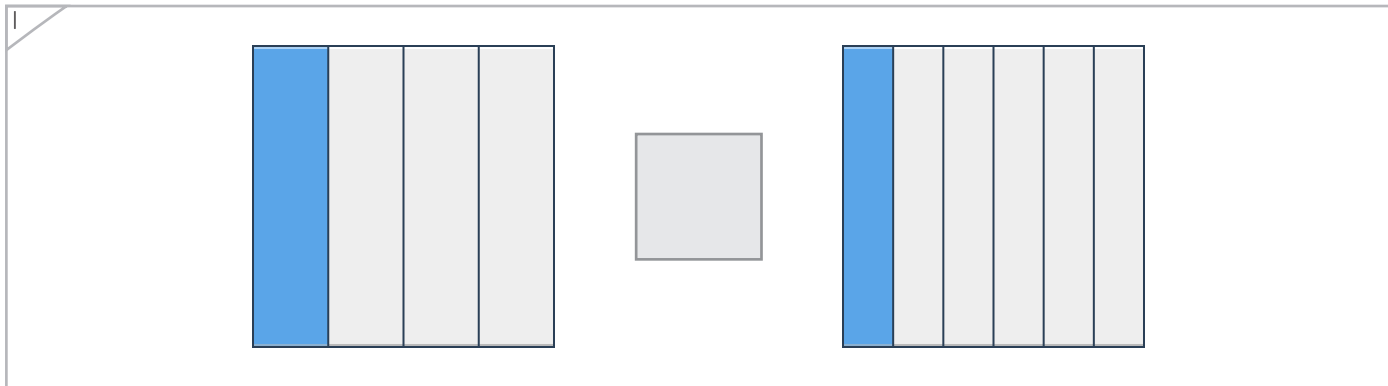


Name: _____ Date: _____

Draw the symbol to make each comparison true.

Example



Copyright © 2014 Symphony Learning LLC. Permission is granted to reproduce this sheet for classroom use.



Name: _____ Date: _____



Draw the symbol to make each comparison true.

Example



$$\frac{1}{3} > \frac{1}{5}$$

1

$$\frac{2}{6} \square \frac{2}{4}$$

2

$$\frac{6}{8} \square \frac{5}{7}$$

Copyright © 2014 Symphony Learning LLC. Permission is granted to reproduce this sheet for classroom use.



Name: _____ Date: _____



Draw the symbol to make each comparison true.

Example



$$\frac{1}{3} \quad \square \quad \frac{1}{5}$$

1



$$\frac{2}{4} \quad \square \quad \frac{2}{6}$$

2



$$\frac{7}{7} \quad \square \quad \frac{7}{8}$$

Copyright © 2014 Symphony Learning LLC. Permission is granted to reproduce this sheet for classroom use.




Name: _____ Date: _____



Manipulatives and Symbols


Draw the symbol and complete the fraction to make each comparison true.

1




$\frac{1}{\square}$

$<$




$\frac{3}{7}$

2



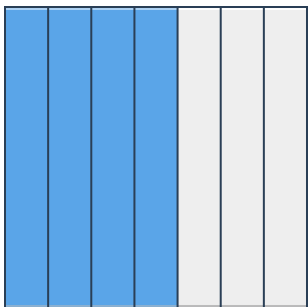
$\frac{3}{4}$

$>$



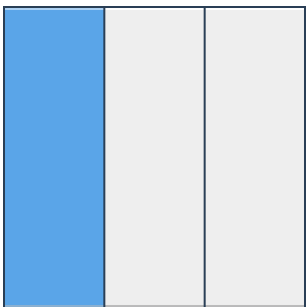
$\frac{3}{\square}$

3



$\frac{4}{7}$

\square



$\frac{\square}{3}$

Copyright © 2014 Symphony Learning LLC. Permission is granted to reproduce this sheet for classroom use.



Name: _____ Date: _____

Draw dots, symbols and complete the fractions to make the number comparison true.



Manipulatives and Symbols

1

0

$$\frac{1}{3} > \frac{\square}{4}$$

2

0

$$\frac{1}{6} \square \frac{4}{\square}$$

3

0

$$\frac{\square}{\square} \square \frac{\square}{\square}$$

Copyright © 2014 Symphony Learning LLC. Permission is granted to reproduce this sheet for classroom use.

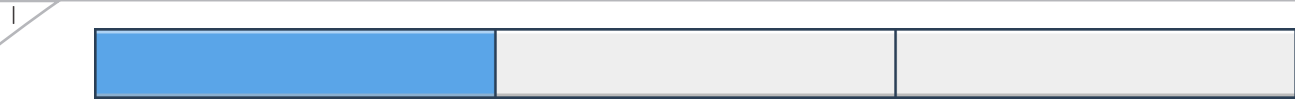


Name: _____ Date: _____

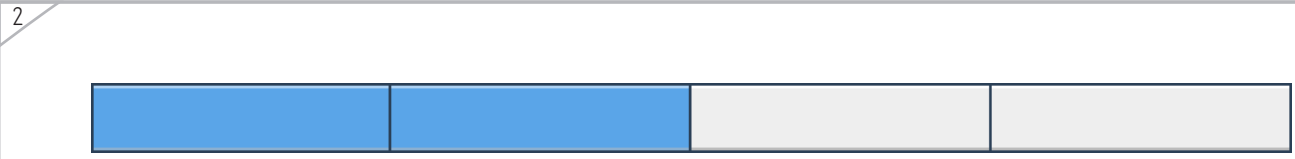


Manipulatives and Symbols

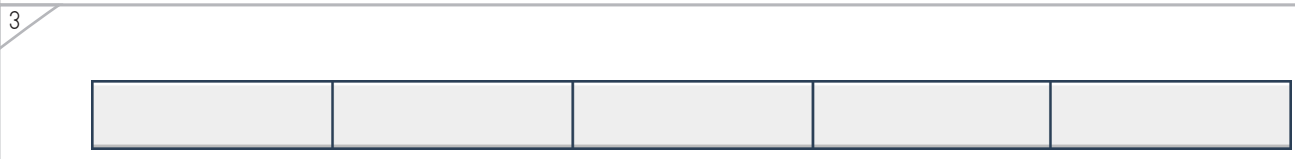
Draw the symbol and fractions to make each comparison true.



$$\frac{1}{\square} \quad \square \quad \frac{1}{5}$$



$$\frac{2}{4} \quad \square \quad \frac{2}{6}$$



$$\square \quad \square \quad \square$$

Copyright © 2014 Symphony Learning LLC. Permission is granted to reproduce this sheet for classroom use.



Name: _____ Date: _____



Symbols

Fill in the boxes to make each number comparison true.

$\frac{1}{5}$ <input type="text"/> $\frac{3}{4}$	$\frac{1}{8} <$ <input type="text"/>
<input type="text"/> $>$ $\frac{1}{9}$	$\frac{2}{4}$ <input type="text"/> $\frac{1}{3}$
$\frac{2}{5}$ <input type="text"/> $\frac{1}{3}$	<input type="text"/> $=$ $\frac{2}{4}$
$\frac{5}{6} >$ <input type="text"/>	$\frac{3}{5}$ <input type="text"/> $\frac{4}{5}$
$\frac{1}{4} <$ <input type="text"/>	<input type="text"/> $<$ $\frac{3}{4}$
$\frac{1}{5} <$ <input type="text"/>	<input type="text"/> $=$ $\frac{1}{2}$

