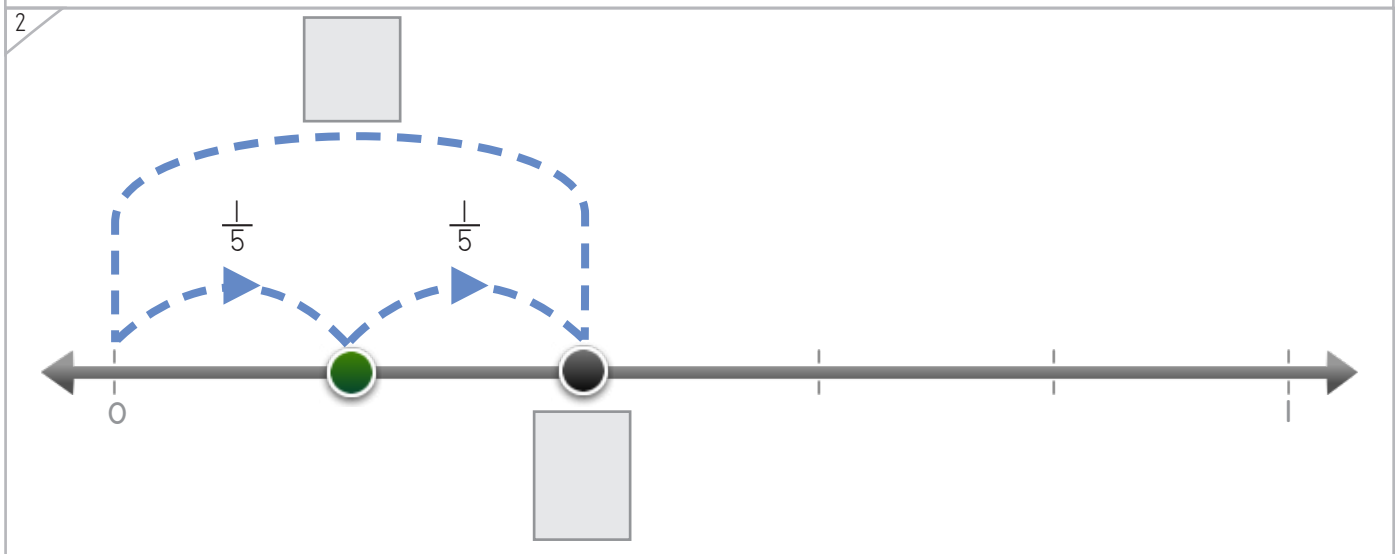
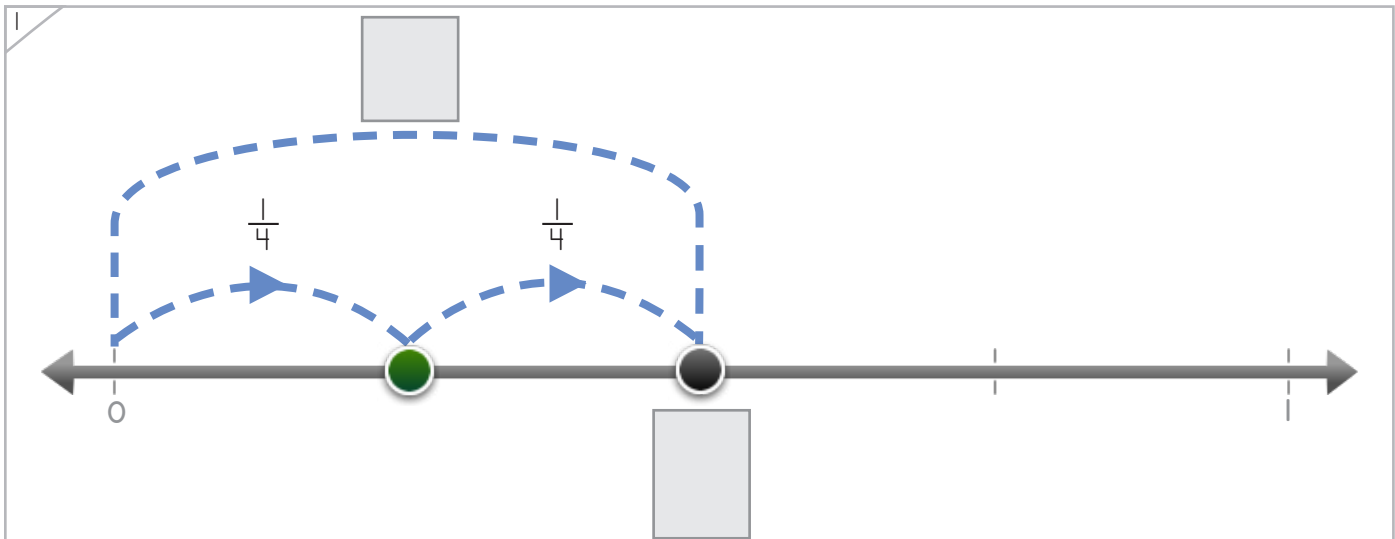
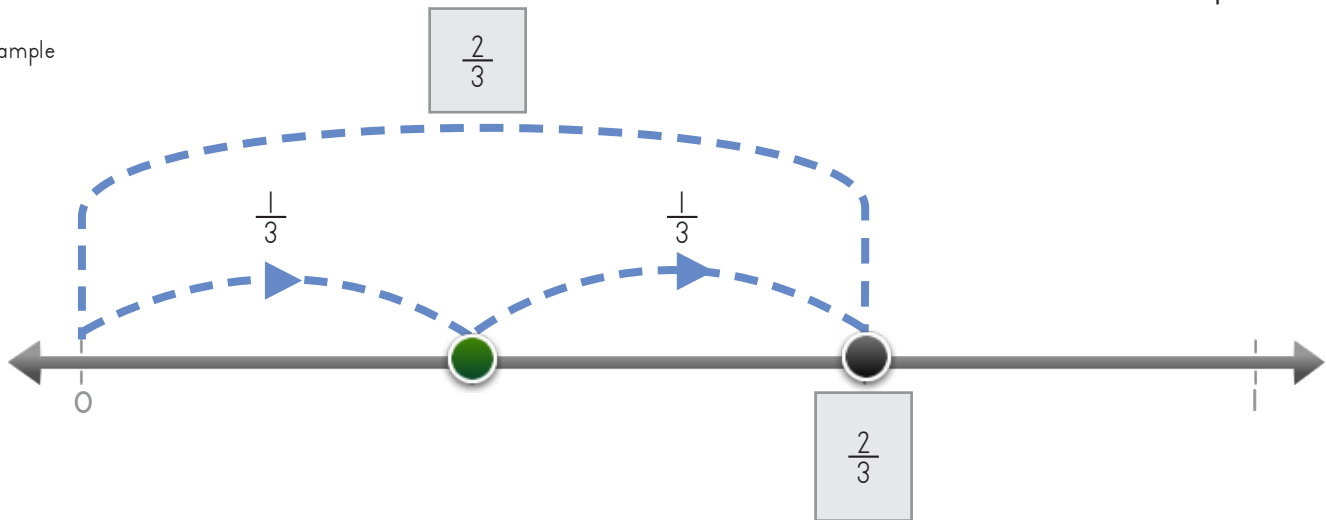


Name: _____ Date: _____



Write the fraction where the dot lands.

Example



Copyright © 2014 Symphony Learning LLC. Permission is granted to reproduce this sheet for classroom use.



Name: _____ Date: _____



Manipulatives

Write the fraction where the dot lands.

1

2

3

Copyright © 2014 Symphony Learning LLC. Permission is granted to reproduce this sheet for classroom use.




Name: _____ Date: _____



Create a box that is the same as the boxes put together.

Example



This box and this box put together equal this box.

1

2

Copyright © 2014 Symphony Learning LLC. Permission is granted to reproduce this sheet for classroom use.



Name: _____ Date: _____



Create a box that is the same as the boxes put together.

1

$\text{[Block with 1 blue column]} + \text{[Block with 1 blue column]} = \text{[Empty Box]}$

2

$\text{[Empty Box]} = \text{[Block with 1 blue column]} + \text{[Block with 1 blue column]}$

3

$\text{[Block with 1 blue column]} + \text{[Block with 1 blue column]} = \text{[Empty Box]}$

Copyright © 2014 Symphony Learning LLC. Permission is granted to reproduce this sheet for classroom use.



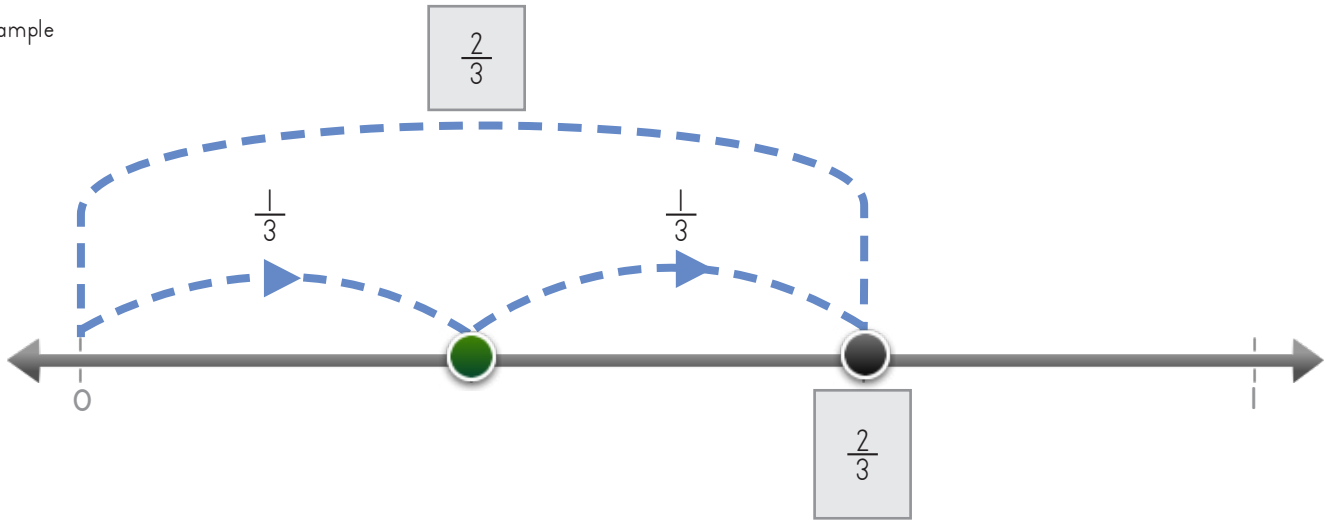
Name: _____ Date: _____

Write fractions to make the number line and the number sentence match.



Manipulatives and Symbols

Example



$$\frac{1}{3} + \frac{1}{3} = \frac{2}{3}$$

$$\frac{1}{4} + \frac{1}{4} = \square$$

Copyright © 2014 Symphony Learning LLC. Permission is granted to reproduce this sheet for classroom use.



Name: _____ Date: _____

Write fractions to make the number line and the number sentence match.



Manipulatives and Symbols

1

$\frac{1}{5} + \frac{1}{5} = \square$

2

$\frac{1}{8} + \frac{1}{8} = \square$

Copyright © 2014 Symphony Learning LLC. Permission is granted to reproduce this sheet for classroom use.



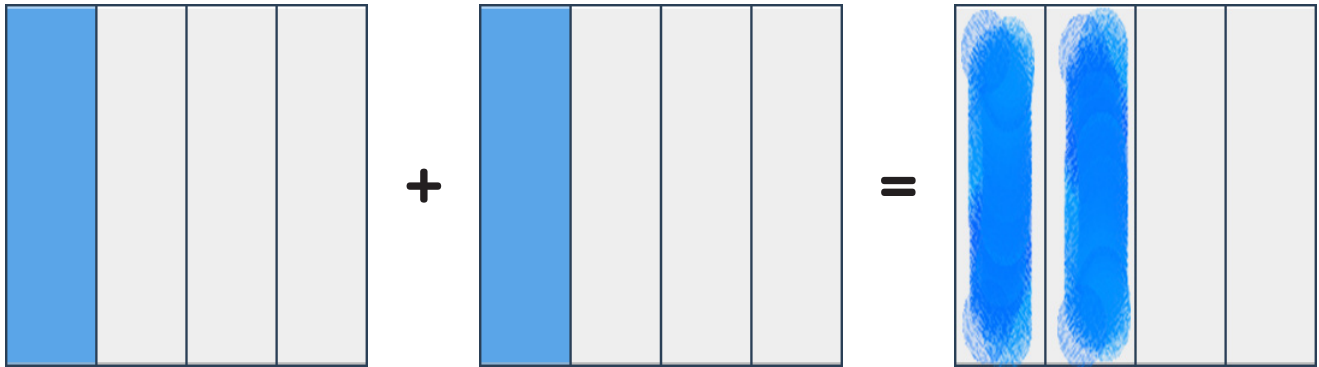
Name: _____ Date: _____

Draw bars and fractions to complete each number sentence.



Manipulatives and Symbols

Example



$$\frac{1}{4} + \frac{1}{4} = \frac{2}{4}$$

1

$$\frac{1}{3} + \frac{1}{3} = \square$$

Copyright © 2014 Symphony Learning LLC. Permission is granted to reproduce this sheet for classroom use.



Name: _____ Date: _____




Manipulatives and Symbols


Draw bars and fractions to complete each number sentence.


1

$1 = \frac{1}{6} + \frac{1}{6}$

 $= \frac{1}{6} + \frac{1}{6}$

2

$\frac{1}{5} + \frac{1}{5} =$ 

$\frac{1}{5} + \frac{1}{5} =$ 

Copyright © 2014 Symphony Learning LLC. Permission is granted to reproduce this sheet for classroom use.



Name: _____ Date: _____



Symbols

Write the missing fraction.

$$\frac{1}{3} + \frac{1}{3} = \square$$

$$\frac{1}{5} + \frac{1}{5} = \square$$

$$\frac{1}{4} + \frac{1}{4} = \square$$

$$\frac{1}{2} + \frac{1}{2} = \square$$

Copyright © 2014 Symphony Learning LLC. Permission is granted to reproduce this sheet for classroom use.

