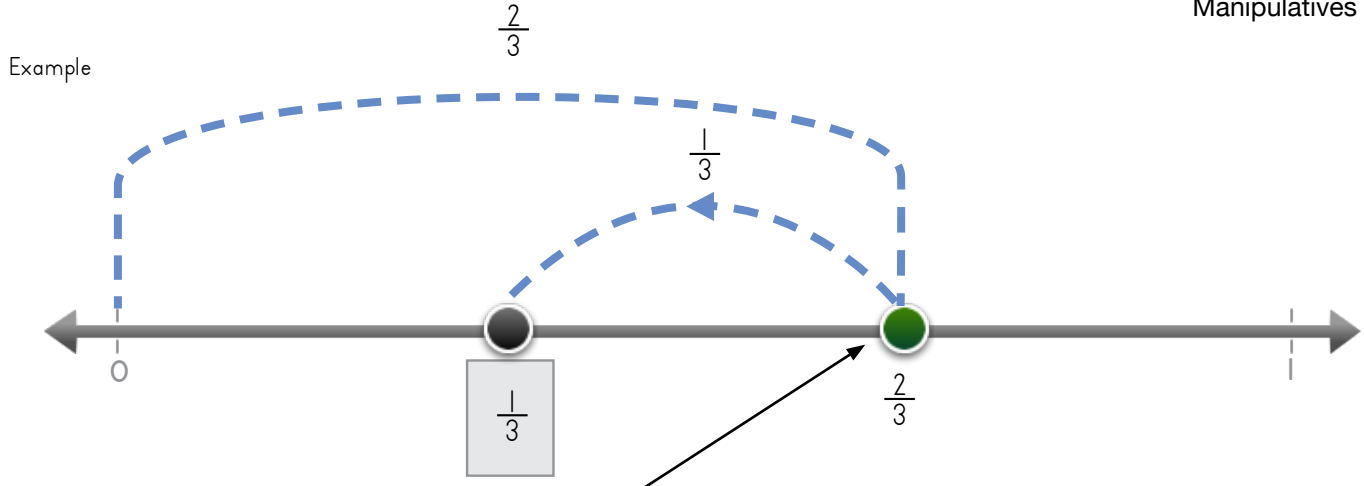


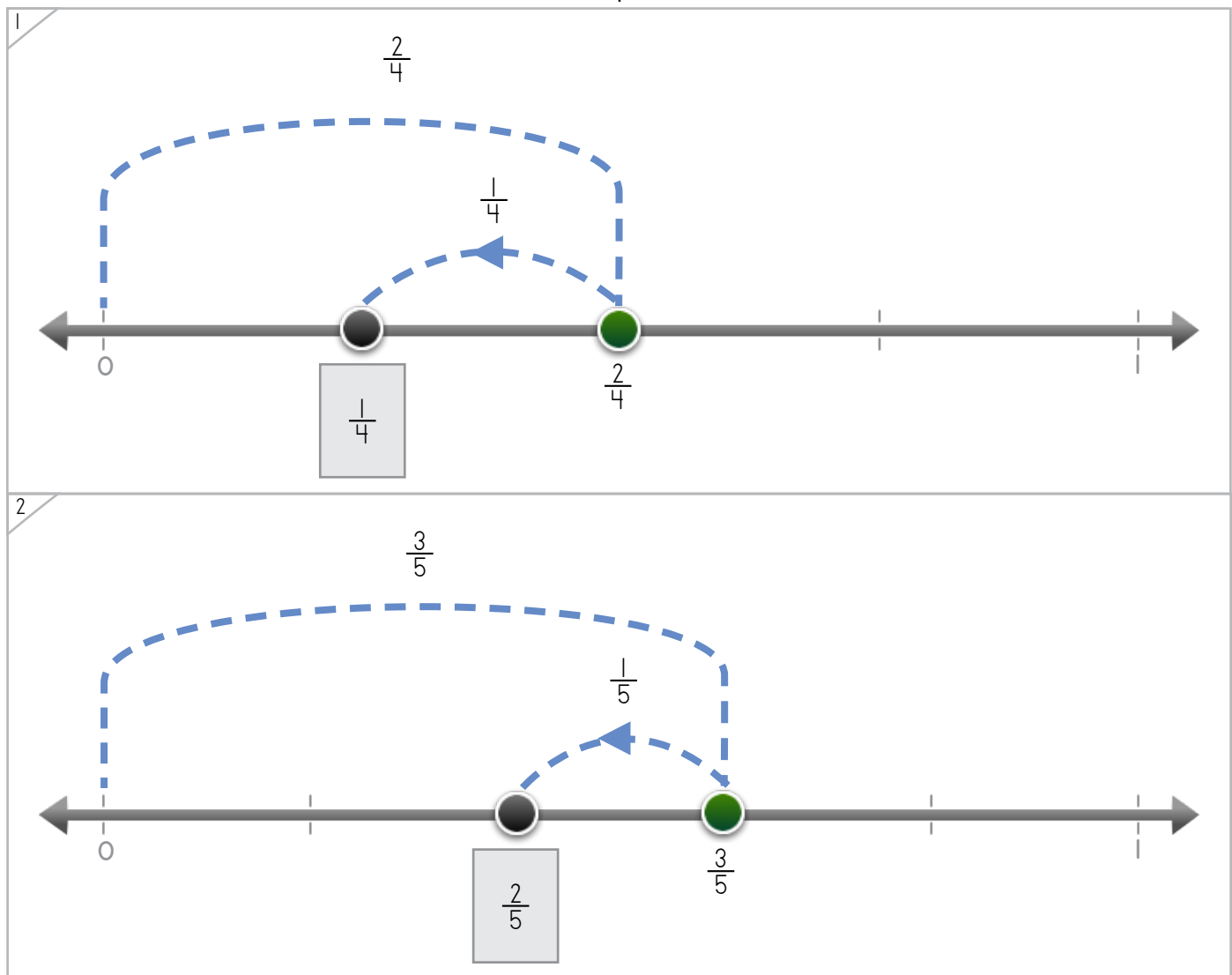
Name: _____ Date: _____



Write the fraction where the dot jumps back.



Start with the dot on $\frac{2}{3}$. Jump back $\frac{1}{3}$. Now the dot is on $\frac{1}{3}$.



ANSWER KEY

Copyright © 2014 Symphony Learning LLC. Permission is granted to reproduce this sheet for classroom use.

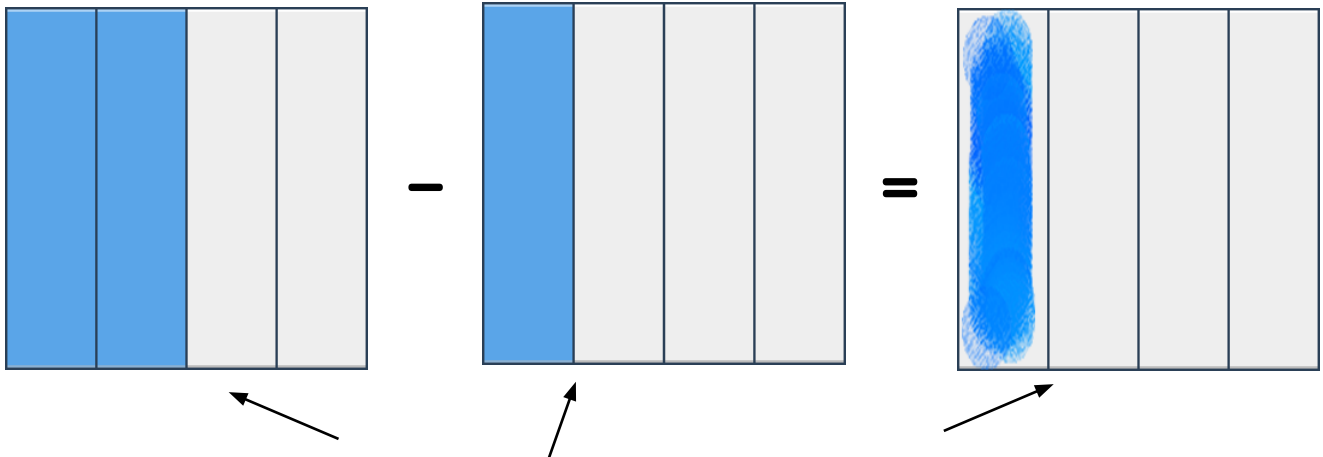


Name: _____ Date: _____



Create a fraction bar to make each number model true.

Example



Start with this bar. Take away this bar. This bar is left.

ANSWER KEY

1

2

Copyright © 2014 Symphony Learning LLC. Permission is granted to reproduce this sheet for classroom use.



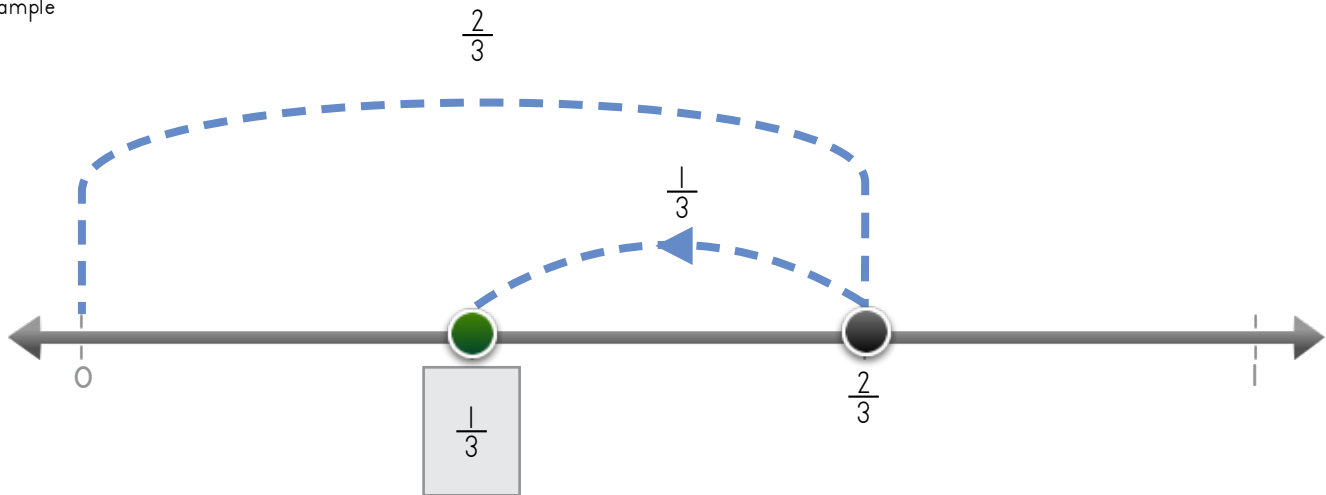
Name: _____ Date: _____

Write fractions to make the number line and the number sentence match.



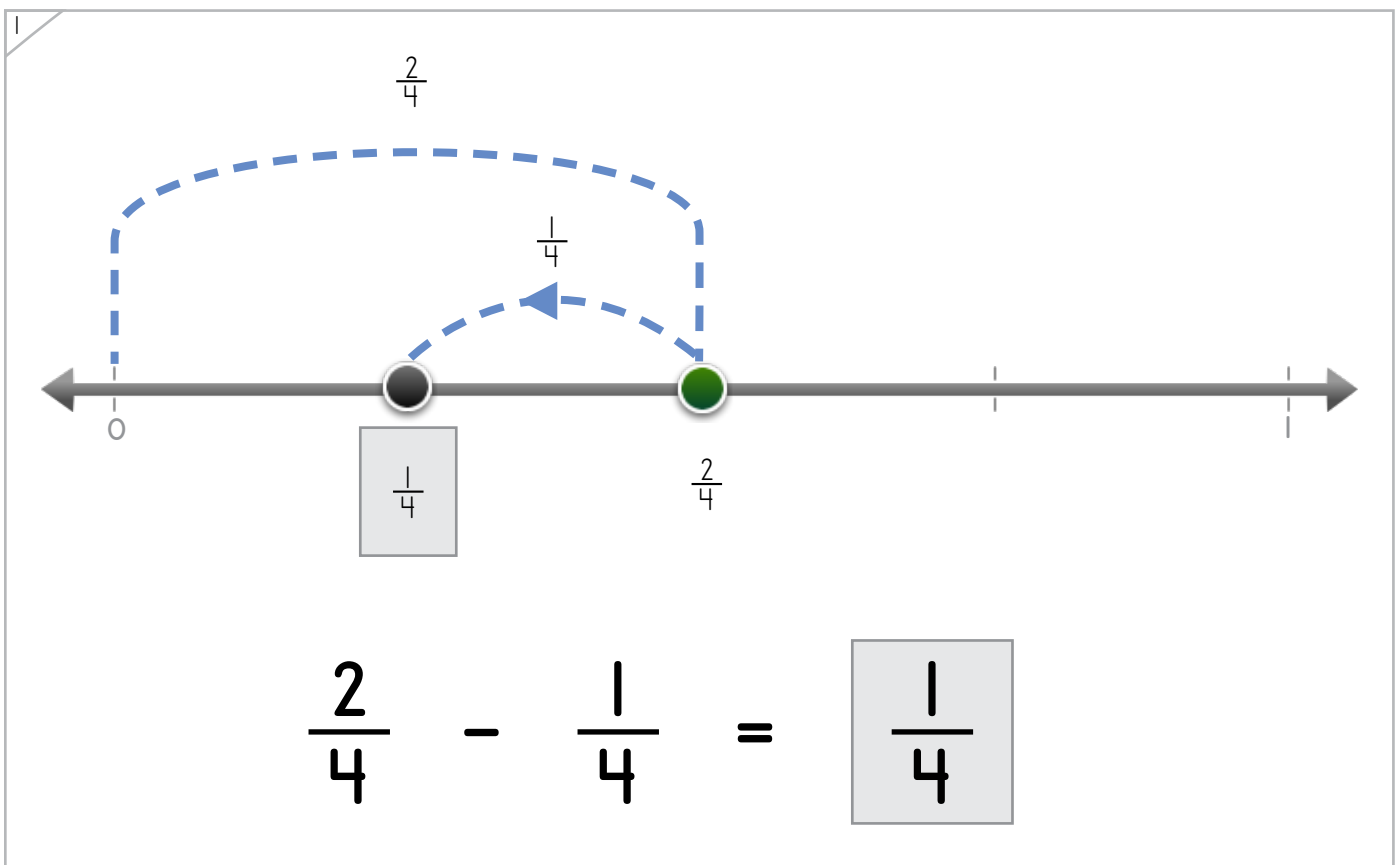
Manipulatives and Symbols

Example



$$\frac{2}{3} - \frac{1}{3} = \boxed{\frac{1}{3}}$$

ANSWER KEY



$$\frac{2}{4} - \frac{1}{4} = \boxed{\frac{1}{4}}$$

Copyright © 2014 Symphony Learning LLC. Permission is granted to reproduce this sheet for classroom use.



Name: _____ Date: _____

Write fractions to make the number line and the number sentence match.



Manipulatives and Symbols

1

$\frac{4}{5}$

$\frac{3}{5}$

$\frac{4}{5}$

$\frac{1}{5}$

$$\frac{4}{5} - \frac{1}{5} = \boxed{\frac{3}{5}}$$

ANSWER KEY

2

$\frac{6}{8}$

$\frac{5}{8}$

$\frac{6}{8}$

$\frac{1}{8}$

$$\frac{6}{8} - \frac{1}{8} = \boxed{\frac{5}{8}}$$

Copyright © 2014 Symphony Learning LLC. Permission is granted to reproduce this sheet for classroom use.



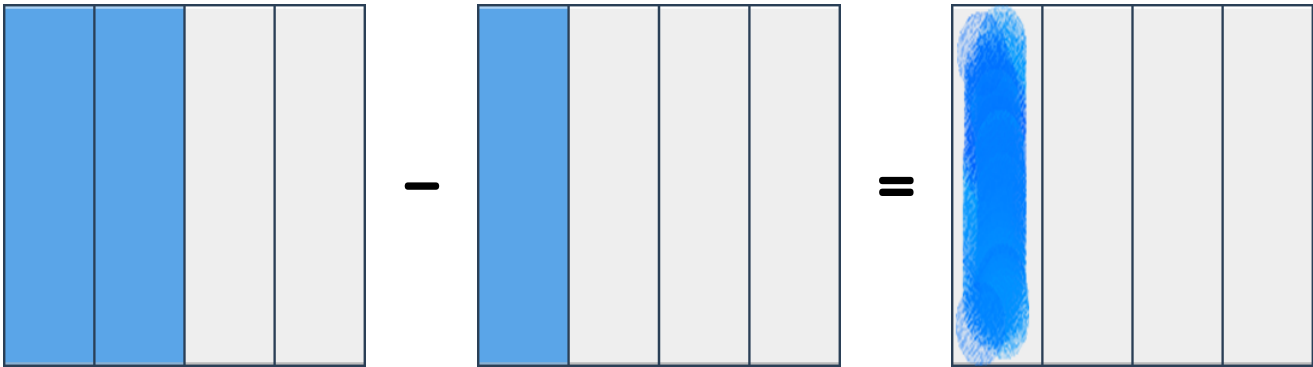
Name: _____ Date: _____

Draw bars and fractions to complete each number sentence.



Manipulatives and Symbols

Example



$$\frac{2}{4} - \frac{1}{4} = \frac{1}{4}$$

ANSWER KEY

1

$$\frac{1}{3} - \frac{1}{3} = \frac{0}{3}$$

Copyright © 2014 Symphony Learning LLC. Permission is granted to reproduce this sheet for classroom use.



Name: _____ Date: _____

Draw bars and fractions to complete each number sentence.



Manipulatives and Symbols

1

$\frac{3}{6} = \frac{4}{6} - \frac{1}{6}$

ANSWER KEY

2

$\frac{5}{5} - \frac{1}{5} = \frac{4}{5}$

Copyright © 2014 Symphony Learning LLC. Permission is granted to reproduce this sheet for classroom use.



Name: _____ Date: _____



Symbols

Write the missing fraction.

$$\frac{2}{3} - \frac{1}{3} = \boxed{\frac{1}{3}}$$

$$\frac{4}{5} - \frac{1}{5} = \boxed{\frac{3}{5}}$$

$$\frac{3}{4} - \frac{1}{4} = \boxed{\frac{2}{4}}$$

$$\frac{1}{2} - \frac{1}{2} = \boxed{\frac{0}{2}}$$

ANSWER KEY

Copyright © 2014 Symphony Learning LLC. Permission is granted to reproduce this sheet for classroom use.

