

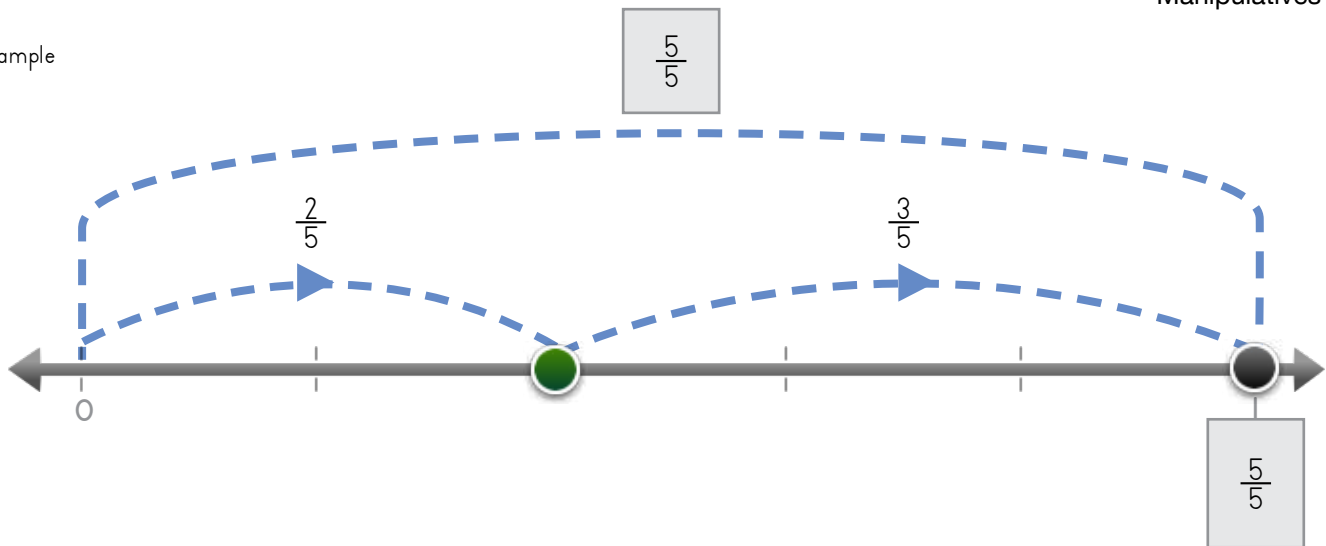
Name: \_\_\_\_\_ Date: \_\_\_\_\_



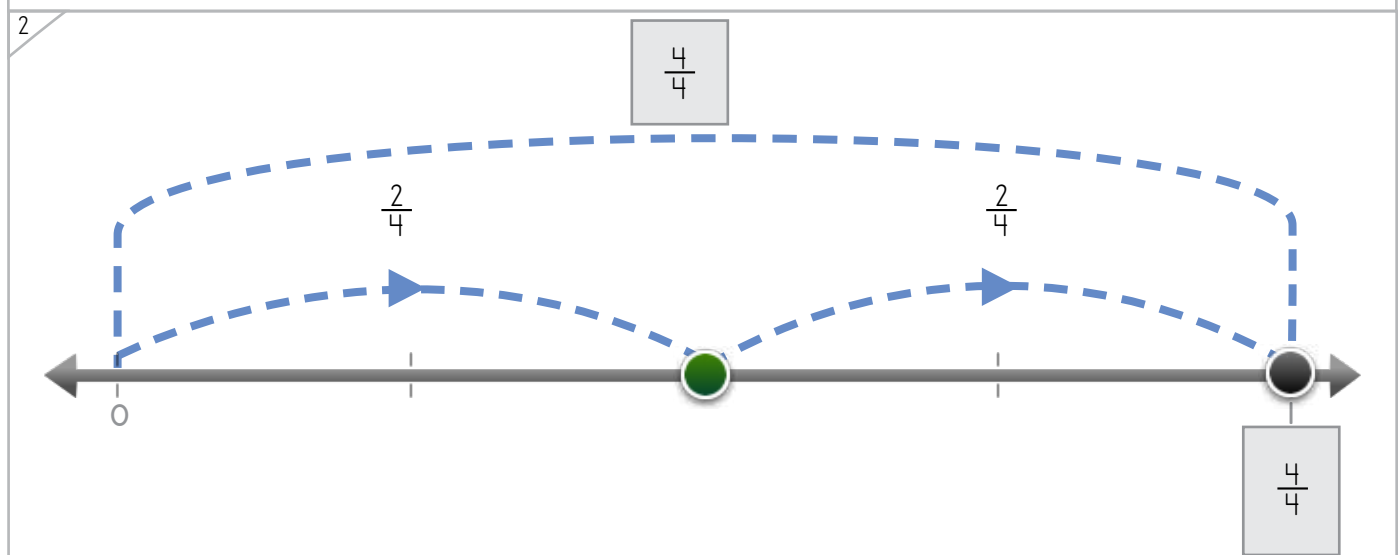
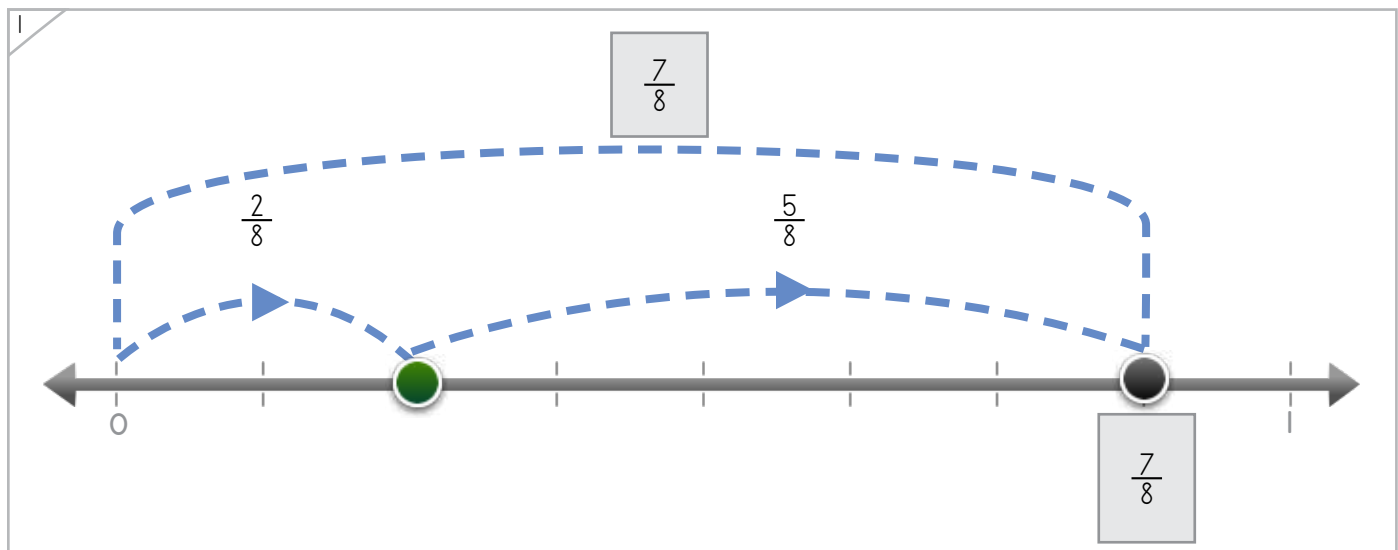
Manipulatives

Write the fraction where the dot lands.

Example



ANSWER KEY



Copyright © 2014 Symphony Learning LLC. Permission is granted to reproduce this sheet for classroom use.

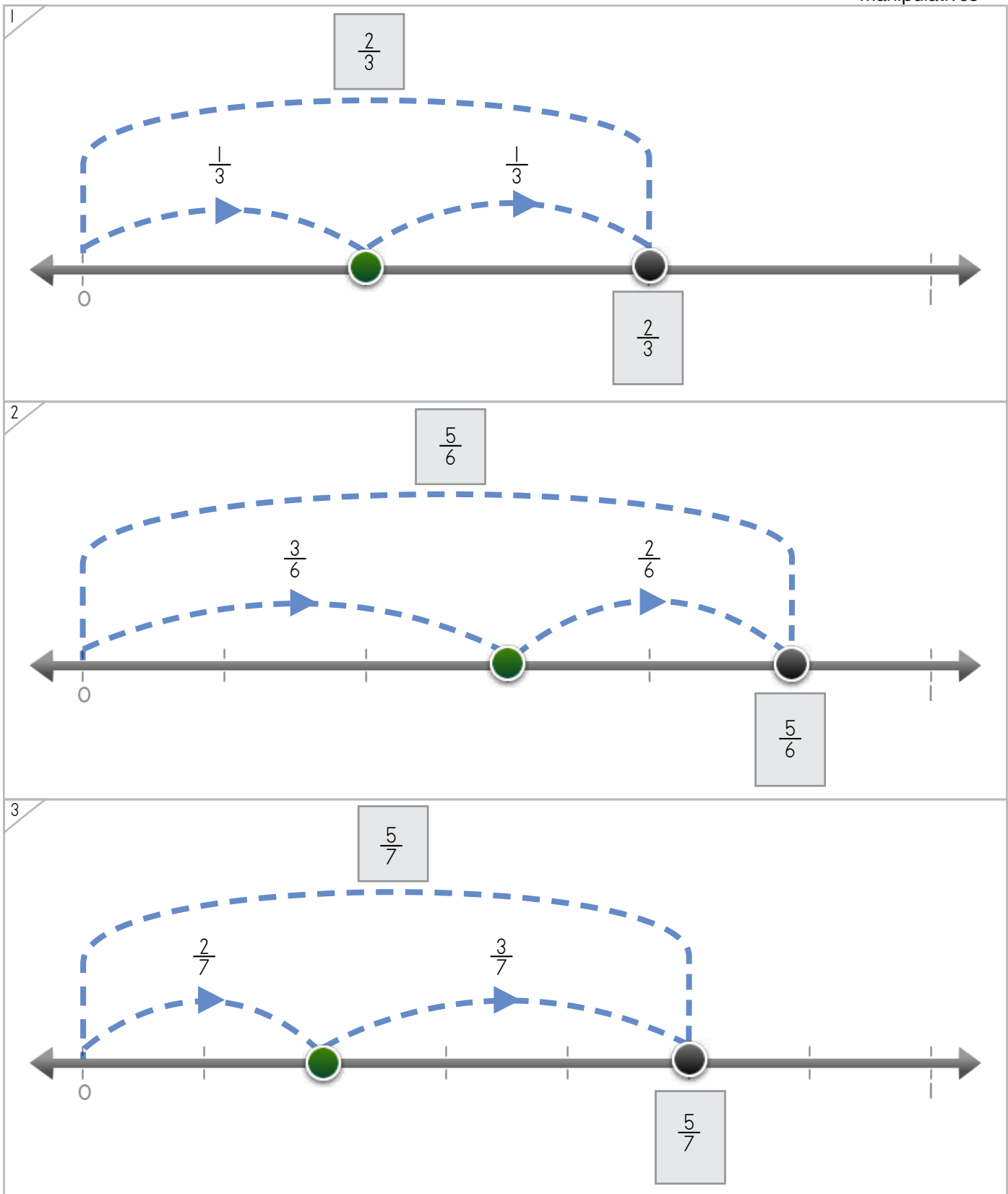


Name: \_\_\_\_\_ Date: \_\_\_\_\_



Manipulatives

Write the fraction where the dot lands.



ANSWER KEY

Copyright © 2014 Symphony Learning LLC. Permission is granted to reproduce this sheet for classroom use.

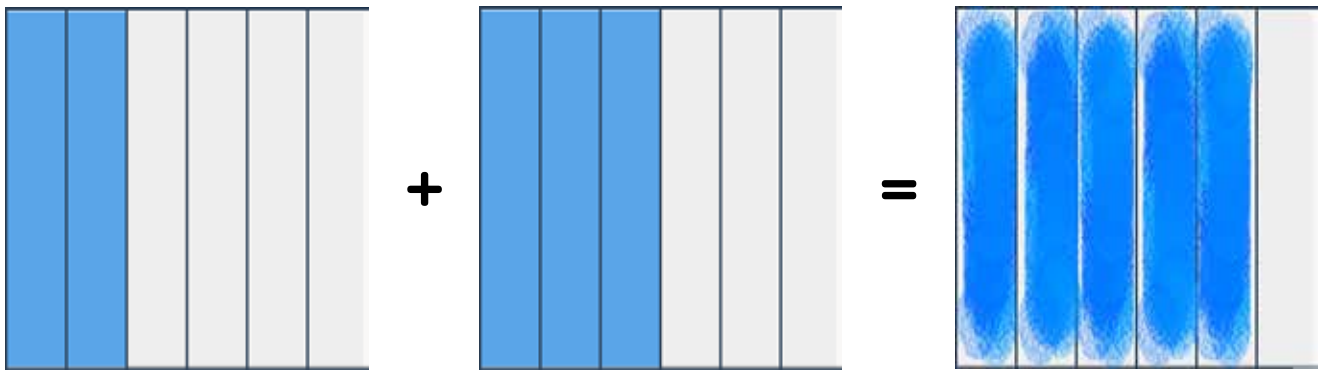


Name: \_\_\_\_\_ Date: \_\_\_\_\_



Create a box that is the same as the boxes put together.

Example



This box and this box put together equal this box.


ANSWER KEY

1

2

Copyright © 2014 Symphony Learning LLC. Permission is granted to reproduce this sheet for classroom use.





Create a box that is the same as the boxes put together.

1

ANSWER KEY

2

3

Copyright © 2014 Symphony Learning LLC. Permission is granted to reproduce this sheet for classroom use.



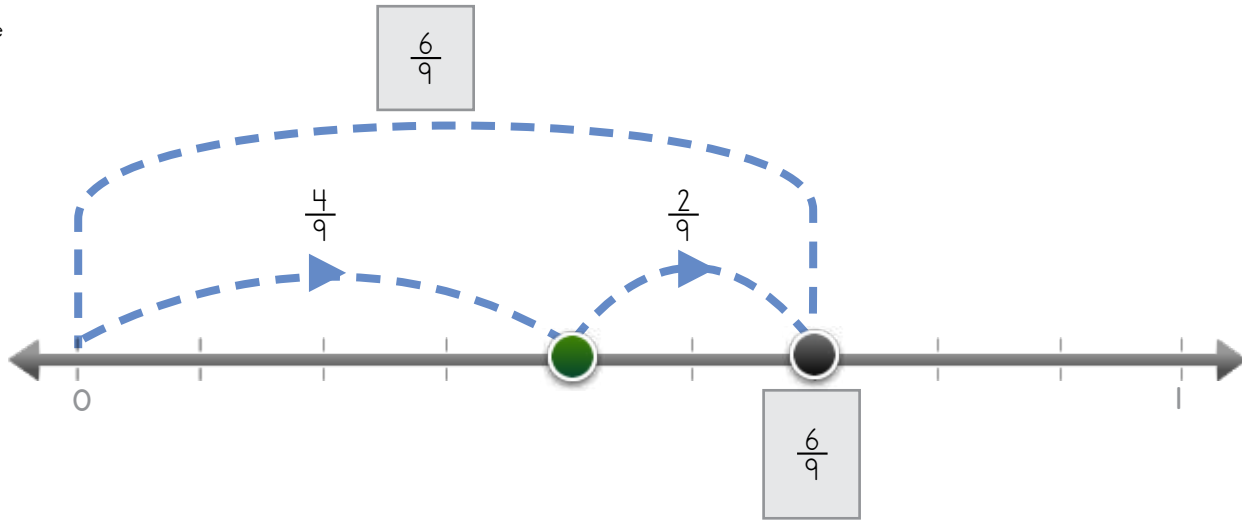
Name: \_\_\_\_\_ Date: \_\_\_\_\_

Write fractions to make the number line and the number sentence match.

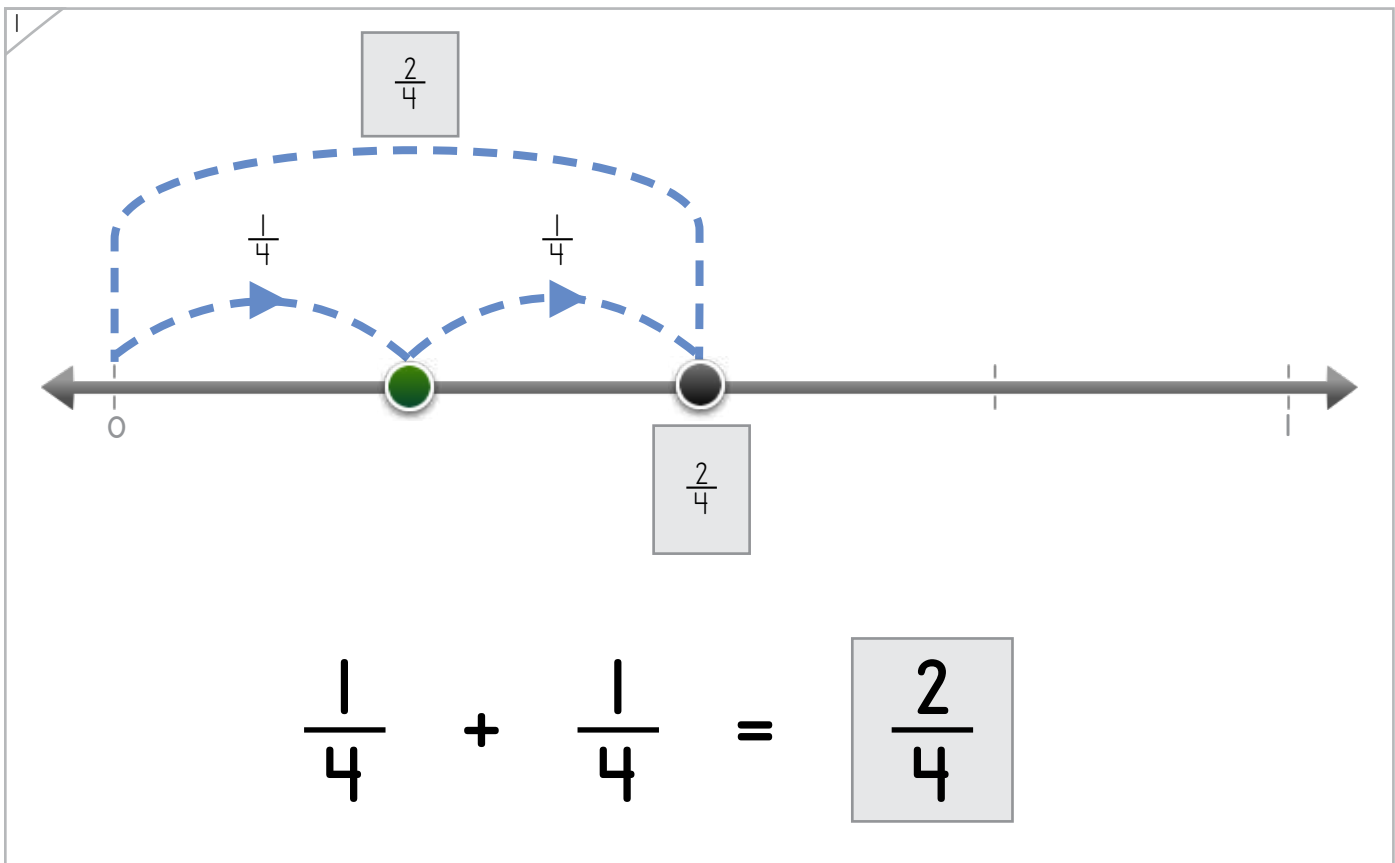


Manipulatives and Symbols

Example



$$\frac{4}{9} + \frac{2}{9} = \frac{6}{9}$$



$$\frac{1}{4} + \frac{1}{4} = \frac{2}{4}$$

ANSWER KEY

Copyright © 2014 Symphony Learning LLC. Permission is granted to reproduce this sheet for classroom use.



Name: \_\_\_\_\_ Date: \_\_\_\_\_

Write fractions to make the number line and the number sentence match.



Manipulatives and Symbols

1

$\frac{3}{5} + \frac{2}{5} = \frac{5}{5}$

ANSWER KEY

2

$\frac{2}{8} + \frac{4}{8} = \frac{6}{8}$

Copyright © 2014 Symphony Learning LLC. Permission is granted to reproduce this sheet for classroom use.



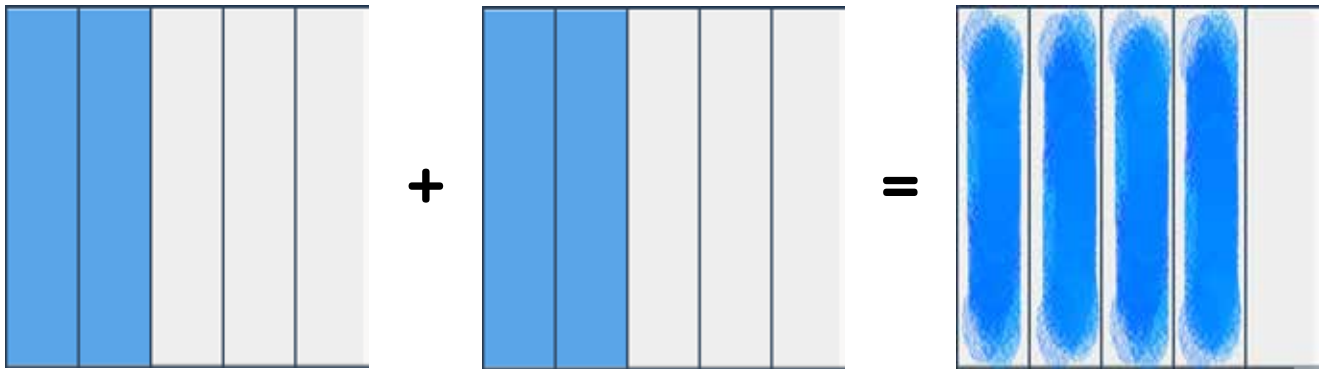
Name: \_\_\_\_\_ Date: \_\_\_\_\_

Draw bars and fractions to complete each number sentence.



Manipulatives and Symbols

Example



$$\frac{2}{5} + \frac{2}{5} = \frac{4}{5}$$

ANSWER KEY

1

$$\frac{2}{7} + \frac{3}{7} = \frac{5}{7}$$

Copyright © 2014 Symphony Learning LLC. Permission is granted to reproduce this sheet for classroom use.



Name: \_\_\_\_\_ Date: \_\_\_\_\_



Manipulatives and Symbols

Draw bars and fractions to complete each number sentence.

1

$\frac{5}{6} = \frac{3}{6} + \frac{2}{6}$

ANSWER KEY

2

$\frac{3}{5} + \frac{1}{5} = \frac{4}{5}$

Copyright © 2014 Symphony Learning LLC. Permission is granted to reproduce this sheet for classroom use.



Name: \_\_\_\_\_ Date: \_\_\_\_\_



Symbols

Write the missing fraction.

$$\frac{4}{8} + \frac{3}{8} = \boxed{\frac{7}{8}}$$

ANSWER KEY

$$\frac{2}{5} + \frac{2}{5} = \boxed{\frac{4}{5}}$$

$$\frac{2}{7} + \frac{3}{7} = \boxed{\frac{5}{7}}$$

$$\frac{6}{9} + \frac{2}{9} = \boxed{\frac{8}{9}}$$

Copyright © 2014 Symphony Learning LLC. Permission is granted to reproduce this sheet for classroom use.

