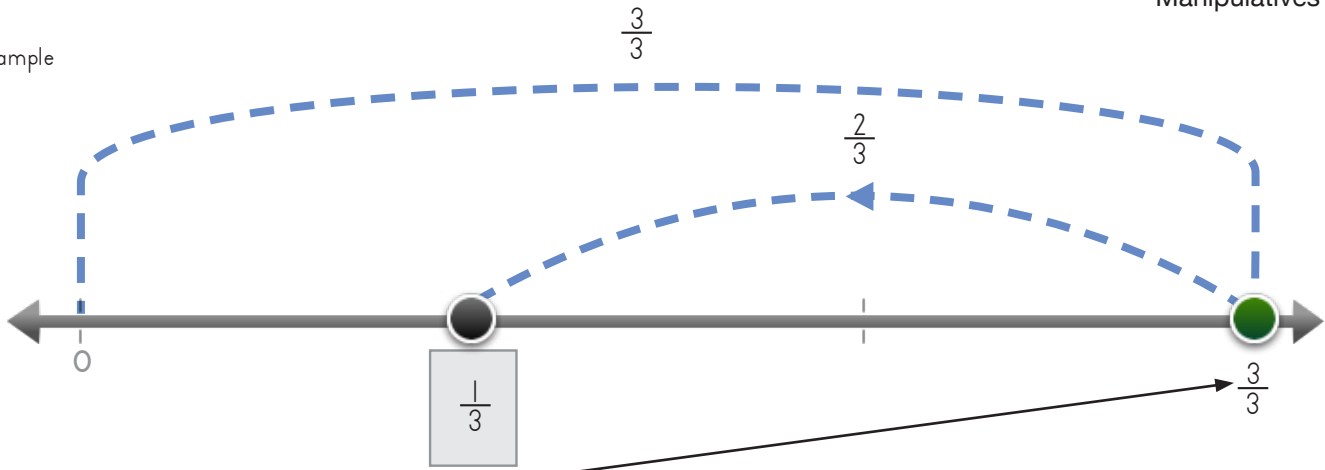


Name: _____ Date: _____

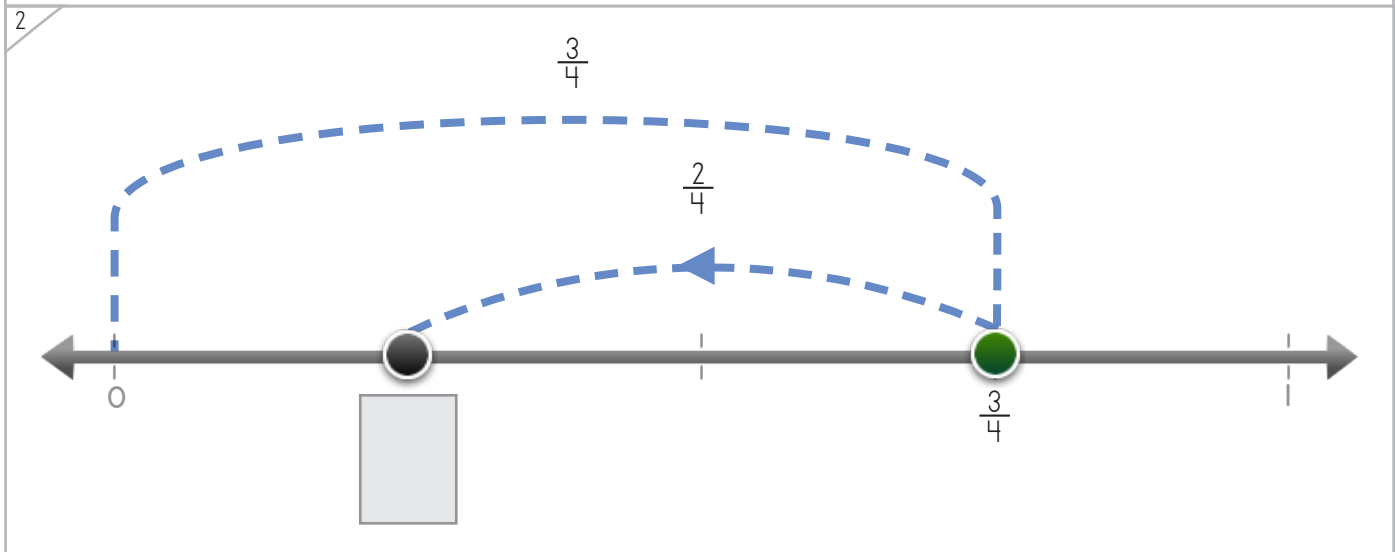
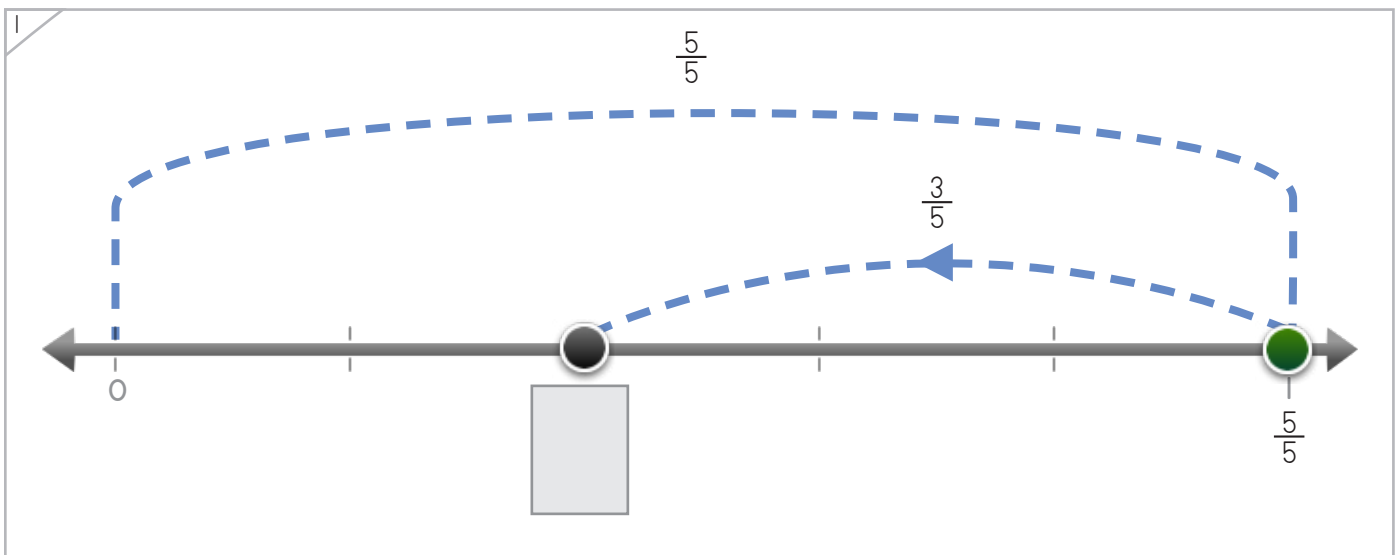


Write the fraction where the dot jumps back.

Example



Start with the dot on $\frac{3}{3}$. Jump back $\frac{2}{3}$. Now the dot is on $\frac{1}{3}$.



Copyright © 2014 Symphony Learning LLC. Permission is granted to reproduce this sheet for classroom use.

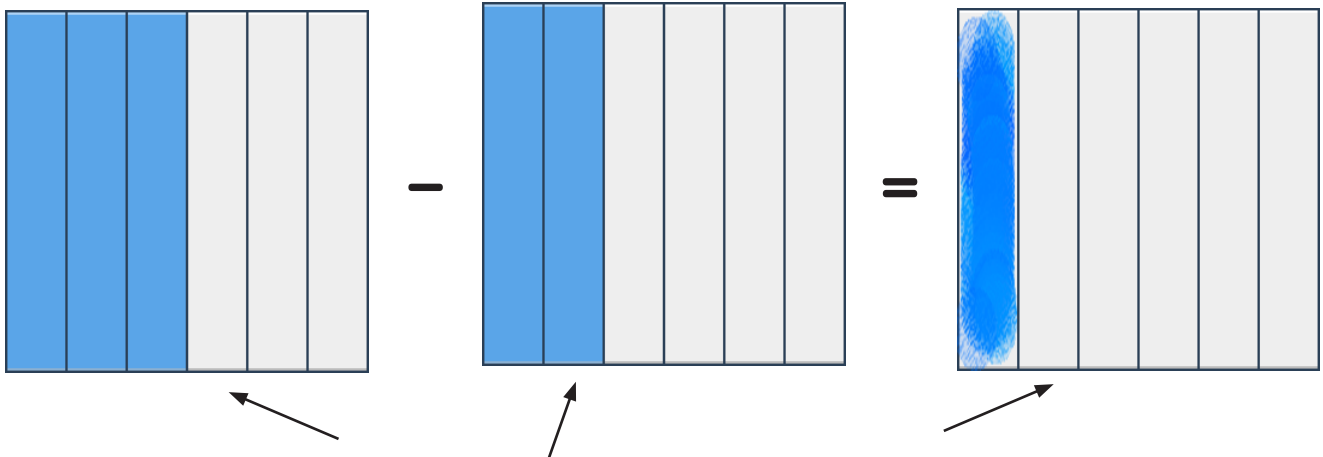


Name: _____ Date: _____



Create a fraction bar to make each number model true.

Example



Start with this bar. Take away this bar. This bar is left.

1

2

Copyright © 2014 Symphony Learning LLC. Permission is granted to reproduce this sheet for classroom use.



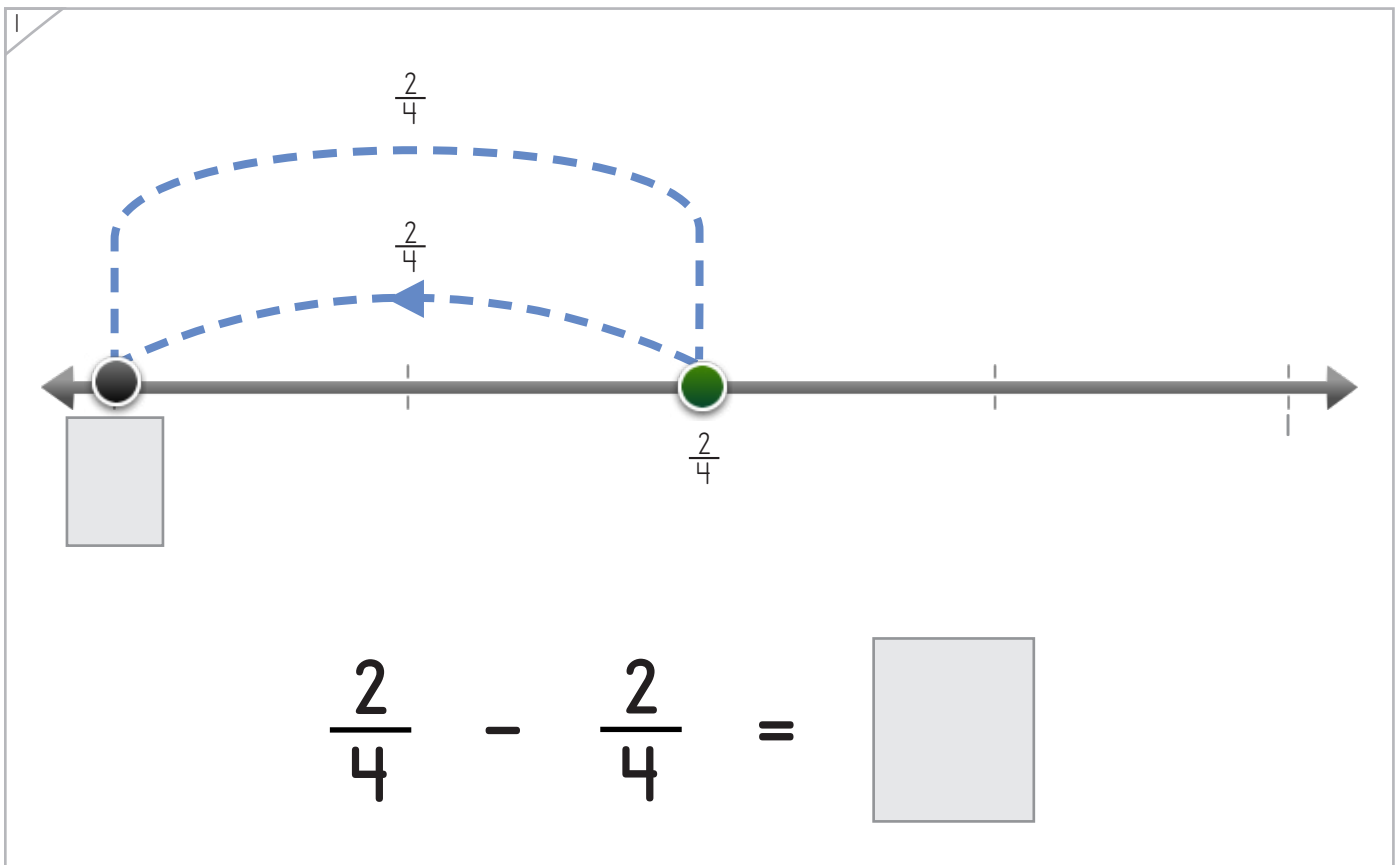
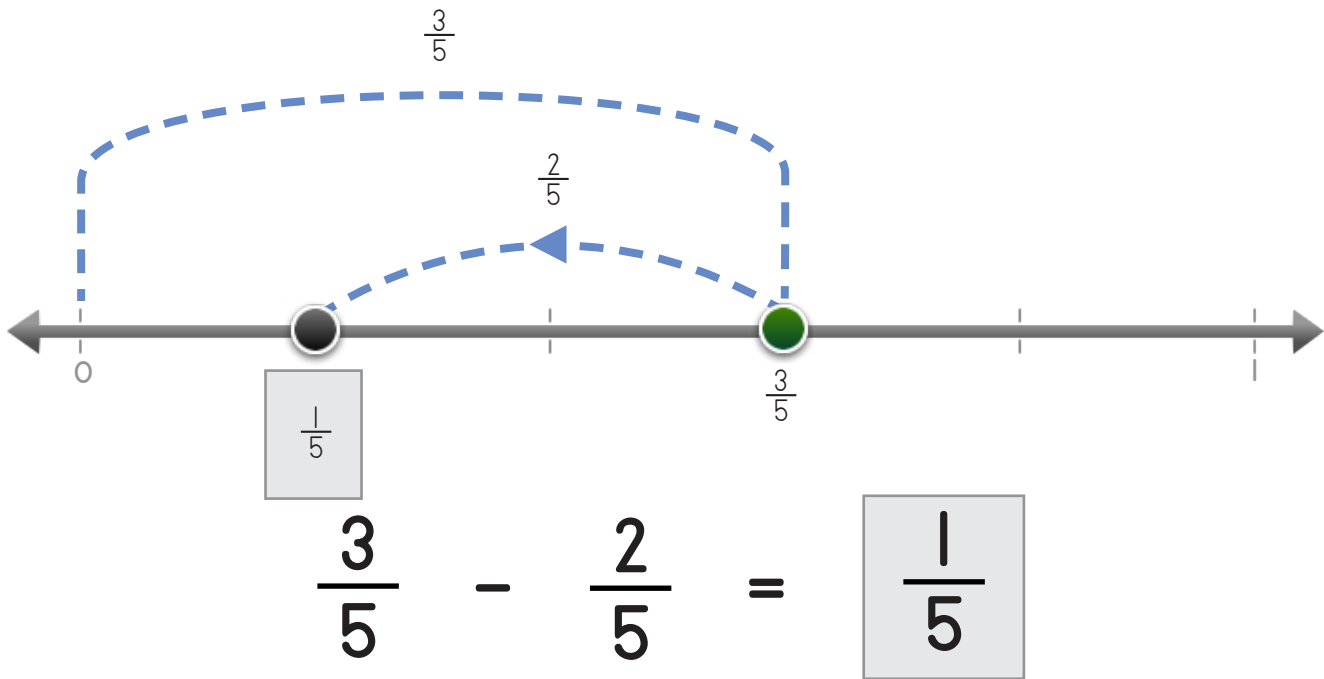
Name: _____ Date: _____

Write fractions to make the number line and the number sentence match.



Manipulatives and Symbols

Example



Copyright © 2014 Symphony Learning LLC. Permission is granted to reproduce this sheet for classroom use.



Name: _____ Date: _____

Write fractions to make the number line and the number sentence match.



Manipulatives and Symbols

1

$\frac{4}{5}$

$\frac{3}{5}$

0 $\frac{4}{5}$

$\frac{4}{5} - \frac{3}{5} = \square$

2

$\frac{6}{8}$

$\frac{4}{8}$

0 $\frac{6}{8}$

$\frac{6}{8} - \frac{4}{8} = \square$

Copyright © 2014 Symphony Learning LLC. Permission is granted to reproduce this sheet for classroom use.



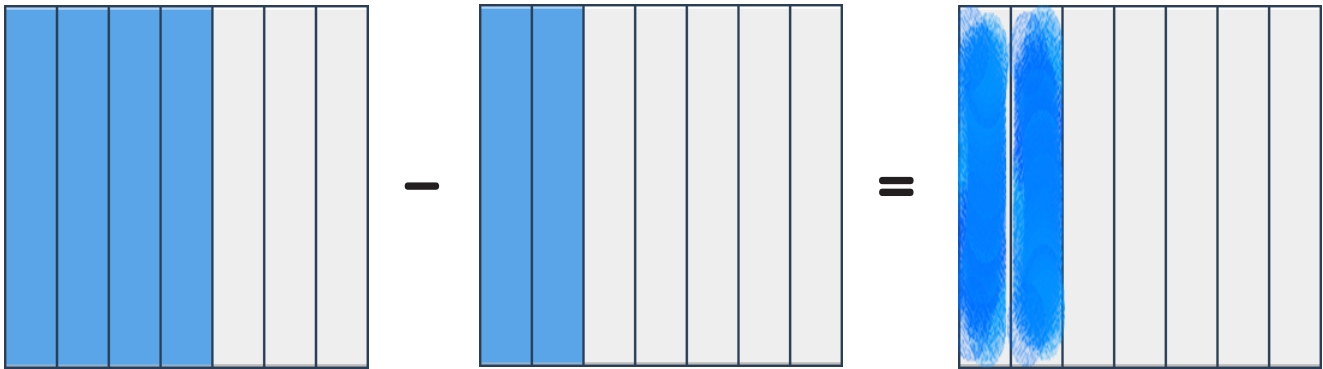
Name: _____ Date: _____

Draw bars and fractions to complete each number sentence.



Manipulatives and Symbols

Example



$$\frac{4}{7} - \frac{2}{7} = \frac{2}{7}$$

1

$$\frac{5}{8} - \frac{2}{8} = \square$$

Copyright © 2014 Symphony Learning LLC. Permission is granted to reproduce this sheet for classroom use.



Name: _____ Date: _____



Manipulatives and Symbols

Draw bars and fractions to complete each number sentence.

1

$\square = \frac{4}{6} - \frac{3}{6}$

$\square = \frac{4}{6} - \frac{3}{6}$

2

$\frac{5}{5} - \frac{1}{5} = \square$

Copyright © 2014 Symphony Learning LLC. Permission is granted to reproduce this sheet for classroom use.



Name: _____ Date: _____



Symbols

Write the missing fraction.

$$\frac{7}{9} - \frac{5}{9} = \square$$

$$\frac{8}{8} - \frac{7}{8} = \square$$

$$\frac{3}{4} - \frac{2}{4} = \square$$

$$\frac{5}{6} - \frac{3}{6} = \square$$

Copyright © 2014 Symphony Learning LLC. Permission is granted to reproduce this sheet for classroom use.

