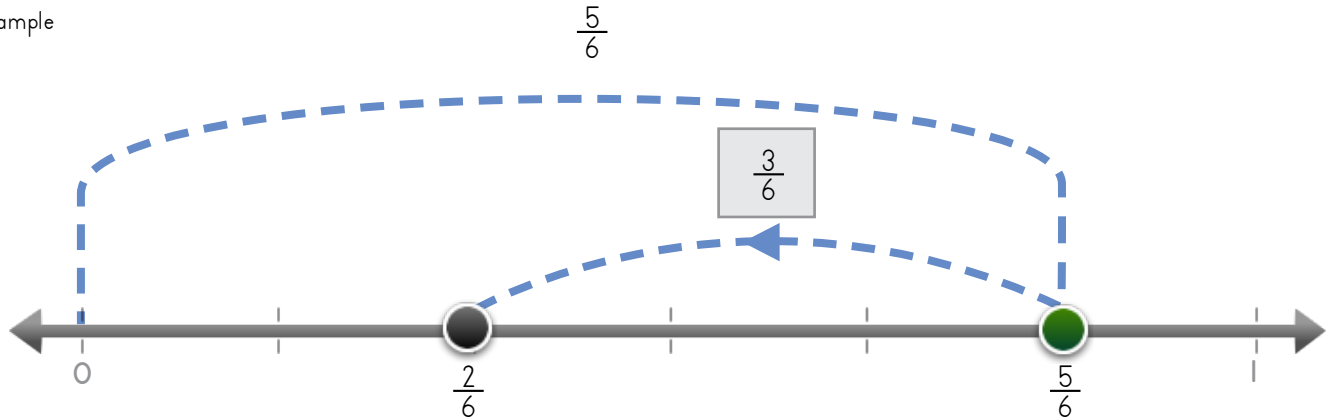


Name: _____ Date: _____

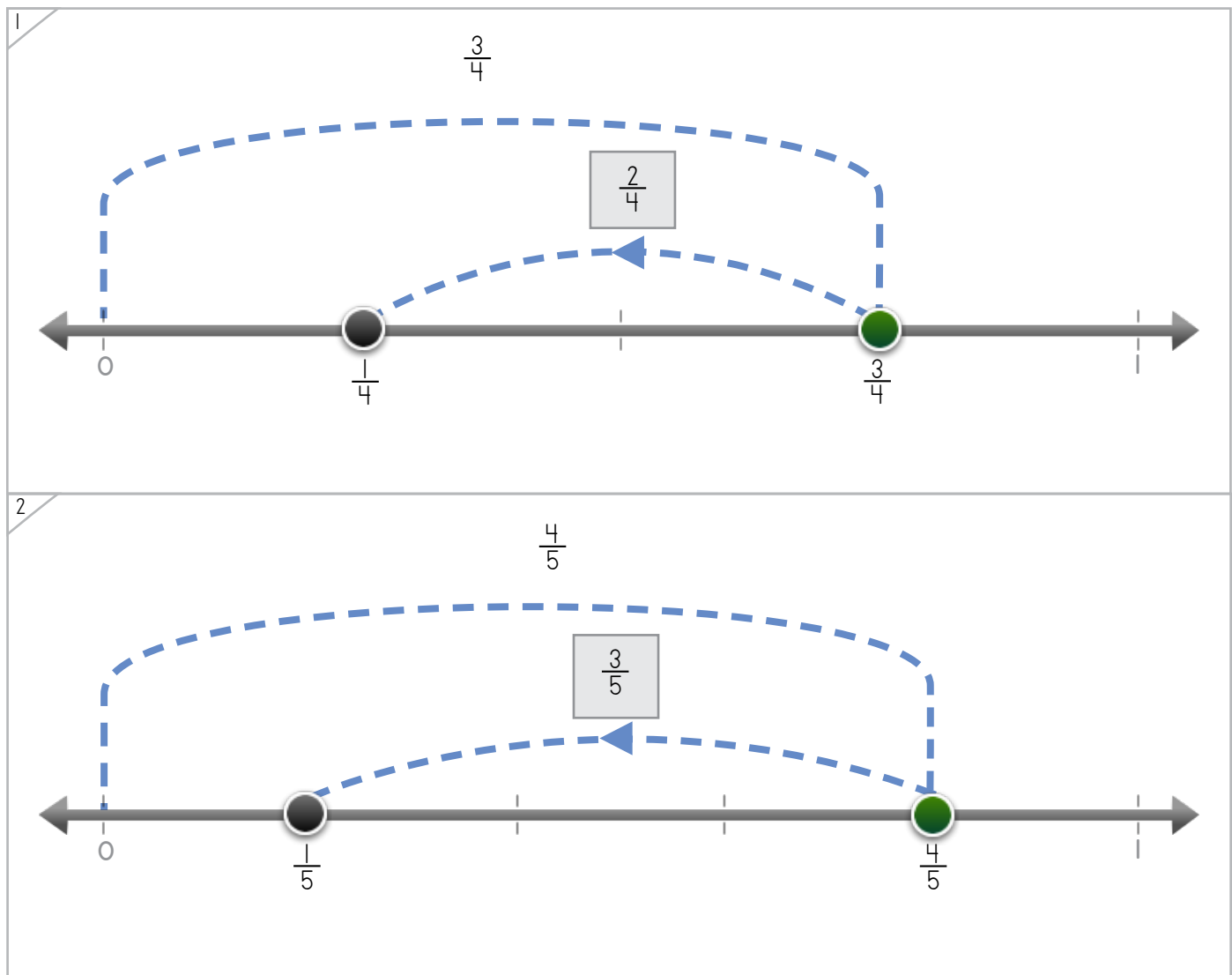
Write the fraction to complete the number problem



Example



ANSWER KEY



Copyright © 2014 Symphony Learning LLC. Permission is granted to reproduce this sheet for classroom use.




Name: _____ Date: _____



Create a fraction bar to make each number model true.

Example



ANSWER KEY

1

2

Copyright © 2014 Symphony Learning LLC. Permission is granted to reproduce this sheet for classroom use.



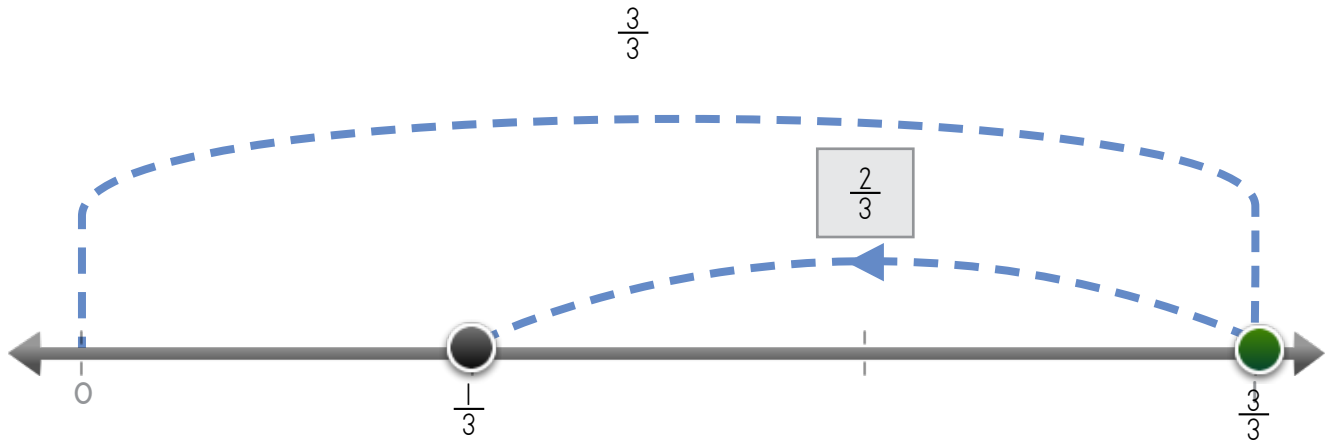
Name: _____ Date: _____

Write fractions to make the number line and the number sentence match.

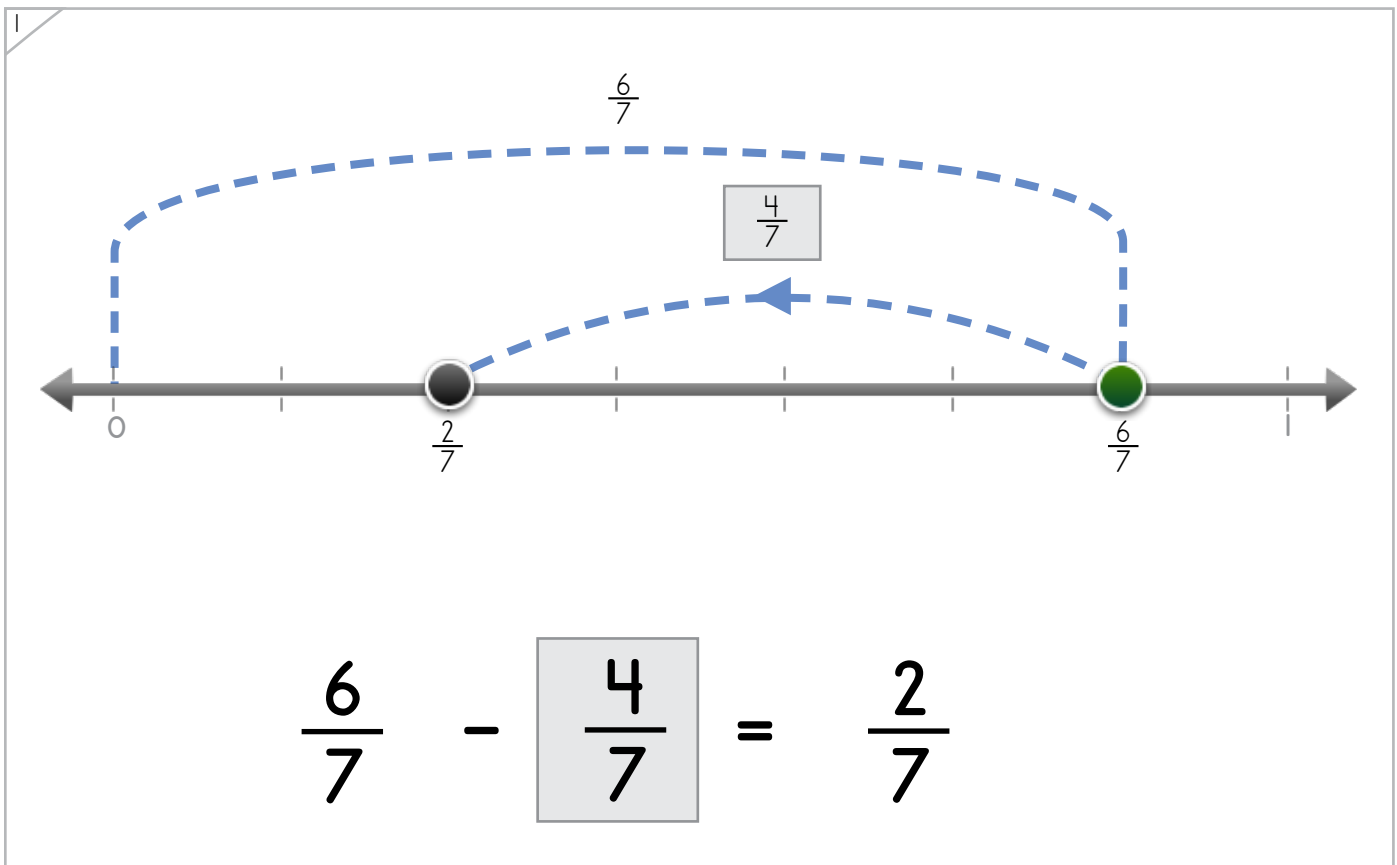


Manipulatives and Symbols

Example



$$\frac{3}{3} - \frac{2}{3} = \frac{1}{3}$$



$$\frac{6}{7} - \frac{4}{7} = \frac{2}{7}$$

ANSWER KEY

Copyright © 2014 Symphony Learning LLC. Permission is granted to reproduce this sheet for classroom use.



Name: _____ Date: _____

Write fractions to make the number line and the number sentence match.



Manipulatives and Symbols

1

$\frac{4}{5}$

$\frac{3}{5}$

$\frac{4}{5}$

$$\frac{4}{5} - \frac{3}{5} = \frac{1}{5}$$

ANSWER KEY

2

$\frac{7}{8}$

$\frac{5}{8}$

$\frac{2}{8}$

$\frac{7}{8}$

$$\frac{7}{8} - \frac{5}{8} = \frac{2}{8}$$

Copyright © 2014 Symphony Learning LLC. Permission is granted to reproduce this sheet for classroom use.




Name: _____ Date: _____

Draw bars and fractions to complete each number sentence.



Manipulatives and Symbols

Example



$$\frac{4}{8} - \frac{2}{8} = \frac{2}{8}$$

ANSWER KEY

$$\frac{6}{7} - \frac{4}{7} = \frac{2}{7}$$

Copyright © 2014 Symphony Learning LLC. Permission is granted to reproduce this sheet for classroom use.



Name: _____ Date: _____

Draw bars and fractions to complete each number sentence.



Manipulatives and Symbols

1

$\frac{5}{6} - \frac{2}{6} = \frac{3}{6}$

ANSWER KEY

2

$\frac{5}{5} - \frac{4}{5} = \frac{1}{5}$

Copyright © 2014 Symphony Learning LLC. Permission is granted to reproduce this sheet for classroom use.



Name: _____ Date: _____



Symbols

Write the missing fraction.

$$\frac{8}{9} - \frac{2}{9} = \frac{6}{9}$$

$$\frac{2}{7} = \frac{5}{7} - \frac{3}{7}$$

$$\frac{4}{4} - \frac{3}{4} = \frac{1}{4}$$

$$\frac{7}{8} - \frac{4}{8} = \frac{3}{8}$$

ANSWER KEY

Copyright © 2014 Symphony Learning LLC. Permission is granted to reproduce this sheet for classroom use.

