
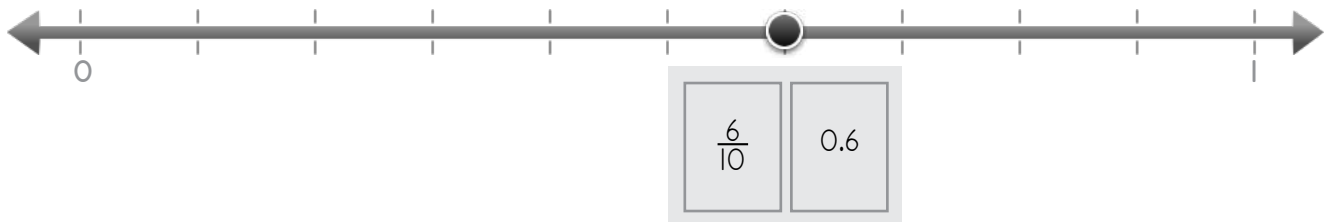
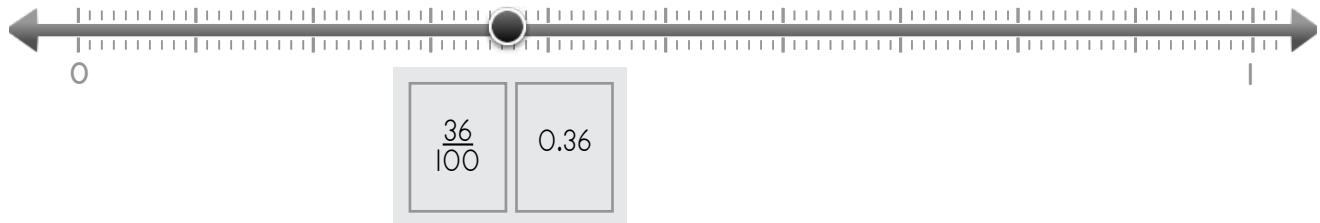


Name: \_\_\_\_\_ Date: \_\_\_\_\_



Write the fraction and decimal.

Example



1

$\frac{8}{10}$     0.8

$\frac{25}{100}$     0.25

2

$\frac{93}{100}$     0.93

$\frac{1}{10}$     0.1

ANSWER KEY

Copyright © 2014 Symphony Learning LLC. Permission is granted to reproduce this sheet for classroom use.



Name: \_\_\_\_\_ Date: \_\_\_\_\_



Manipulatives

Write the fraction and decimal.

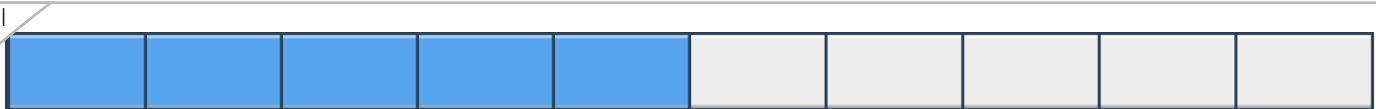
Example



$\frac{7}{10}$	0.7
----------------	-----



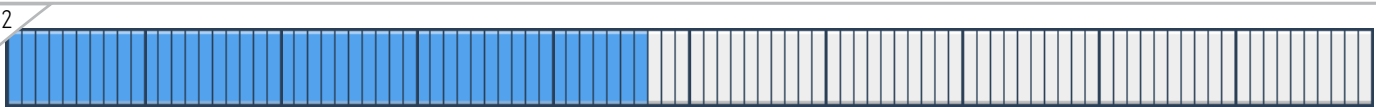
$\frac{2}{100}$	0.02
-----------------	------



$\frac{5}{10}$	0.5
----------------	-----



$\frac{52}{100}$	0.52
------------------	------



$\frac{47}{100}$	0.47
------------------	------



$\frac{3}{10}$	0.3
----------------	-----

ANSWER KEY

Copyright © 2014 Symphony Learning LLC. Permission is granted to reproduce this sheet for classroom use.



Name: \_\_\_\_\_ Date: \_\_\_\_\_

Write the fraction and decimal.

Example



Manipulatives and Symbols

1

$\frac{1}{10}$     0.1

$$\frac{1}{10} = 0.1$$

ANSWER KEY

2

$\frac{58}{100}$     0.58

$$\frac{58}{100} = 0.58$$

3

$\frac{56}{100}$     0.56

$$\frac{56}{100} = 0.56$$

Copyright © 2014 Symphony Learning LLC. Permission is granted to reproduce this sheet for classroom use.




Name: \_\_\_\_\_ Date: \_\_\_\_\_

Complete each problem.




Manipulatives and Symbols

1



$$\frac{22}{100} = 0.22$$

ANSWER KEY

2


$$\frac{75}{100} = 0.75$$

3


$$\frac{9}{10} = 0.9$$

Copyright © 2014 Symphony Learning LLC. Permission is granted to reproduce this sheet for classroom use.



Name: \_\_\_\_\_ Date: \_\_\_\_\_



Symbols

Write the missing fraction or decimal.

$$\frac{67}{100} = 0.67$$

ANSWER KEY

$$\frac{88}{100} = 0.88$$

$$\frac{2}{10} = 0.2$$

$$0.43 = \frac{43}{100}$$

Copyright © 2014 Symphony Learning LLC. Permission is granted to reproduce this sheet for classroom use.

