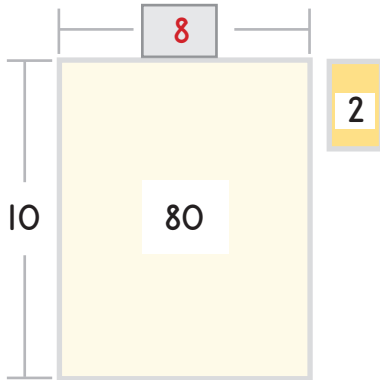


Name: _____ Date: _____



Complete the models by filling in the empty boxes.

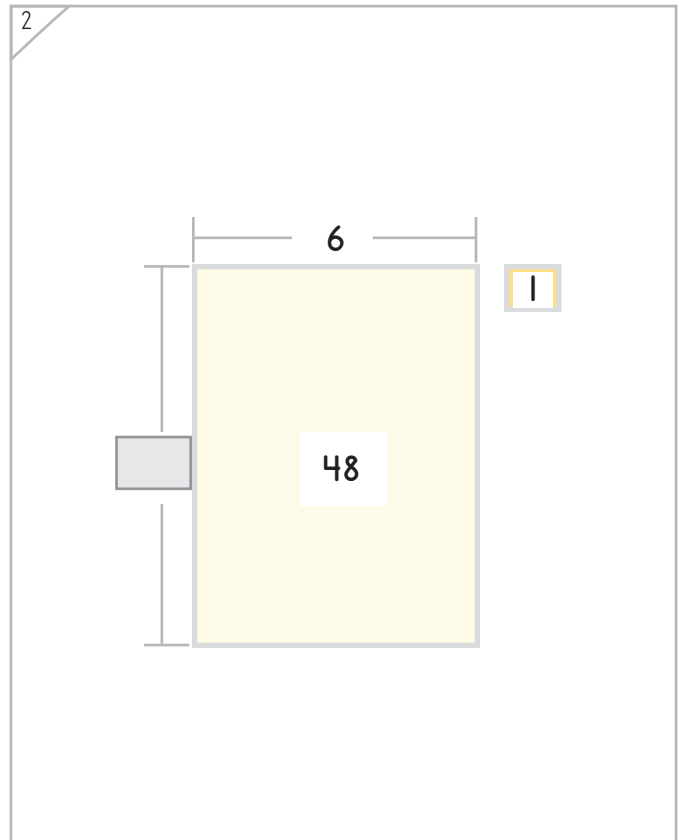
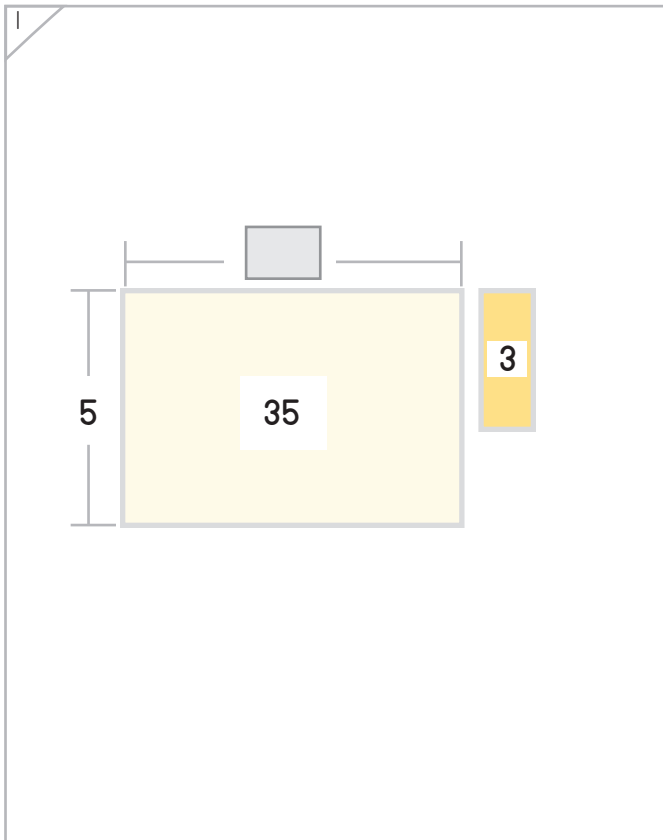
Example



This area model shows a total of 82 that is divided into equal groups of 10. The number of equal groups is 8, and there is 2 left over.

So, 82 divided by 10 equals 8 remainder 2.

$$\text{Or, } 82 \div 10 = 8 \text{ R } 2$$





Make each model and number sentence match.

1

$$\begin{array}{r}
 \boxed{} \text{ R } \boxed{} \\
 6 \overline{) 33} \\
 \underline{- 30} \quad 6 \times 5 \\
 3
 \end{array}$$

2

$$\begin{array}{r}
 \boxed{} \text{ R } \boxed{} \\
 8 \overline{) 34} \\
 \underline{- 32} \\
 \boxed{}
 \end{array}$$





Make each model and number sentence match.

1

2





Make each model and number sentence match.

1

2

One possible solution:



