

Name: _____ Date: _____



Draw dot cards to complete the number problem.

Example

+			
<hr/>			

1		
+		
<hr/>		





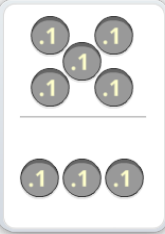

2		
+		
<hr/>		

Copyright © 2014 Symphony Learning LLC. Permission is granted to reproduce this sheet for classroom use.



Draw dot cards and numbers to match.



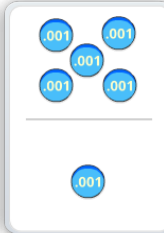


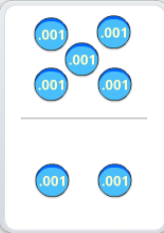
1

			
+			
+			

2 4.3 3

+

2

			
+			
+			

0.2 2 7

+



Name: _____ Date: _____



Symbols

Complete each number fact.

$$\begin{array}{r} 506.075 \\ + 43.43 \\ \hline \end{array}$$

$$\begin{array}{r} 7.109 \\ + 83.94 \\ \hline \end{array}$$

$$\begin{array}{r} 986.375 \\ - 64.204 \\ \hline \end{array}$$

$$\begin{array}{r} 66.4 \\ - 24.299 \\ \hline \end{array}$$

$$\begin{array}{r} .599 \\ + 83.409 \\ \hline \end{array}$$

$$\begin{array}{r} 199.977 \\ + 56.999 \\ \hline \end{array}$$



Name: _____ Date: _____



Word Problems

Create a dot card model and matching number sentence that shows the sum of these numbers:

two hundred seventy and thirty four thousandths; and
fifty six and one hundred eight thousandths.

Your dot card model:

Your number sentence:

