

Name: \_\_\_\_\_ Date: \_\_\_\_\_



Draw dot cards to complete the number problem.

Example

+			
+			

1			
+			
+			







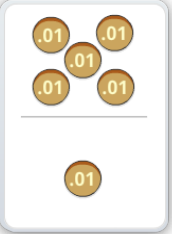









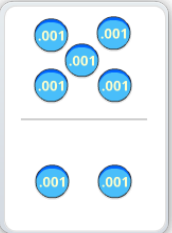


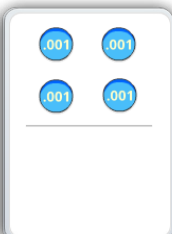
2			
+			
+			

ANSWER KEY

Copyright © 2014 Symphony Learning LLC. Permission is granted to reproduce this sheet for classroom use.



Draw dot cards and numbers to match.

1	   	$\begin{array}{r}   \\ 2 \ 4.3 \ 3 \end{array}$
+	  	$\begin{array}{r} + \quad \boxed{3 \ 0.8 \ 6} \\ \hline \end{array}$
	   	$\begin{array}{r} \boxed{5 \ 5.1 \ 9} \\ \hline \end{array}$
2	  	$\begin{array}{r}   \quad   \\ 0.2 \ 2 \ 7 \end{array}$
+	  	$\begin{array}{r} + \quad \boxed{5.8 \ 0 \ 7} \\ \hline \end{array}$
	  	$\begin{array}{r} \boxed{6.0 \ 3 \ 4} \\ \hline \end{array}$

ANSWER KEY

Copyright © 2014 Symphony Learning LLC. Permission is granted to reproduce this sheet for classroom use.



Name: \_\_\_\_\_ Date: \_\_\_\_\_



Symbols

Complete each number fact.

$$\begin{array}{r} 506.075 \\ + 43.43 \\ \hline \end{array}$$

549.505

$$\begin{array}{r} 7.109 \\ + 83.94 \\ \hline \end{array}$$

91.049

$$\begin{array}{r} 986.375 \\ - 64.204 \\ \hline \end{array}$$

922.171

$$\begin{array}{r} 66.4 \\ - 24.299 \\ \hline \end{array}$$

42.301

$$\begin{array}{r} .599 \\ + 83.409 \\ \hline \end{array}$$

84.008

$$\begin{array}{r} 199.977 \\ + 56.999 \\ \hline \end{array}$$

256.976

ANSWER KEY

Copyright © 2014 Symphony Learning LLC. Permission is granted to reproduce this sheet for classroom use.



Name: \_\_\_\_\_ Date: \_\_\_\_\_



Word Problems

Create a dot card model and matching number sentence that shows the sum of these numbers:  
 two hundred seventy and thirty four thousandths; and  
 fifty six and one hundred eight thousandths.

ANSWER KEY

Your dot card model:

100				.01	
+					

Your number sentence:

$$\begin{array}{r}
 \phantom{2}70.\phantom{0}34 \\
 + \phantom{2}56.\phantom{0}08 \\
 \hline
 326.\phantom{0}42
 \end{array}$$

Copyright © 2014 Symphony Learning LLC. Permission is granted to reproduce this sheet for classroom use.

