



Name: \_\_\_\_\_ Date: \_\_\_\_\_



Draw the dot card that is '1 more'.

Example



1

2

3

4

Copyright © 2019 Symphony Learning LLC. Permission is granted to reproduce this sheet for classroom use.

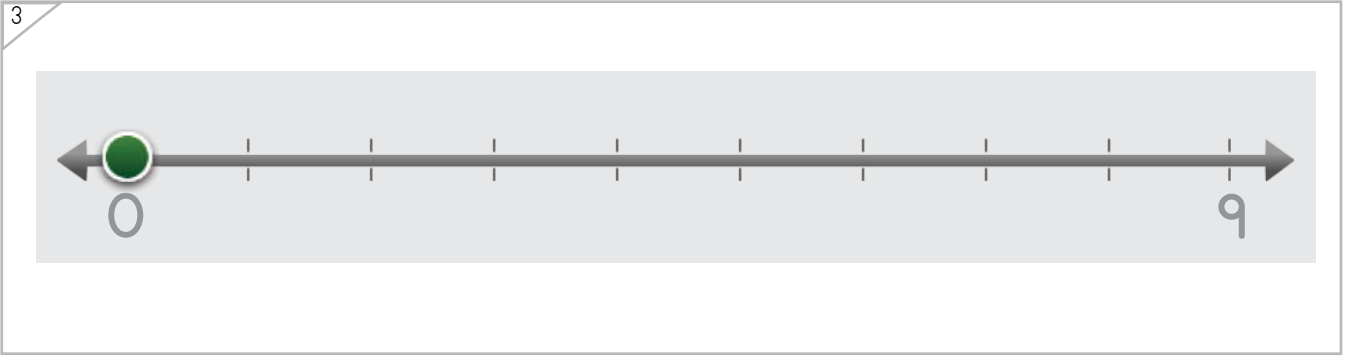
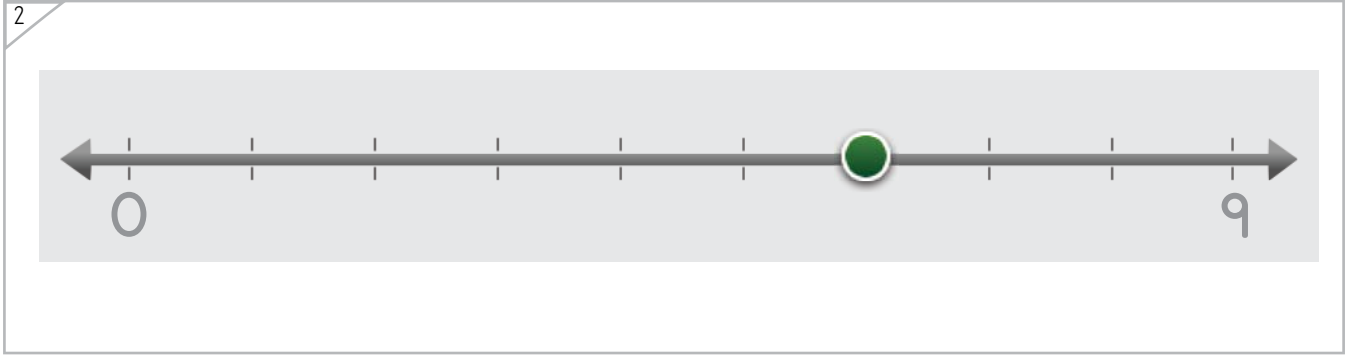
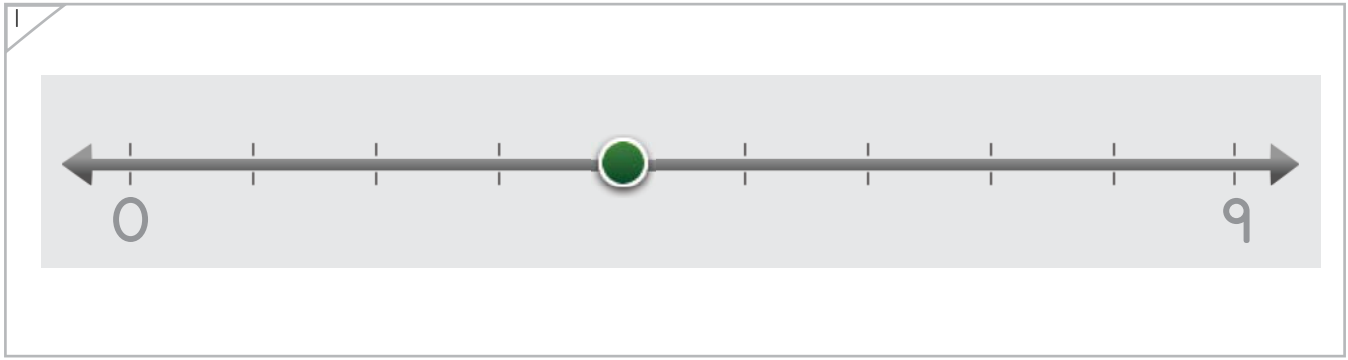
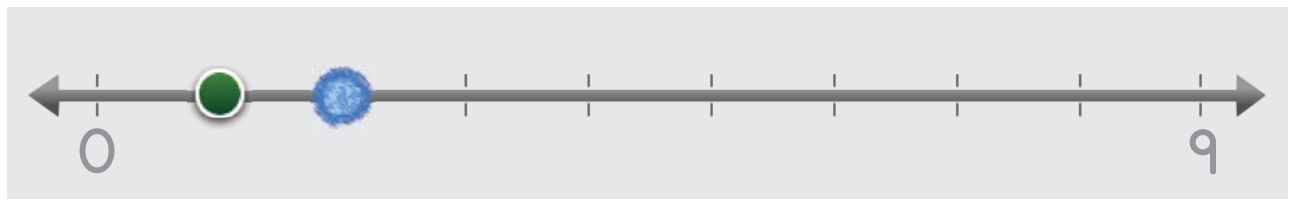


Name: \_\_\_\_\_ Date: \_\_\_\_\_



Draw the dot on the number line that is '1 more'.

Example



Copyright © 2019 Symphony Learning LLC. Permission is granted to reproduce this sheet for classroom use.

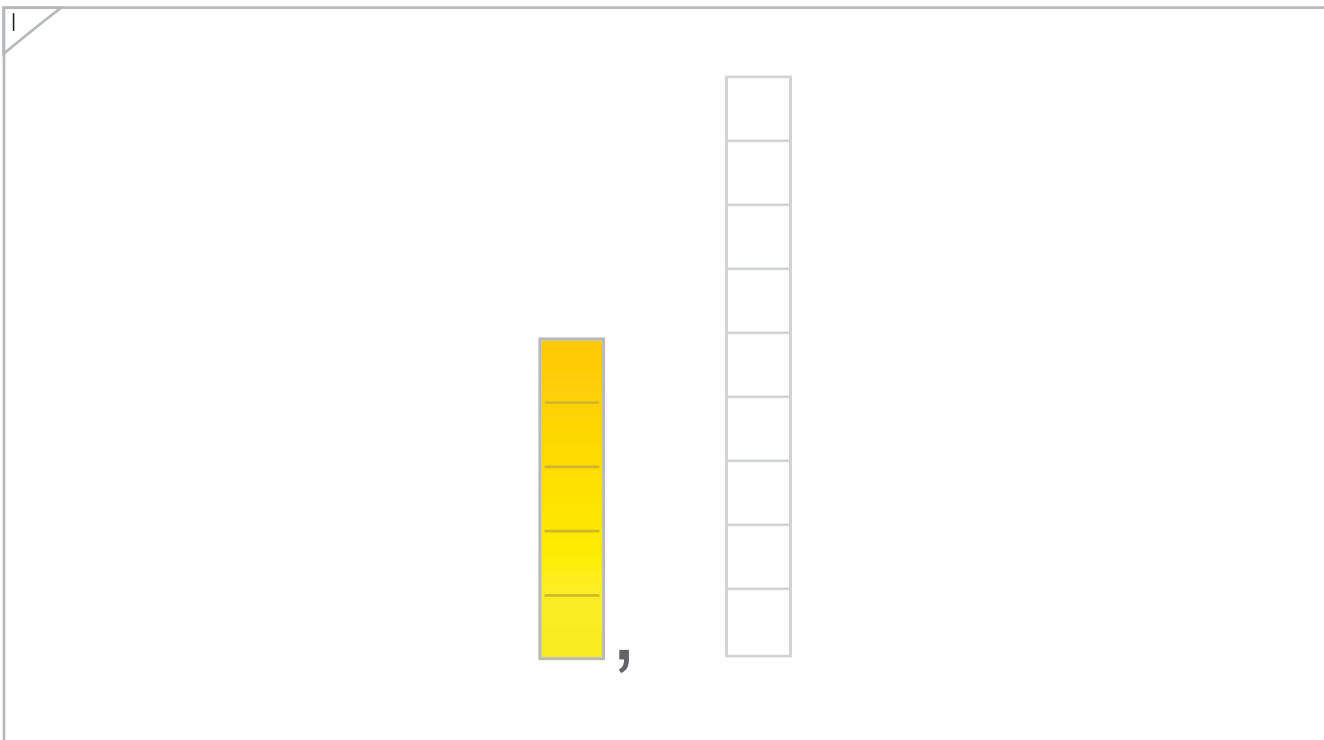



Name: \_\_\_\_\_ Date: \_\_\_\_\_



Draw the bar that is '1 more'.

Example



Name: \_\_\_\_\_ Date: \_\_\_\_\_



Manipulatives

Draw the bar that is '1 more'.

1

8 yellow segments, 8 empty segments

2

4 blue segments, 8 empty segments

Copyright © 2019 Symphony Learning LLC. Permission is granted to reproduce this sheet for classroom use.



Name: \_\_\_\_\_ Date: \_\_\_\_\_



Symbols

Write the number that is '1 more' without counting.

3	<input type="text"/>
---	----------------------

8	<input type="text"/>
---	----------------------

6	<input type="text"/>
---	----------------------

1	<input type="text"/>
---	----------------------

0	<input type="text"/>
---	----------------------

2	<input type="text"/>
---	----------------------

4	<input type="text"/>
---	----------------------

5	<input type="text"/>
---	----------------------



Name: \_\_\_\_\_ Date: \_\_\_\_\_



Symbols

Write the number that is '1 more' without counting.

7	<input type="text"/>
---	----------------------

0	<input type="text"/>
---	----------------------

2	<input type="text"/>
---	----------------------

1	<input type="text"/>
---	----------------------

5	<input type="text"/>
---	----------------------

3	<input type="text"/>
---	----------------------

6	<input type="text"/>
---	----------------------

8	<input type="text"/>
---	----------------------

Copyright © 2019 Symphony Learning LLC. Permission is granted to reproduce this sheet for classroom use.



Name: \_\_\_\_\_ Date: \_\_\_\_\_



Symbols

Write the number that is '1 more' without counting.

8	<input type="text"/>
---	----------------------

2	<input type="text"/>
---	----------------------

4	<input type="text"/>
---	----------------------

3	<input type="text"/>
---	----------------------

5	<input type="text"/>
---	----------------------

0	<input type="text"/>
---	----------------------

6	<input type="text"/>
---	----------------------

7	<input type="text"/>
---	----------------------

Copyright © 2019 Symphony Learning LLC. Permission is granted to reproduce this sheet for classroom use.

