


Name: _____ Date: _____



Draw the dot card that is '1 less'.

Example



1

2

3

4

Copyright © 2019 Symphony Learning LLC. Permission is granted to reproduce this sheet for classroom use.

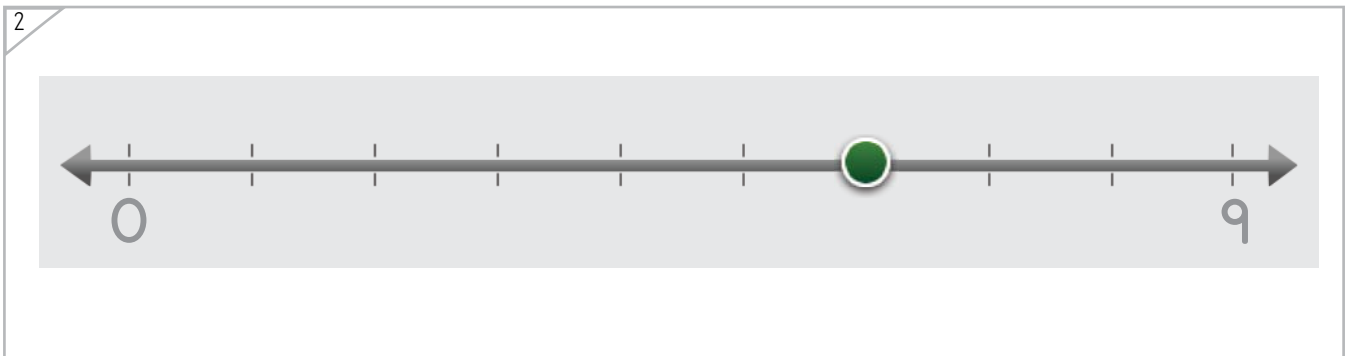
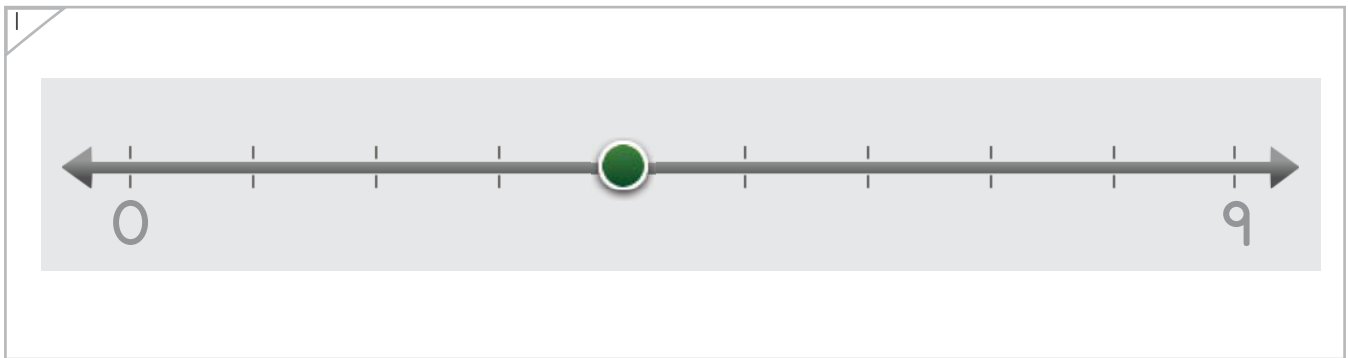
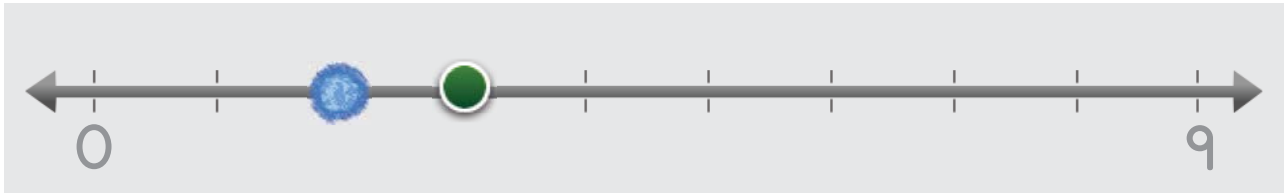


Name: _____ Date: _____



Draw the dot that is '1 less'.

Example



Copyright © 2019 Symphony Learning LLC. Permission is granted to reproduce this sheet for classroom use.



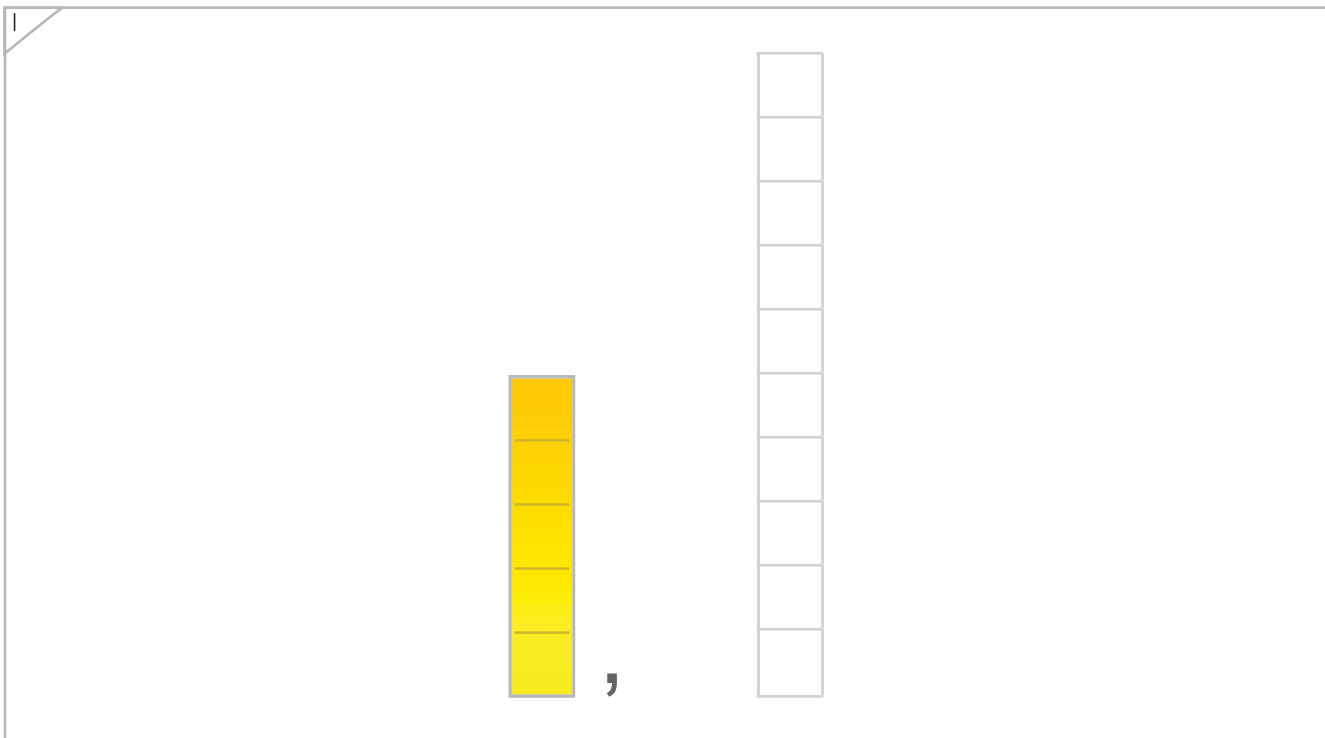
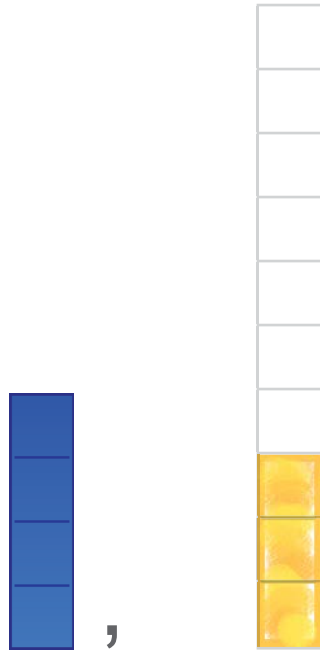
Name: _____ Date: _____



Manipulatives

Draw the bar that is '1 less'.

Example



Copyright © 2019 Symphony Learning LLC. Permission is granted to reproduce this sheet for classroom use.



Name: _____ Date: _____



Manipulatives

Draw the bar that is '1 less'.

1

6	8
---	---

2

4	8
---	---

Copyright © 2019 Symphony Learning LLC. Permission is granted to reproduce this sheet for classroom use.



Name: _____ Date: _____



Symbols

Write the number that is '1 less'.

3	<input type="text"/>
---	----------------------

8	<input type="text"/>
---	----------------------

6	<input type="text"/>
---	----------------------

1	<input type="text"/>
---	----------------------

9	<input type="text"/>
---	----------------------

2	<input type="text"/>
---	----------------------

4	<input type="text"/>
---	----------------------

5	<input type="text"/>
---	----------------------

Copyright © 2019 Symphony Learning LLC. Permission is granted to reproduce this sheet for classroom use.



Name: _____ Date: _____



Symbols

Write the number that is '1 less'.

7	<input type="text"/>
---	----------------------

9	<input type="text"/>
---	----------------------

2	<input type="text"/>
---	----------------------

1	<input type="text"/>
---	----------------------

5	<input type="text"/>
---	----------------------

3	<input type="text"/>
---	----------------------

6	<input type="text"/>
---	----------------------

8	<input type="text"/>
---	----------------------

Copyright © 2019 Symphony Learning LLC. Permission is granted to reproduce this sheet for classroom use.



Name: _____ Date: _____



Symbols

Write the number that is '1 less'.

8	<input type="text"/>
---	----------------------

2	<input type="text"/>
---	----------------------

4	<input type="text"/>
---	----------------------

3	<input type="text"/>
---	----------------------

5	<input type="text"/>
---	----------------------

1	<input type="text"/>
---	----------------------

6	<input type="text"/>
---	----------------------

7	<input type="text"/>
---	----------------------

Copyright © 2019 Symphony Learning LLC. Permission is granted to reproduce this sheet for classroom use.

