


Name: _____ Date: _____




Draw a dot card that is the same.

Example

Find the same.



=



1

=

2

=

3

=

Copyright © 2019 Symphony Learning LLC. Permission is granted to reproduce this sheet for classroom use.



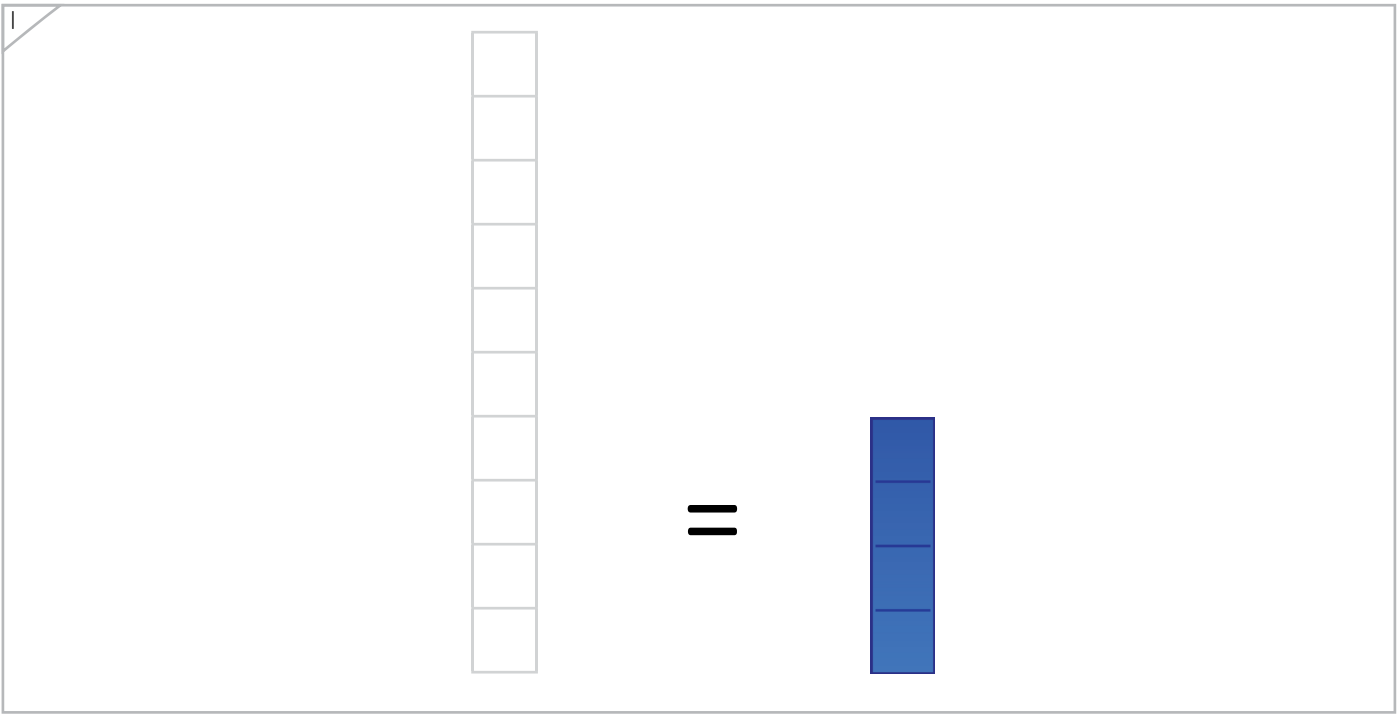

Name: _____ Date: _____



Manipulatives

Draw a bar that is the same.

Example



Copyright © 2019 Symphony Learning LLC. Permission is granted to reproduce this sheet for classroom use.



Name: _____ Date: _____



Manipulatives

Draw a bar that is the same.

1

A large rectangular box containing a visual equation. On the left is a vertical bar made of 7 yellow rectangular blocks stacked on top of each other. In the center is an equals sign (=). On the right is a vertical bar made of 7 empty white rectangular blocks stacked on top of each other.

2

A large rectangular box containing a visual equation. On the left is a vertical bar made of 7 empty white rectangular blocks stacked on top of each other. In the center is an equals sign (=). On the right is a vertical bar made of 7 yellow rectangular blocks stacked on top of each other.

Copyright © 2019 Symphony Learning LLC. Permission is granted to reproduce this sheet for classroom use.



Name: _____ Date: _____




Manipulatives and Symbols


Draw a dot card and a number that is the same.

Example

Find the same.




=





=




1




=



=




2



=

=



Copyright © 2019 Symphony Learning LLC. Permission is granted to reproduce this sheet for classroom use.



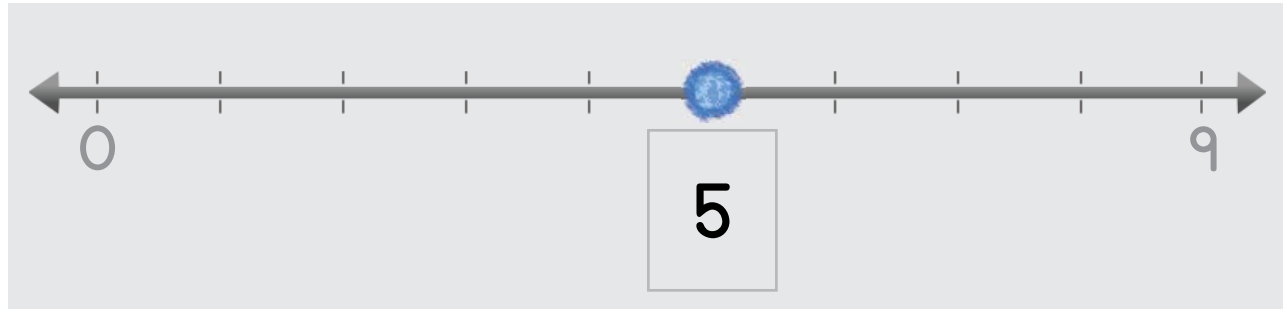
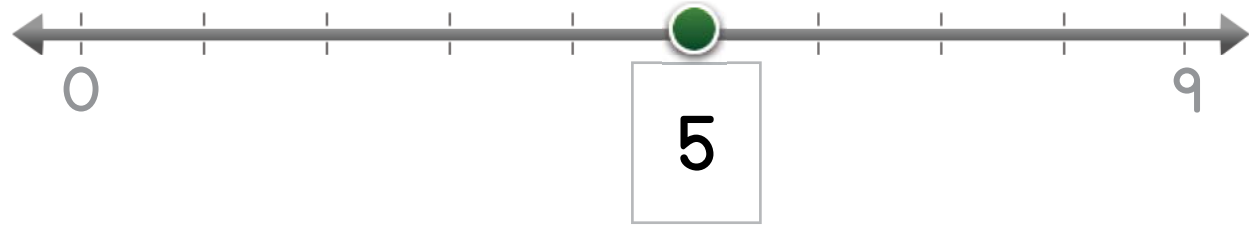
Name: _____ Date: _____



Manipulatives and Symbols

Draw a dot and number that are the same.

Example



Copyright © 2019 Symphony Learning LLC. Permission is granted to reproduce this sheet for classroom use.



Name: _____ Date: _____



Manipulatives and Symbols

Draw a dot and number that are the same.

1

0 9

8

2

0 9

3

Copyright © 2019 Symphony Learning LLC. Permission is granted to reproduce this sheet for classroom use.



Name: _____

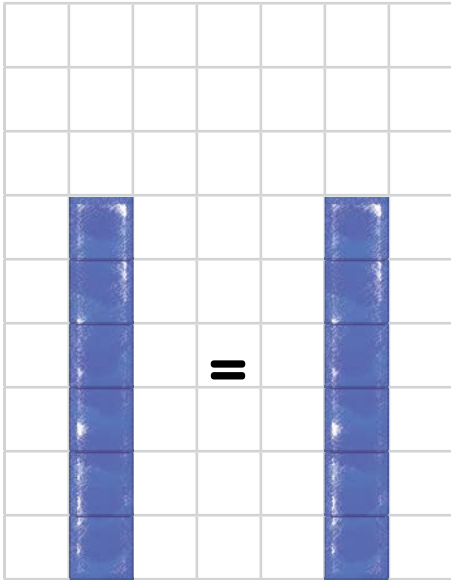
Date: _____



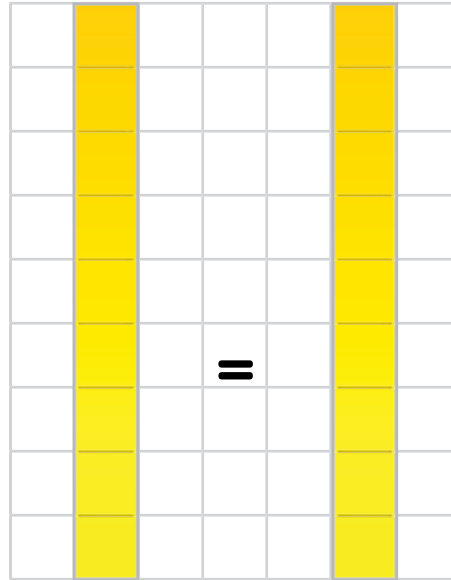
Manipulatives and Symbols

Draw numbers and bars to match.

Example



$$6 = 6$$



$$9 = 9$$

1

$$\square = \square$$

2

$$\square = \square$$

Copyright © 2019 Symphony Learning LLC. Permission is granted to reproduce this sheet for classroom use.



Name: _____

Date: _____



Manipulatives and Symbols

Draw numbers and bars to match.

1

$2 = 2$

2

$\square = \square$

3

$\square = \square$

4

$4 = 4$

Copyright © 2019 Symphony Learning LLC. Permission is granted to reproduce this sheet for classroom use.





Fill in the boxes to make each number comparison true.

4 <input type="text"/> 4	8 = <input type="text"/>
<input type="text"/> = 6	5 <input type="text"/> 5
4 = <input type="text"/>	<input type="text"/> = 9
2 = <input type="text"/>	<input type="text"/> = 6
<input type="text"/> = 7	0 <input type="text"/> 0
1 <input type="text"/> 1	7 = <input type="text"/>
3 <input type="text"/> <input type="text"/>	<input type="text"/> <input type="text"/> 5



Name: _____ Date: _____



Symbols

Fill in the boxes to make each number comparison true.

2 <input type="text"/> 2	9 = <input type="text"/>
<input type="text"/> = 8	4 <input type="text"/> 4
4 = <input type="text"/>	<input type="text"/> = 9
7 = <input type="text"/>	<input type="text"/> = 5
<input type="text"/> = 3	0 <input type="text"/> 0
1 <input type="text"/> 1	6 = <input type="text"/>
8 <input type="text"/> <input type="text"/>	<input type="text"/> <input type="text"/> 5

Copyright © 2019 Symphony Learning LLC. Permission is granted to reproduce this sheet for classroom use.

