
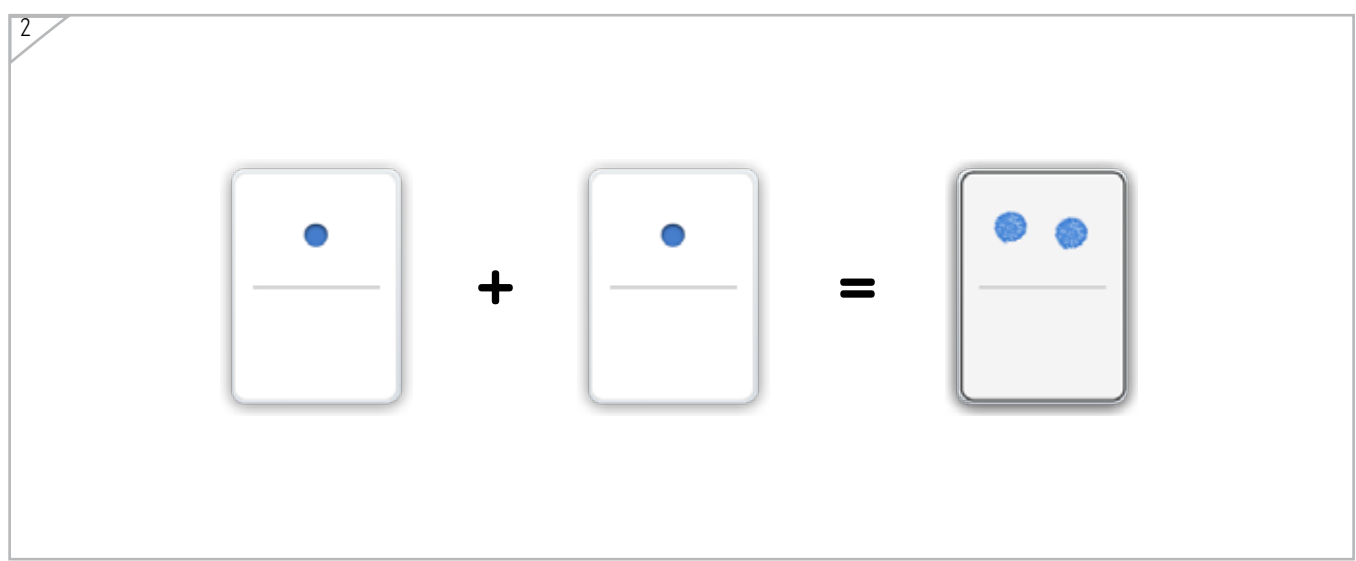
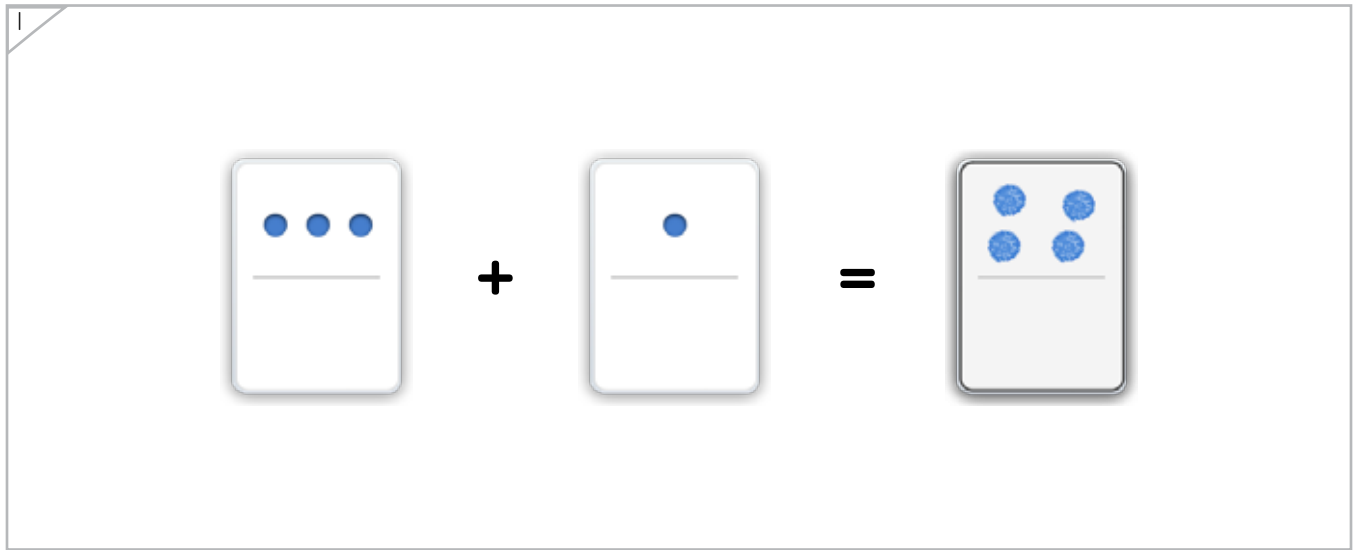



Name: _____ Date: _____



Draw a dot card that is the same as the dot cards put together.

Example



ANSWER KEY

Copyright © 2019 Symphony Learning LLC. Permission is granted to reproduce this sheet for classroom use.

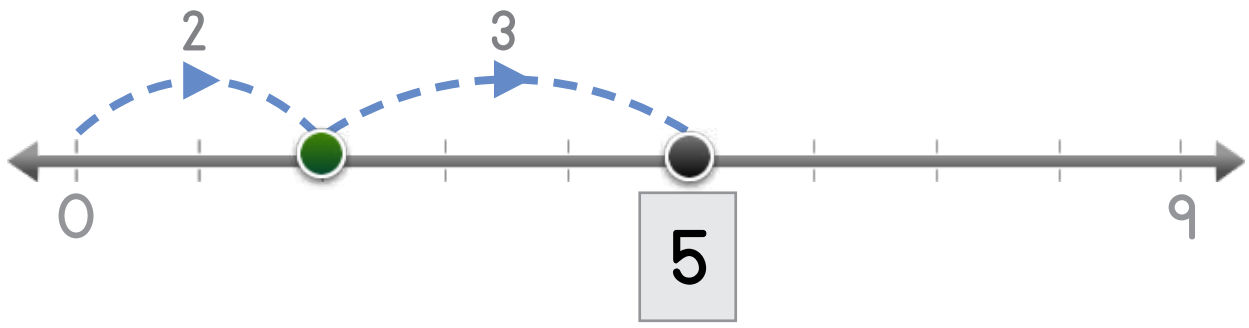


Name: _____ Date: _____

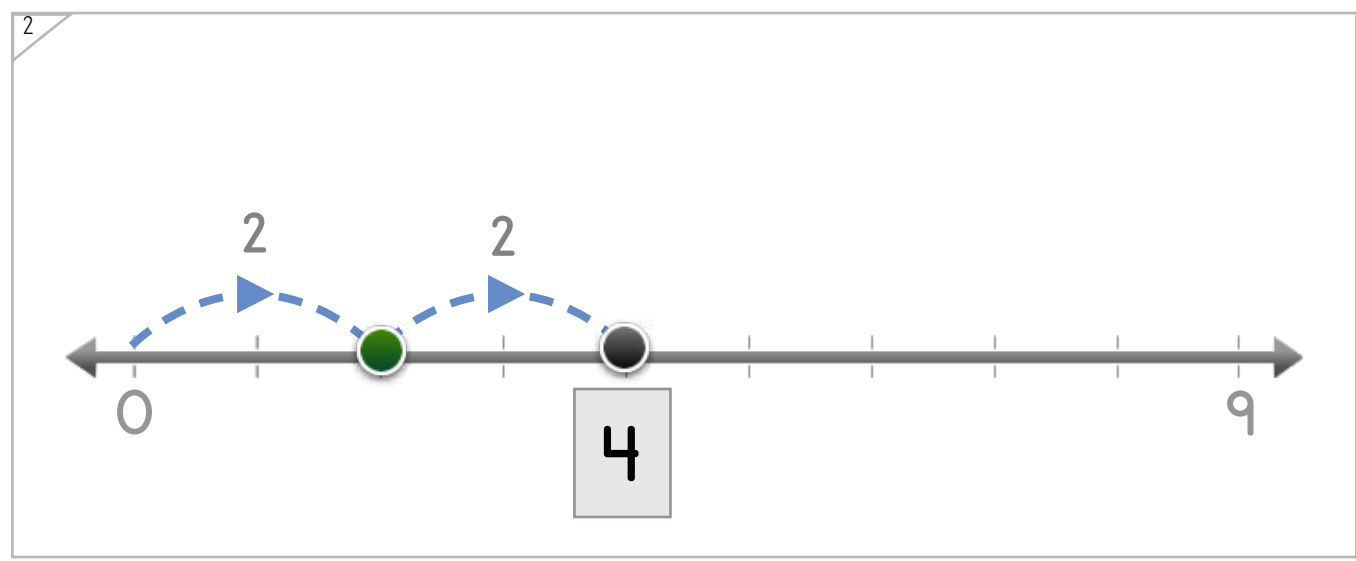
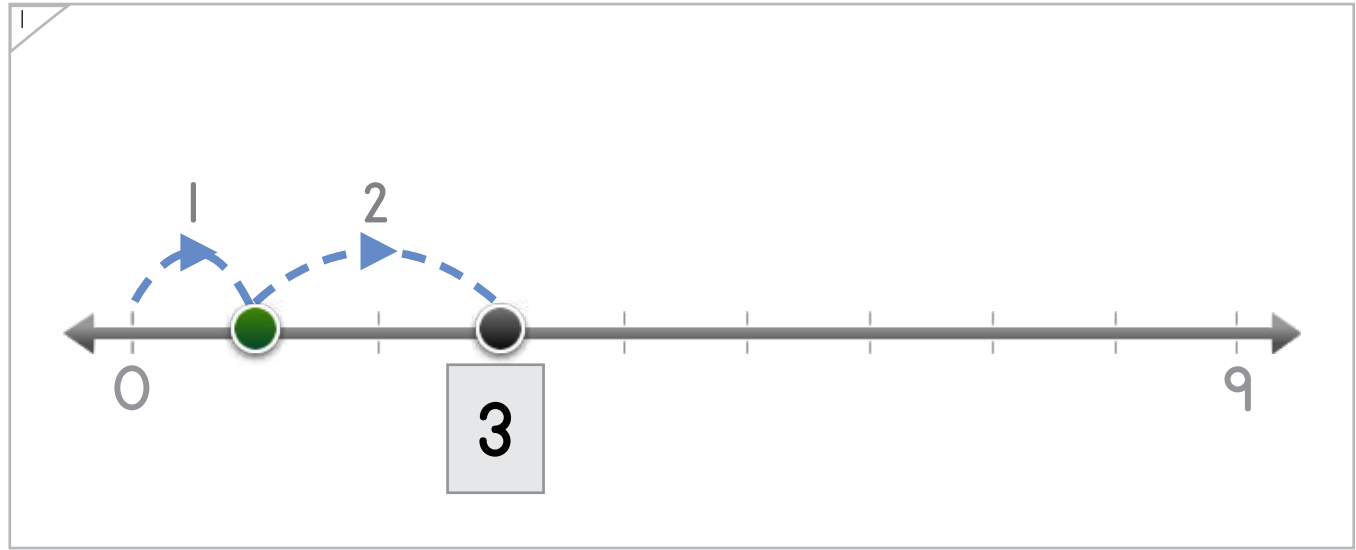


The dot jumps two times. Write the number where the dot lands.

Example



ANSWER KEY



Copyright © 2019 Symphony Learning LLC. Permission is granted to reproduce this sheet for classroom use.



Name: _____ Date: _____



Draw a bar that is the same as the parts put together.

Example

Diagram illustrating the example problem. A large bar labeled "WHOLE" is divided into 10 equal segments. The first 5 segments are filled with yellow, and the remaining 5 segments are empty. Below this bar are two smaller bars labeled "PART". The first "PART" bar contains 3 yellow segments. The second "PART" bar contains 2 blue segments.

1

Diagram illustrating problem 1. A large bar labeled "WHOLE" is divided into 10 equal segments. The first 4 segments are filled with blue, and the remaining 6 segments are empty. Below this bar are two smaller bars labeled "PART". The first "PART" bar contains 4 blue segments. The second "PART" bar contains a dashed outline of a square.


2

Diagram illustrating problem 2. A large bar labeled "WHOLE" is divided into 10 equal segments. The first 3 segments are filled with yellow, and the remaining 7 segments are empty. Below this bar are two smaller bars labeled "PART". The first "PART" bar contains 2 blue segments. The second "PART" bar contains 1 yellow square.

ANSWER KEY

Copyright © 2019 Symphony Learning LLC. Permission is granted to reproduce this sheet for classroom use.





Draw dot cards and numbers to match.

1

$2 + 3 = 5$

2

$3 + 1 = 4$

3

$0 + 3 = 3$

ANSWER KEY



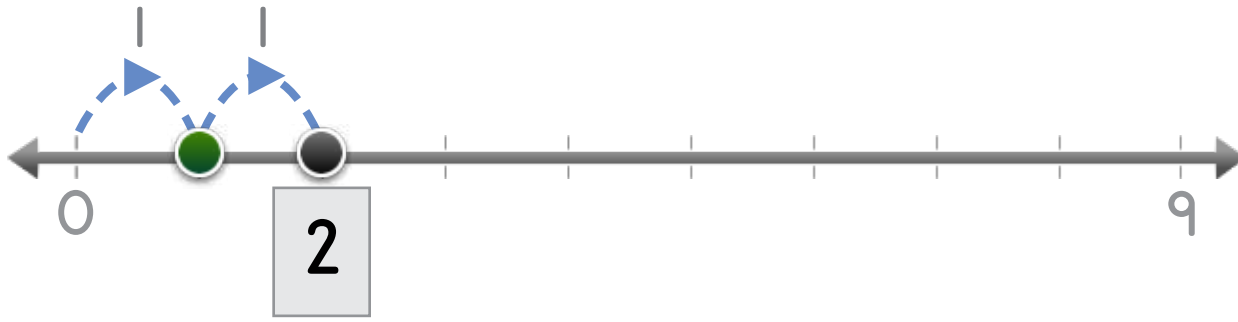
Name: _____ Date: _____



Manipulatives and Symbols

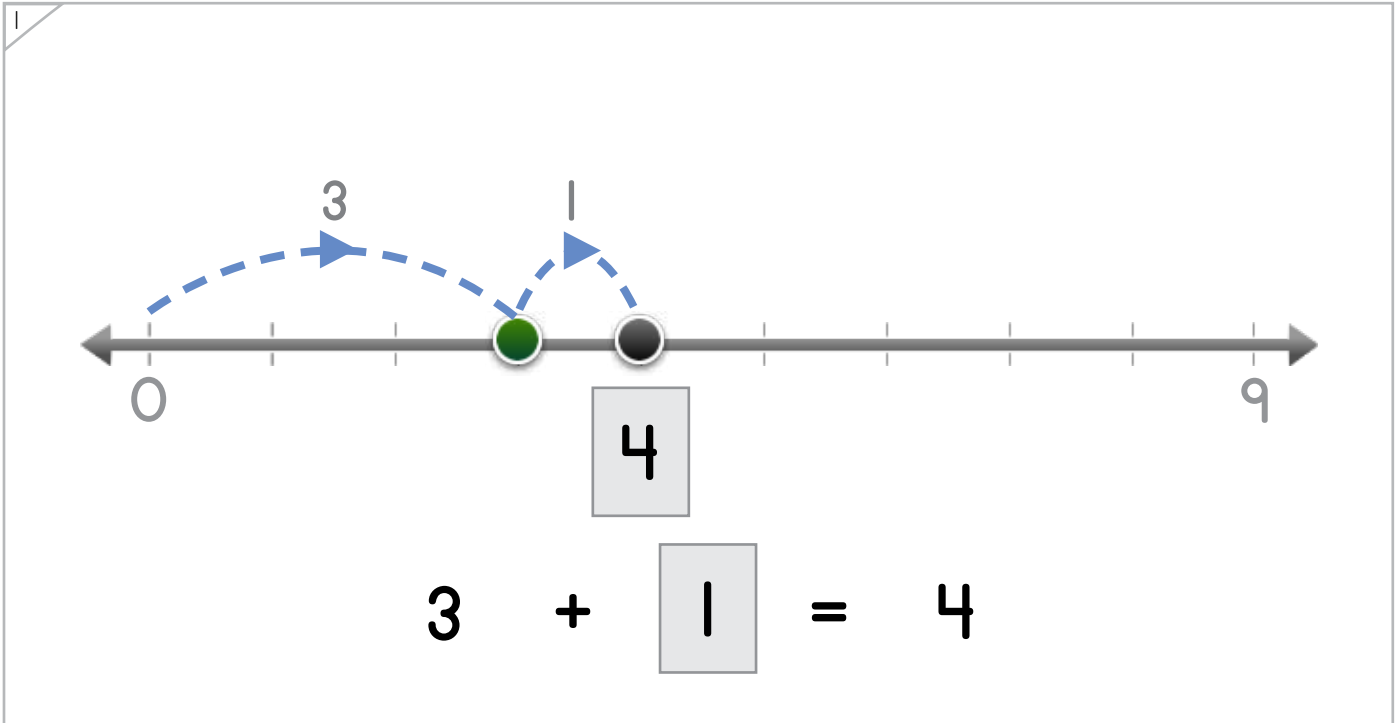
Draw jumping dots and numbers on the number line to match.

Example



$$1 + \boxed{1} = 2$$

ANSWER KEY



$$3 + \boxed{1} = 4$$

Copyright © 2019 Symphony Learning LLC. Permission is granted to reproduce this sheet for classroom use.



Name: _____ Date: _____



Manipulatives and Symbols

Draw jumping dots and numbers on the number line to match.

1

3 + 2 = 5

ANSWER KEY


2

2 + 2 = 4

Copyright © 2019 Symphony Learning LLC. Permission is granted to reproduce this sheet for classroom use.



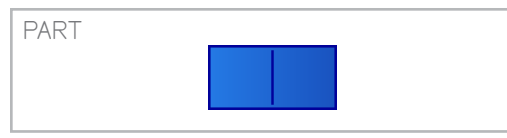

Name: _____ Date: _____



Manipulatives and Symbols

Draw bars and numbers to complete each number fact.

Example



$$\boxed{3} + 2 = 5$$

ANSWER KEY

1

WHOLE

PART

PART

$$1 + \boxed{1} = 2$$

2

WHOLE

PART

PART


$$\boxed{0} + 3 = 3$$

Copyright © 2019 Symphony Learning LLC. Permission is granted to reproduce this sheet for classroom use.



Name: _____ Date: _____

Draw bars and numbers to complete each number fact.



1

WHOLE

PART PART

$4 + 1 = 5$

2

WHOLE

PART PART

$2 + 2 = 4$

3

WHOLE

PART PART

$5 + 0 = 5$

ANSWER KEY

Copyright © 2019 Symphony Learning LLC. Permission is granted to reproduce this sheet for classroom use.



Name: _____ Date: _____



Symbols

Complete each number combination.

$1 + 1 = 2$	$3 + 2 = 5$
-------------	-------------

ANSWER KEY

$0 + 5 = 5$	$4 + 1 = 5$
-------------	-------------

$3 + 0 = 3$	$1 + 0 = 1$
-------------	-------------

$1 + 3 = 4$	$3 + 1 = 4$
-------------	-------------

multiple correct solutions are possible

multiple correct solutions are possible

Copyright © 2019 Symphony Learning LLC. Permission is granted to reproduce this sheet for classroom use.



Name: _____ Date: _____



Symbols

Complete each addition fact.

$1 + 1 = \boxed{2}$	$3 + 2 = \boxed{5}$
$4 + 1 = \boxed{5}$	$1 + 3 = \boxed{4}$
$5 + 0 = \boxed{5}$	$4 + 1 = \boxed{5}$
$1 + 1 = \boxed{2}$	$0 + 4 = \boxed{4}$
$3 + 0 = \boxed{3}$	$2 + 1 = \boxed{3}$
$2 + 1 = \boxed{3}$	$1 + 4 = \boxed{5}$
$\boxed{0} + 1 = \boxed{1}$	$3 + \boxed{2} = \boxed{5}$

multiple correct
solutions are possible

multiple correct
solutions are possible

ANSWER KEY

Copyright © 2019 Symphony Learning LLC. Permission is granted to reproduce this sheet for classroom use.



Name: _____ Date: _____



Symbols

Complete each number sentence.

$1 + 3 = \boxed{4}$	$0 + 2 = \boxed{2}$
$2 + 2 = \boxed{4}$	$4 + 1 = \boxed{5}$
$1 + 1 = \boxed{2}$	$3 + 0 = \boxed{3}$
$0 + 1 = \boxed{1}$	$4 + 0 = \boxed{4}$
$0 + 5 = \boxed{5}$	$1 + 2 = \boxed{3}$
$2 + 3 = \boxed{5}$	$4 + 1 = \boxed{5}$
$2 + \boxed{0} = \boxed{2}$	$1 + \boxed{2} = \boxed{3}$

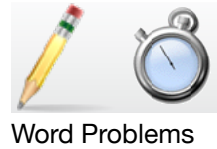
multiple correct
solutions are possible

multiple correct
solutions are possible

ANSWER KEY

Copyright © 2019 Symphony Learning LLC. Permission is granted to reproduce this sheet for classroom use.





Read the story.

Elaina has a kitten that weighs 2 pounds.
Victor has a kitten that weighs 1 pound.
How much do the kittens weigh altogether?

ANSWER KEY

Draw dot cards to make a model for the story.

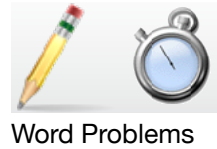


Write a number fact that matches your model.

$$\boxed{2} + \boxed{1} = \boxed{3}$$

Answer: 3 pounds



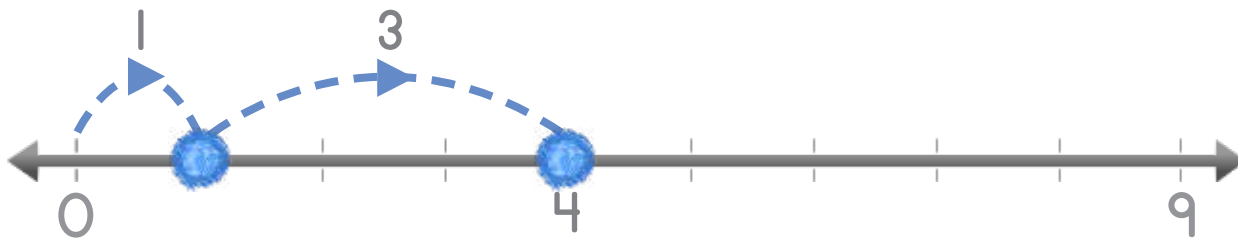


Read the story.

Jim scored 1 goal in soccer.
 Donna scored 3 goals in soccer.
 How many goals did they score altogether?

ANSWER KEY

Draw dots to make a model for the story.



Write a number fact that matches your model.

$$\boxed{1} + \boxed{3} = \boxed{4}$$

Answer: 4 goals

