

Name: \_\_\_\_\_ Date: \_\_\_\_\_



# Draw the missing dot card.

Example

$$\begin{array}{|c|} \hline \bullet \bullet \bullet \\ \hline \\ \hline \end{array} + \begin{array}{|c|} \hline \bullet \bullet \bullet \\ \bullet \bullet \\ \hline \bullet \bullet \\ \hline \end{array} = \begin{array}{|c|} \hline 10 \\ \hline \\ \hline \end{array}$$

1

$$\begin{array}{|c|} \hline \bullet \bullet \\ \hline \\ \hline \end{array} + \begin{array}{|c|} \hline \bullet \bullet \bullet \\ \bullet \bullet \\ \hline \bullet \bullet \bullet \\ \hline \end{array} = \begin{array}{|c|} \hline \\ \hline \\ \hline \end{array}$$

2

$$\begin{array}{|c|} \hline \\ \hline \\ \hline \end{array} = \begin{array}{|c|} \hline \bullet \\ \hline \\ \hline \end{array} + \begin{array}{|c|} \hline \bullet \bullet \bullet \\ \bullet \bullet \\ \hline \bullet \bullet \bullet \\ \hline \end{array}$$

3

$$\begin{array}{|c|} \hline \bullet \bullet \\ \bullet \bullet \\ \hline \\ \hline \end{array} + \begin{array}{|c|} \hline \bullet \bullet \bullet \\ \bullet \bullet \\ \hline \bullet \\ \hline \end{array} = \begin{array}{|c|} \hline \\ \hline \\ \hline \end{array}$$

Copyright © 2014 Symphony Learning LLC. Permission is granted to reproduce this sheet for classroom use.

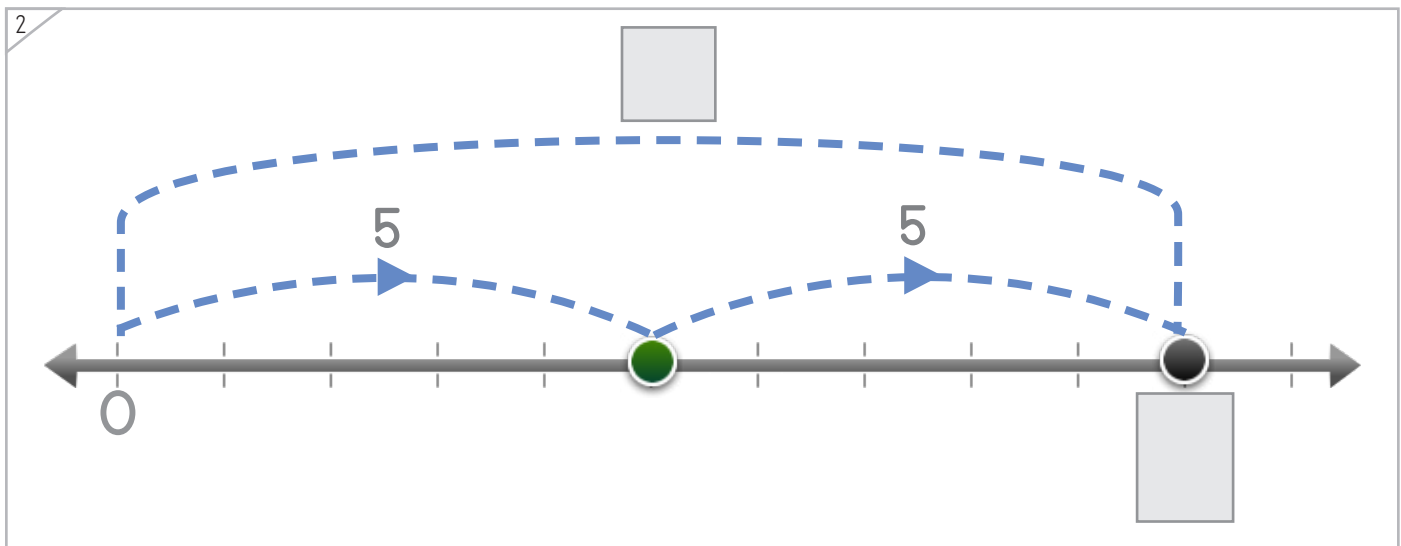
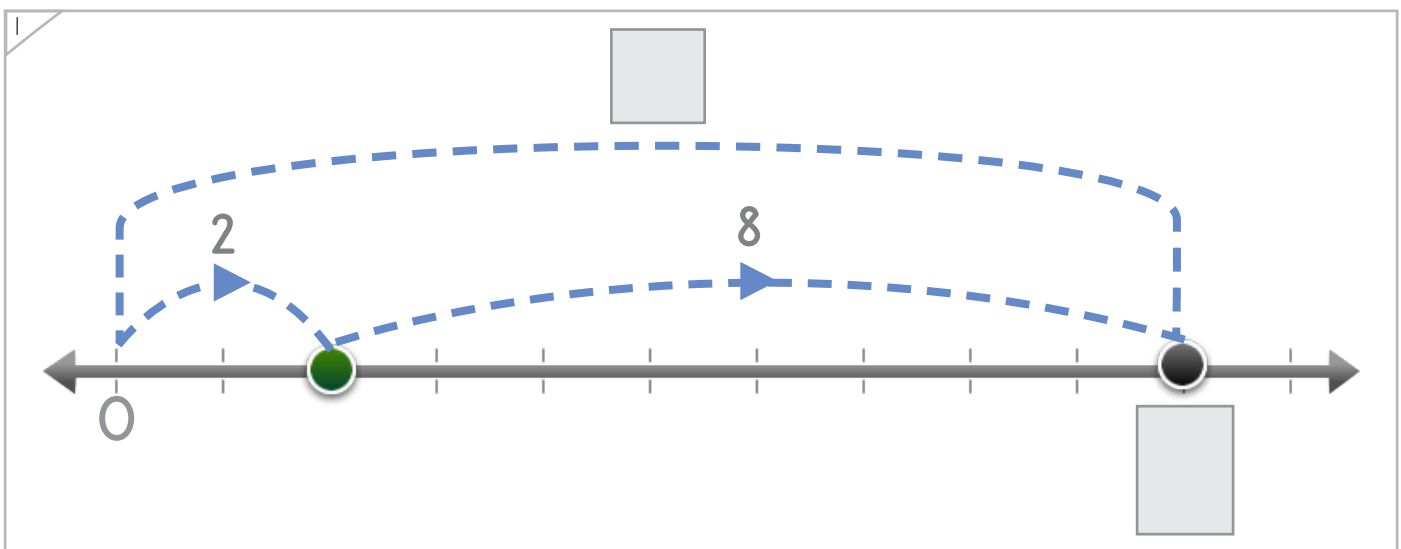
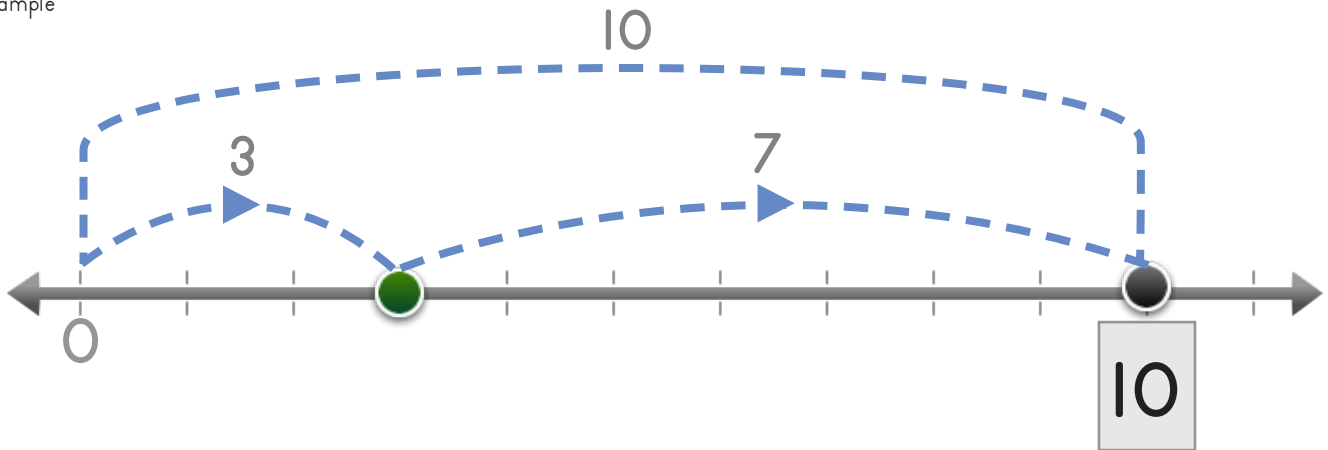


Name: \_\_\_\_\_ Date: \_\_\_\_\_

Draw the missing numbers.



Example



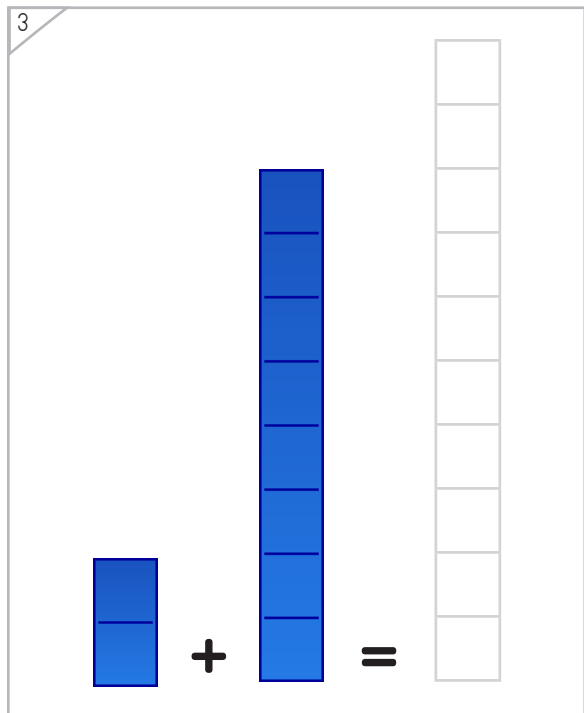
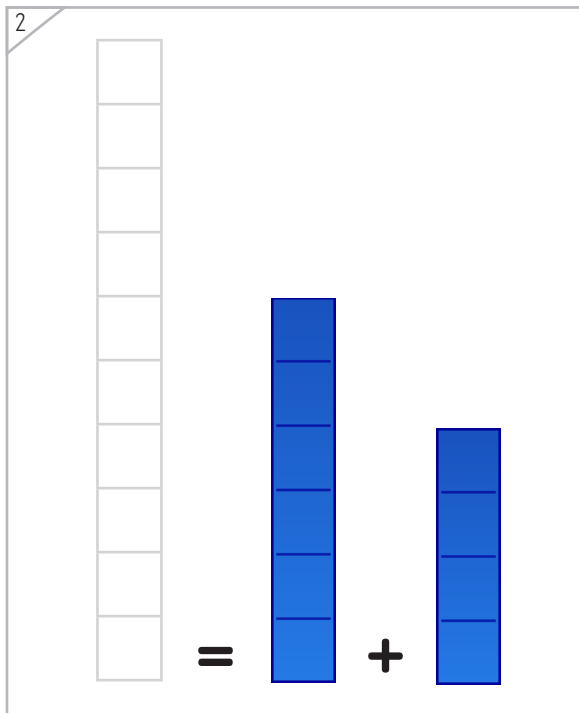
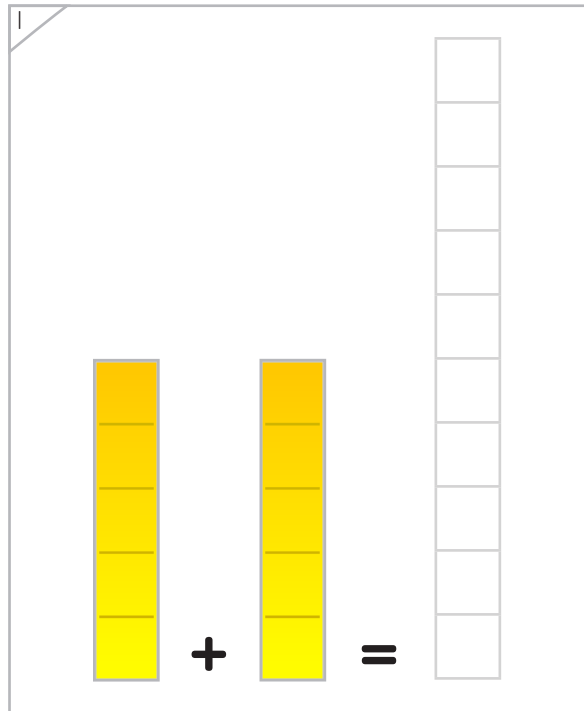
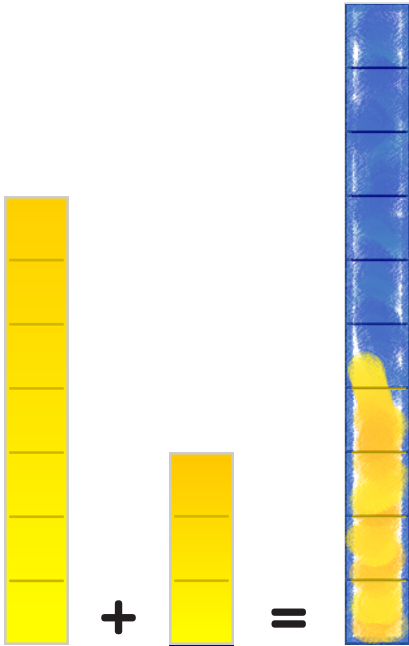
Copyright © 2014 Symphony Learning LLC. Permission is granted to reproduce this sheet for classroom use.





Draw the missing bar.

Example





Draw dots and numbers to complete each number fact.

1

$$\begin{array}{|c|} \hline 10 \\ \hline \\ \hline \end{array} + \begin{array}{|c|} \hline \\ \hline \\ \hline \end{array} = \begin{array}{|c|} \hline 10 \\ \hline \\ \hline \end{array}$$
  

$$\square + 0 = \square$$

2

$$\begin{array}{|c|} \hline \\ \hline \\ \hline \end{array} = \begin{array}{|c|} \hline \\ \hline \\ \hline \end{array} + \begin{array}{|c|} \hline \bullet \\ \hline \\ \hline \end{array}$$
  

$$10 = 9 + 1$$

3

$$\begin{array}{|c|} \hline \bullet \bullet \bullet \\ \hline \bullet \bullet \bullet \\ \hline \end{array} + \begin{array}{|c|} \hline \bullet \bullet \\ \hline \\ \hline \end{array} = \begin{array}{|c|} \hline \\ \hline \\ \hline \end{array}$$
  

$$\square + \square = 10$$

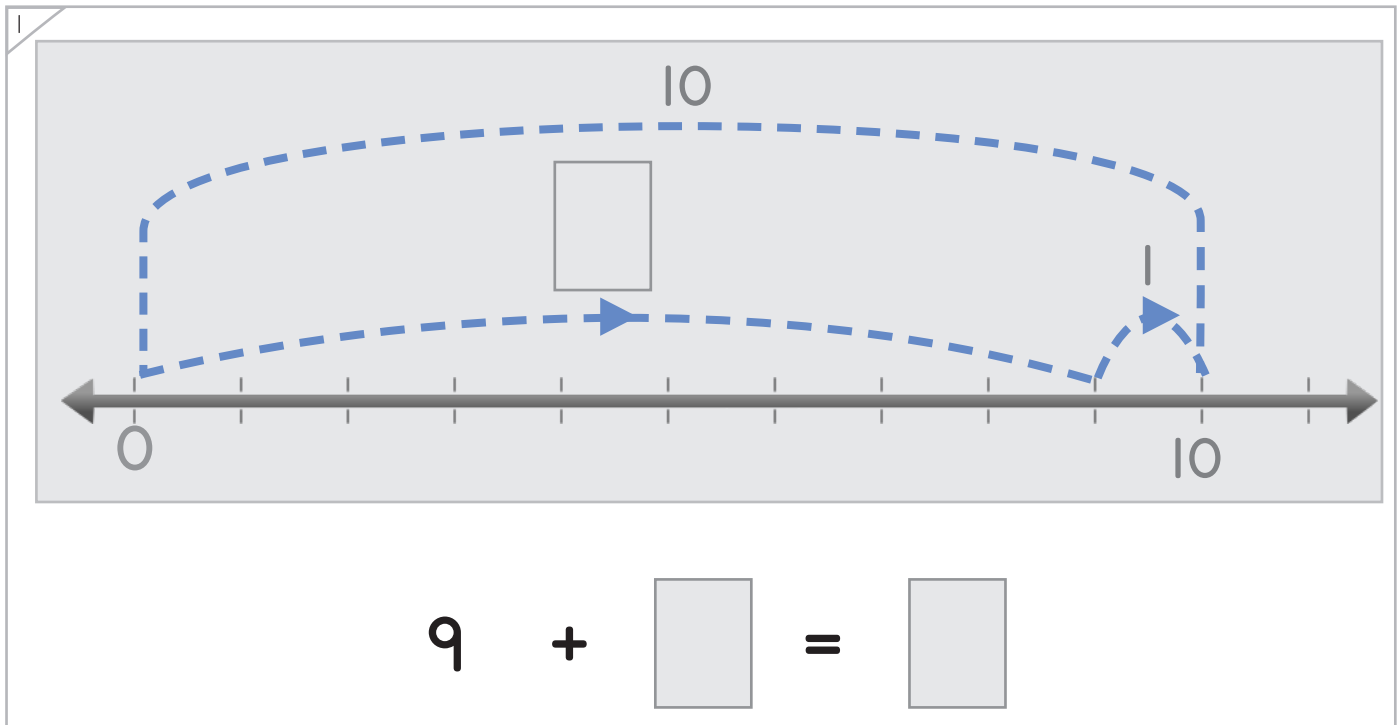
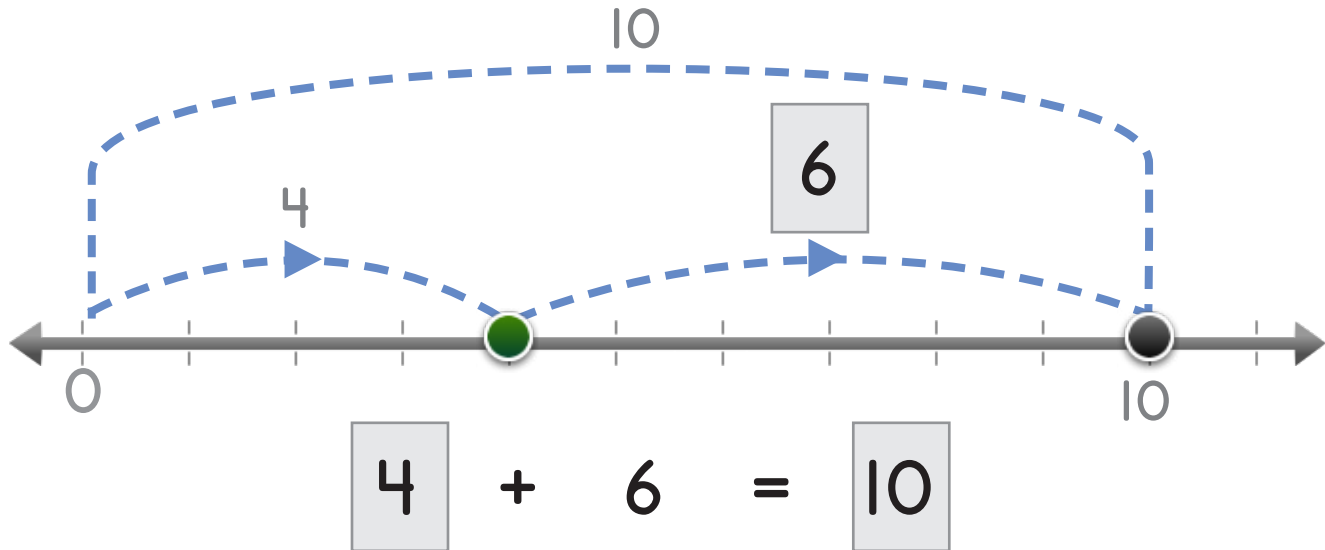

Name: \_\_\_\_\_ Date: \_\_\_\_\_



Manipulatives and Symbols

Draw the missing dots and numbers.

Example



Copyright © 2014 Symphony Learning LLC. Permission is granted to reproduce this sheet for classroom use.

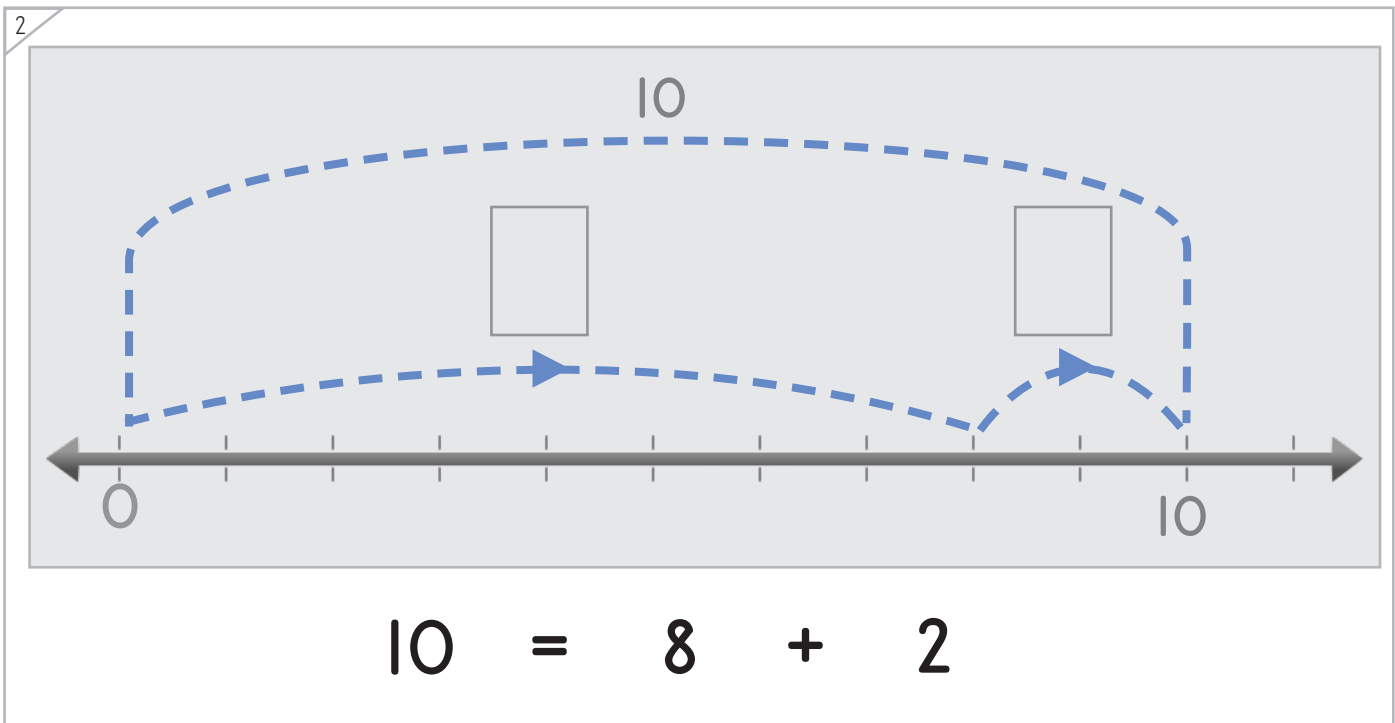
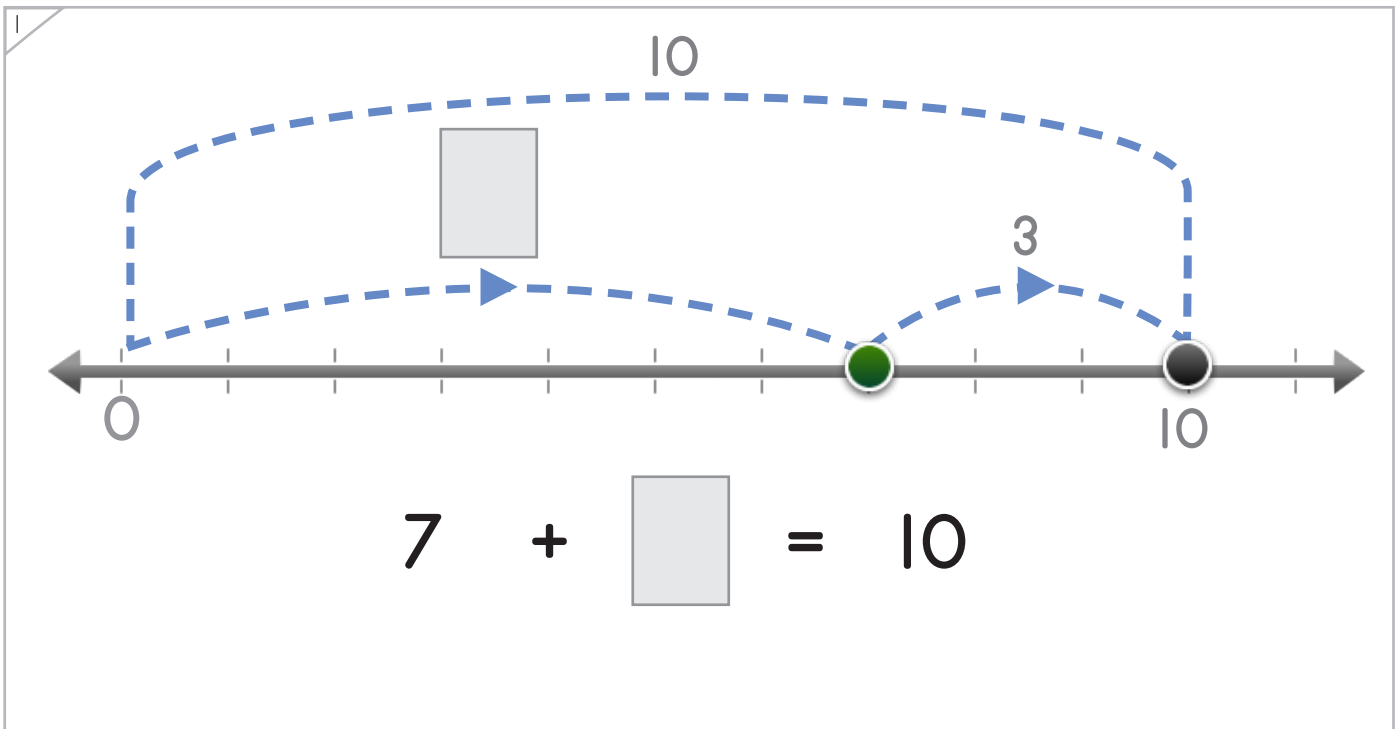


Name: \_\_\_\_\_ Date: \_\_\_\_\_



Manipulatives and Symbols

Draw the missing dots and numbers.



Copyright © 2014 Symphony Learning LLC. Permission is granted to reproduce this sheet for classroom use.



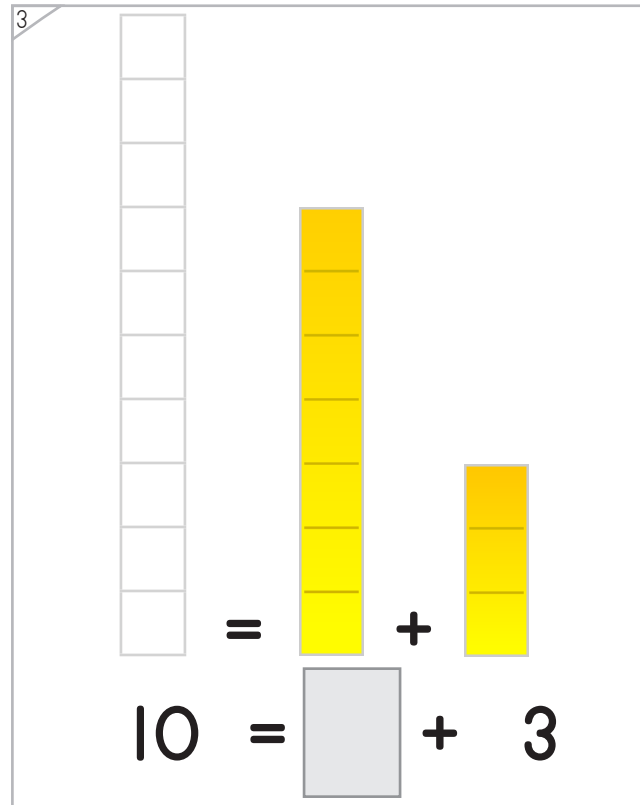
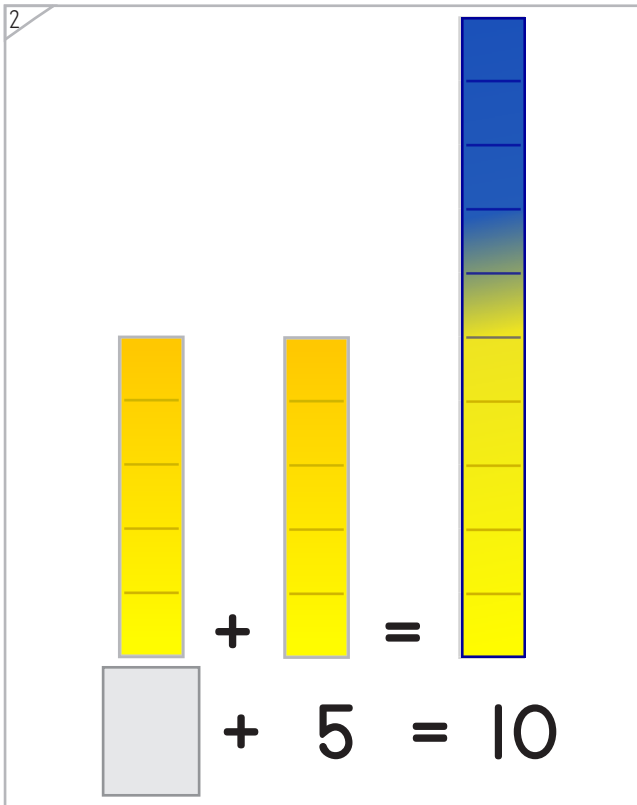
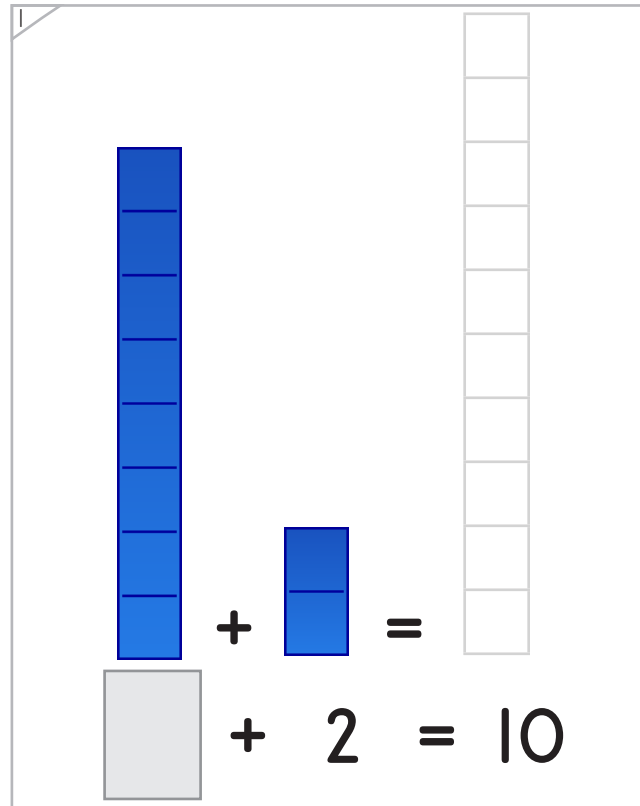
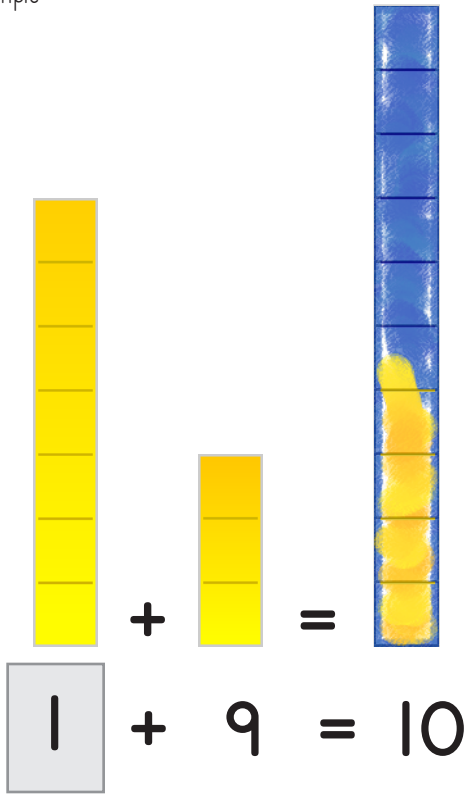
Name: \_\_\_\_\_ Date: \_\_\_\_\_



Manipulatives and Symbols

Draw bars and numbers to complete each number fact.

Example



Copyright © 2014 Symphony Learning LLC. Permission is granted to reproduce this sheet for classroom use.



Name: \_\_\_\_\_ Date: \_\_\_\_\_



Symbols

Complete each number fact.

$1 + 9 = \square$	$10 + 0 = \square$
-------------------	--------------------

$\square = 7 + 3$	$\square = 5 + 5$
-------------------	-------------------

$\square + 7 = 10$	$\square + 4 = 10$
--------------------	--------------------

$0 + \square = \square$	$3 + \square = \square$
-------------------------	-------------------------

Copyright © 2014 Symphony Learning LLC. Permission is granted to reproduce this sheet for classroom use.



Name: \_\_\_\_\_ Date: \_\_\_\_\_



Symbols

Complete each number fact.

$8 + 2 = \square$	$3 + 7 = \square$
$\square + 2 = 10$	$\square + 1 = 10$
$\square = 7 + 3$	$4 + 6 = \square$
$2 + \square = 10$	$10 = \square + 3$
$\square + 3 = 10$	$\square + 6 = 10$
$\square = 5 + 5$	$9 + \square = 10$
$0 + \square = \square$	$3 + \square = \square$

Copyright © 2014 Symphony Learning LLC. Permission is granted to reproduce this sheet for classroom use.



Name: \_\_\_\_\_ Date: \_\_\_\_\_



Symbols

Complete each number fact.

$2 + 8 = \square$	$\square = 7 + 3$
$\square + 6 = 10$	$\square + 9 = 10$
$3 + 7 = \square$	$0 + 10 = \square$
$8 + \square = 10$	$10 = \square + 7$
$10 = \square + 1$	$\square + 4 = 10$
$5 + 5 = \square$	$9 + \square = 10$
$0 + \square = \square$	$1 + \square = \square$

Copyright © 2014 Symphony Learning LLC. Permission is granted to reproduce this sheet for classroom use.

