

Draw the missing dot card.

Example

$$\begin{array}{|c|} \hline \bullet \bullet \bullet \\ \hline \\ \hline \end{array} + \begin{array}{|c|} \hline \bullet \bullet \bullet \\ \bullet \bullet \\ \hline \bullet \bullet \\ \hline \end{array} = \begin{array}{|c|} \hline \textcircled{10} \\ \hline \\ \hline \end{array}$$

ANSWER KEY

1

$$\begin{array}{|c|} \hline \bullet \bullet \\ \hline \\ \hline \end{array} + \begin{array}{|c|} \hline \bullet \bullet \bullet \\ \bullet \bullet \\ \hline \bullet \bullet \bullet \\ \hline \end{array} = \begin{array}{|c|} \hline \textcircled{10} \\ \hline \\ \hline \end{array}$$

2

$$\begin{array}{|c|} \hline \textcircled{10} \\ \hline \\ \hline \end{array} = \begin{array}{|c|} \hline \bullet \\ \hline \\ \hline \end{array} + \begin{array}{|c|} \hline \bullet \bullet \bullet \\ \bullet \bullet \\ \hline \bullet \bullet \bullet \\ \hline \end{array}$$

3

$$\begin{array}{|c|} \hline \bullet \bullet \\ \bullet \bullet \\ \hline \\ \hline \end{array} + \begin{array}{|c|} \hline \bullet \bullet \bullet \\ \bullet \bullet \\ \hline \bullet \\ \hline \end{array} = \begin{array}{|c|} \hline \textcircled{10} \\ \hline \\ \hline \end{array}$$



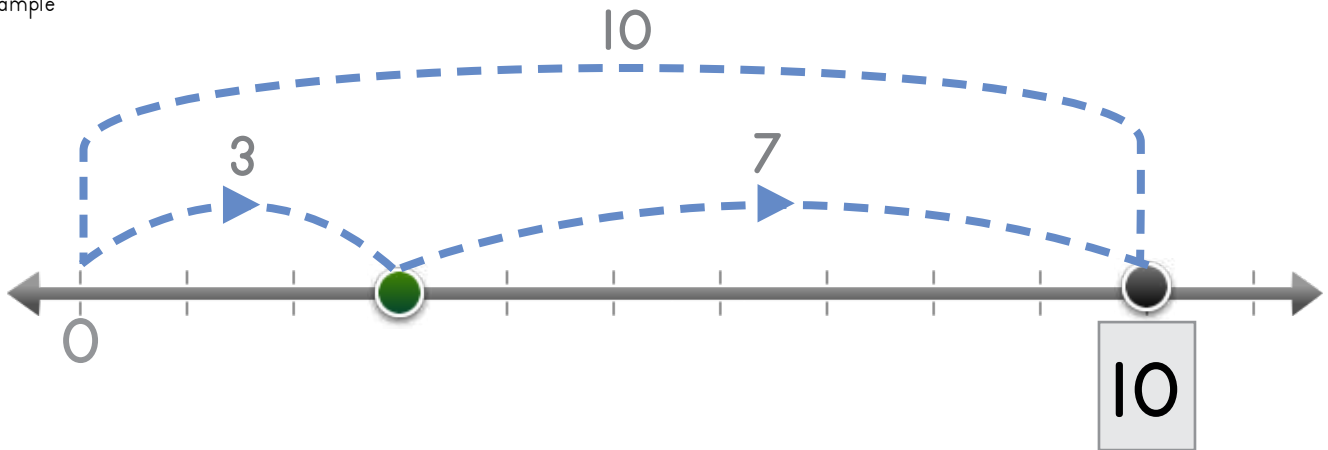
Name: _____ Date: _____

Draw the missing numbers.

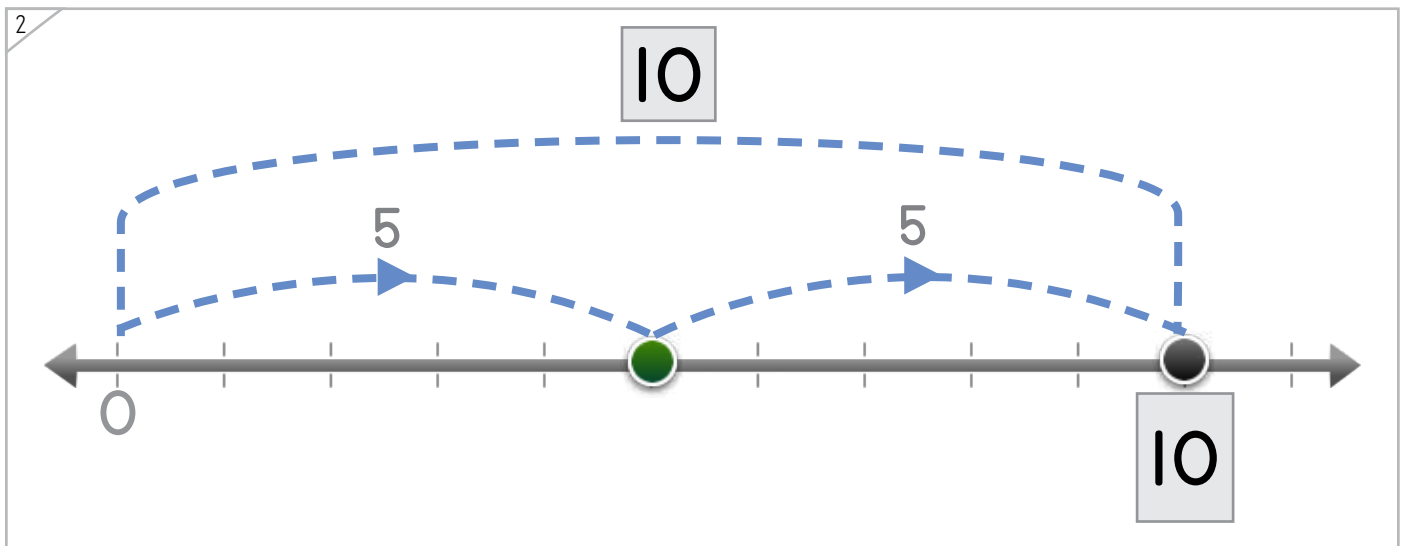
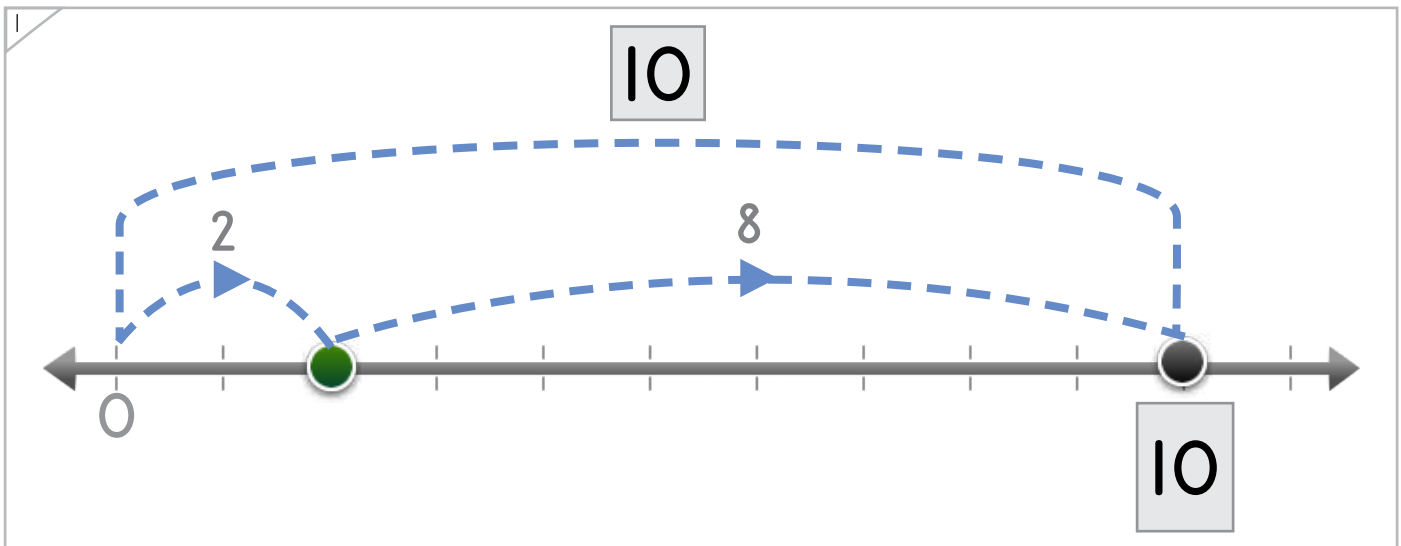


Manipulatives

Example



ANSWER KEY



Copyright © 2014 Symphony Learning LLC. Permission is granted to reproduce this sheet for classroom use.









Manipulatives

Draw the missing bar.

Example



ANSWER KEY

Copyright © 2014 Symphony Learning LLC. Permission is granted to reproduce this sheet for classroom use.





Draw dots and numbers to complete each number fact.

1

$$10 + 0 = 10$$

2

$$10 = 9 + 1$$

3

$$8 + 2 = 10$$

ANSWER KEY



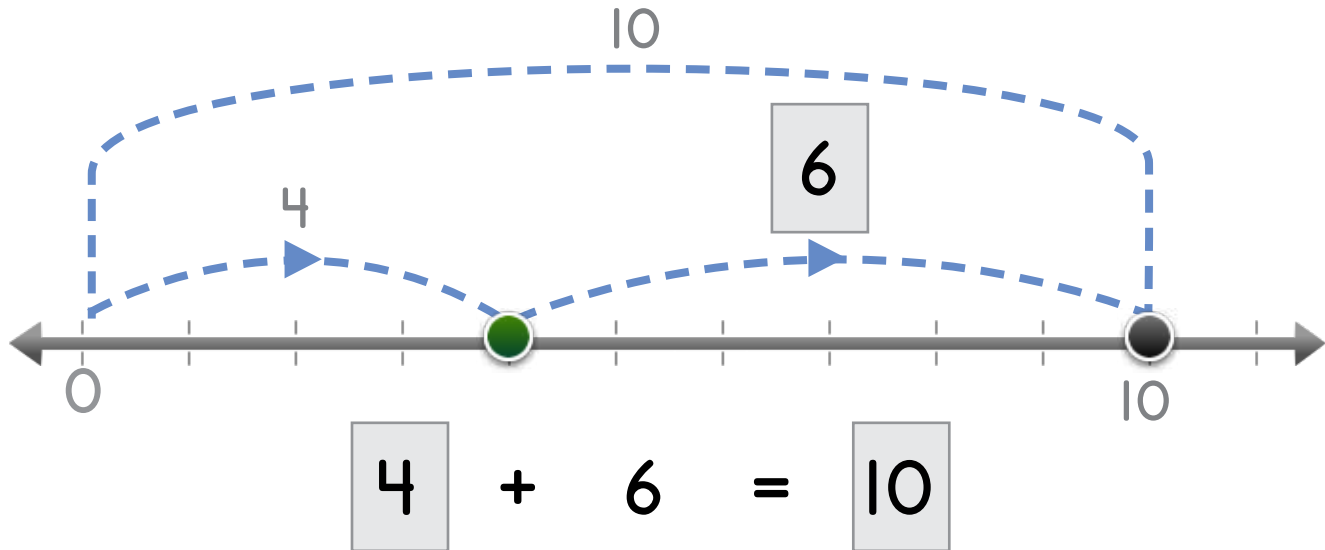
Name: _____ Date: _____



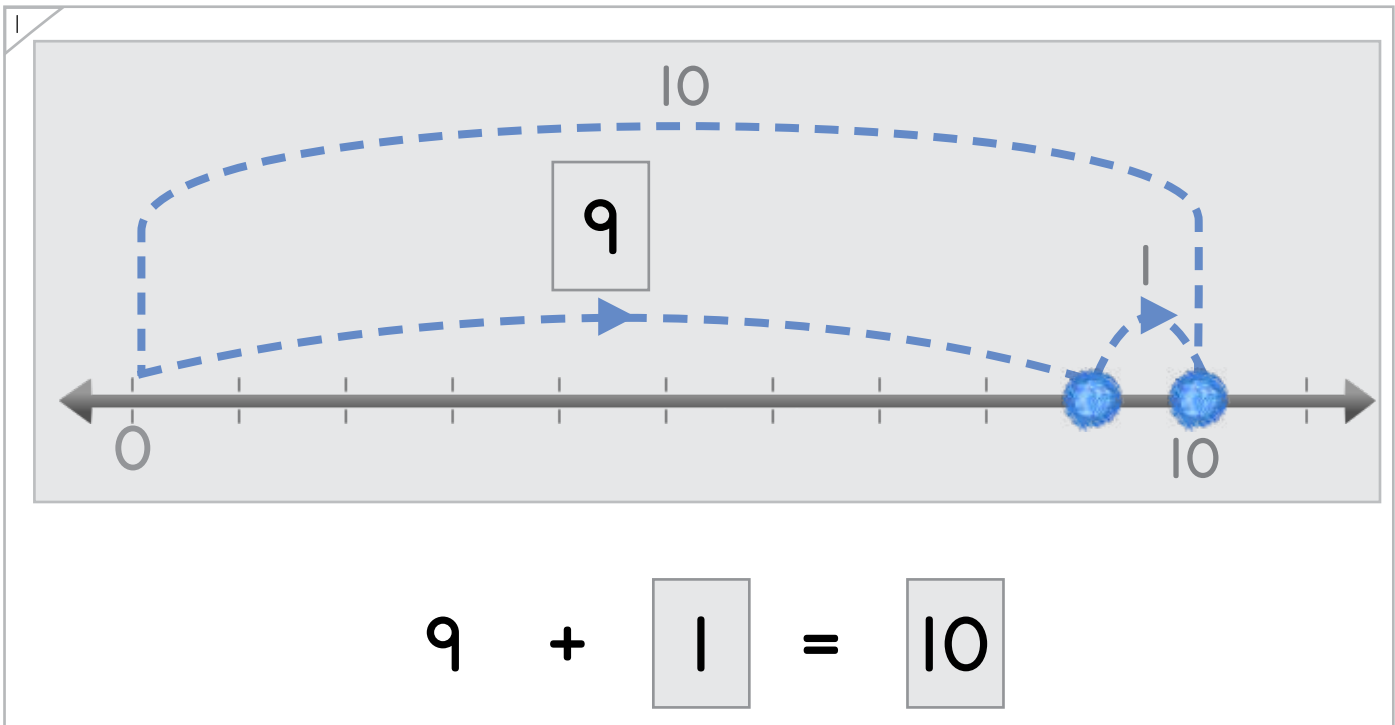
Manipulatives and Symbols

Draw the missing dots and numbers.

Example



ANSWER KEY



Copyright © 2014 Symphony Learning LLC. Permission is granted to reproduce this sheet for classroom use.





Draw the missing dots and numbers.

1

7 + 3 = 10

ANSWER KEY

2

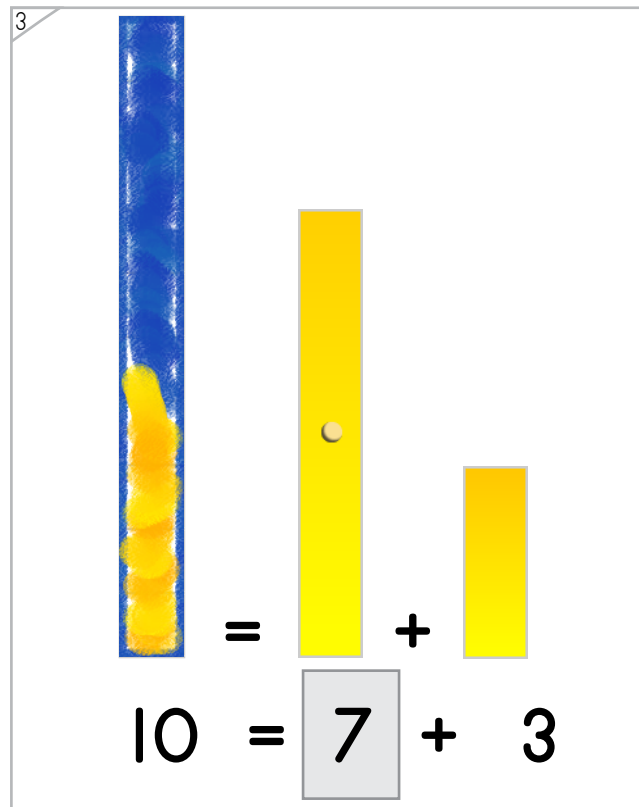
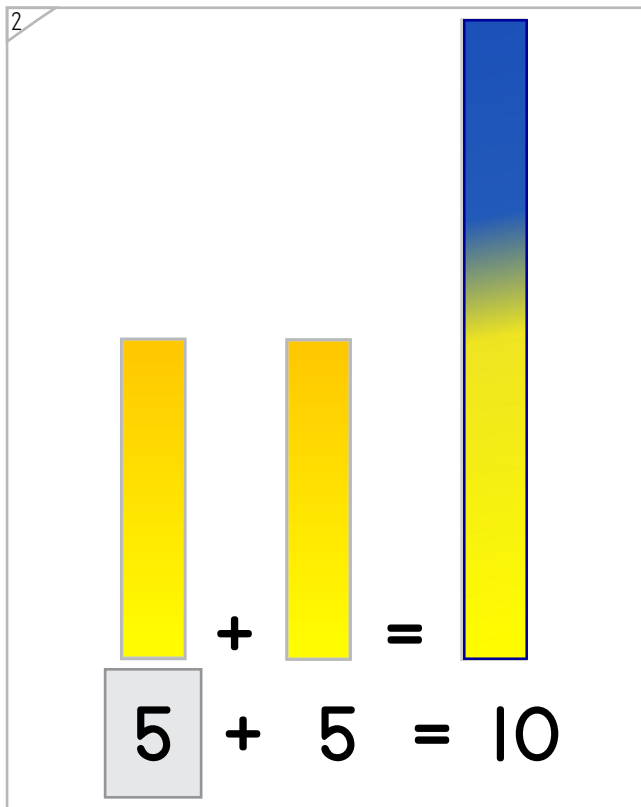
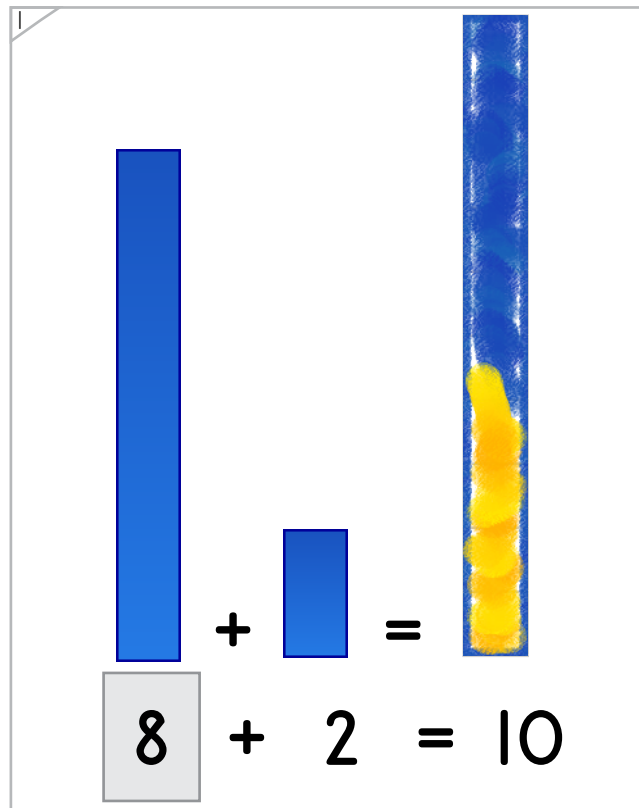
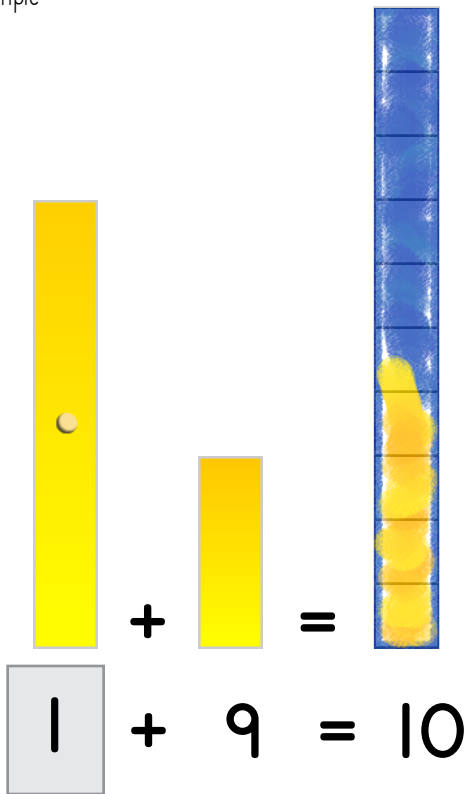
10 = 8 + 2





Draw bars and numbers to complete each number fact.

Example



ANSWER KEY

Copyright © 2014 Symphony Learning LLC. Permission is granted to reproduce this sheet for classroom use.



Name: _____ Date: _____



Symbols

Complete each number fact.

$1 + 9 = 10$	$10 + 0 = 10$
--------------	---------------

ANSWER KEY

$10 = 7 + 3$	$10 = 5 + 5$
--------------	--------------

$3 + 7 = 10$	$6 + 4 = 10$
--------------	--------------

$0 + 10 = 10$	$3 + 7 = 10$
---------------	--------------

multiple correct solutions are possible

multiple correct solutions are possible

Copyright © 2014 Symphony Learning LLC. Permission is granted to reproduce this sheet for classroom use.



Name: _____ Date: _____



Symbols

Complete each number fact.

$8 + 2 = 10$	$3 + 7 = 10$
$8 + 2 = 10$	$9 + 1 = 10$
$10 = 7 + 3$	$4 + 6 = 10$
$2 + 8 = 10$	$10 = 7 + 3$
$7 + 3 = 10$	$4 + 6 = 10$
$10 = 5 + 5$	$9 + 1 = 10$
$0 + 10 = 10$	$3 + 7 = 10$

multiple correct solutions are possible

multiple correct solutions are possible

ANSWER KEY

Copyright © 2014 Symphony Learning LLC. Permission is granted to reproduce this sheet for classroom use.



Name: _____ Date: _____



Symbols

Complete each number fact.

$2 + 8 = 10$	$10 = 7 + 3$
$4 + 6 = 10$	$1 + 9 = 10$
$3 + 7 = 10$	$0 + 10 = 10$
$8 + 2 = 10$	$10 = 3 + 7$
$10 = 9 + 1$	$6 + 4 = 10$
$5 + 5 = 10$	$9 + 1 = 10$
$0 + 10 = 10$	$1 + 9 = 10$

multiple correct
solutions are possible

multiple correct
solutions are possible

ANSWER KEY

Copyright © 2014 Symphony Learning LLC. Permission is granted to reproduce this sheet for classroom use.

