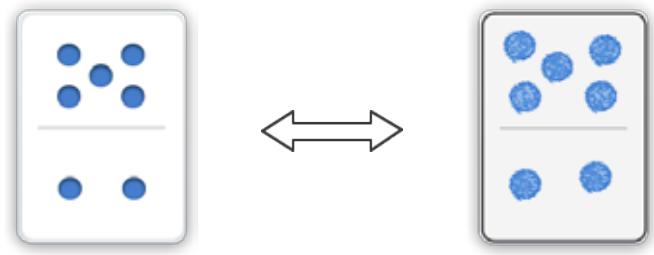


Name: \_\_\_\_\_ Date: \_\_\_\_\_



Draw a dot card that is EQUAL.

Example



ANSWER KEY

1

2

3

Copyright © 2014 Symphony Learning LLC. Permission is granted to reproduce this sheet for classroom use.



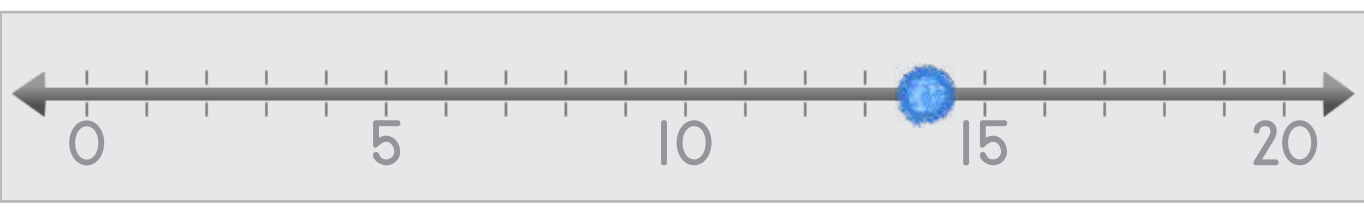
Name: \_\_\_\_\_ Date: \_\_\_\_\_



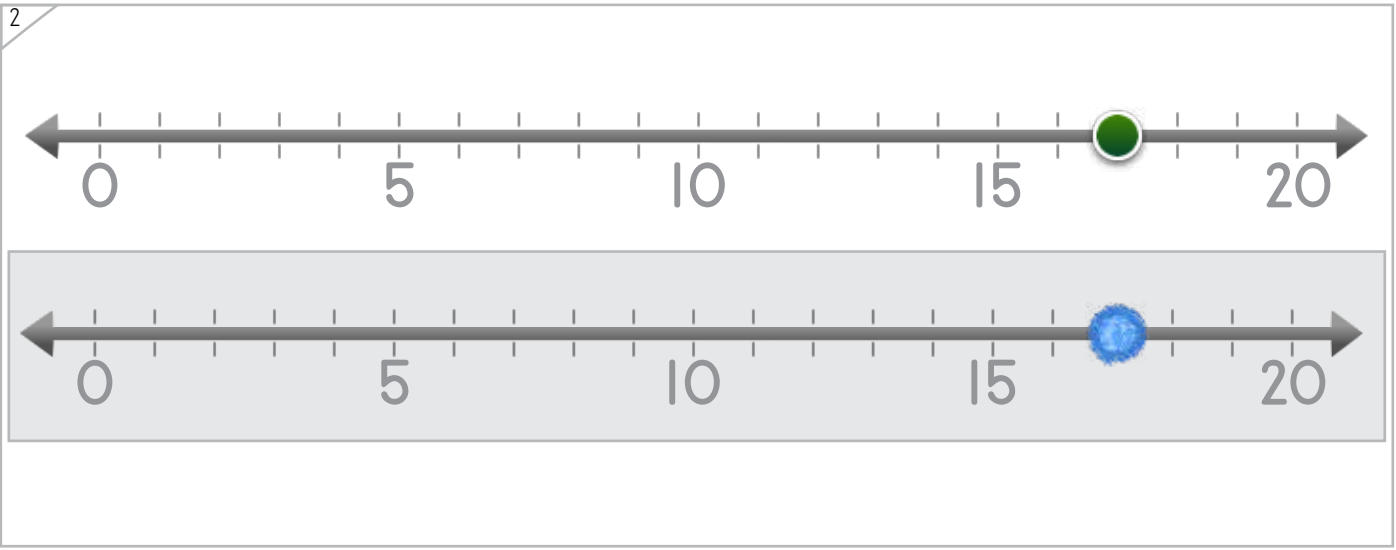
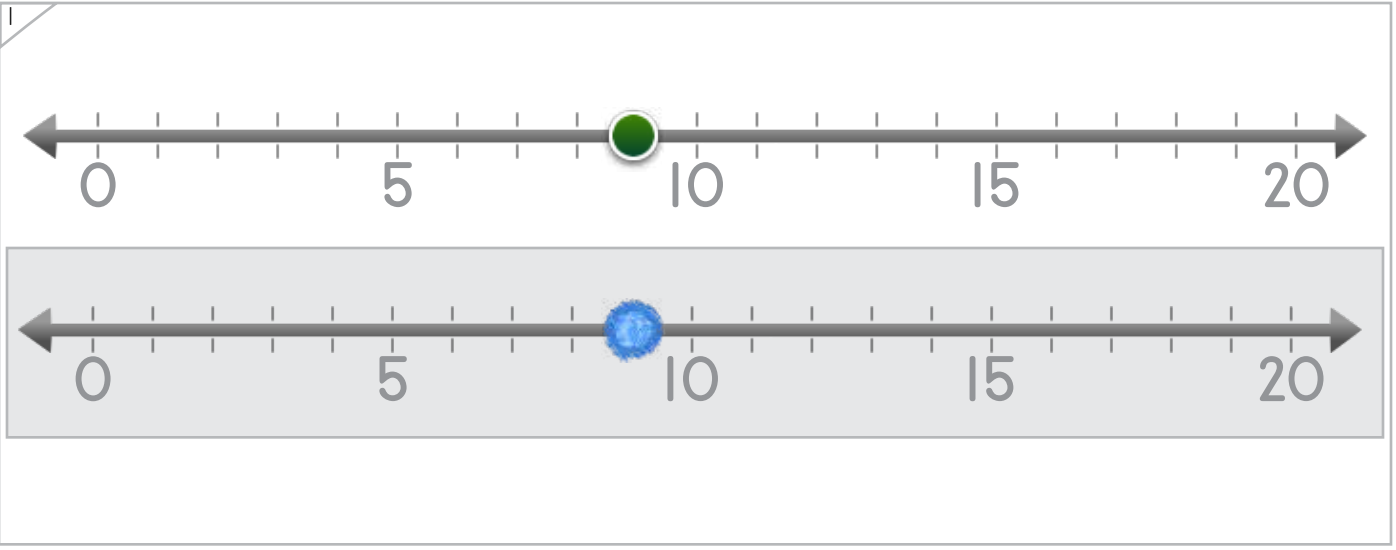
Manipulatives

Draw a dot on the number line that is the same.

Example



ANSWER KEY



Copyright © 2014 Symphony Learning LLC. Permission is granted to reproduce this sheet for classroom use.

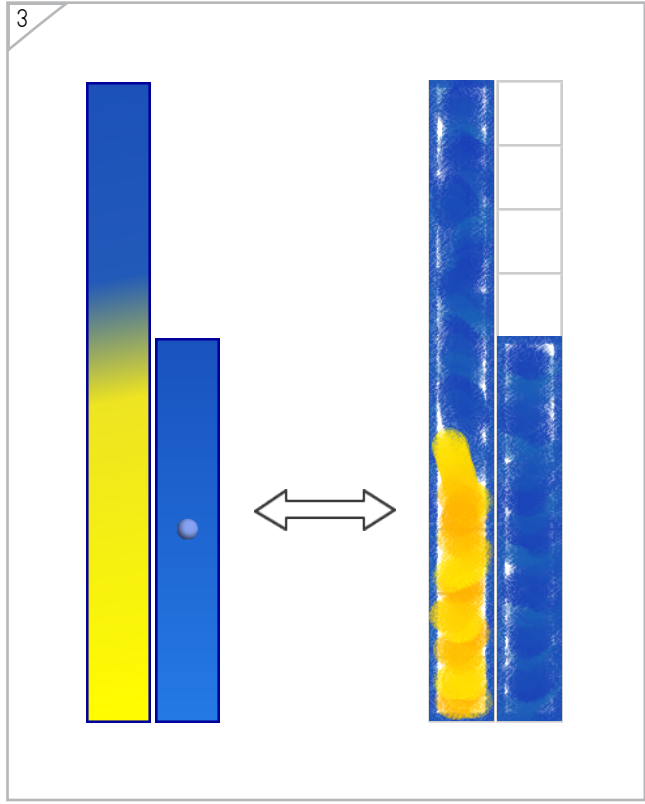
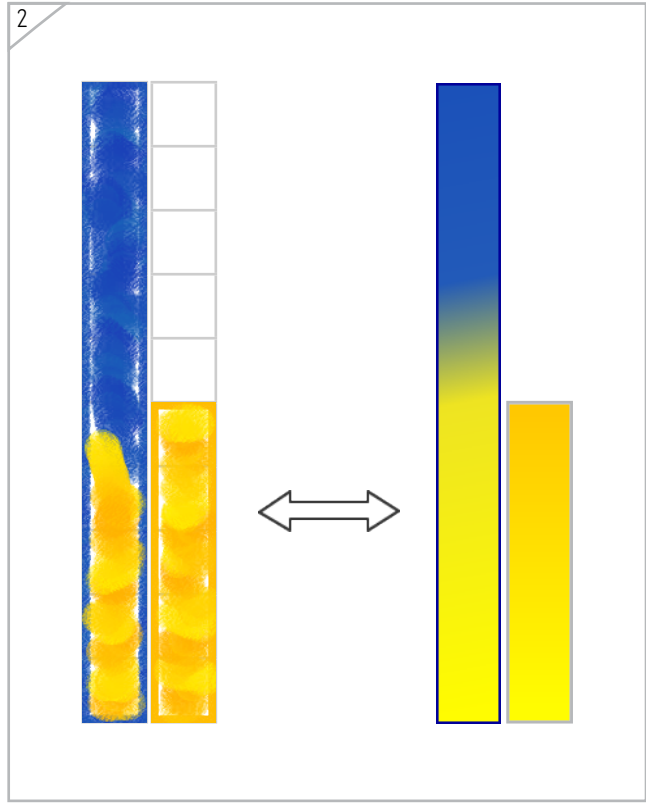
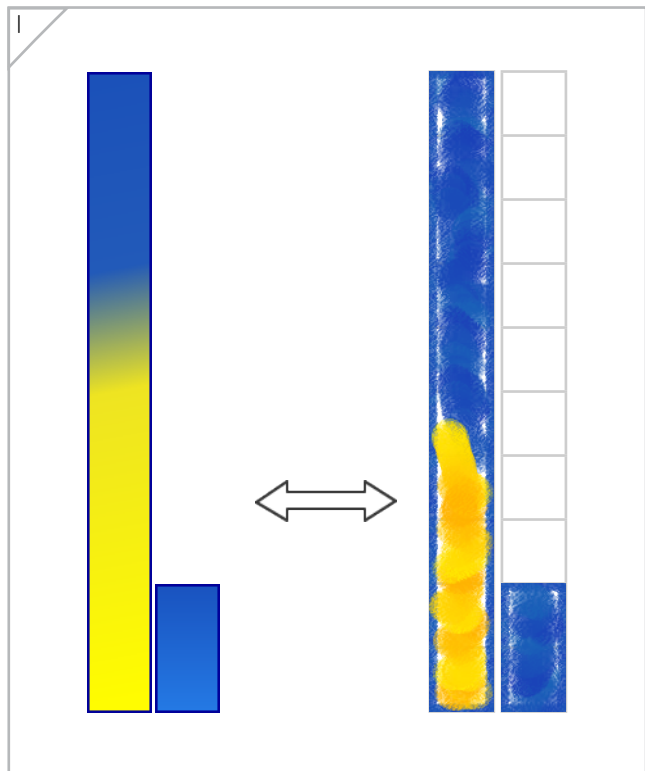
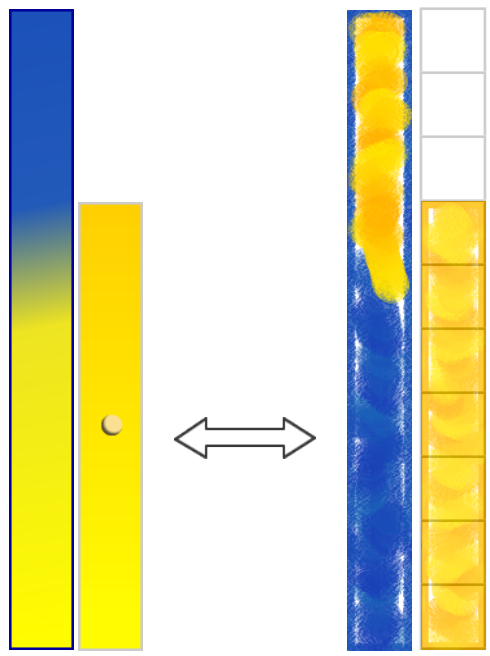




Manipulatives

# Draw bars that are EQUAL.

Example




ANSWER KEY

Copyright © 2014 Symphony Learning LLC. Permission is granted to reproduce this sheet for classroom use.



Name: \_\_\_\_\_ Date: \_\_\_\_\_



Draw numbers and dot cards to match.

Example

17 = 17

1

19 = 19

2

13 = 13

ANSWER KEY

Copyright © 2014 Symphony Learning LLC. Permission is granted to reproduce this sheet for classroom use.



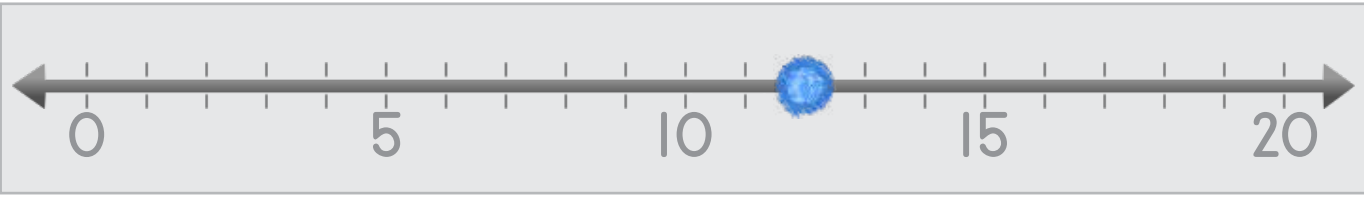
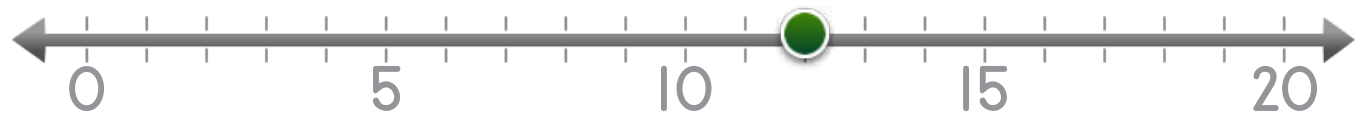
Name: \_\_\_\_\_ Date: \_\_\_\_\_



Manipulatives and Symbols

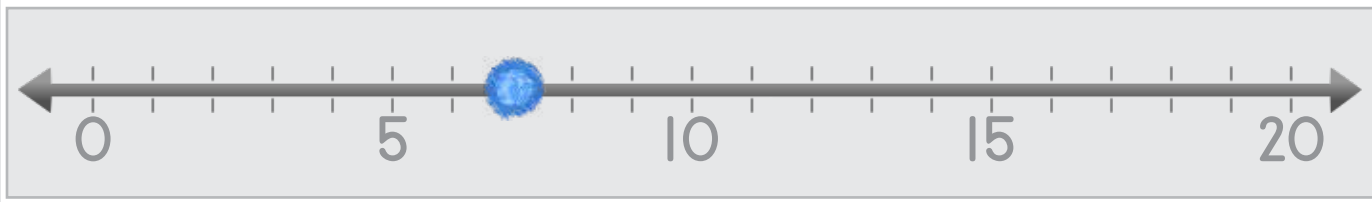
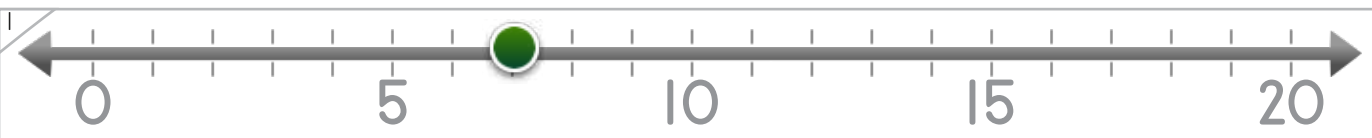
Draw numbers and dots on the number line to match.

Example



$$12 = \boxed{12}$$

ANSWER KEY



$$7 = \boxed{7}$$

Copyright © 2014 Symphony Learning LLC. Permission is granted to reproduce this sheet for classroom use.



Name: \_\_\_\_\_ Date: \_\_\_\_\_



Draw numbers and dots on the number line to match.

Manipulatives and Symbols

1

$16 = \boxed{16}$

ANSWER KEY

2

$\boxed{8} = 8$

Copyright © 2014 Symphony Learning LLC. Permission is granted to reproduce this sheet for classroom use.



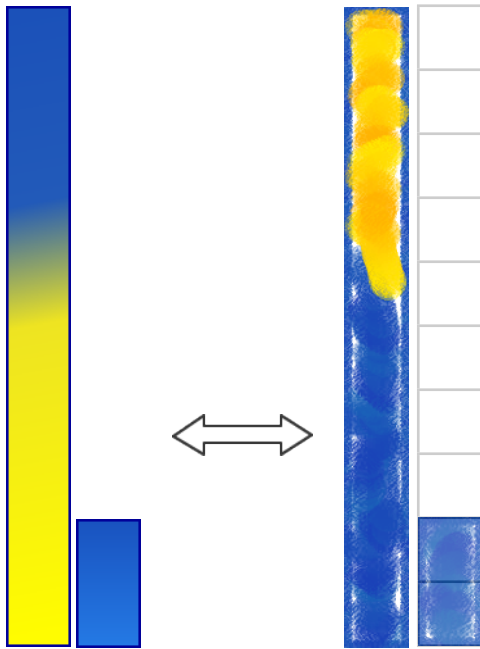
Name: \_\_\_\_\_ Date: \_\_\_\_\_



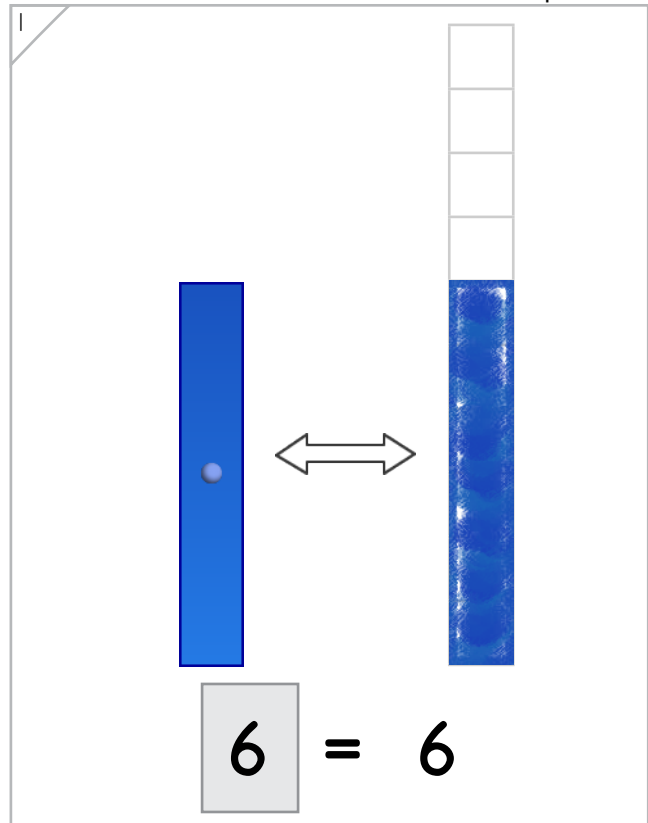
Manipulatives and Symbols

Draw bar and numbers that are equal.

Example



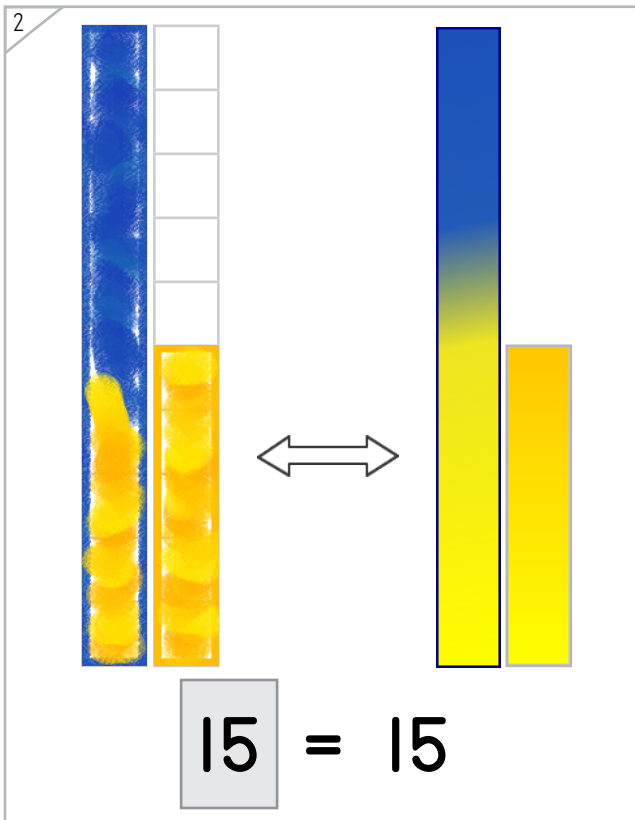
$$12 = 12$$



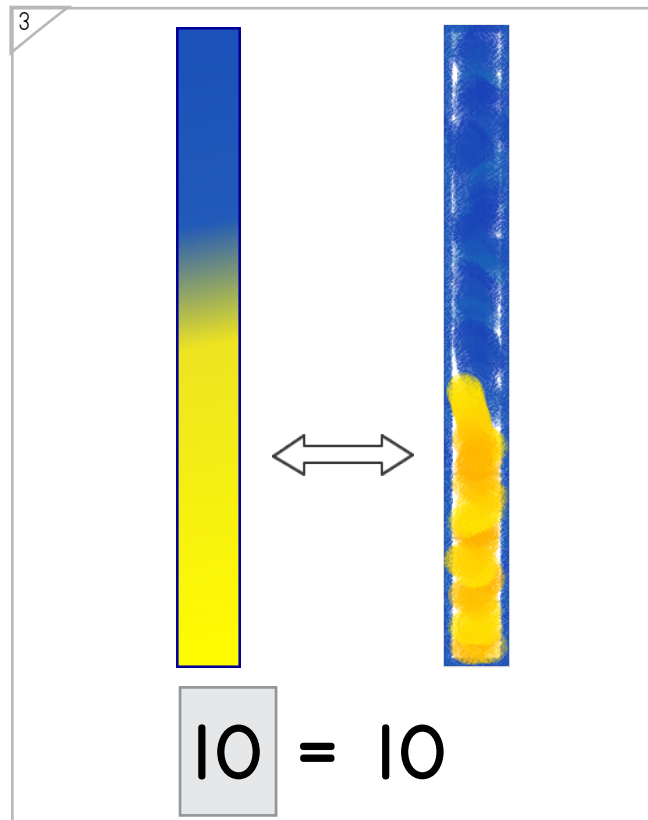
$$6 = 6$$

ANSWER KEY

Copyright © 2014 Symphony Learning LLC. Permission is granted to reproduce this sheet for classroom use.



$$15 = 15$$



$$10 = 10$$



Name: \_\_\_\_\_ Date: \_\_\_\_\_



Symbols

Fill in the boxes to make each number comparison true.

12 = 12	9 = 9
16 = 16	4 = 4
14 = 14	10 = 10
13 = 13	5 = 5
7 = 7	0 = 0
11 = 11	18 = 18
3 = 3	15 = 15

multiple correct  
solutions are possible

multiple correct  
solutions are possible

ANSWER KEY

Copyright © 2014 Symphony Learning LLC. Permission is granted to reproduce this sheet for classroom use.



Name: \_\_\_\_\_ Date: \_\_\_\_\_



Symbols

Fill in the boxes to make each number comparison true.

14 = 14	7 = 7
10 = 10	13 = 13
15 = 15	1 = 1
18 = 18	2 = 2
17 = 17	0 = 0
11 = 11	19 = 19
6 = 6	12 = 12

multiple correct solutions are possible


multiple correct solutions are possible

ANSWER KEY

Copyright © 2014 Symphony Learning LLC. Permission is granted to reproduce this sheet for classroom use.



Name: \_\_\_\_\_ Date: \_\_\_\_\_

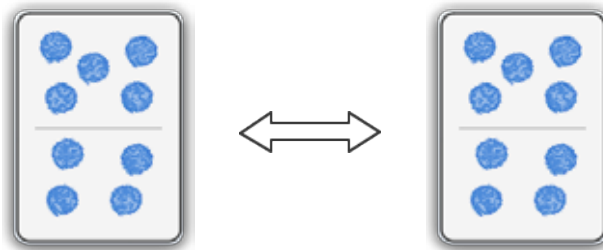


Read the story.

Jorgé read 9 pages in a book.  
Beth read 9 pages in a book.

ANSWER KEY

Draw dot cards to make a model for the story.



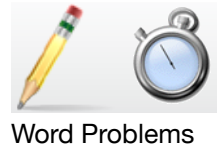
Write a number comparison that matches your model.

$$\boxed{9} = \boxed{9}$$

Copyright © 2014 Symphony Learning LLC. Permission is granted to reproduce this sheet for classroom use.



Name: \_\_\_\_\_ Date: \_\_\_\_\_

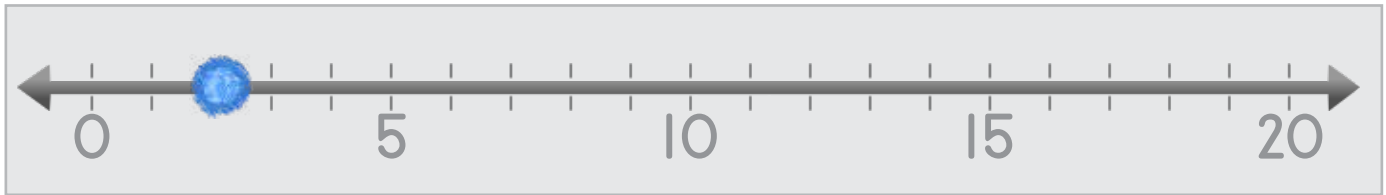
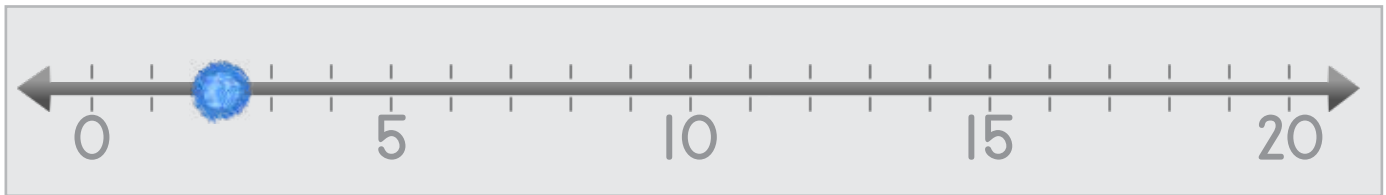


Read the story.

Jade ate 2 oranges for snack.  
George ate 2 oranges for snack.

ANSWER KEY

Draw dots to make a model for the story.



Write a number comparison that matches your model.

$$\boxed{2} = \boxed{2}$$

Copyright © 2014 Symphony Learning LLC. Permission is granted to reproduce this sheet for classroom use.

