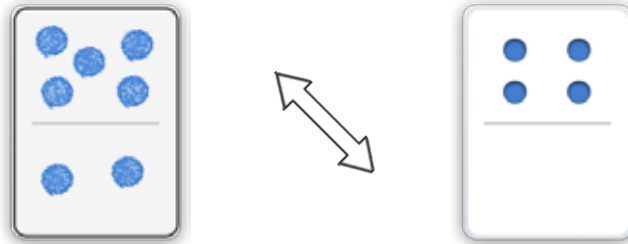




Draw a dot card that is GREATER THAN.

Example



1

multiple correct solutions are possible

2

multiple correct solutions are possible

3

multiple correct solutions are possible

ANSWER KEY

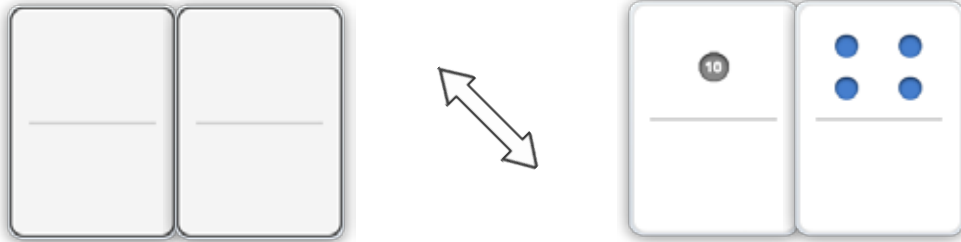
Copyright © 2014 Symphony Learning LLC. Permission is granted to reproduce this sheet for classroom use.





Draw dot cards that are GREATER THAN.

Example



1

multiple correct solutions are possible

2

multiple correct solutions are possible

3

multiple correct solutions are possible

ANSWER KEY

Copyright © 2014 Symphony Learning LLC. Permission is granted to reproduce this sheet for classroom use.




Name: _____ Date: _____

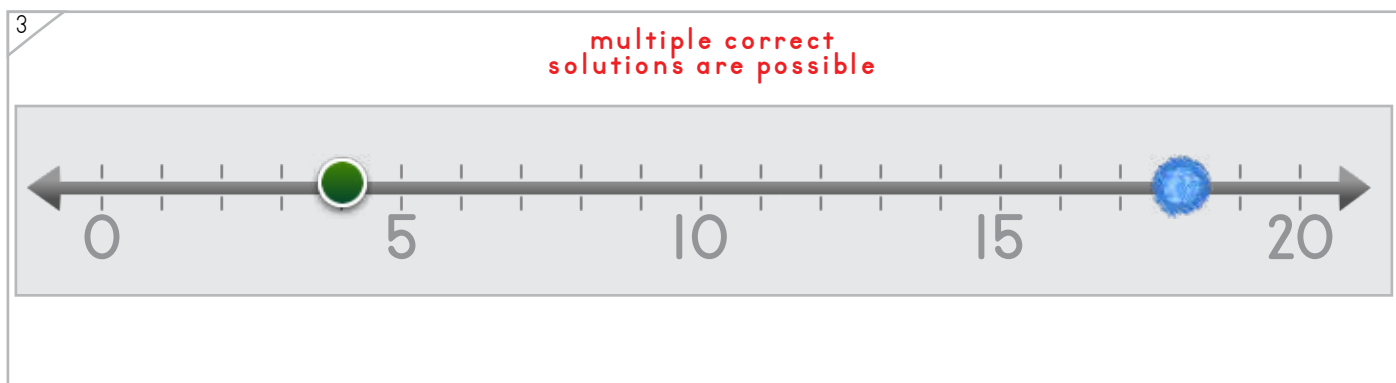
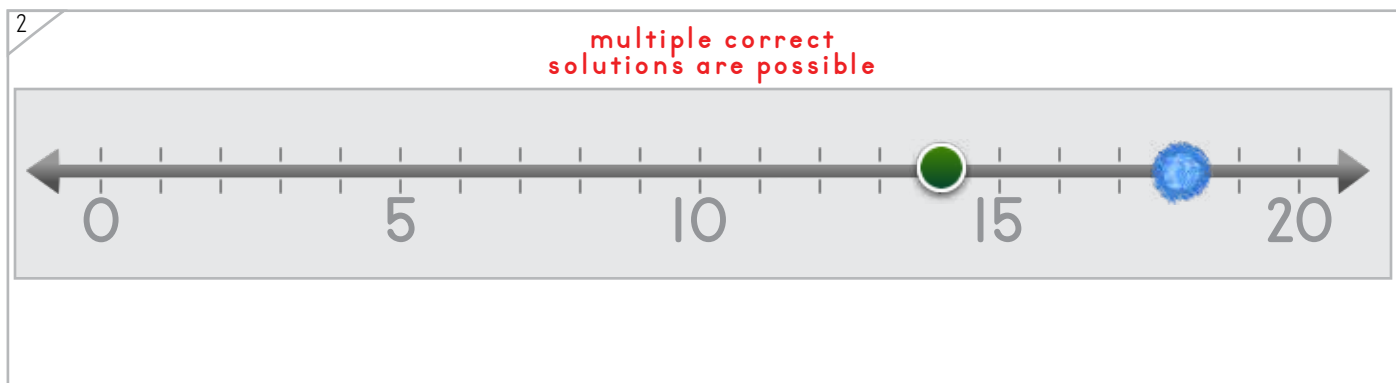
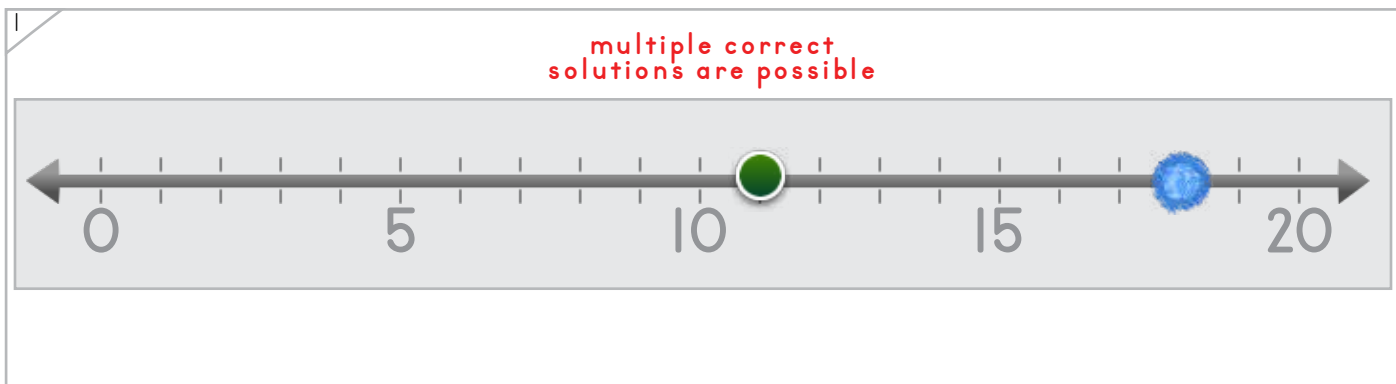


Draw a dot on the number line that is HIGHER.

Example



ANSWER KEY



Copyright © 2014 Symphony Learning LLC. Permission is granted to reproduce this sheet for classroom use.



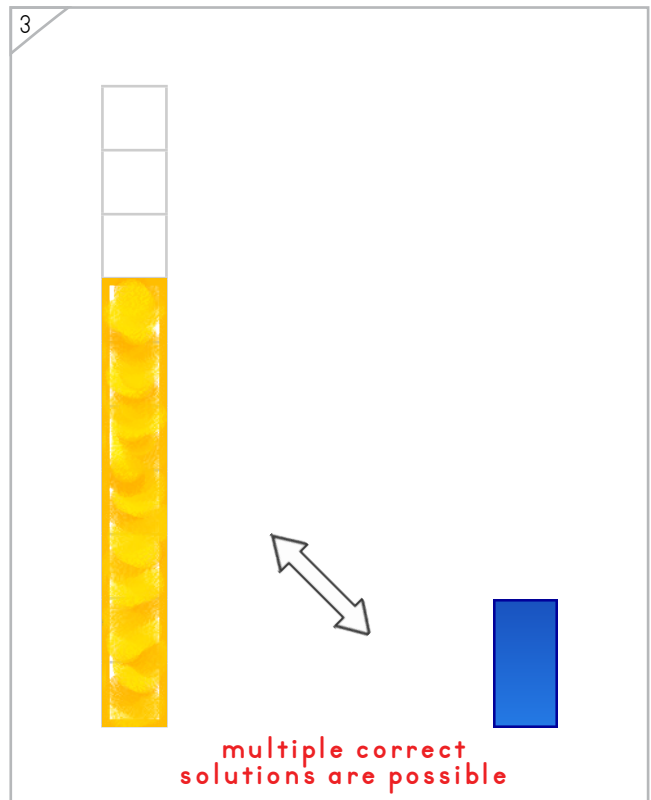
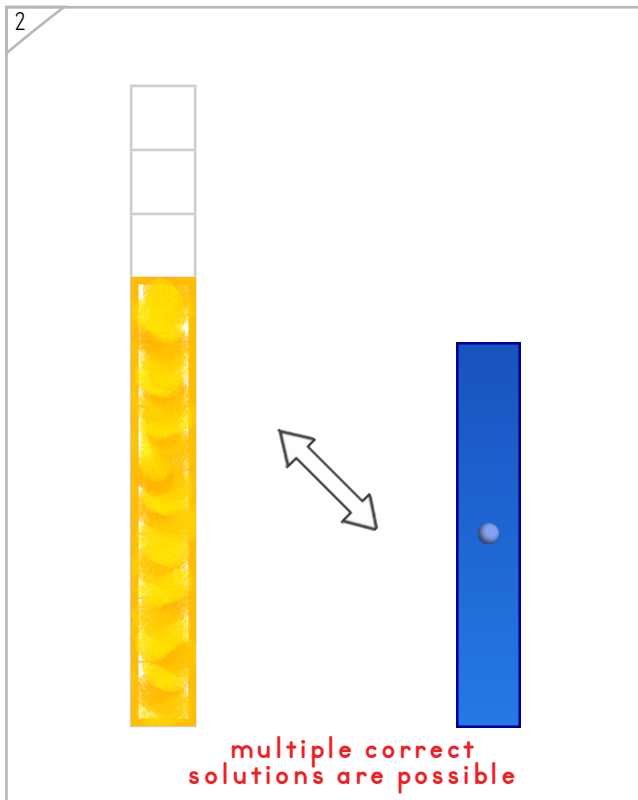
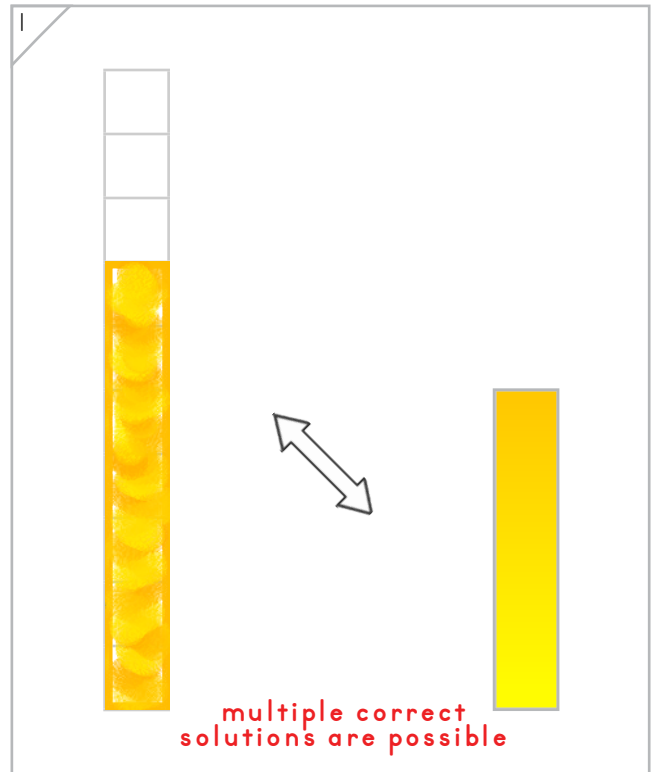
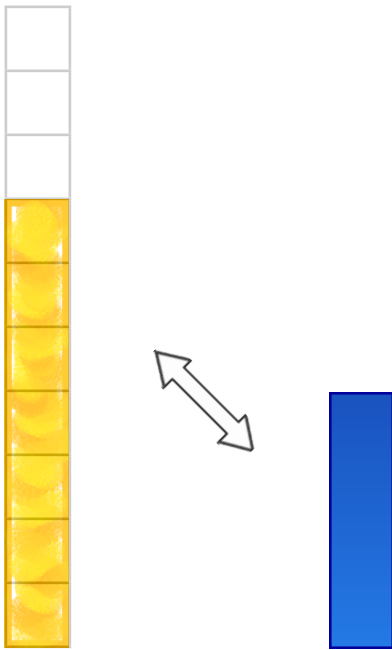
Name: _____ Date: _____



Manipulatives

Draw a bar that is GREATER THAN.


Example



ANSWER KEY

Copyright © 2014 Symphony Learning LLC. Permission is granted to reproduce this sheet for classroom use.





Draw numbers and dot cards to match.

1

$7 > 3$

2

$8 > 4$

3

$8 > 5$


4

$5 > 2$

ANSWER KEY

Copyright © 2014 Symphony Learning LLC. Permission is granted to reproduce this sheet for classroom use.





Draw numbers and dot cards to match.

1

$17 > 13$

ANSWER KEY

2

$16 > 12$

3

$19 > 11$

Copyright © 2014 Symphony Learning LLC. Permission is granted to reproduce this sheet for classroom use.



Name: _____ Date: _____



Manipulatives and Symbols

Draw numbers and dots on the number line to match.

1

0 5 10 15 20

$14 > 6$

ANSWER KEY

2

0 5 10 15 20

9 > 19

3

0 5 10 15 20

$8 > 2$

Copyright © 2014 Symphony Learning LLC. Permission is granted to reproduce this sheet for classroom use.



Draw bars and numbers to match.



Manipulatives and Symbols

ANSWER KEY

1

8 > 2

2

6 > 3

3

16 > 12

4

18 > 12

multiple correct solutions are possible

Copyright © 2014 Symphony Learning LLC. Permission is granted to reproduce this sheet for classroom use.



Name: _____ Date: _____



Symbols

Fill in the boxes to make each number comparison true.

$3 > 0$ multiple correct solutions are possible	$9 > 7$ multiple correct solutions are possible
$8 > 6$ multiple correct solutions are possible	$7 > 4$ multiple correct solutions are possible
$5 = 5$	$7 > 3$ multiple correct solutions are possible
$1 > 0$ multiple correct solutions are possible	$5 = 5$
$8 > 7$ multiple correct solutions are possible	$4 = 4$
$2 = 2$	$8 > 7$ multiple correct solutions are possible
$3 < 9$ multiple correct solutions are possible	$5 = 5$ multiple correct solutions are possible

ANSWER KEY

Copyright © 2014 Symphony Learning LLC. Permission is granted to reproduce this sheet for classroom use.





Symbols

Fill in the boxes to make each number comparison true.


$13 > 10$ multiple correct solutions are possible	$19 > 17$ multiple correct solutions are possible
$19 > 16$ multiple correct solutions are possible	$17 > 14$ multiple correct solutions are possible
$15 = 15$	$14 > 13$ multiple correct solutions are possible
$11 > 10$ multiple correct solutions are possible	$15 = 15$
$19 > 17$ multiple correct solutions are possible	$14 = 14$
$12 = 12$	$18 > 17$ multiple correct solutions are possible
$13 = 13$ multiple correct solutions are possible	$15 = 15$ multiple correct solutions are possible

ANSWER KEY

Copyright © 2014 Symphony Learning LLC. Permission is granted to reproduce this sheet for classroom use.



Name: _____ Date: _____

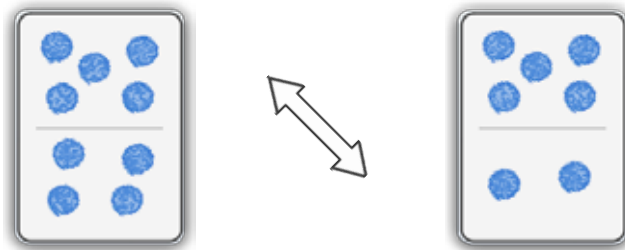


Read the story.

Jackson walks 7 blocks on his way to school.
Jordan walks 9 blocks on his way to school.

ANSWER KEY

Draw dot cards to make a model for the story.




Write a number comparison that matches your model.

$$\boxed{9} > \boxed{7}$$

Copyright © 2014 Symphony Learning LLC. Permission is granted to reproduce this sheet for classroom use.



Name: _____ Date: _____

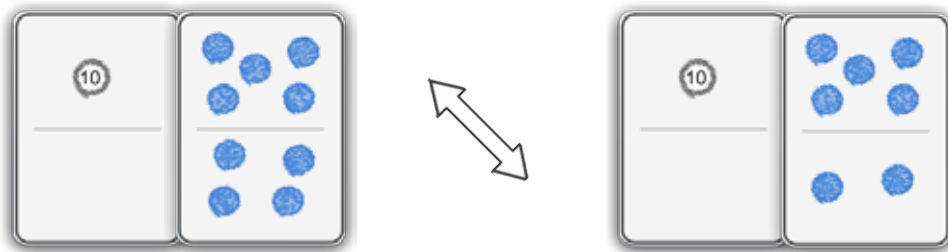


Read the story.

Jackson has a dog that weighs 17 pounds.
Jordan has a dog that weighs 19 pounds.

ANSWER KEY

Draw dot cards to make a model for the story.




Write a number comparison that matches your model.

$$\boxed{19} > \boxed{17}$$

Copyright © 2014 Symphony Learning LLC. Permission is granted to reproduce this sheet for classroom use.



Name: _____ Date: _____

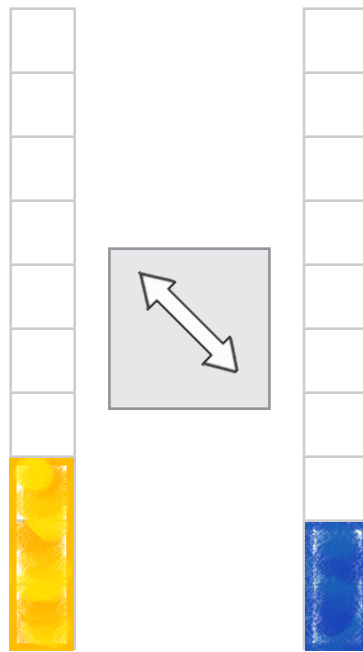


Read the story.

Jennifer has 3 sisters. Victor has 2 sisters.

ANSWER KEY

Draw bars and an arrow to make a model for the story.




Write a number comparison that matches your model.

$$3 > 2$$

Copyright © 2014 Symphony Learning LLC. Permission is granted to reproduce this sheet for classroom use.



Name: _____ Date: _____

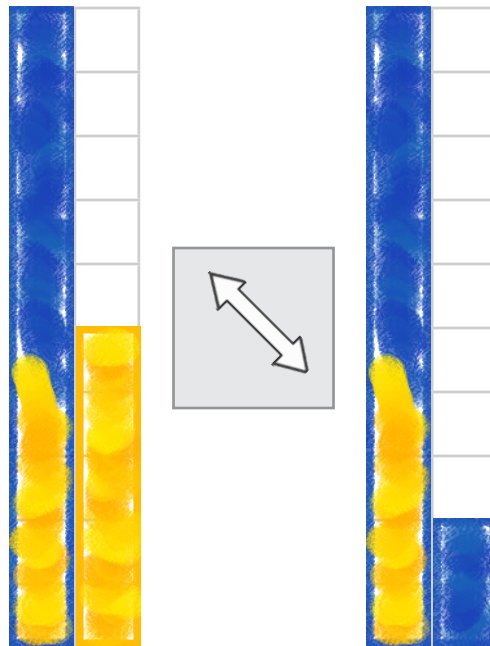


Read the story.

Barry has 15 playing cards.
Vincent has 12 playing cards.

ANSWER KEY

Draw bars and an arrow to make a model for the story.



Write a number comparison that matches your model.

$$15 > 12$$

Copyright © 2014 Symphony Learning LLC. Permission is granted to reproduce this sheet for classroom use.

