

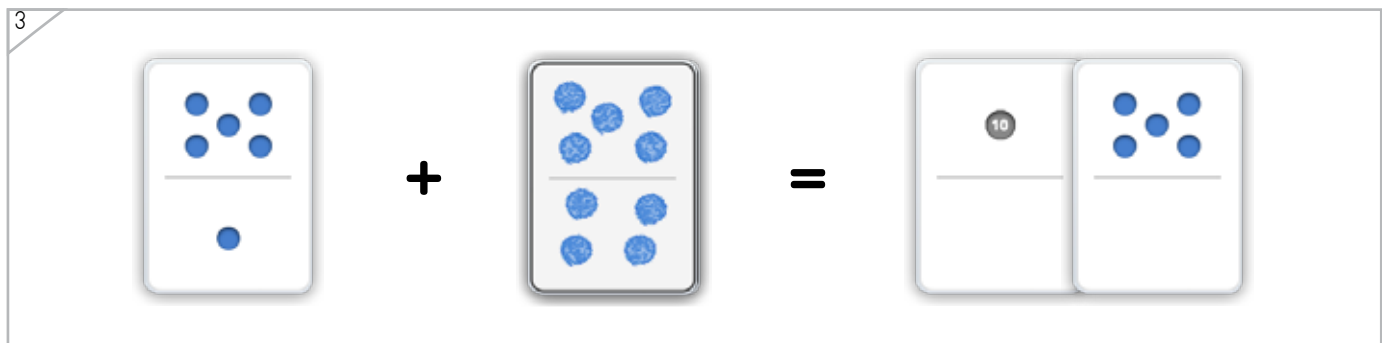
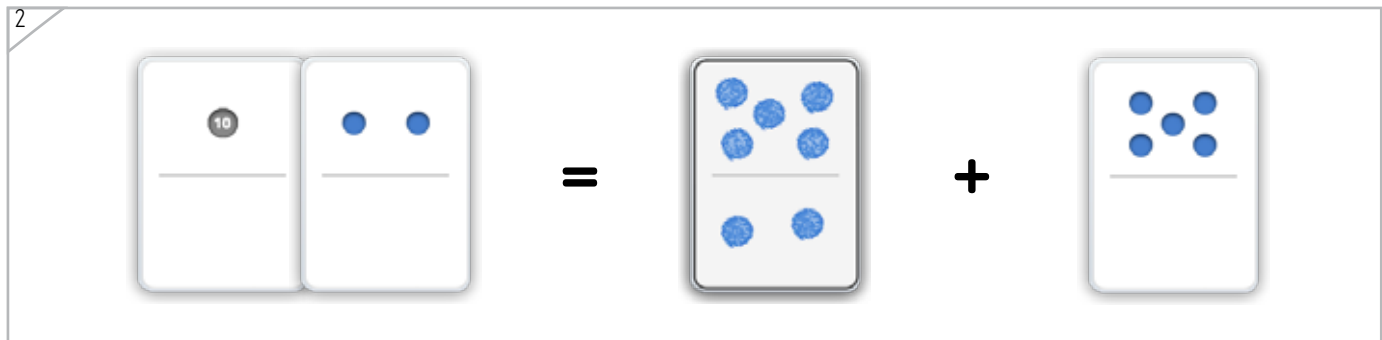
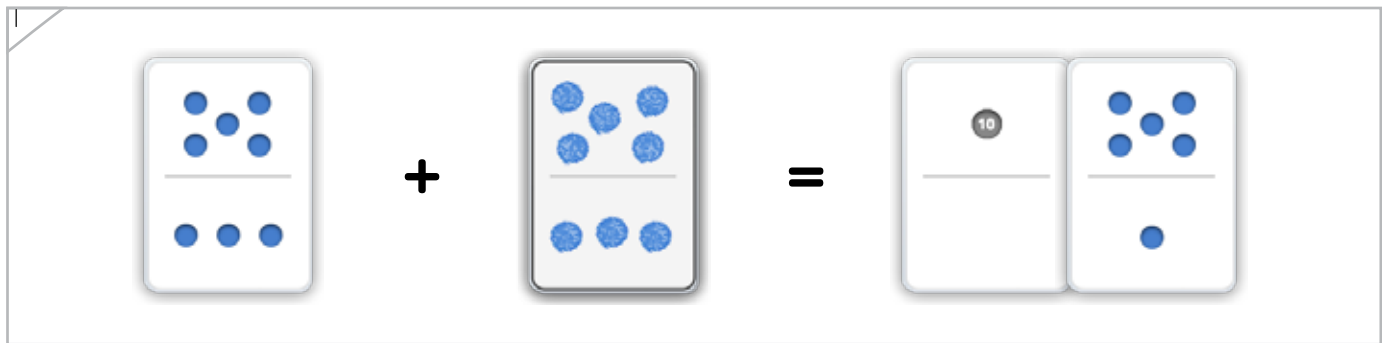


Draw the missing dot card.

Example



These cards have the same number of dots... as these cards.




ANSWER KEY

Copyright © 2014 Symphony Learning LLC. Permission is granted to reproduce this sheet for classroom use.

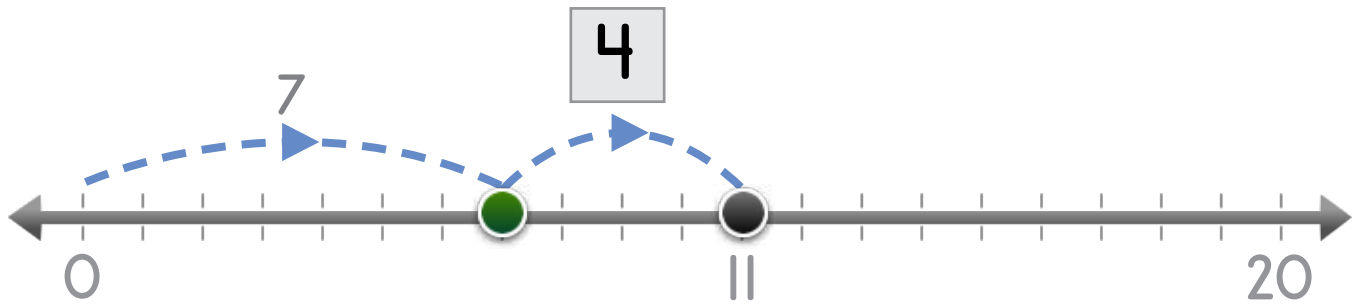


Name: _____ Date: _____

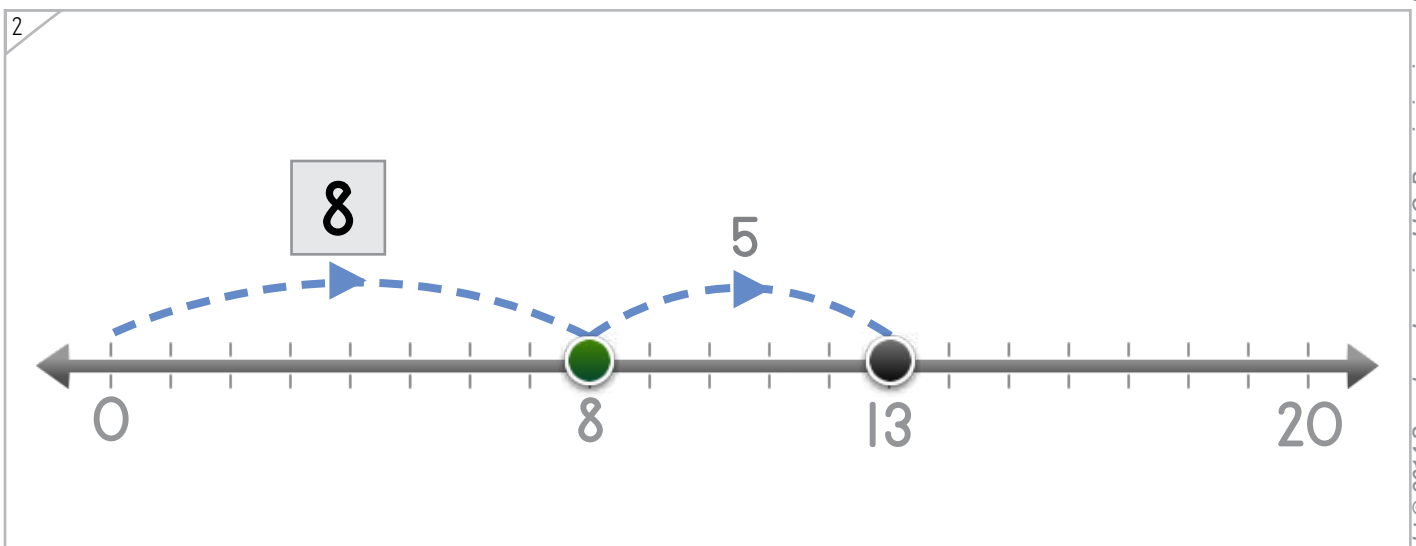
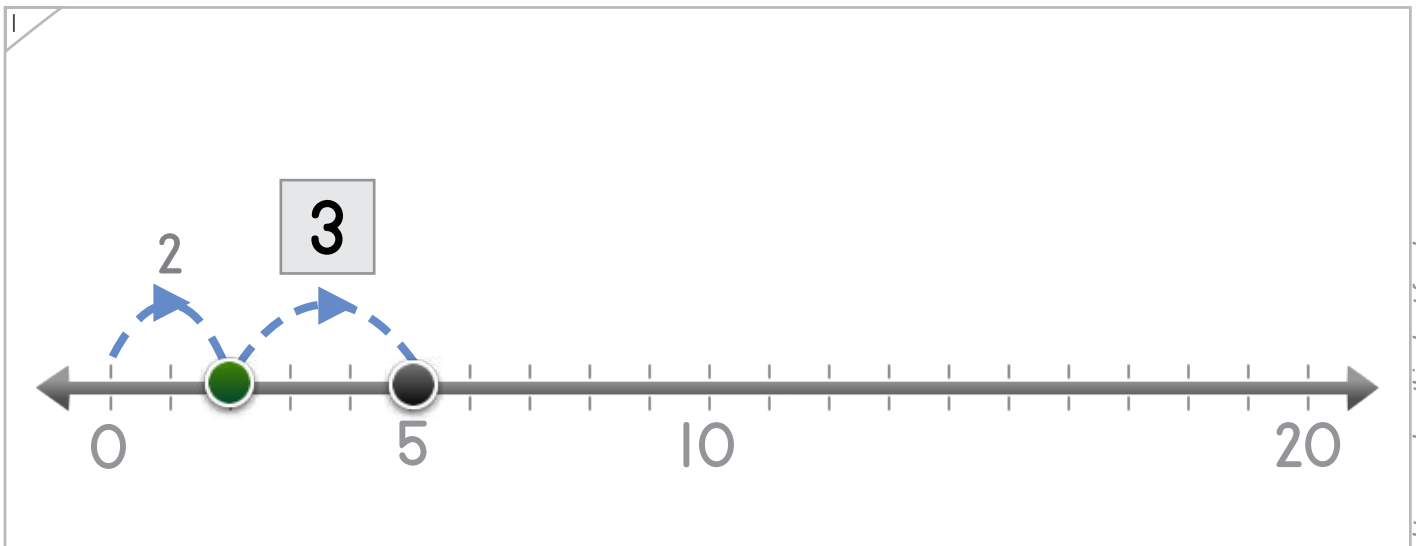


How many spaces does the dot jump?

Example



ANSWER KEY



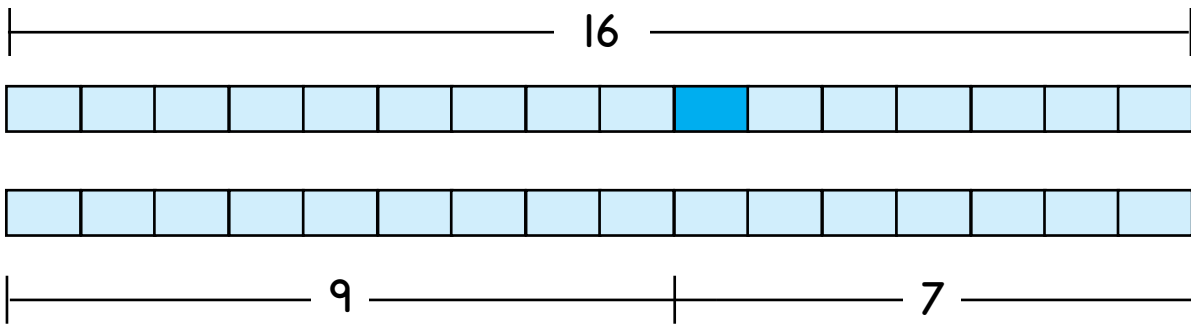
Copyright © 2014 Symphony Learning LLC. Permission is granted to reproduce this sheet for classroom use.



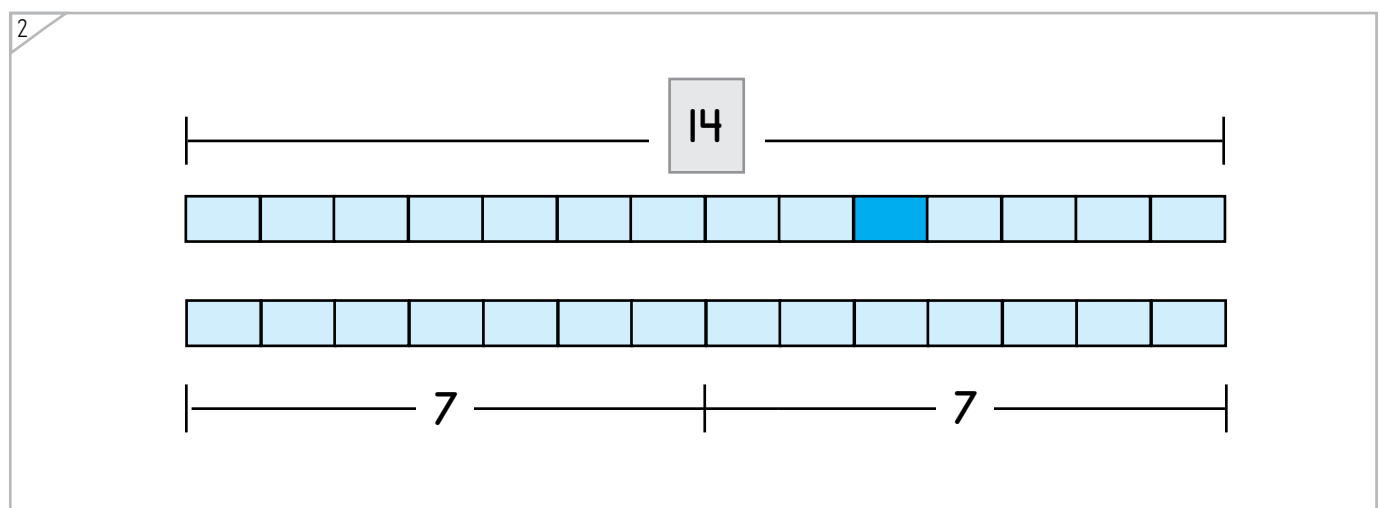
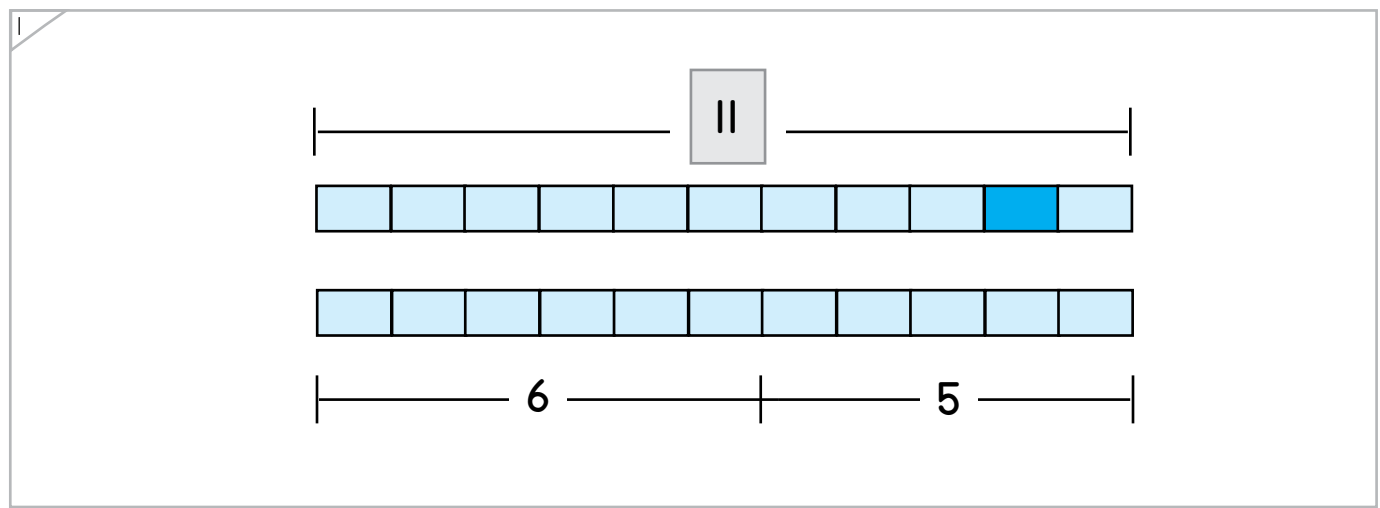
Name: _____ Date: _____



Add numbers to complete the bar models.



ANSWER KEY



Copyright © 2014 Symphony Learning LLC. Permission is granted to reproduce this sheet for classroom use.





Draw numbers and dot cards to match.

1

$7 + 2 = 9$

ANSWER KEY

2

$9 + 4 = 13$


3

$12 = 2 + 10$



Name: _____ Date: _____

Draw numbers and jumping dots on the number line to complete each number fact.



Manipulatives and Symbols

1

$6 + 5 = 11$

ANSWER KEY

2

$13 = 5 + 8$


3

$8 + 8 = 16$

Copyright © 2014 Symphony Learning LLC. Permission is granted to reproduce this sheet for classroom use.



Name: _____ Date: _____



Manipulatives and Symbols

Add numbers to complete the bar models.

1

$8 + 5 = 13$

ANSWER KEY

2

$8 + 4 = 12$

Copyright © 2014 Symphony Learning LLC. Permission is granted to reproduce this sheet for classroom use.



Name: _____ Date: _____



Symbols

Complete each number fact.

$10 + 5 = 15$	$8 + 7 = 15$
$5 = 4 + 1$	$1 + 9 = 10$
$0 + 10 = 10$	$6 + 8 = 14$
$5 + 5 = 10$	$14 = 4 + 10$
$13 + 0 = 13$	$1 + 7 = 8$
$8 + 1 = 9$	$15 = 14 + 1$
$1 + 18 = 19$	$3 + 14 = 17$

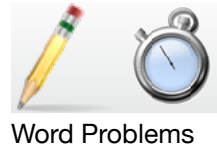
multiple correct
solutions are possible

multiple correct
solutions are possible

ANSWER KEY

Copyright © 2014 Symphony Learning LLC. Permission is granted to reproduce this sheet for classroom use.





Read the story.

ANSWER KEY

George's baby sister weighs 4 kilograms.
 How many more kilograms does his sister need to grow to weigh 7 kilograms?

Draw dot cards to make a model for the story.



Write a number fact that matches your model.

$$\boxed{4} + \boxed{3} = \boxed{7}$$

Answer: 3 kilograms



Name: _____ Date: _____

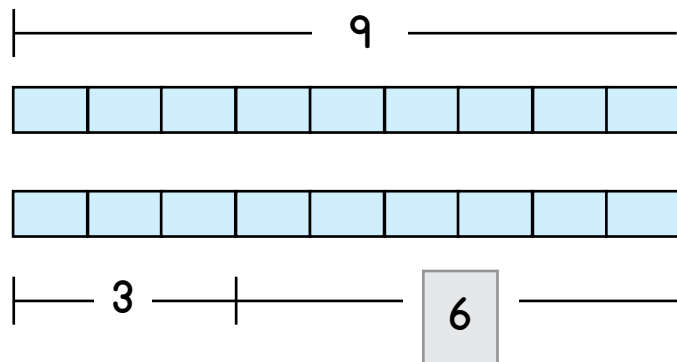


Word Problems

Read the story.

Lisa scored 3 goals. How many more goals does she need in order to have scored 9 goals?

ANSWER KEY



Write a number fact that matches your model.

$$\boxed{3} + \boxed{6} = \boxed{9}$$

Answer: 6 goals

Copyright © 2014 Symphony Learning LLC. Permission is granted to reproduce this sheet for classroom use.

