

Name: \_\_\_\_\_ Date: \_\_\_\_\_



Draw the missing dot card.

Example



Start with this card.

Take away this card.

This card is left.

ANSWER KEY

1


2

3

Copyright © 2014 Symphony Learning LLC. Permission is granted to reproduce this sheet for classroom use.

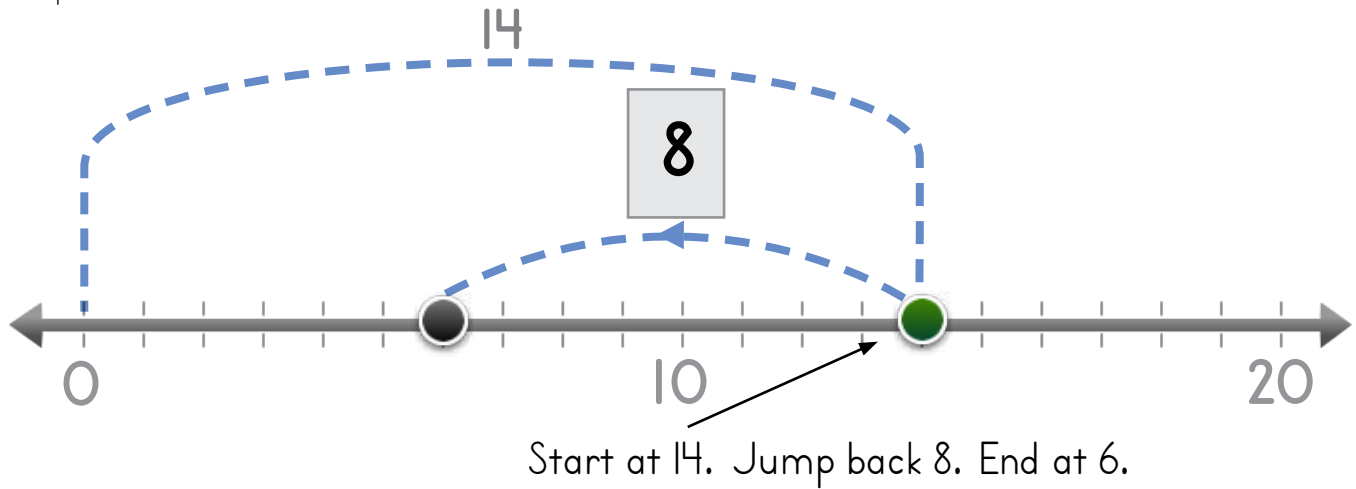


Name: \_\_\_\_\_ Date: \_\_\_\_\_

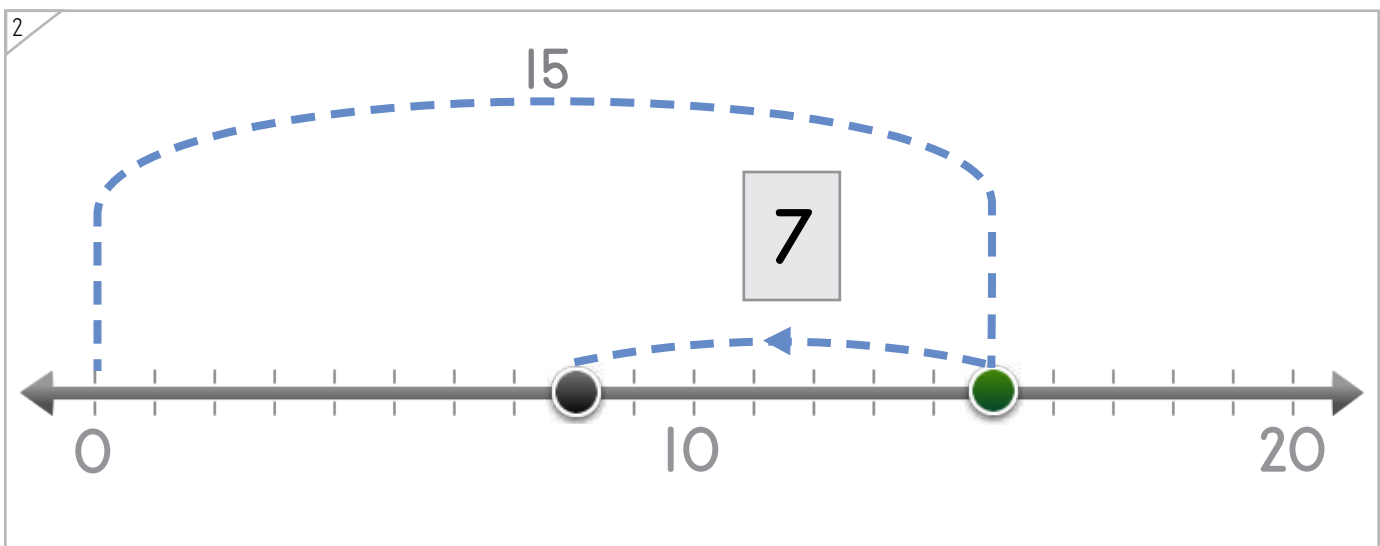
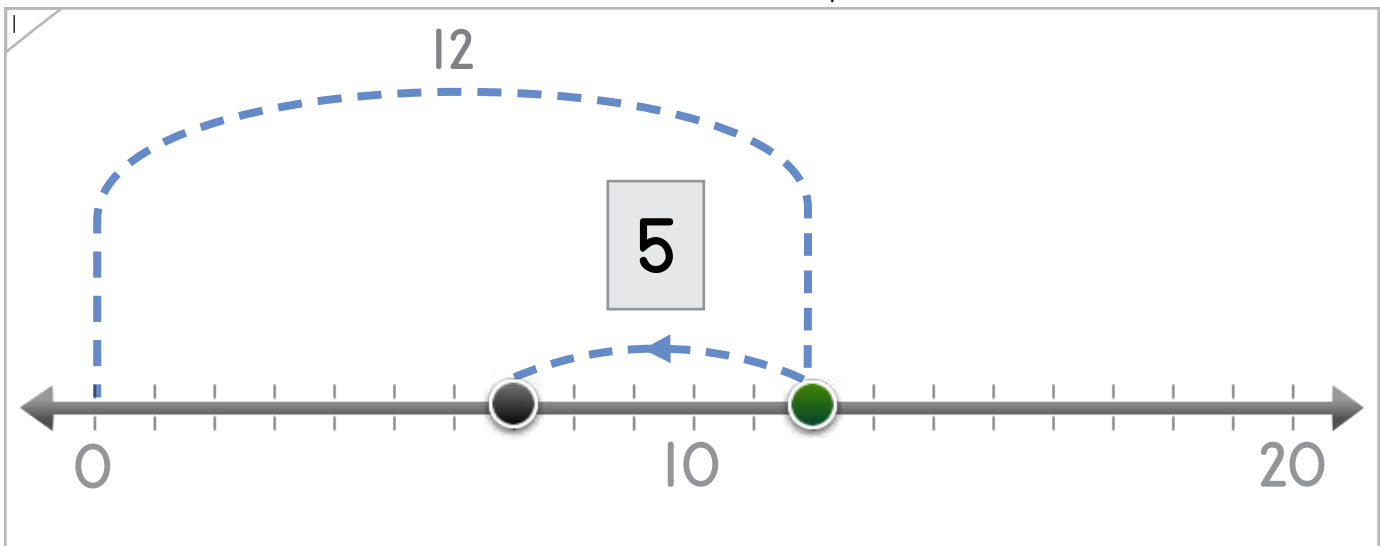


Draw the number that the dot jumps back.

Example



ANSWER KEY



Copyright © 2014 Symphony Learning LLC. Permission is granted to reproduce this sheet for classroom use.



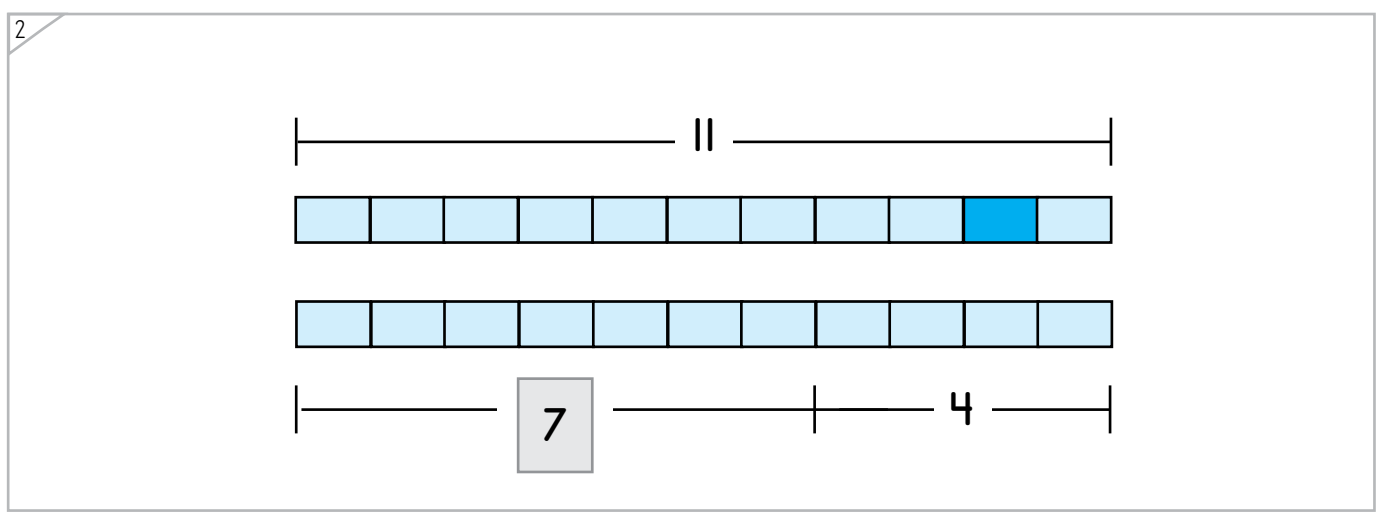
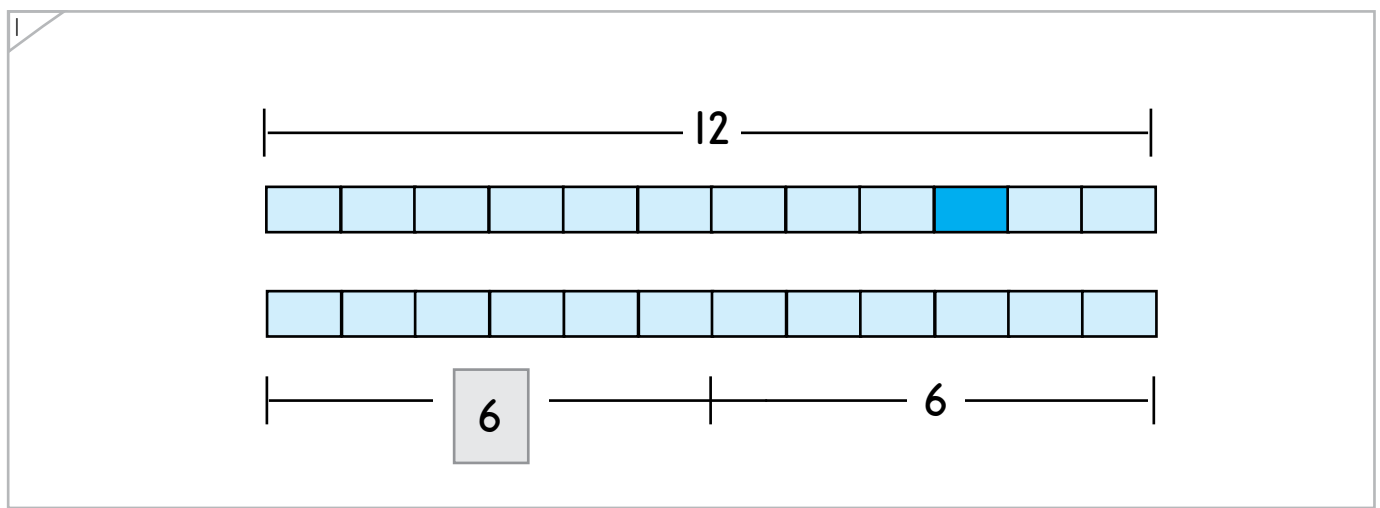
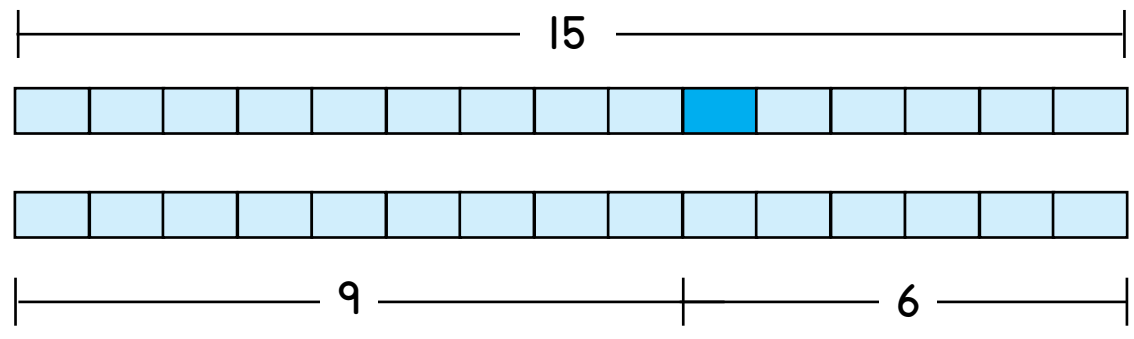
Name: \_\_\_\_\_ Date: \_\_\_\_\_

Add numbers to complete the bar models.



Manipulatives

Example




ANSWER KEY

Copyright © 2014 Symphony Learning LLC. Permission is granted to reproduce this sheet for classroom use.



Name: \_\_\_\_\_ Date: \_\_\_\_\_

Add numbers to complete the bar models.



1


2

ANSWER KEY

Copyright © 2014 Symphony Learning LLC. Permission is granted to reproduce this sheet for classroom use.



Name: \_\_\_\_\_ Date: \_\_\_\_\_



Draw numbers and dot cards to complete each number fact.

1

$$10 - 4 = 6$$

ANSWER KEY

2

$$8 = 16 - 8$$

3

$$16 - 6 = 10$$

Copyright © 2014 Symphony Learning LLC. Permission is granted to reproduce this sheet for classroom use.

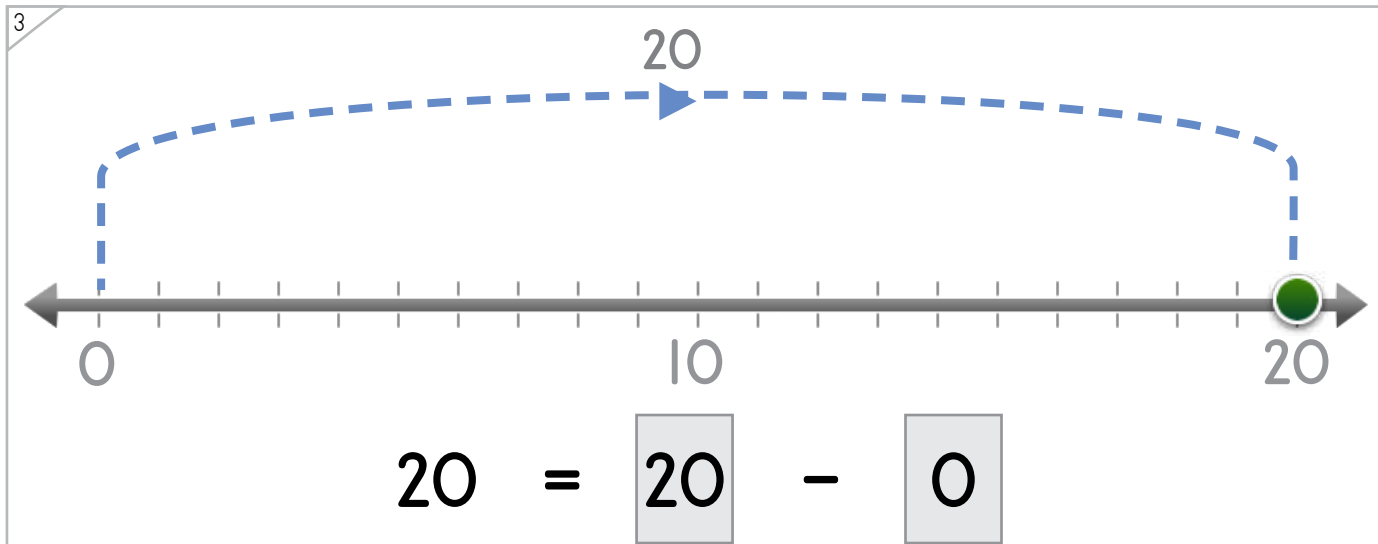
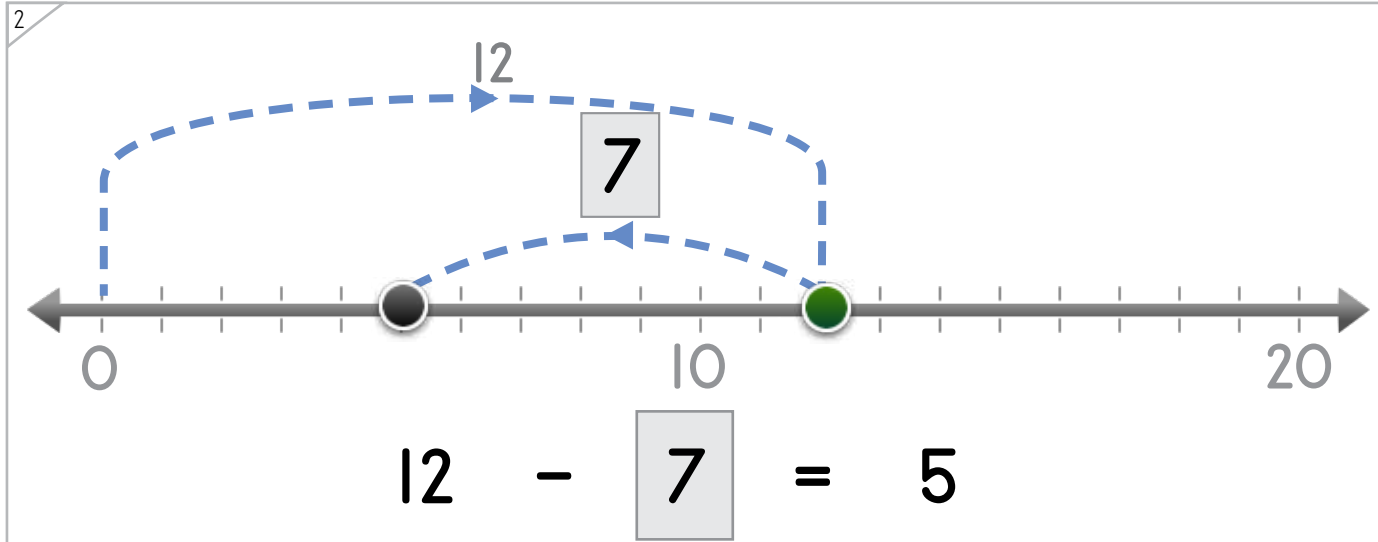
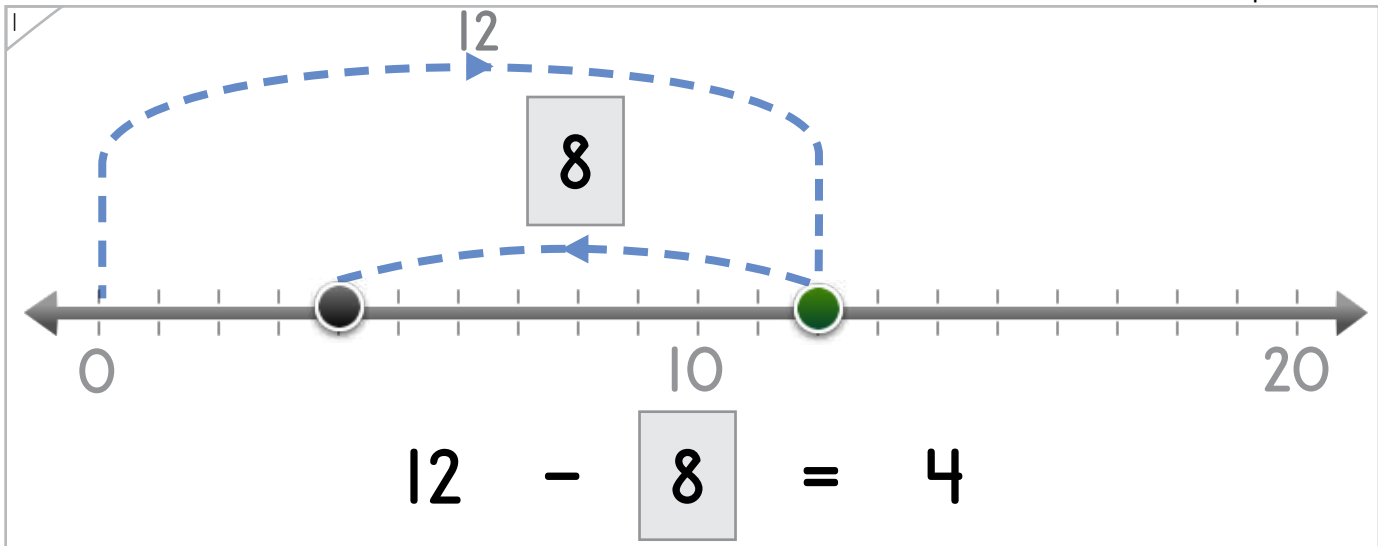


Name: \_\_\_\_\_ Date: \_\_\_\_\_

Draw numbers and dots to complete each number fact.



Manipulatives and Symbols




ANSWER KEY

Copyright © 2014 Symphony Learning LLC. Permission is granted to reproduce this sheet for classroom use.



Name: \_\_\_\_\_ Date: \_\_\_\_\_



Manipulatives and Symbols

Add numbers to complete the bar models.

1

13

8

5

13 - 5 = 8

ANSWER KEY

2

17

8

9

17 - 9 = 8

Copyright © 2014 Symphony Learning LLC. Permission is granted to reproduce this sheet for classroom use.



Name: \_\_\_\_\_ Date: \_\_\_\_\_



Symbols

Complete each number fact.

$14 - \boxed{11} = 3$	$15 - 7 = \boxed{8}$
$0 + 5 = \boxed{5}$	$\boxed{11} - 8 = 3$
$6 = 11 - \boxed{5}$	$12 + \boxed{3} = 15$
$18 - 9 = \boxed{9}$	$14 - 9 = \boxed{5}$
$13 - \boxed{9} = 4$	$8 + \boxed{8} = 16$
$14 - 6 = \boxed{8}$	$\boxed{7} - 0 = 7$
$9 - \boxed{8} = \boxed{1}$	$\boxed{8} - 8 = \boxed{0}$

multiple correct  
solutions are possible

multiple correct  
solutions are possible

ANSWER KEY

Copyright © 2014 Symphony Learning LLC. Permission is granted to reproduce this sheet for classroom use.



Name: \_\_\_\_\_ Date: \_\_\_\_\_



Read the story.

Thomas has 9 toys. He gave some to Anna, and now he has 3 toys left. How many toys did Thomas give to Anna?

ANSWER KEY

Draw dot cards to make a model for the story.



Write a number fact that matches your model.

$$\boxed{9} - \boxed{6} = \boxed{3}$$

Answer: 6 toys

Copyright © 2014 Symphony Learning LLC. Permission is granted to reproduce this sheet for classroom use.



Name: \_\_\_\_\_ Date: \_\_\_\_\_

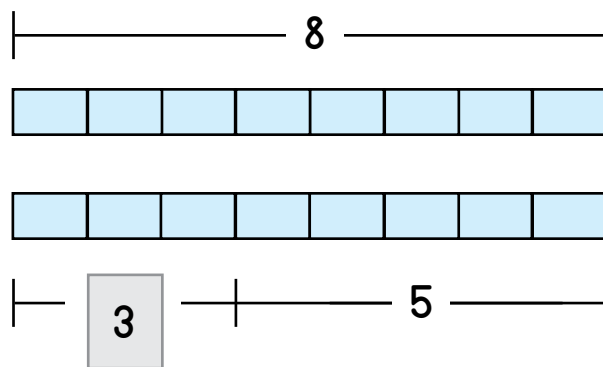


Read the story.

George had 8 markers. He let Lisa borrow some markers, and now he has 5 markers left. How many markers did Lisa borrow?

ANSWER KEY

Draw bars to make a model for the story.



Write a number fact that matches your model.

$$\boxed{8} - \boxed{3} = \boxed{5}$$

Answer: 3 markers

