


Name: \_\_\_\_\_ Date: \_\_\_\_\_

Draw the missing dot card.

Example



$$\begin{array}{|c|} \hline 10 \\ \hline \\ \hline \end{array} - \begin{array}{|c|} \hline \bullet \bullet \bullet \bullet \\ \hline \bullet \\ \hline \end{array} = \begin{array}{|c|} \hline \bullet \bullet \bullet \bullet \\ \hline \\ \hline \end{array}$$

1

$$\begin{array}{|c|} \hline \bullet \bullet \bullet \bullet \\ \hline \\ \hline \end{array} + \begin{array}{|c|} \hline \bullet \bullet \bullet \bullet \bullet \\ \hline \bullet \\ \hline \end{array} = \begin{array}{|c|} \hline 10 \\ \hline \\ \hline \end{array}$$

2

$$\begin{array}{|c|} \hline \bullet \bullet \bullet \bullet \bullet \\ \hline \bullet \\ \hline \end{array} = \begin{array}{|c|} \hline 10 \\ \hline \\ \hline \end{array} - \begin{array}{|c|} \hline \bullet \bullet \bullet \bullet \\ \hline \\ \hline \end{array}$$

3

$$\begin{array}{|c|} \hline \bullet \bullet \bullet \bullet \bullet \\ \hline \bullet \\ \hline \end{array} + \begin{array}{|c|} \hline \bullet \bullet \bullet \bullet \\ \hline \\ \hline \end{array} = \begin{array}{|c|} \hline 10 \\ \hline \\ \hline \end{array}$$

ANSWER KEY

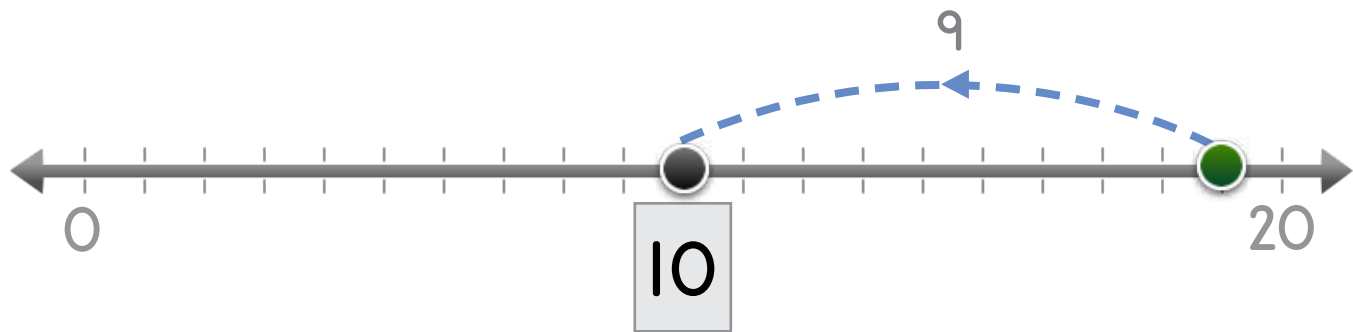

Copyright © 2014 Symphony Learning LLC. Permission is granted to reproduce this sheet for classroom use.



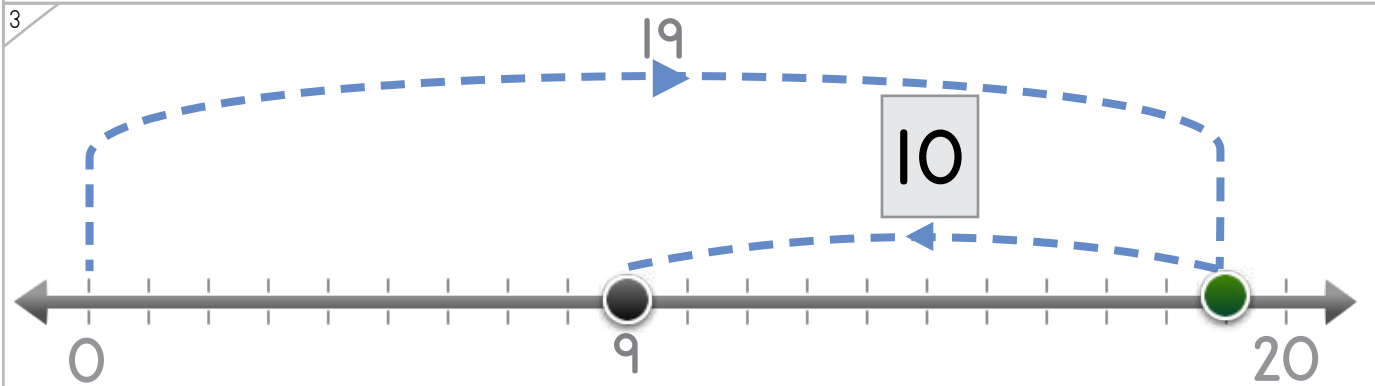
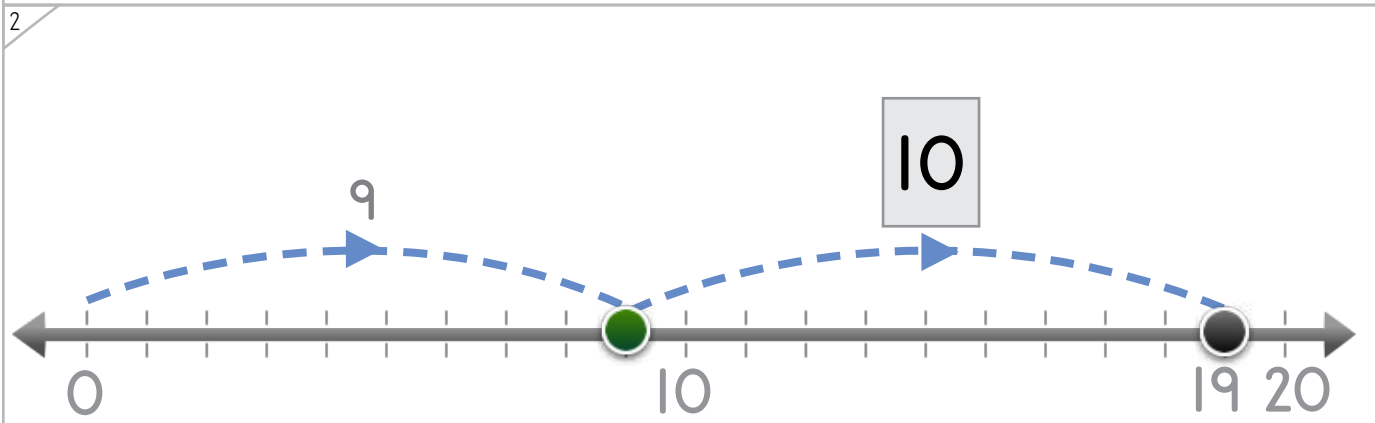
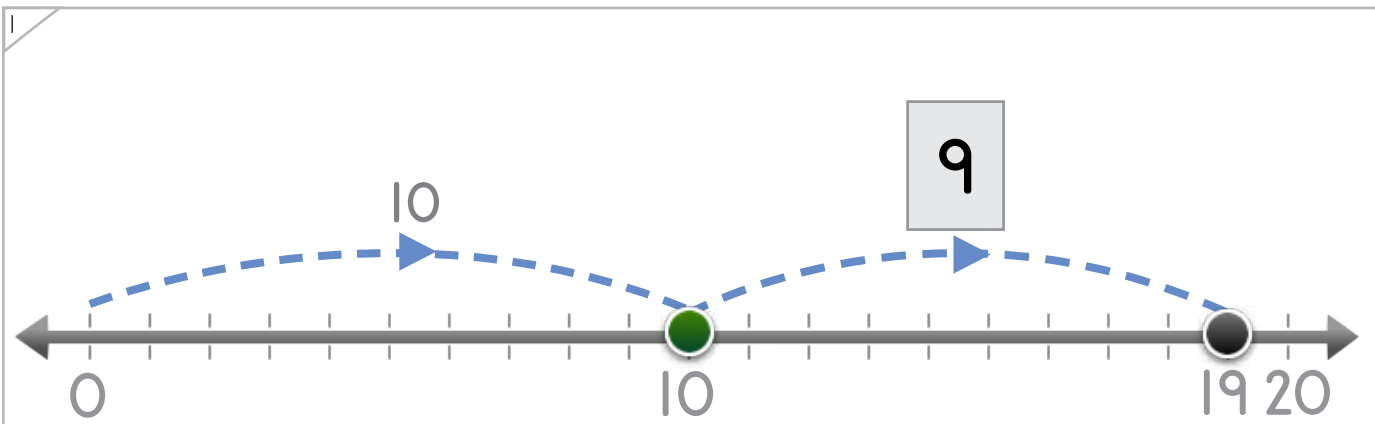
Name: \_\_\_\_\_ Date: \_\_\_\_\_

# Complete each number fact.

Example



ANSWER KEY



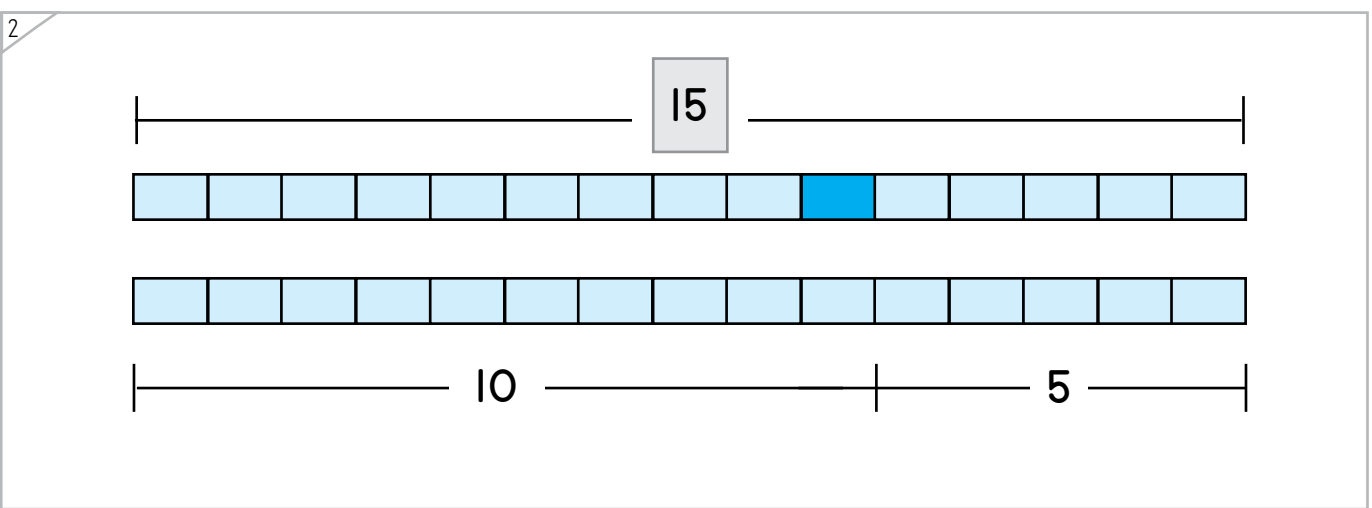
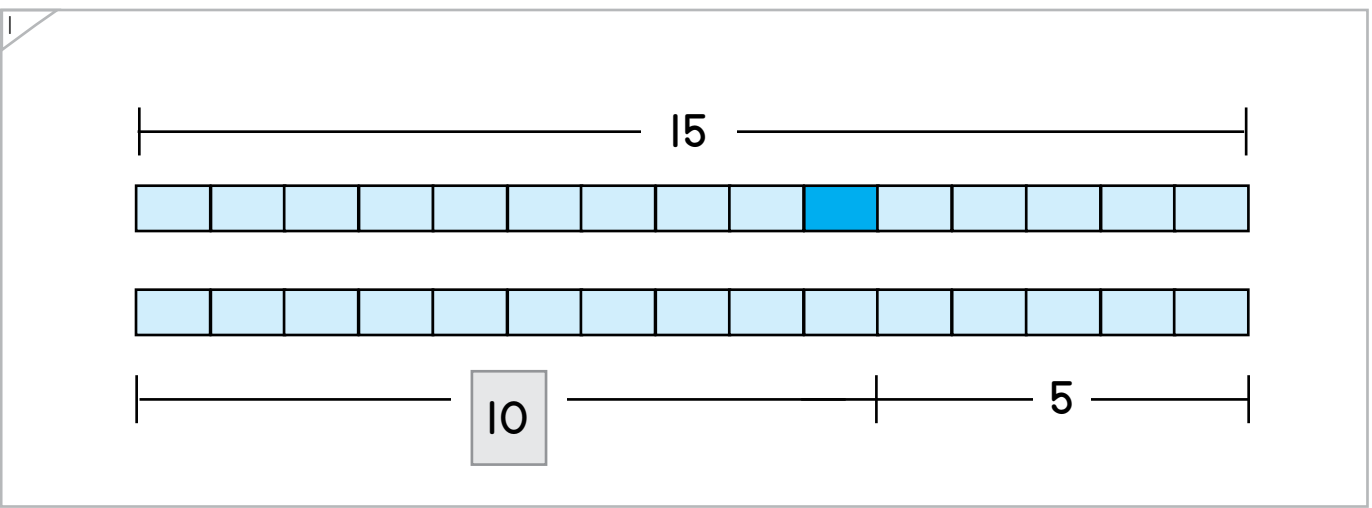
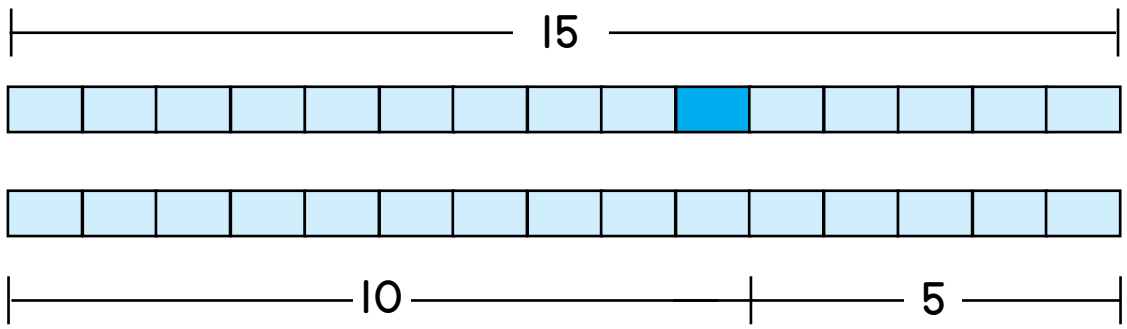

Copyright © 2014 Symphony Learning LLC. Permission is granted to reproduce this sheet for classroom use.



Name: \_\_\_\_\_ Date: \_\_\_\_\_

Add numbers to complete the bar models.

Example



ANSWER KEY

Copyright © 2014 Symphony Learning LLC. Permission is granted to reproduce this sheet for classroom use.





Draw numbers and dot cards to match.

1

$15 + 5 = 20$

2

$20 = 5 + 15$

3

$20 - 5 = 15$

ANSWER KEY

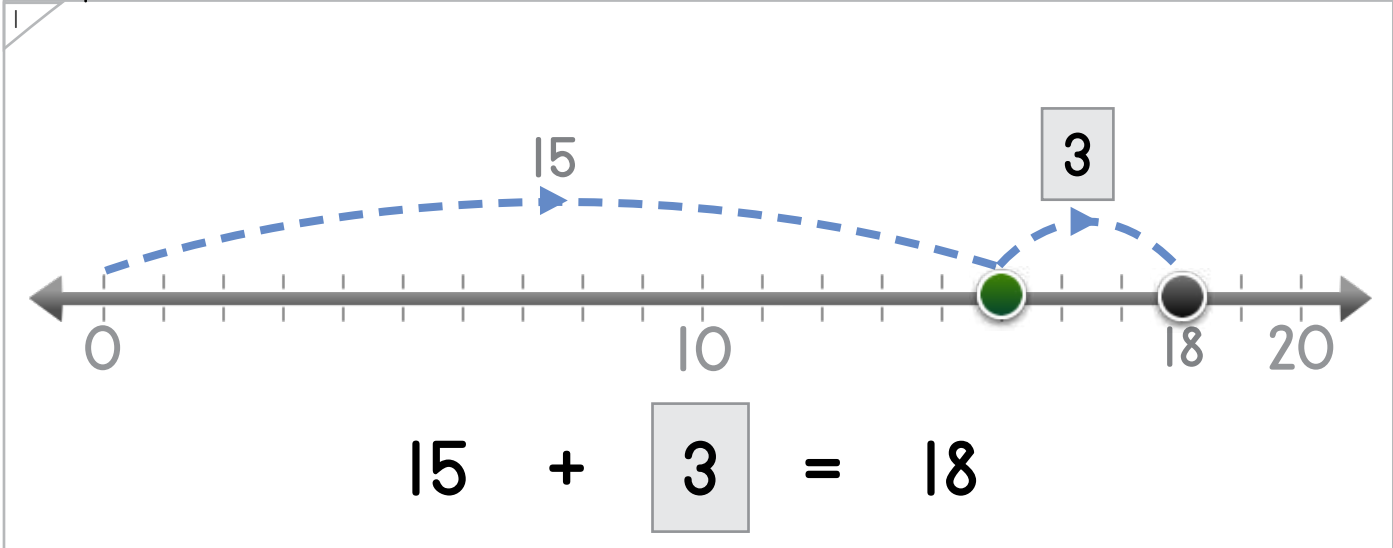


Name: \_\_\_\_\_ Date: \_\_\_\_\_

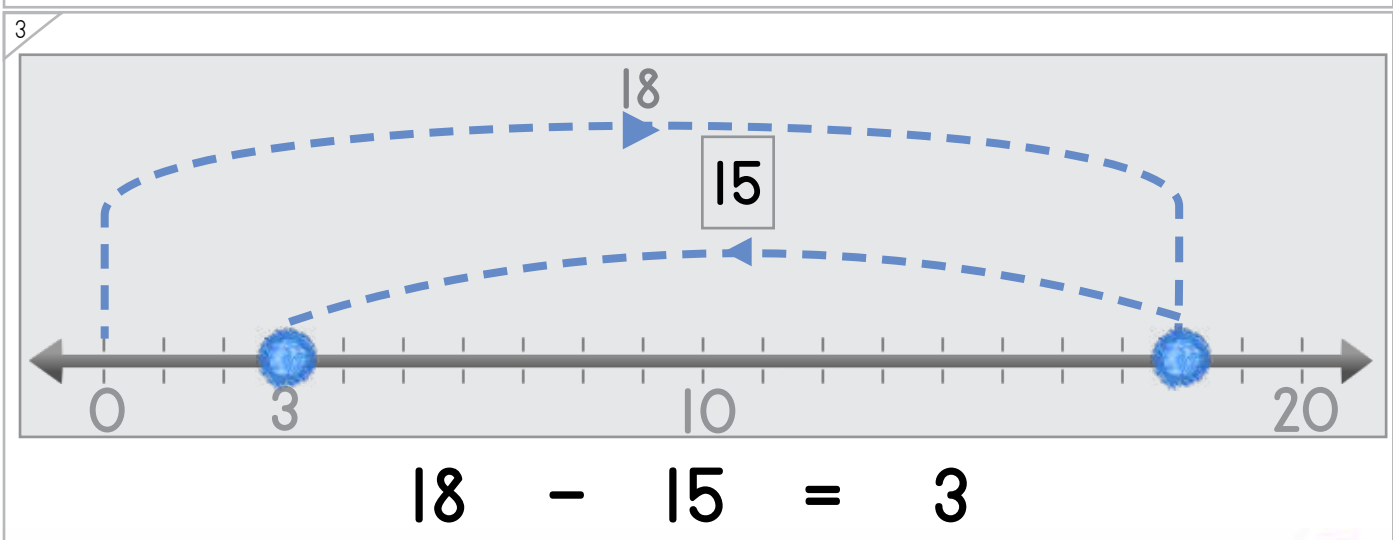
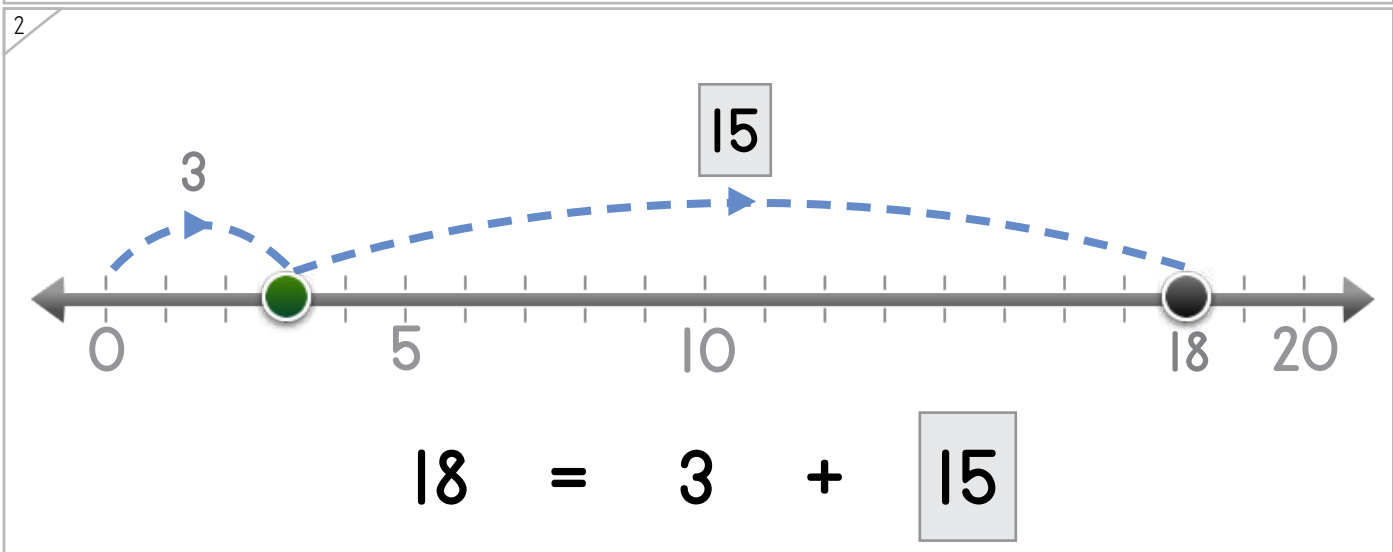
Draw numbers and jumping dots on the number line to complete each number fact.



Manipulatives and Symbols



ANSWER KEY



Copyright © 2014 Symphony Learning LLC. Permission is granted to reproduce this sheet for classroom use.



Name: \_\_\_\_\_ Date: \_\_\_\_\_



Manipulatives and Symbols

Add numbers to complete the bar models.

1

$\boxed{7} - 3 = \boxed{4}$

2

$\boxed{3} + 4 = \boxed{7}$

ANSWER KEY

Copyright © 2014 Symphony Learning LLC. Permission is granted to reproduce this sheet for classroom use.



Name: \_\_\_\_\_ Date: \_\_\_\_\_



Symbols

Complete each number fact.

$6 + 4 = 10$	$9 + 10 = 19$
$20 - 15 = 5$	$3 + 15 = 18$
$4 = 10 - 6$	$15 = 18 - 3$
$19 - 9 = 10$	$10 - 4 = 6$
$10 + 5 = 5$	$3 + 15 = 18$
$4 + 3 = 7$	$19 = 10 + 9$
$3 + 4 = 7$	$15 - 10 = 5$
$20 = 15 + 5$	$7 - 4 = 3$

ANSWER KEY

Copyright © 2014 Symphony Learning LLC. Permission is granted to reproduce this sheet for classroom use.

