

Name: \_\_\_\_\_ Date: \_\_\_\_\_



Draw the dot card that is '10 less'.

Example



1

2

3

4

Copyright © 2014 Symphony Learning LLC. Permission is granted to reproduce this sheet for classroom use.

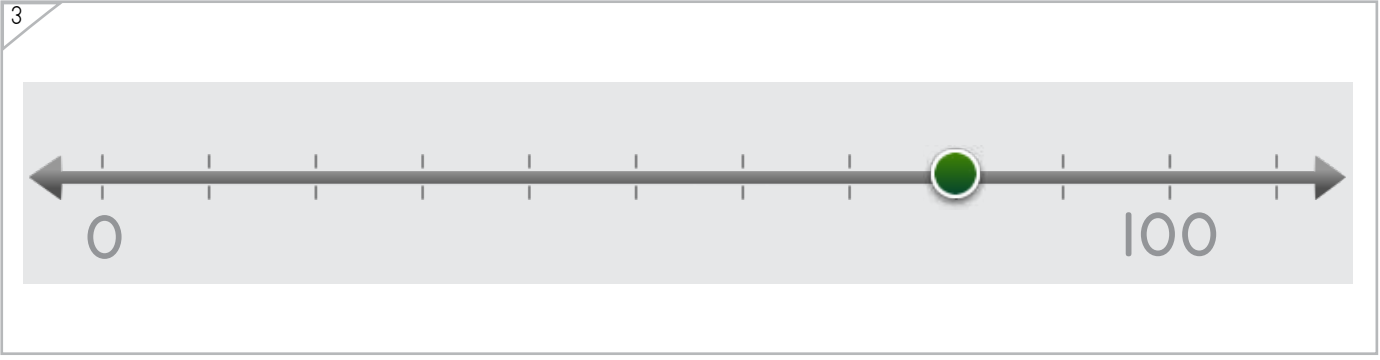
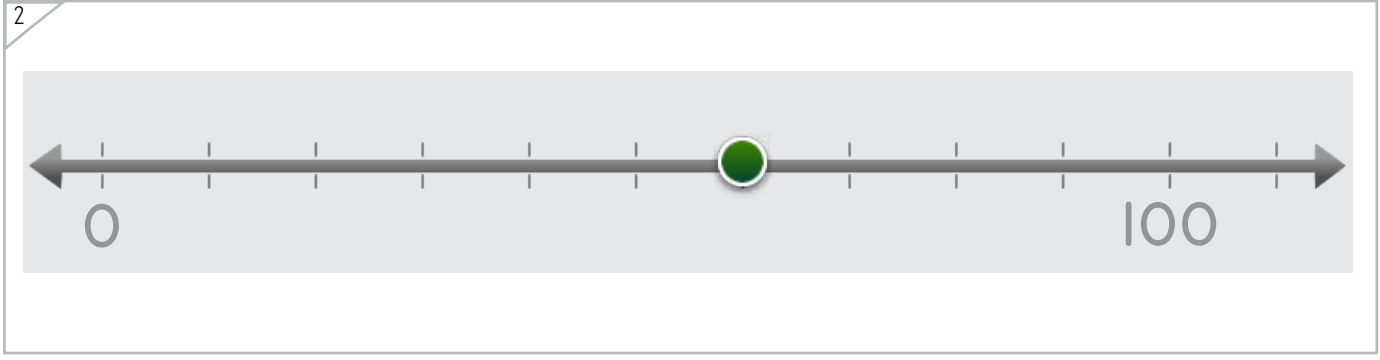
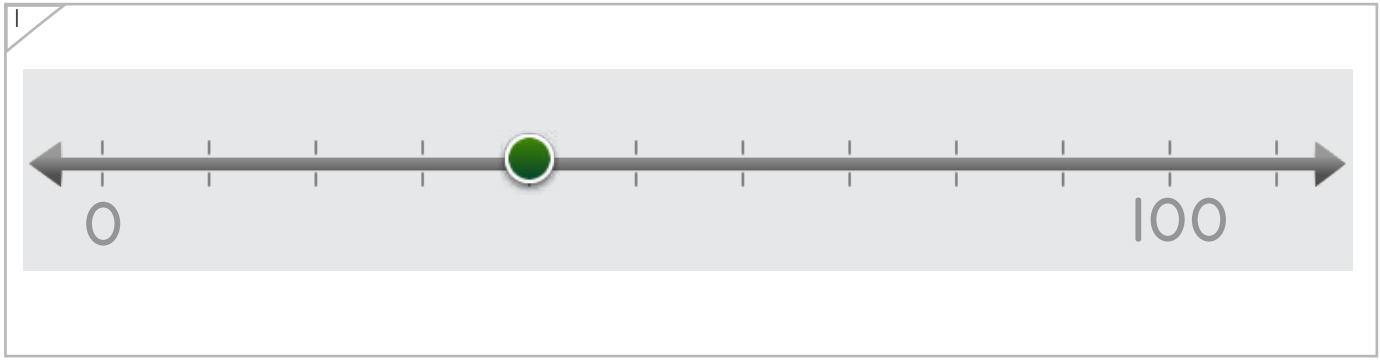


Name: \_\_\_\_\_ Date: \_\_\_\_\_



Draw the dot that is '10 less'.

Example



Copyright © 2014 Symphony Learning LLC. Permission is granted to reproduce this sheet for classroom use.



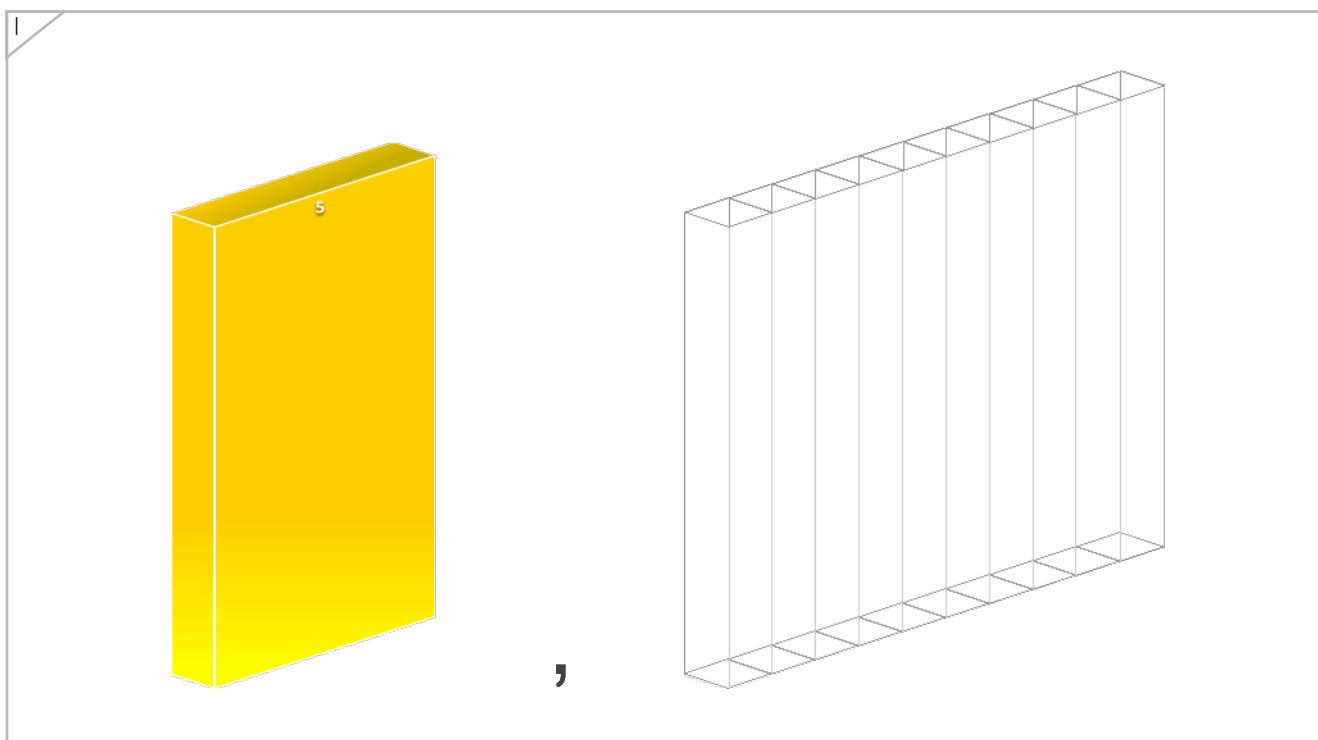
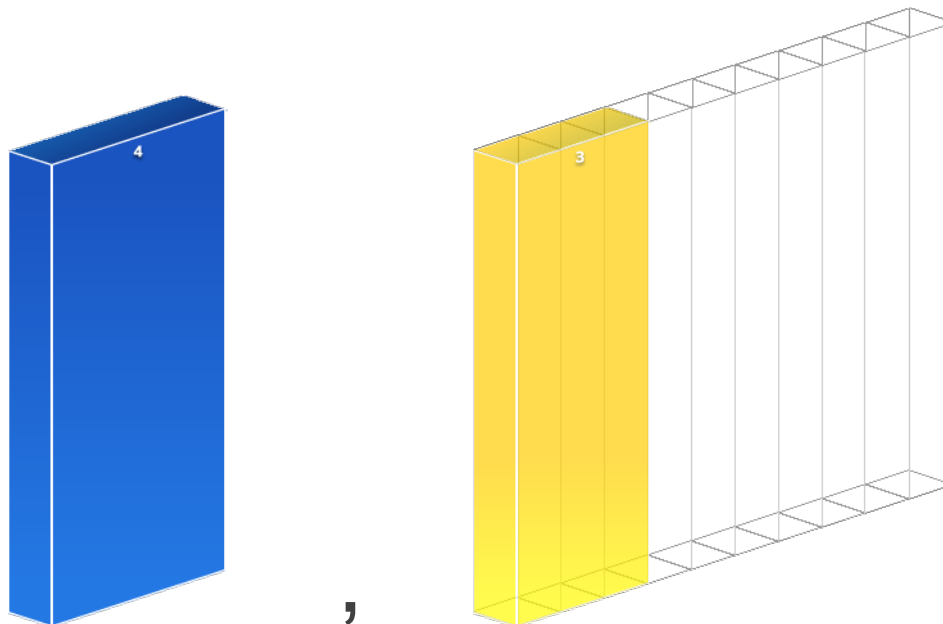
Name: \_\_\_\_\_ Date: \_\_\_\_\_



Manipulatives

Draw the bar that is '10 less'.


Example



Copyright © 2014 Symphony Learning LLC. Permission is granted to reproduce this sheet for classroom use.



Name: \_\_\_\_\_ Date: \_\_\_\_\_



Draw the bar that is '10 less'.

1

A yellow 3D bar representing the number 7 is shown on the left. To its right is a comma. On the right side of the box is a 10-column grid bar, which is a 3D bar divided into 10 equal vertical sections.

2

A blue 3D bar representing the number 6 is shown on the left. To its right is a comma. On the right side of the box is a 10-column grid bar, which is a 3D bar divided into 10 equal vertical sections.

Copyright © 2014 Symphony Learning LLC. Permission is granted to reproduce this sheet for classroom use.



Name: \_\_\_\_\_ Date: \_\_\_\_\_



Symbols

Write the number that is '10 less'.

30	<input type="text"/>
----	----------------------

80	<input type="text"/>
----	----------------------

60	<input type="text"/>
----	----------------------

10	<input type="text"/>
----	----------------------

90	<input type="text"/>
----	----------------------

20	<input type="text"/>
----	----------------------

40	<input type="text"/>
----	----------------------

50	<input type="text"/>
----	----------------------

Copyright © 2014 Symphony Learning LLC. Permission is granted to reproduce this sheet for classroom use.



Name: \_\_\_\_\_ Date: \_\_\_\_\_



Symbols

Write the number that is '10 less'.

70	<input type="text"/>
----	----------------------

90	<input type="text"/>
----	----------------------

20	<input type="text"/>
----	----------------------

10	<input type="text"/>
----	----------------------

50	<input type="text"/>
----	----------------------

30	<input type="text"/>
----	----------------------

60	<input type="text"/>
----	----------------------

80	<input type="text"/>
----	----------------------

