



Draw the missing dot card.

Example

$$\begin{array}{|c|} \hline 10 \quad 10 \quad 10 \\ \hline \\ \hline \end{array} + \begin{array}{|c|} \hline 10 \quad 10 \quad 10 \\ 10 \quad 10 \\ \hline 10 \quad 10 \\ \hline \end{array} = \begin{array}{|c|} \hline 100 \\ \hline \\ \hline \end{array}$$

ANSWER KEY

1

$$\begin{array}{|c|} \hline 10 \quad 10 \\ \hline \\ \hline \end{array} + \begin{array}{|c|} \hline 10 \quad 10 \quad 10 \\ 10 \quad 10 \\ \hline 10 \quad 10 \quad 10 \\ \hline \end{array} = \begin{array}{|c|} \hline 100 \\ \hline \\ \hline \end{array}$$

2

$$\begin{array}{|c|} \hline 100 \\ \hline \\ \hline \end{array} = \begin{array}{|c|} \hline 10 \\ \hline \\ \hline \end{array} + \begin{array}{|c|} \hline 10 \quad 10 \quad 10 \\ 10 \quad 10 \\ \hline 10 \quad 10 \\ 10 \quad 10 \\ \hline \end{array}$$


3

$$\begin{array}{|c|} \hline 10 \quad 10 \\ 10 \quad 10 \\ \hline \\ \hline \end{array} + \begin{array}{|c|} \hline 10 \quad 10 \quad 10 \\ 10 \quad 10 \\ \hline 10 \\ \hline \end{array} = \begin{array}{|c|} \hline 100 \\ \hline \\ \hline \end{array}$$

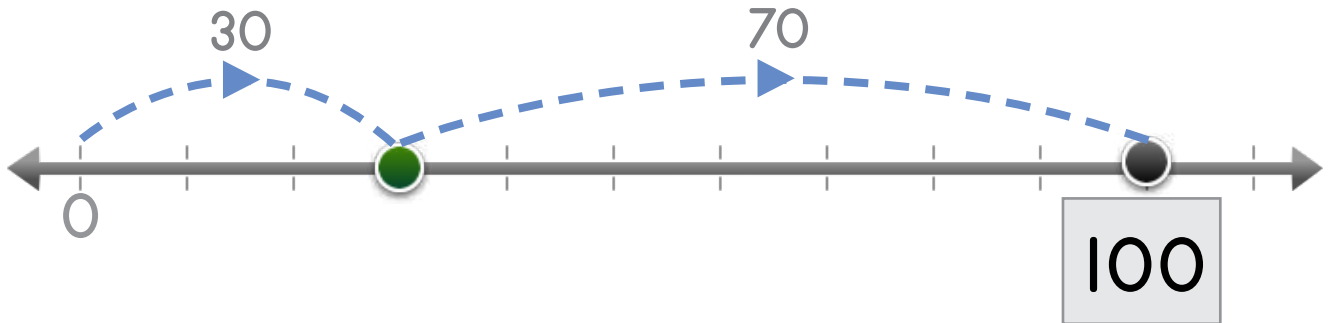


Name: _____ Date: _____

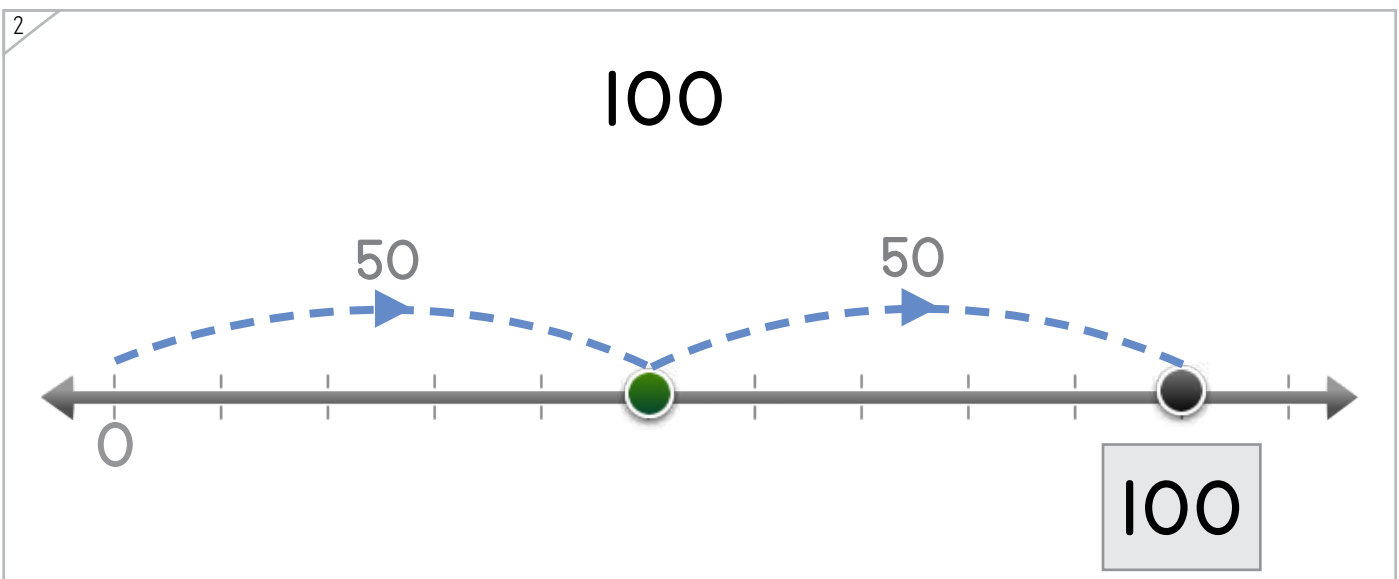
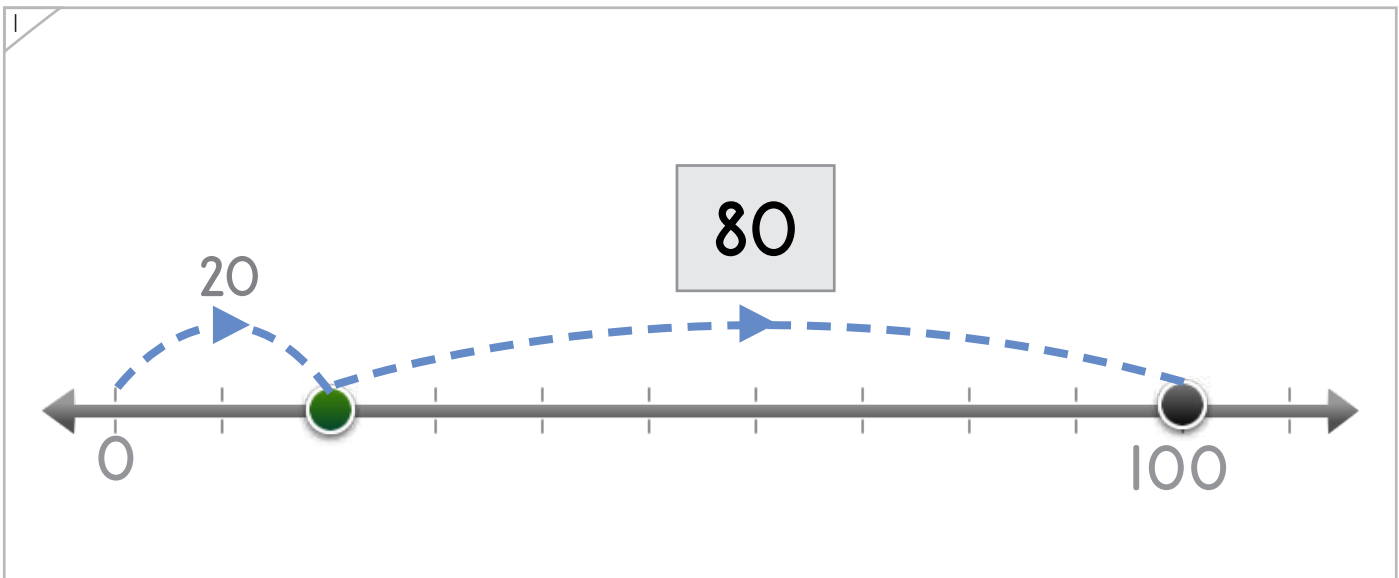
Draw the missing numbers.



Example




ANSWER KEY



Copyright © 2014 Symphony Learning LLC. Permission is granted to reproduce this sheet for classroom use.

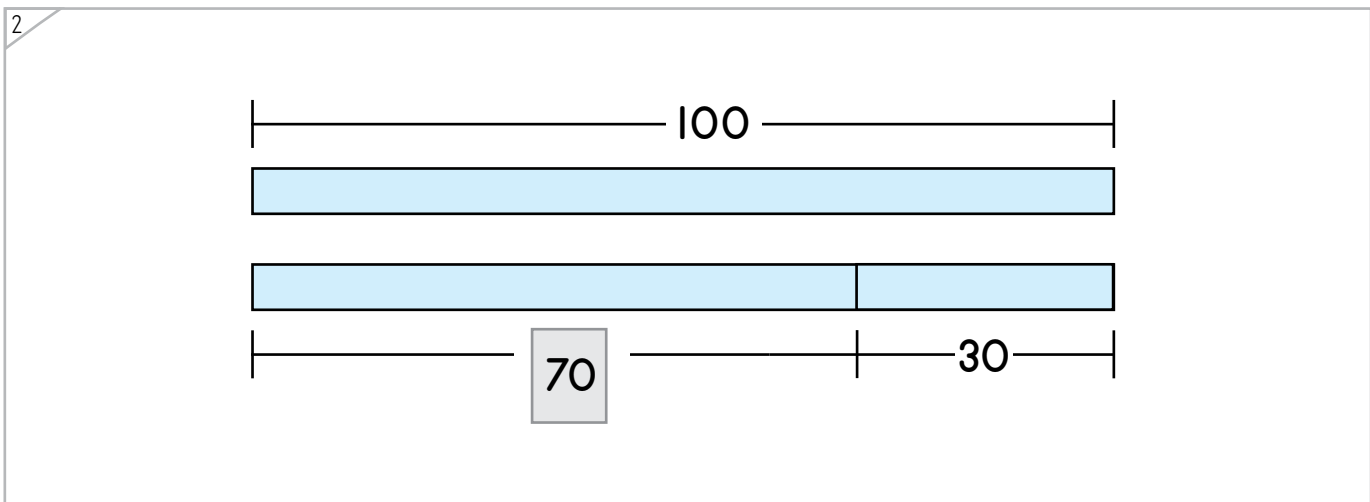
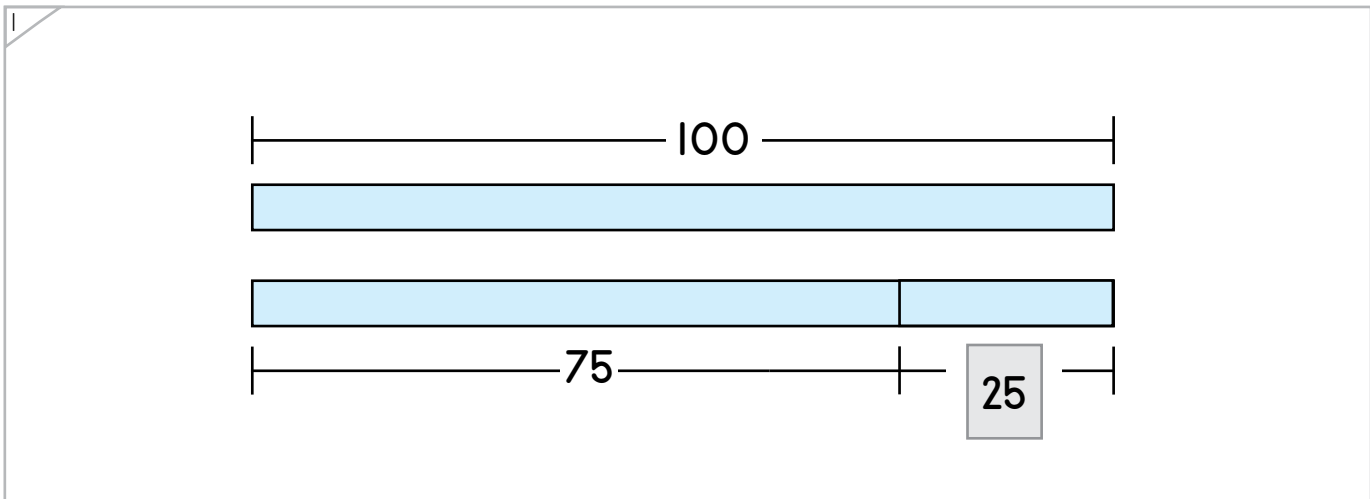
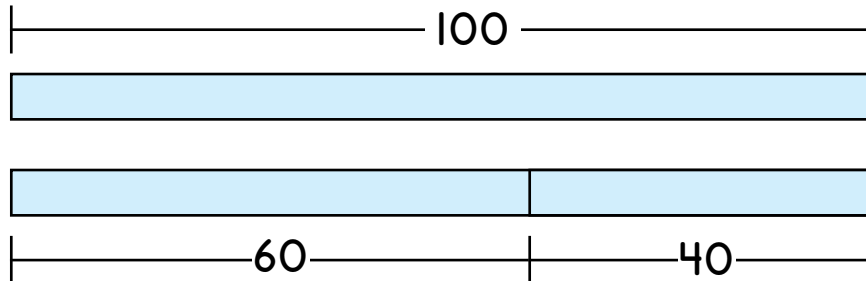


Name: _____ Date: _____



Complete each bar model.

Example



ANSWER KEY

Copyright © 2014 Symphony Learning LLC. Permission is granted to reproduce this sheet for classroom use.



Name: _____ Date: _____



Manipulatives and Symbols

Draw dot cards and numbers to complete each number fact.

1

$$100 + 0 = 100$$

2

$$100 = 90 + 10$$

3

$$80 + 20 = 100$$

ANSWER KEY

Copyright © 2014 Symphony Learning LLC. Permission is granted to reproduce this sheet for classroom use.

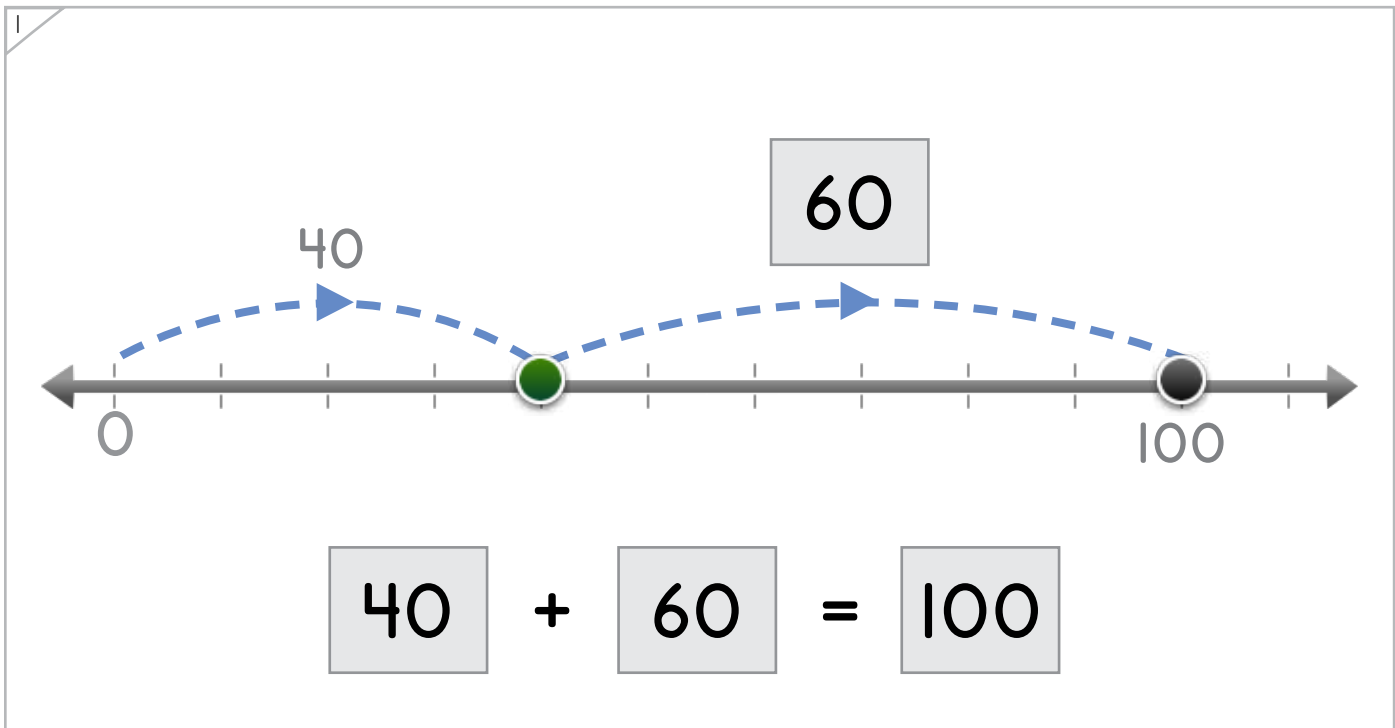


Name: _____ Date: _____

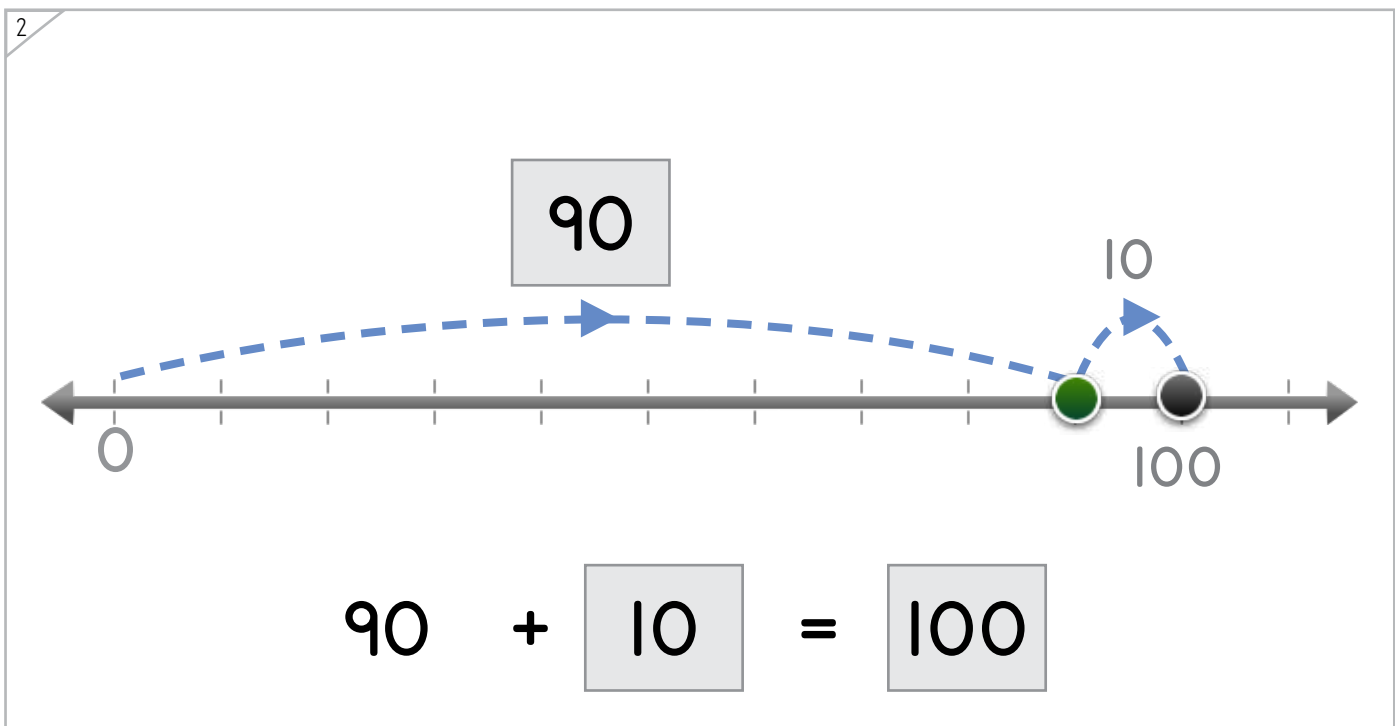


Manipulatives and Symbols

Draw the missing numbers.




ANSWER KEY



Copyright © 2014 Symphony Learning LLC. Permission is granted to reproduce this sheet for classroom use.



Name: _____ Date: _____



Manipulatives and Symbols

Complete each bar model and number sentence.

1

100

80

20

$$\boxed{80} + 20 = \boxed{100}$$

ANSWER KEY

2

100

50

50

$$\boxed{50} + \boxed{50} = 100$$

Copyright © 2014 Symphony Learning LLC. Permission is granted to reproduce this sheet for classroom use.



Name: _____ Date: _____



Symbols

Complete each number fact.

ANSWER KEY

$10 + 90 = 100$	$100 + 0 = 100$
-----------------	-----------------

$100 = 70 + 30$	$100 = 50 + 50$
-----------------	-----------------

$30 + 70 = 100$	$60 + 40 = 100$
-----------------	-----------------

$0 + 100 = 100$	$30 + 70 = 100$
-----------------	-----------------

multiple correct solutions are possible

multiple correct solutions are possible

Copyright © 2014 Symphony Learning LLC. Permission is granted to reproduce this sheet for classroom use.



Name: _____ Date: _____



Symbols

Complete each number fact.

$10 + 90 = \boxed{100}$	$30 + 70 = \boxed{100}$
$\boxed{80} + 20 = 100$	$\boxed{90} + 10 = 100$
$\boxed{100} = 70 + 30$	$40 + 60 = \boxed{100}$
$20 + \boxed{80} = 100$	$100 = \boxed{70} + 30$
$\boxed{70} + 30 = 100$	$\boxed{40} + 60 = 100$
$\boxed{100} = 50 + 50$	$90 + \boxed{10} = 100$
$0 + \boxed{100} = \boxed{100}$	$30 + \boxed{70} = \boxed{100}$

multiple correct
solutions are possible

multiple correct
solutions are possible

ANSWER KEY

Copyright © 2014 Symphony Learning LLC. Permission is granted to reproduce this sheet for classroom use.

