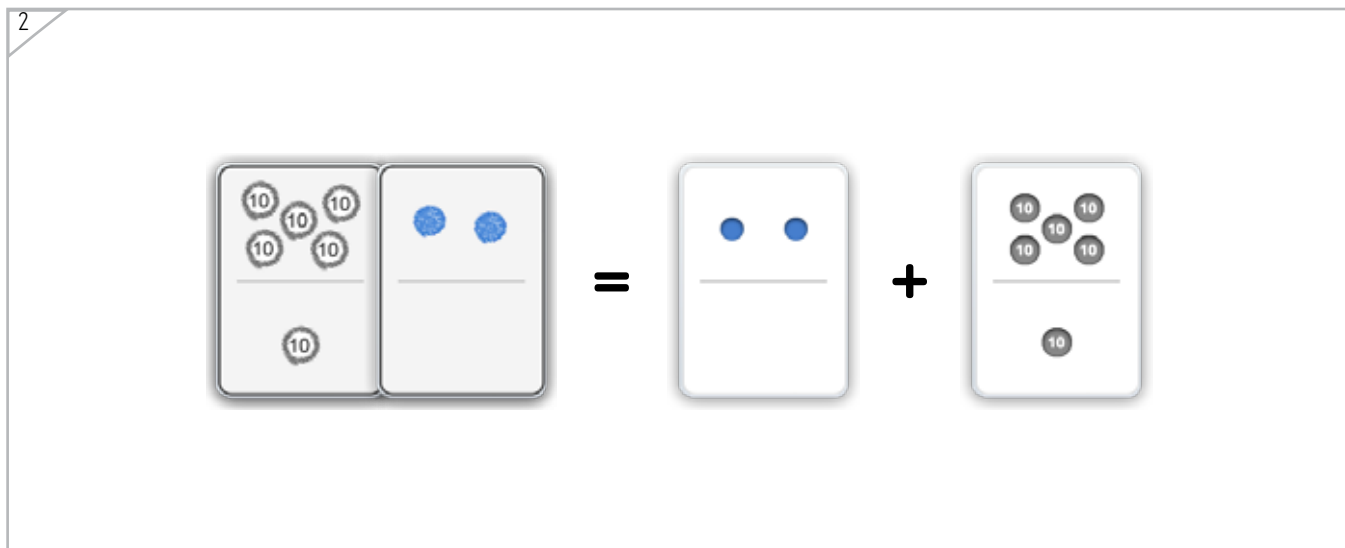
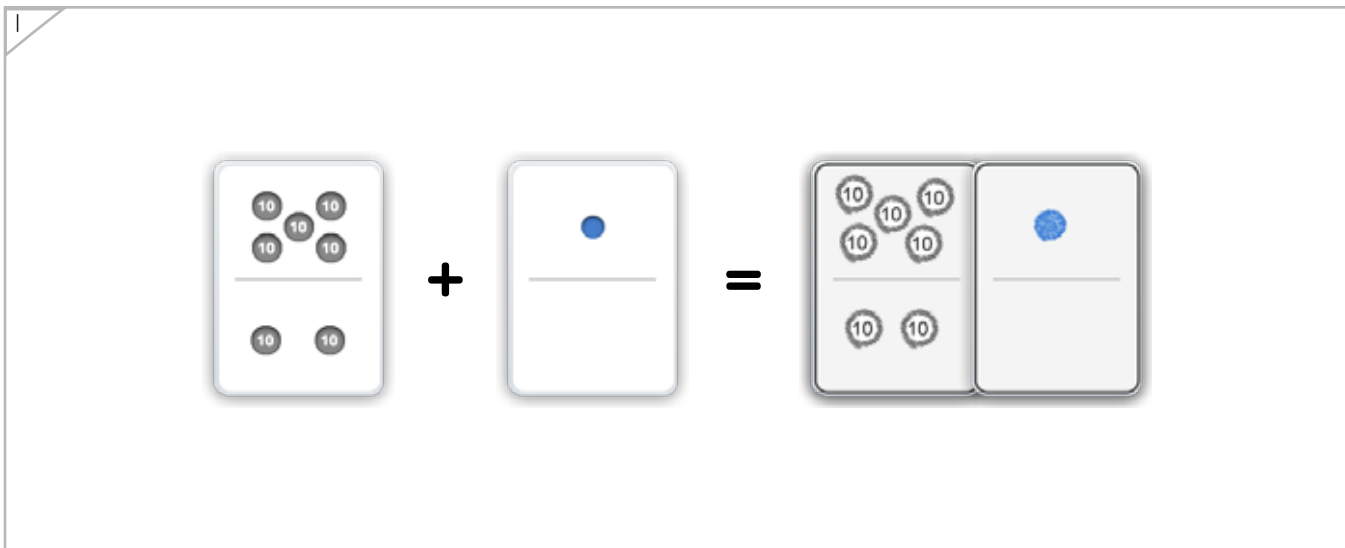
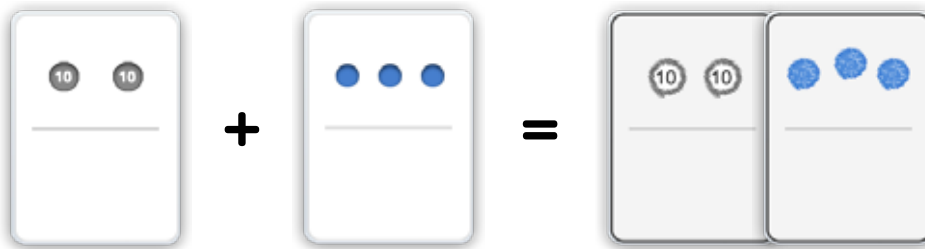




Draw a dot card that is the same as the dot cards put together.


Example



ANSWER KEY

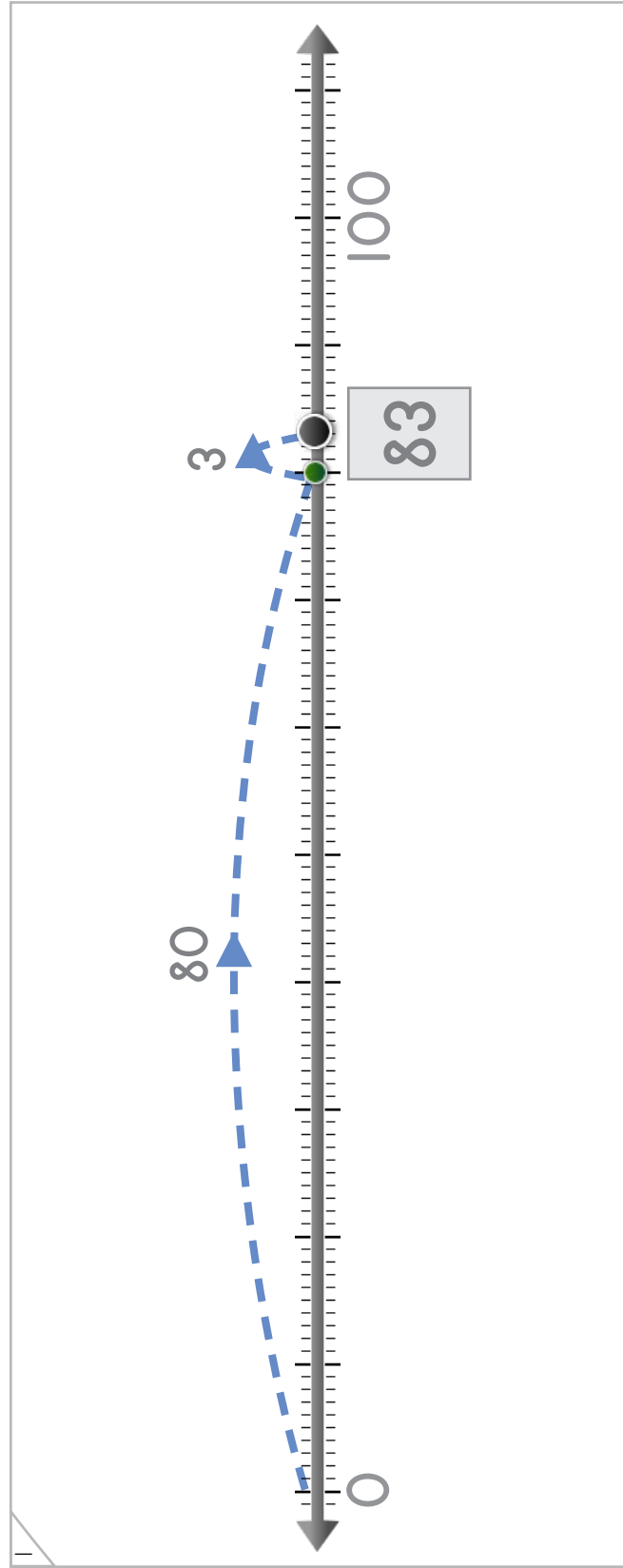
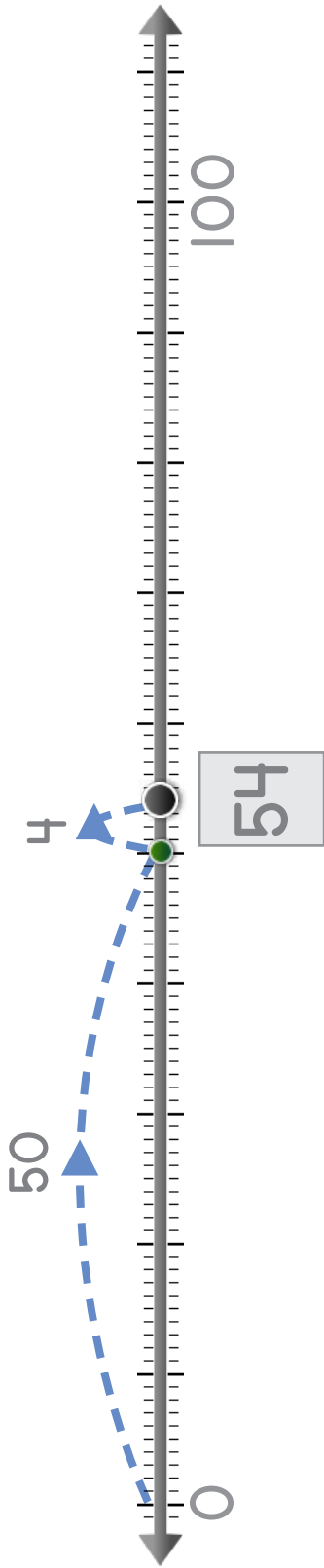
Copyright © 2014 Symphony Learning LLC. Permission is granted to reproduce this sheet for classroom use.





The dot jumps two times. Write the number where the dot lands.

Example




ANSWER KEY

Copyright © 2014 Symphony Learning LLC. Permission is granted to reproduce this sheet for classroom use.

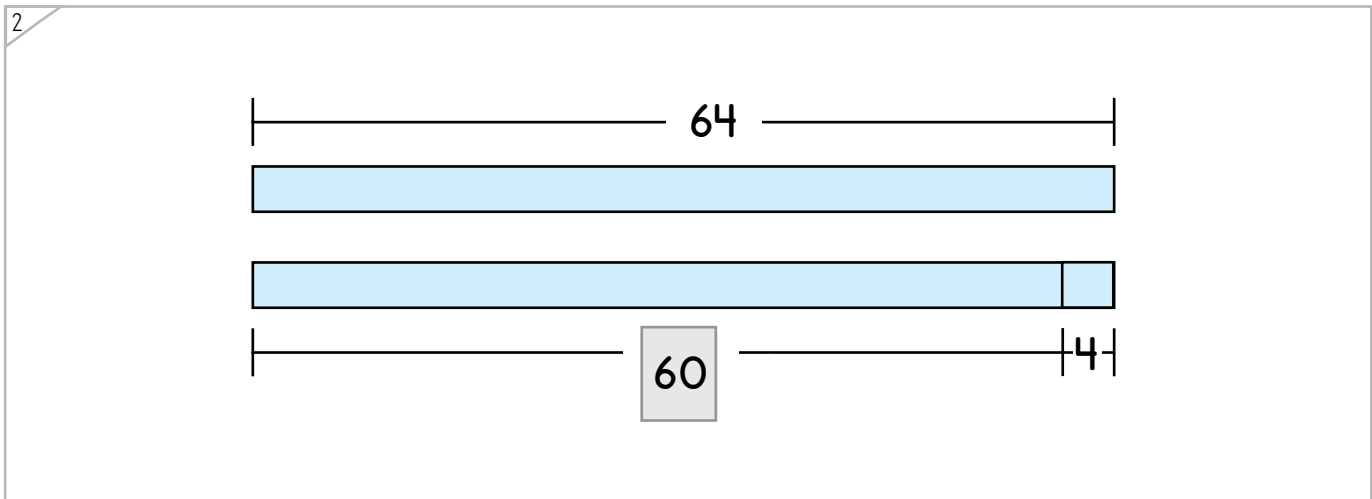
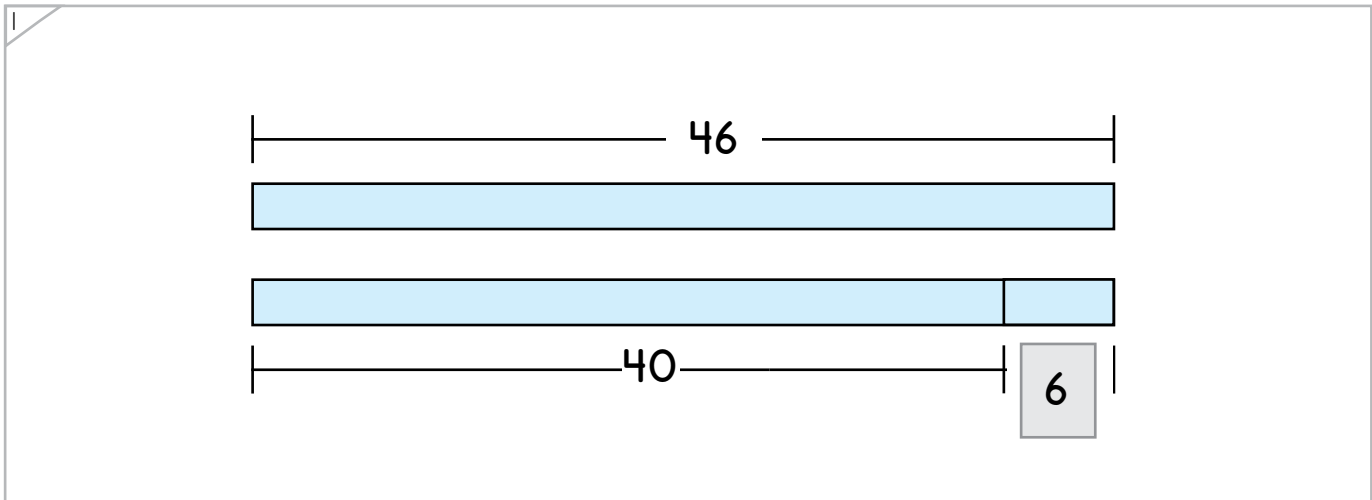
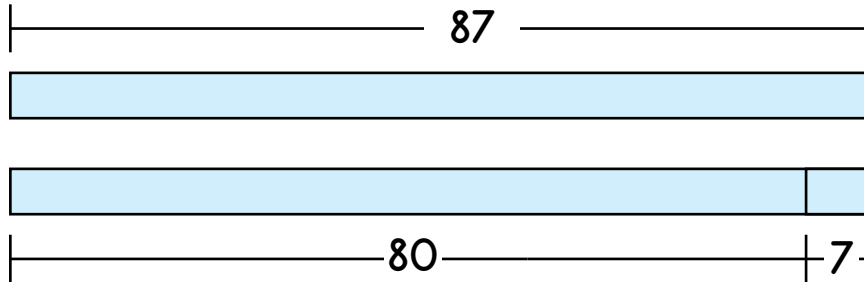


Name: \_\_\_\_\_ Date: \_\_\_\_\_



Complete each bar model.

Example



ANSWER KEY

Copyright © 2014 Symphony Learning LLC. Permission is granted to reproduce this sheet for classroom use.





Draw dot cards and numbers to match.

1

$$60 + 6 = 66$$

2

$$30 + 4 = 34$$

3

$$79 = 70 + 9$$

ANSWER KEY





The dot jumps two times. Draw dots and numbers to complete the number problem.

1

80

8

100

88

$80 + 8 = 88$

2

30

7

100

37

$30 + 7 = 37$

ANSWER KEY

Copyright © 2014 Symphony Learning LLC. Permission is granted to reproduce this sheet for classroom use.



Name: \_\_\_\_\_ Date: \_\_\_\_\_

Complete each bar model and number sentence.



Manipulatives and Symbols

1

$50 + 6 = 56$

ANSWER KEY

2

$40 + 2 = 42$

Copyright © 2014 Symphony Learning LLC. Permission is granted to reproduce this sheet for classroom use.



Name: \_\_\_\_\_ Date: \_\_\_\_\_



Symbols

Complete each number fact.

$10 + 1 = 11$	$23 = 20 + 3$
---------------	---------------

$0 + 50 = 50$	$40 + 7 = 47$
---------------	---------------

$74 = 70 + 4$	$90 + 5 = 95$
---------------	---------------

$10 + 3 = 13$	$30 + 30 = 60$
---------------	----------------

multiple correct solutions are possible

multiple correct solutions are possible

ANSWER KEY

Copyright © 2014 Symphony Learning LLC. Permission is granted to reproduce this sheet for classroom use.



Name: \_\_\_\_\_ Date: \_\_\_\_\_



Symbols

Complete each number fact.

$20 + 1 = \boxed{21}$	$\boxed{32} = 2 + 30$
$80 + 3 = \boxed{83}$	$7 + 40 = \boxed{47}$
$\boxed{90} = 0 + 90$	$60 + 8 = \boxed{68}$
$90 + 1 = \boxed{91}$	$10 + 4 = \boxed{14}$
$50 + 5 = \boxed{55}$	$\boxed{76} = 70 + 6$
$20 + 9 = \boxed{29}$	$10 + 4 = \boxed{14}$
$\boxed{36} = 30 + \boxed{6}$	$60 + \boxed{10} = \boxed{70}$


multiple correct  
solutions are possible

multiple correct  
solutions are possible

ANSWER KEY

Copyright © 2014 Symphony Learning LLC. Permission is granted to reproduce this sheet for classroom use.






Read the story.

Dimitri has a dog that weighs 50 pounds. Lisa has a dog that weighs 7 pounds. How many pounds do the dogs weigh altogether?

ANSWER KEY

Draw dot cards to make a model for the story.



Write a number fact that matches your model.

$$\boxed{50} + \boxed{7} = \boxed{57}$$

Answer: 57 pounds

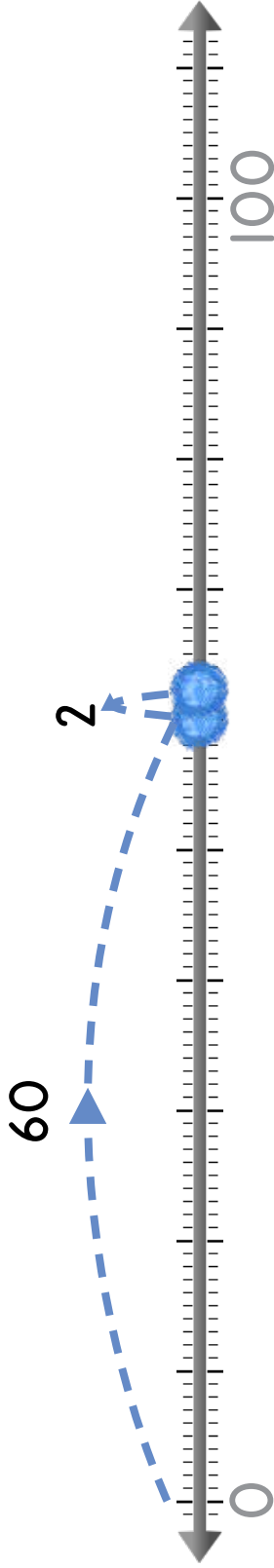




Read the story.

Sarah picked 60 apples. Terry picked 2 apples.  
How many apples did they pick altogether?

Draw dots to make a model for the story.



Write a number fact that matches your model.

$$60 + 2 = 62$$

Answer: 62 apples

ANSWER KEY

