


Name: _____ Date: _____



Draw a dot card that is the same as the dot cards put together.

Example



1

2

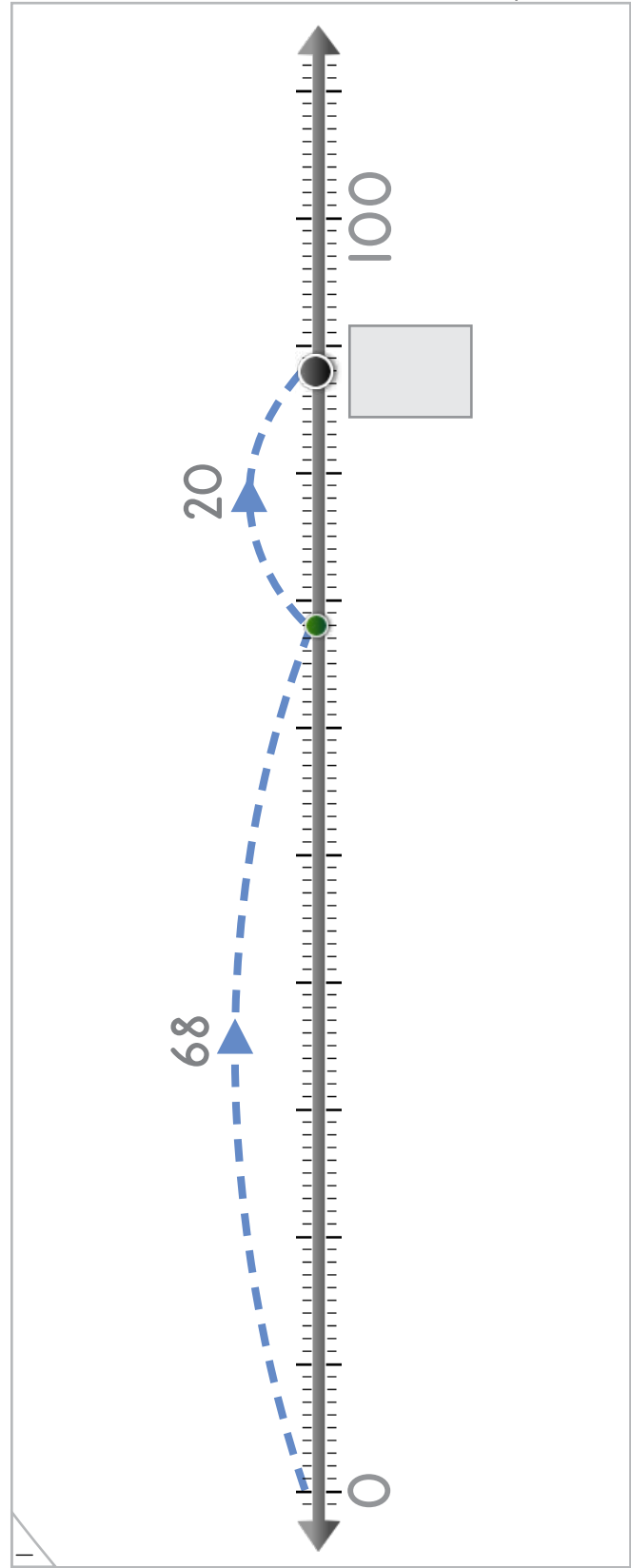
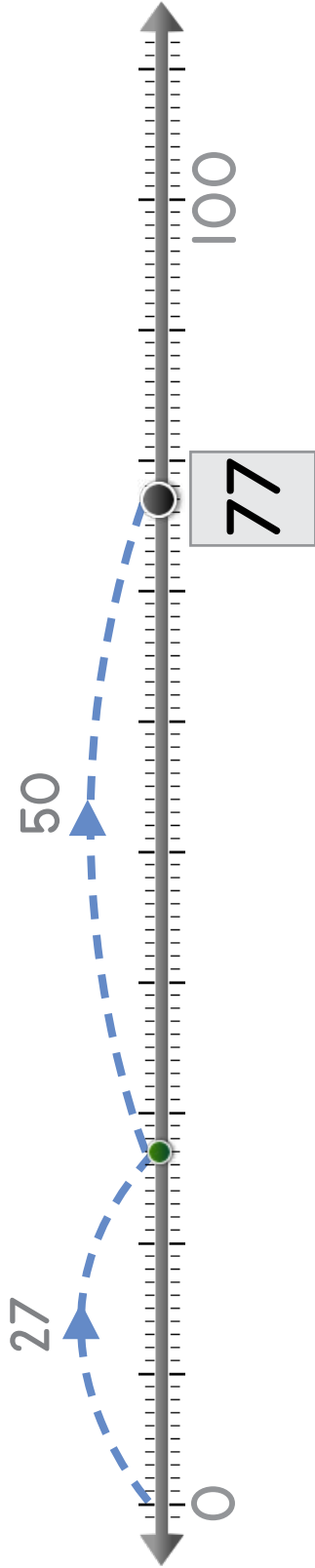





Manipulatives

The dot jumps two times. Write the number where the dot lands.

Example

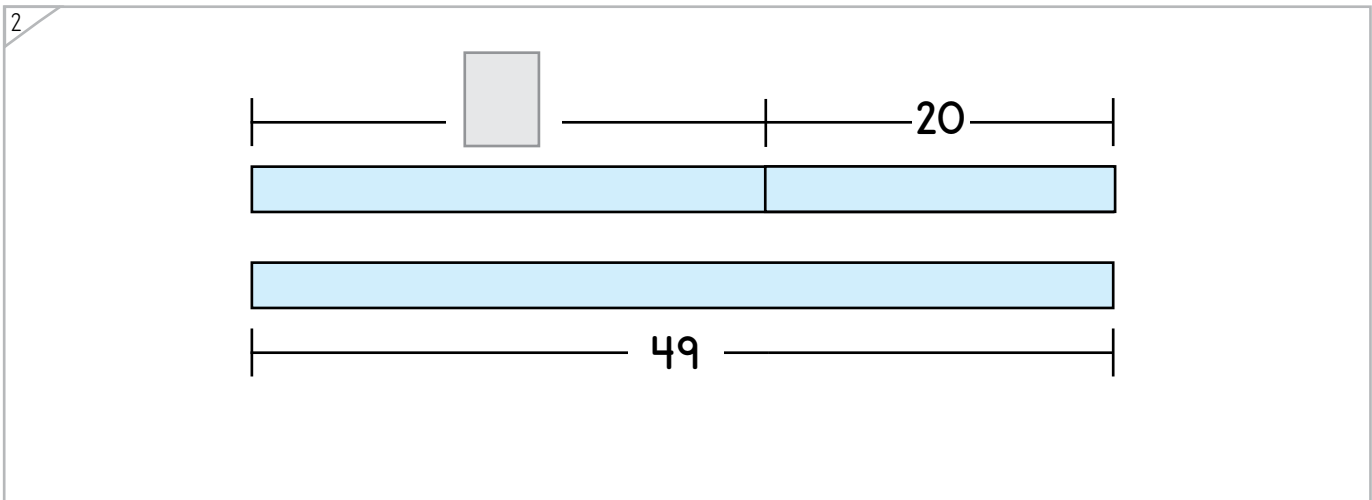
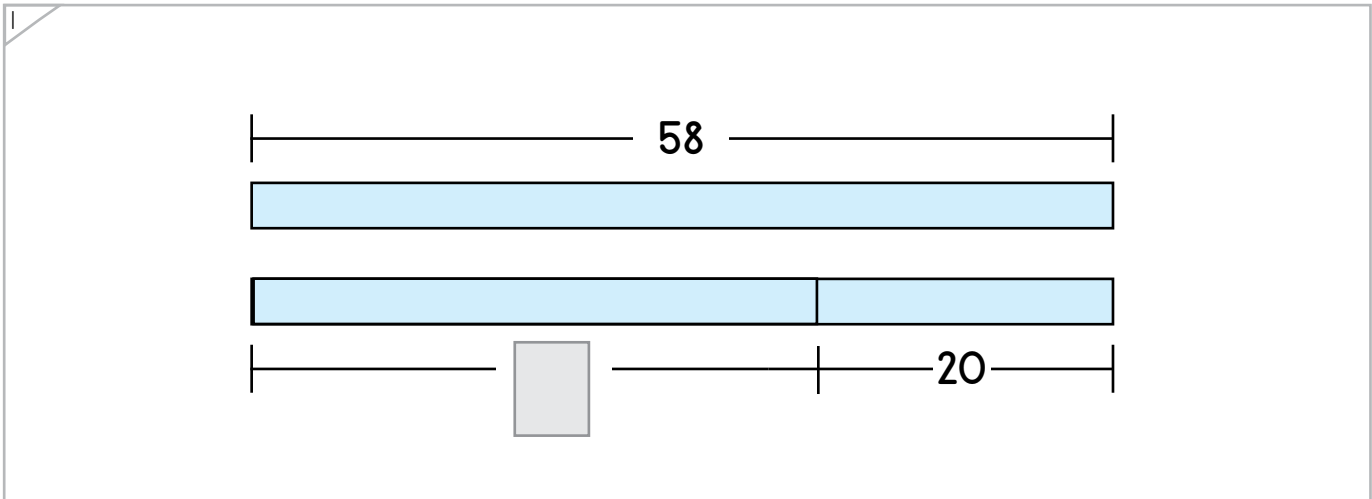
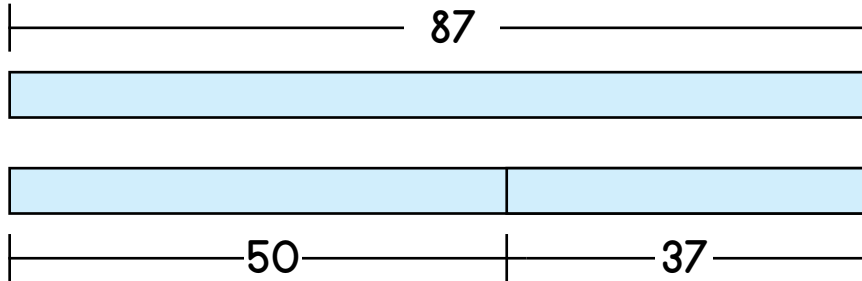


Name: _____ Date: _____



Complete each bar model.

Example



Copyright © 2014 Symphony Learning LLC. Permission is granted to reproduce this sheet for classroom use.



Name: _____ Date: _____



Draw dot cards and numbers to match.

Manipulatives and Symbols

1

$\square + \square = 66$

2

$64 + 20 = \square$

3

$79 = 29 + 50$

Copyright © 2014 Symphony Learning LLC. Permission is granted to reproduce this sheet for classroom use.





The dot jumps two times. Draw dots and numbers to complete the number problem.

1

28 60 88

0 100

$\square + \square = 88$

2

0 100

$21 + \square = 51$



Name: _____ Date: _____

Complete each bar model and number sentence.



Manipulatives and Symbols

1

66

$\square + 30 = \square$

2

30

$58 = \square + \square$

Copyright © 2014 Symphony Learning LLC. Permission is granted to reproduce this sheet for classroom use.



Name: _____ Date: _____



Symbols

Complete each number fact.

$49 + 20 = \square$	$\square = 72 + 20$
---------------------	---------------------

$20 + 33 = \square$	$40 + 17 = \square$
---------------------	---------------------

$\square = 70 + 12$	$66 + 20 = \square$
---------------------	---------------------

$50 + \square = \square$	$10 + \square = \square$
--------------------------	--------------------------

Copyright © 2014 Symphony Learning LLC. Permission is granted to reproduce this sheet for classroom use.



Name: _____ Date: _____



Symbols


Complete each number fact.

$51 + 40 = \square$	$\square = 22 + 30$
$88 + 10 = \square$	$27 + 40 = \square$
$\square = 3 + 90$	$65 + 30 = \square$
$34 + 30 = \square$	$68 + 20 = \square$
$13 + 40 = \square$	$\square = 55 + 30$
$49 + 40 = \square$	$72 + 20 = \square$
$\square = 30 + \square$	$60 + \square = \square$

Copyright © 2014 Symphony Learning LLC. Permission is granted to reproduce this sheet for classroom use.



Name: _____ Date: _____




Read the story.

Dimitri has a dog that weighs 34 kilograms. Lisa has a dog that weighs 20 kilograms. How many kilograms do the dogs weigh altogether?

Draw dot cards to make a model for the story.



Write a number fact that matches your model.



Answer: _____



Name: _____ Date: _____

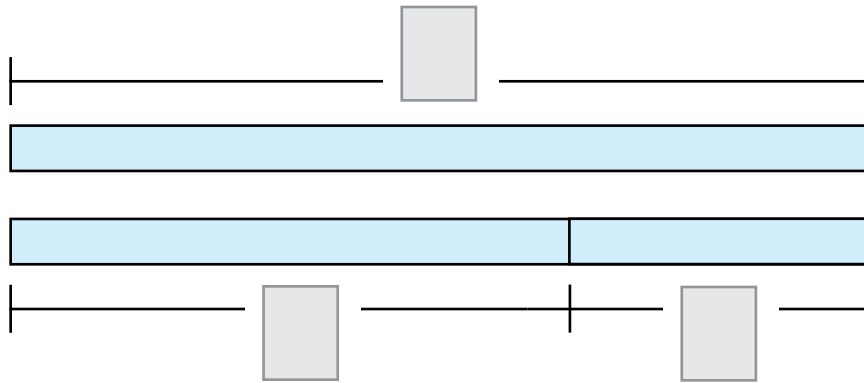


Word Problems

Read the story.

Sarah picked 40 strawberries. Terry picked 22 strawberries. How many strawberries did they pick in all?

Complete the bar model to make a model for the story.



Write a number fact that matches your model.

$$\square + \square = \square$$

Answer: _____

