

# Draw the missing dot cards.

Example

1

multiple correct solutions are possible

2

multiple correct solutions are possible

3

multiple correct solutions are possible

ANSWER KEY

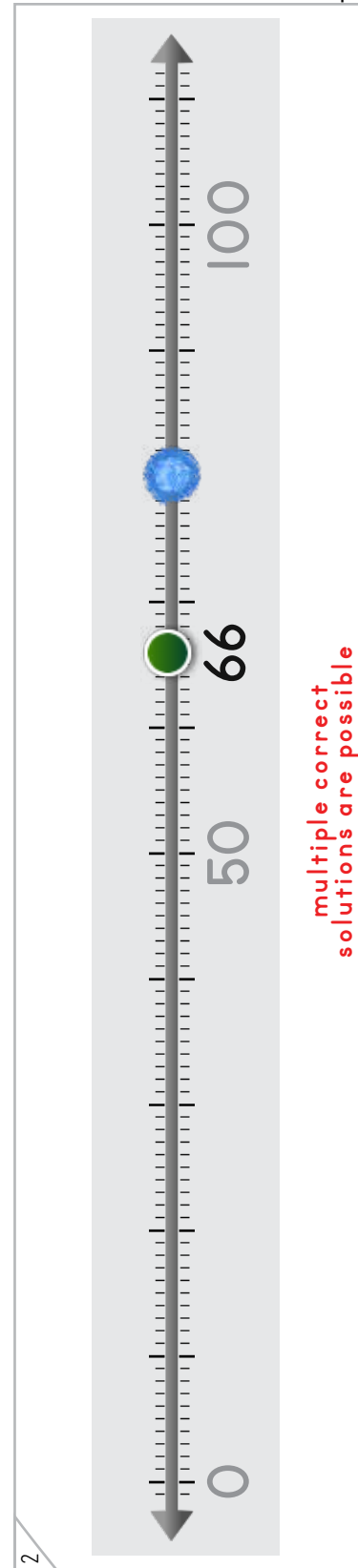
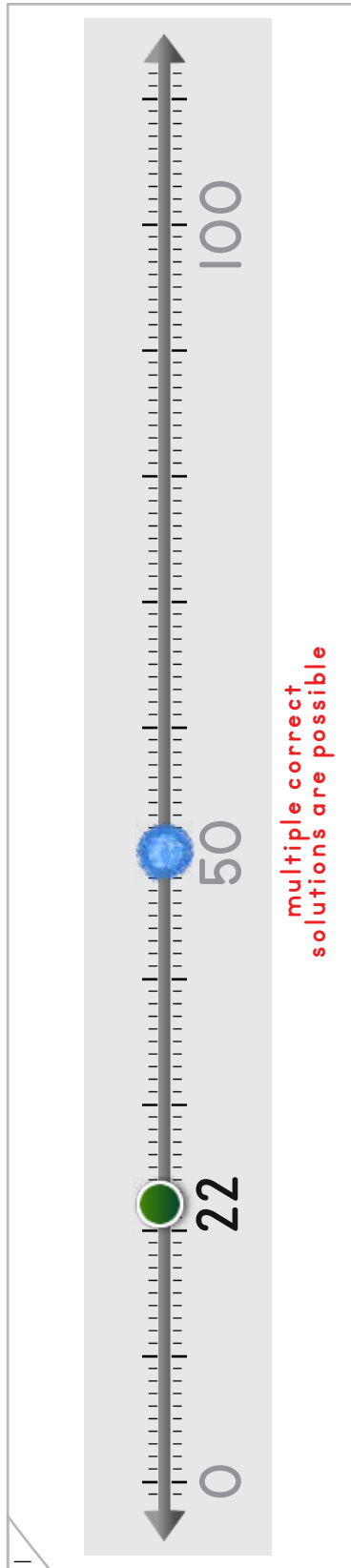

Copyright © 2014 Symphony Learning LLC. Permission is granted to reproduce this sheet for classroom use.





Draw a dot on the number line that is more.

Example




ANSWER KEY

Copyright © 2014 Symphony Learning LLC. Permission is granted to reproduce this sheet for classroom use.

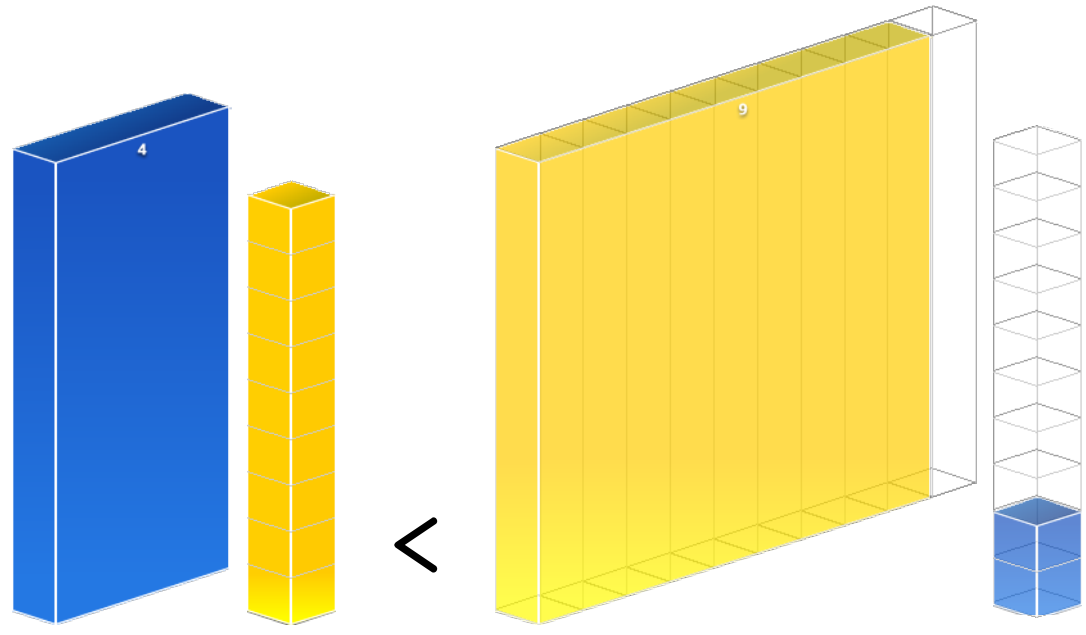


Name: \_\_\_\_\_ Date: \_\_\_\_\_

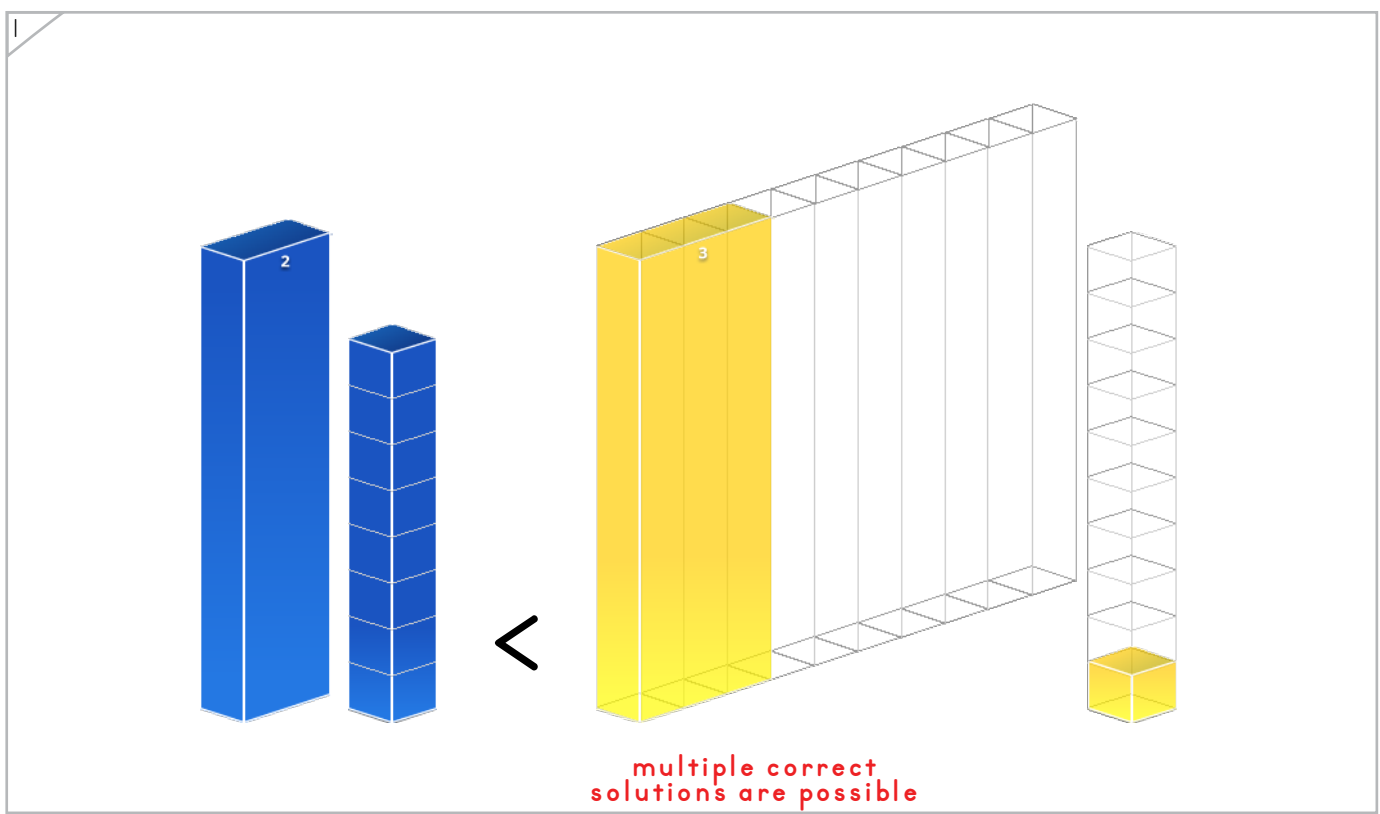


Draw bars to make each number comparison true.

Example



ANSWER KEY



Copyright © 2014 Symphony Learning LLC. Permission is granted to reproduce this sheet for classroom use.





Draw dot cards and numbers to match.

1

$25 < 62$

ANSWER KEY

2

$75 > 72$

3

$49 < 62$

multiple correct solutions are possible





Draw a dot and number to match.

1

A horizontal number line with arrows at both ends. Major tick marks are labeled 0, 50, and 100. There are 10 small tick marks between each major tick mark. A green dot is placed on the 31st tick mark, and a blue dot is placed on the 75th tick mark.

31 < 75

2

A horizontal number line with arrows at both ends. Major tick marks are labeled 0, 50, and 100. There are 10 small tick marks between each major tick mark. A green dot is placed on the 24th tick mark, and a blue dot is placed on the 67th tick mark.

24 < 67

3

A horizontal number line with arrows at both ends. Major tick marks are labeled 0, 50, and 100. There are 10 small tick marks between each major tick mark. A blue dot is placed on the 20th tick mark, and a green dot is placed on the 92nd tick mark.

92 > 20

multiple correct solutions are possible

ANSWER KEY

Copyright © 2014 Symphony Learning LLC. Permission is granted to reproduce this sheet for classroom use.





Draw bars and numbers to match.

1

93 > 67

multiple correct solutions are possible

2

21 < 41

multiple correct solutions are possible

ANSWER KEY

Copyright © 2014 Symphony Learning LLC. Permission is granted to reproduce this sheet for classroom use.





Symbols

Fill in the boxes to make each number comparison true.

$34 > 17$ multiple correct solutions are possible	$95 > 90$ multiple correct solutions are possible
$70 > 68$ multiple correct solutions are possible	$72 > 45$ multiple correct solutions are possible
$59 = 59$	$53 > 32$ multiple correct solutions are possible
$17 > 16$ multiple correct solutions are possible	$76 = 76$
$83 > 73$ multiple correct solutions are possible	$41 > 40$ multiple correct solutions are possible
$89 > 57$ multiple correct solutions are possible	$80 > 53$ multiple correct solutions are possible
$36 = 36$ multiple correct solutions are possible	$54 > 53$ multiple correct solutions are possible

ANSWER KEY

Copyright © 2014 Symphony Learning LLC. Permission is granted to reproduce this sheet for classroom use.



Name: \_\_\_\_\_ Date: \_\_\_\_\_



Symbols

Fill in the boxes to make each number comparison true.


$87 > 0$	$72 > 70$
$90 > 51$	$66 > 46$
$45 = 45$	$90 > 39$
$22 > 21$	$87 = 87$
$90 > 10$	$30 = 30$
$89 > 87$	$92 > 90$
$57 = 57$ <small>multiple correct solutions are possible</small>	$62 = 62$

ANSWER KEY

Copyright © 2014 Symphony Learning LLC. Permission is granted to reproduce this sheet for classroom use.



Name: \_\_\_\_\_ Date: \_\_\_\_\_




Read the story.

During a trip, Dimitri traveled 57 miles the first day and 29 miles the second day. On which day did Dimitri travel the farthest?

ANSWER KEY

Draw dot cards to make a model for the story.




Write a number fact that matches your model.

$$57 > 29$$

Answer: the first day

Copyright © 2014 Symphony Learning LLC. Permission is granted to reproduce this sheet for classroom use.



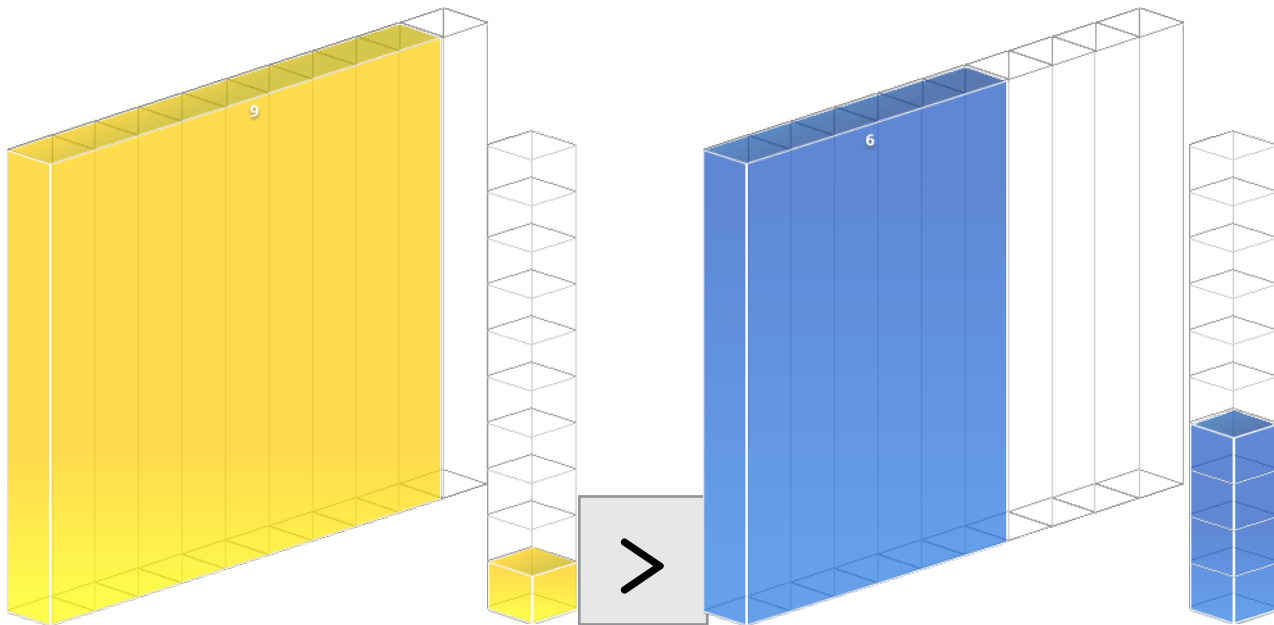


Read the story.

Julia collected 64 seashells. Isaac collected 91 seashells.  
Who collected fewer seashells?

ANSWER KEY

Draw bars to make a model for the story.



Write a number fact that matches your model.

91 > 64

Answer: Julia

